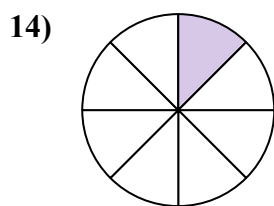
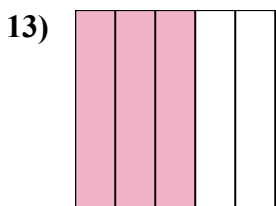
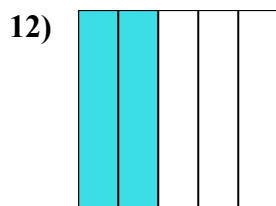
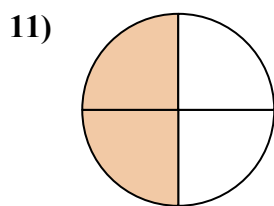
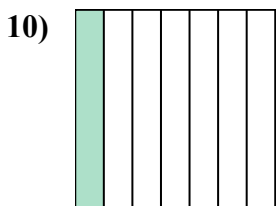
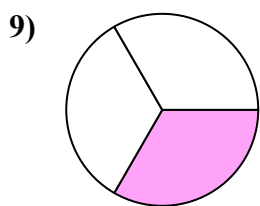

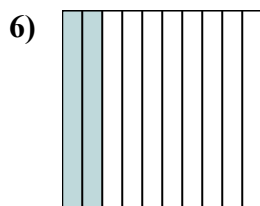
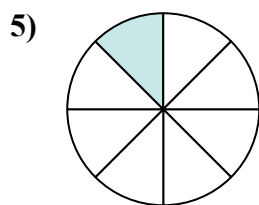
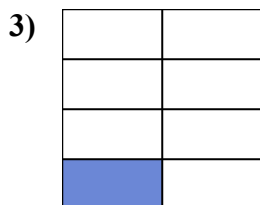
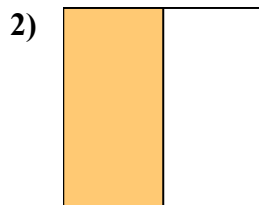

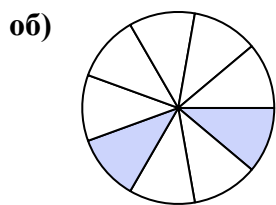




Напишите заштрихованную сумму в форме слова.



**ОТВЕТЫ**

об. две девятые

1. \_\_\_\_\_

2. \_\_\_\_\_

3. \_\_\_\_\_

4. \_\_\_\_\_

5. \_\_\_\_\_

6. \_\_\_\_\_

7. \_\_\_\_\_

8. \_\_\_\_\_

9. \_\_\_\_\_

10. \_\_\_\_\_

11. \_\_\_\_\_

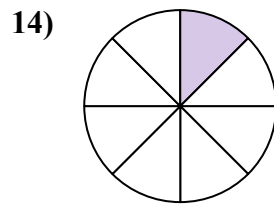
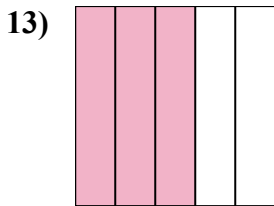
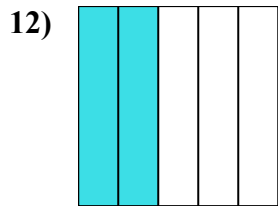
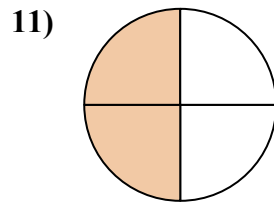
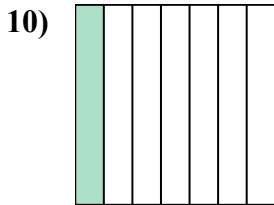
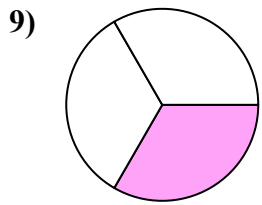
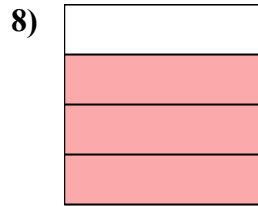
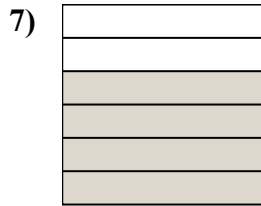
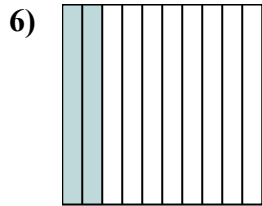
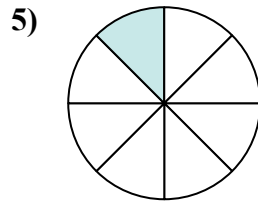

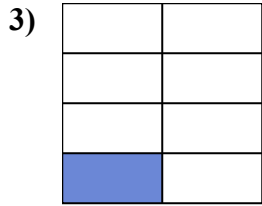
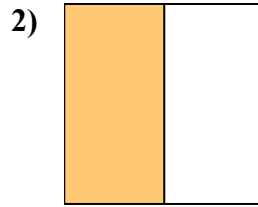
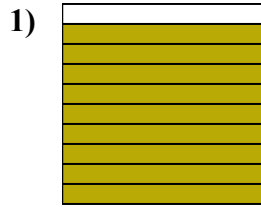
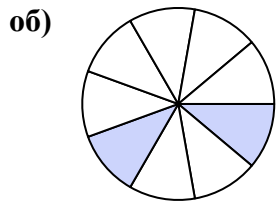
12. \_\_\_\_\_

13. \_\_\_\_\_

14. \_\_\_\_\_



Напишите заштрихованную сумму в форме слова.



**ОТВЕТЫ**

об. две девятые

1. девять десятых

2. одна половина

3. одна седьмая

4. семь девятых

5. одна восьмая

6. две десятых

7. четыре шестых

8. три четверти

9. одна треть

10. одна седьмая

11. две четверти

12. две пятых

13. три пятых

14. одна восьмая