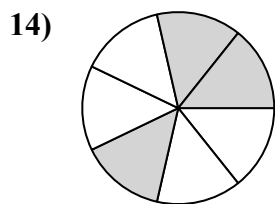
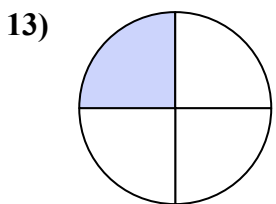
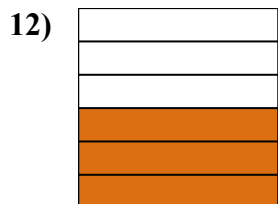
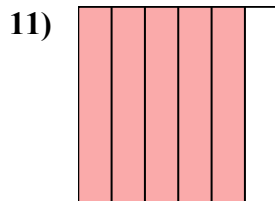
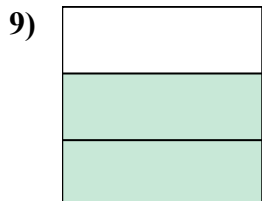
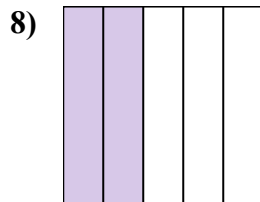
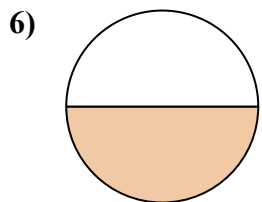
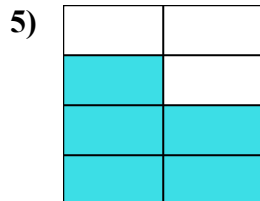
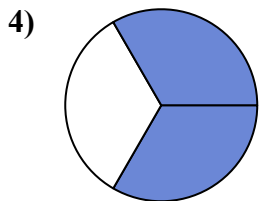
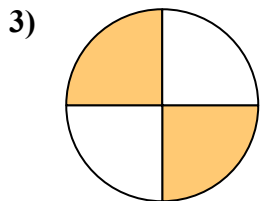
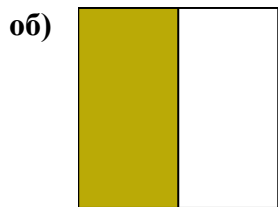




Напишите заштрихованную сумму в форме слова.



ОТВЕТЫ

об. **одна половина**

1. _____

2. _____

3. _____

4. _____

5. _____

6. _____

7. _____

8. _____

9. _____

10. _____

11. _____

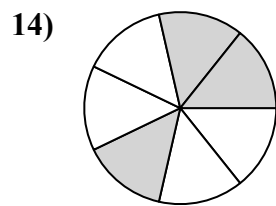
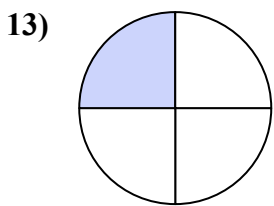
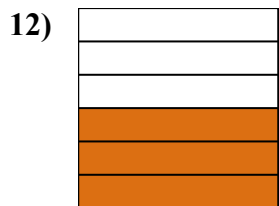
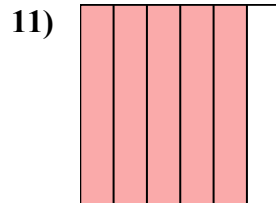

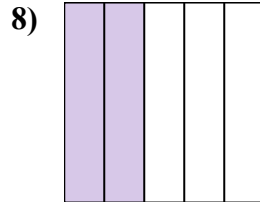
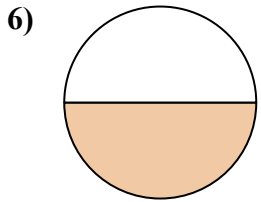
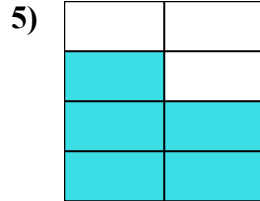
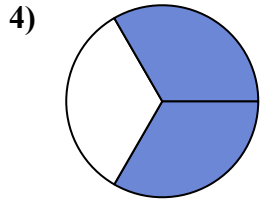
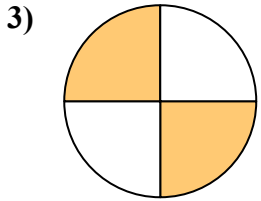
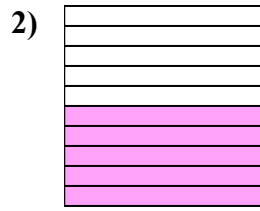
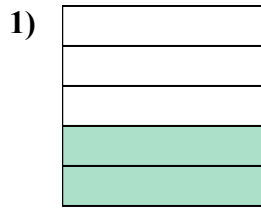
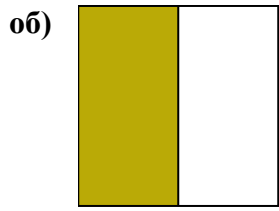
12. _____

13. _____

14. _____



Напишите заштрихованную сумму в форме слова.



ОТВЕТЫ

об. одна половина

1. две пятых

2. пять десятых

3. две четверти

4. две третьих

5. пять седьмых

6. одна половина

7. четыре восьмых

8. две пятых

9. две третьих

10. одна девятая

11. пять шестых

12. три шестых

13. одна четвертая

14. три седьмых