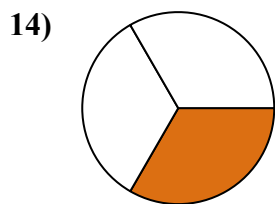
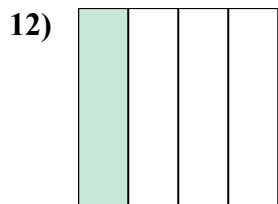
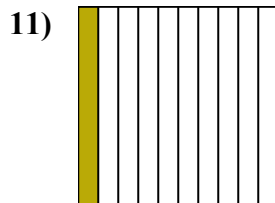
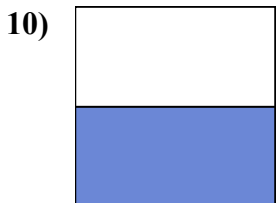

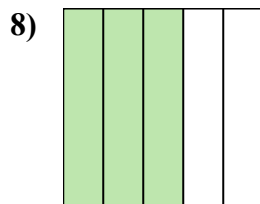
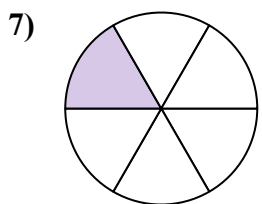
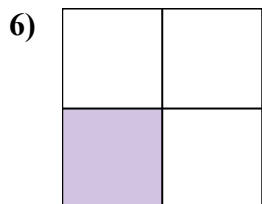
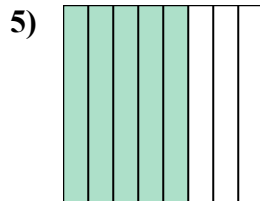
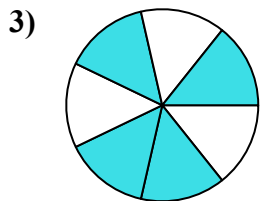
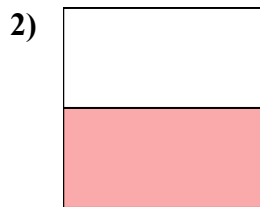
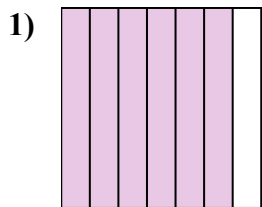
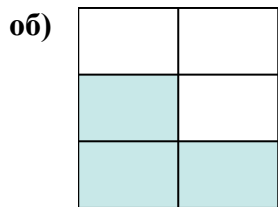




Напишите заштрихованную сумму в форме слова.



**ОТВЕТЫ**

об. **три пятых**

1. \_\_\_\_\_

2. \_\_\_\_\_

3. \_\_\_\_\_

4. \_\_\_\_\_

5. \_\_\_\_\_

6. \_\_\_\_\_

7. \_\_\_\_\_

8. \_\_\_\_\_

9. \_\_\_\_\_

10. \_\_\_\_\_

11. \_\_\_\_\_

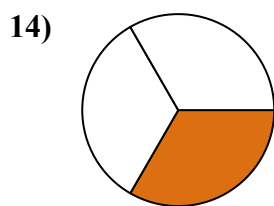
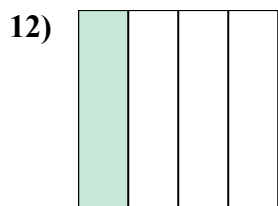
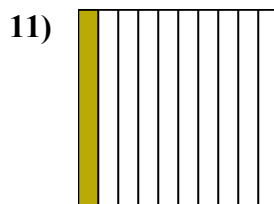
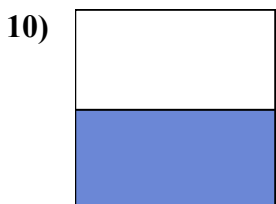

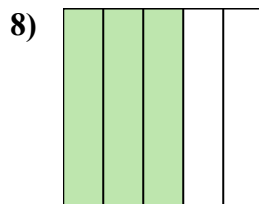
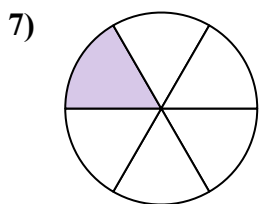
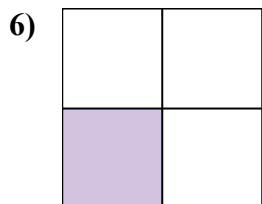
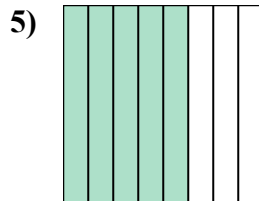
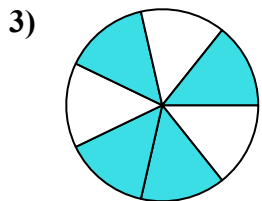
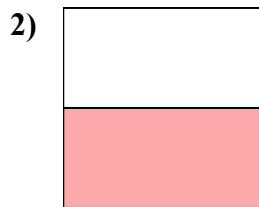
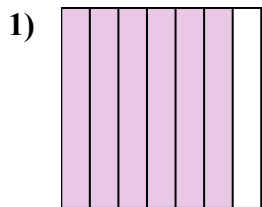
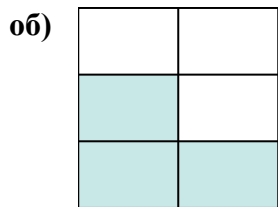
12. \_\_\_\_\_

13. \_\_\_\_\_

14. \_\_\_\_\_



Напишите заштрихованную сумму в форме слова.



**ОТВЕТЫ**

об. три пятых

1. шесть седьмых

2. одна половина

3. четыре седьмых

4. две восьмых

5. пять восьмых

6. одна треть

7. одна шестая

8. три пятых

9. три четверти

10. одна половина

11. одна десятая

12. одна четвертая

13. четыре десятых

14. одна треть