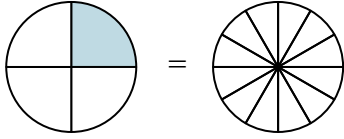


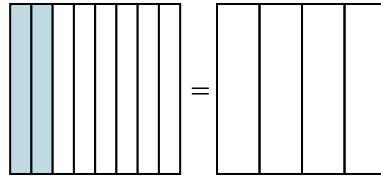


Закрасьте визуальные дроби, чтобы найти ответ.

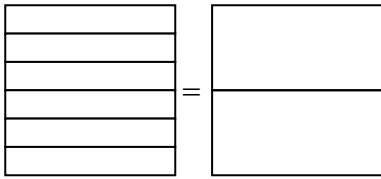
об)  $\frac{1}{4} = \frac{3}{12}$



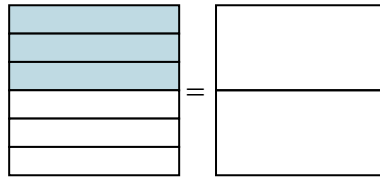
1)  $\frac{2}{8} =$



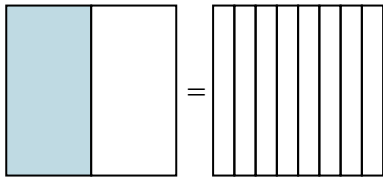
2)  $\frac{0}{6} =$



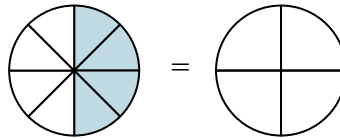
3)  $\frac{3}{6} =$



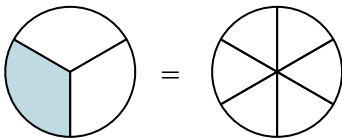
4)  $\frac{1}{2} =$



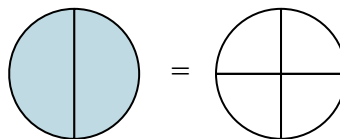
5)  $\frac{4}{8} =$



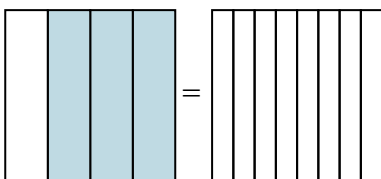
6)  $\frac{1}{3} =$



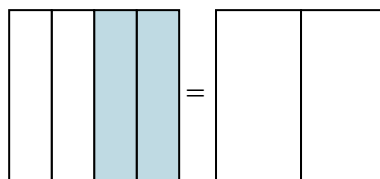
7)  $\frac{2}{2} =$



8)  $\frac{3}{4} =$



9)  $\frac{2}{4} =$

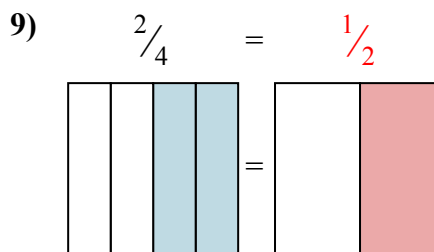
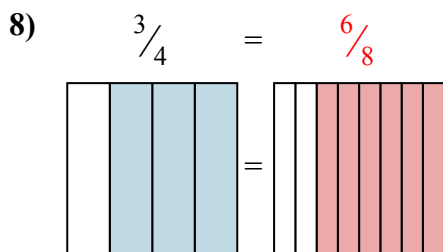
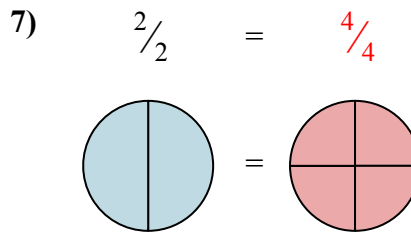
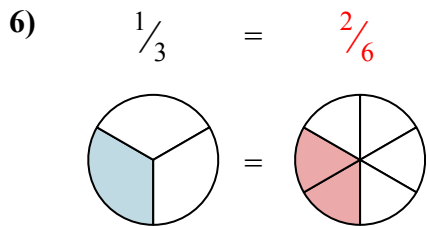
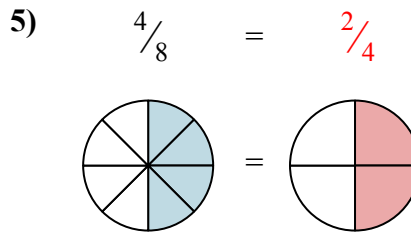
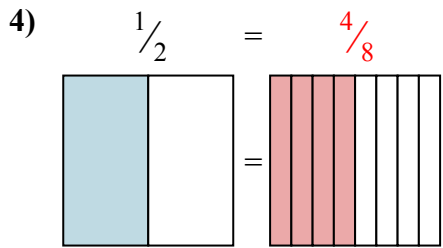
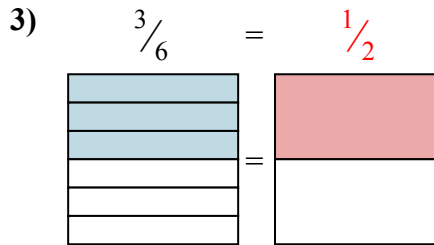
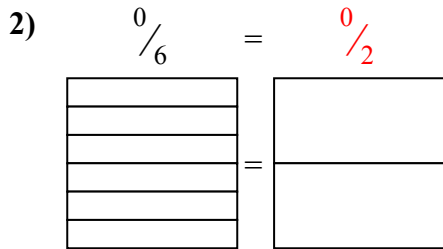
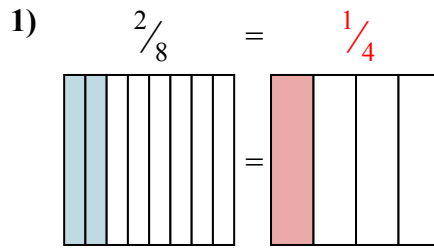
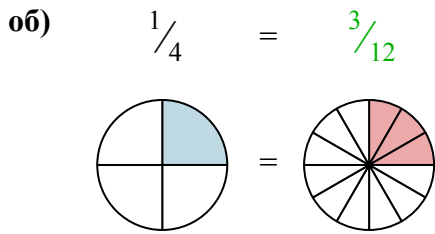


**ОТВЕТЫ**

- об.  $\frac{3}{12}$
- 1. \_\_\_\_\_
- 2. \_\_\_\_\_
- 3. \_\_\_\_\_
- 4. \_\_\_\_\_
- 5. \_\_\_\_\_
- 6. \_\_\_\_\_
- 7. \_\_\_\_\_
- 8. \_\_\_\_\_
- 9. \_\_\_\_\_



Закрасьте визуальные дроби, чтобы найти ответ.



**ОТВЕТЫ**

- об.  $\frac{3}{12}$
- 1.  $\frac{1}{4}$
- 2.  $\frac{0}{2}$
- 3.  $\frac{1}{2}$
- 4.  $\frac{4}{8}$
- 5.  $\frac{2}{4}$
- 6.  $\frac{2}{6}$
- 7.  $\frac{4}{4}$
- 8.  $\frac{6}{8}$
- 9.  $\frac{1}{2}$