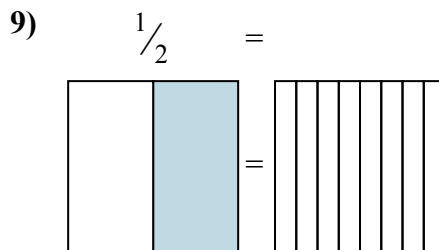
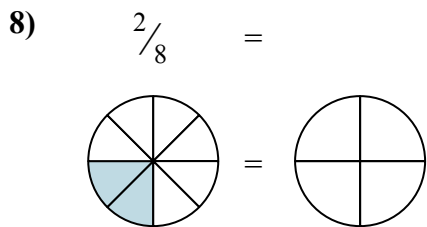
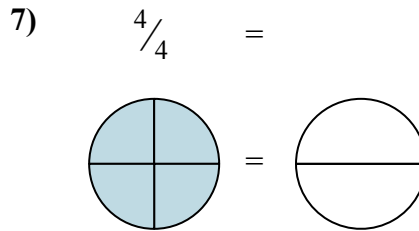
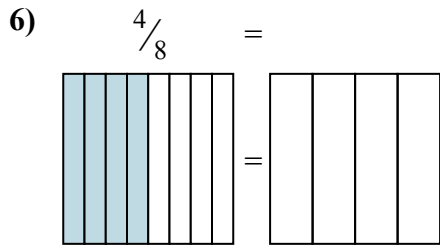
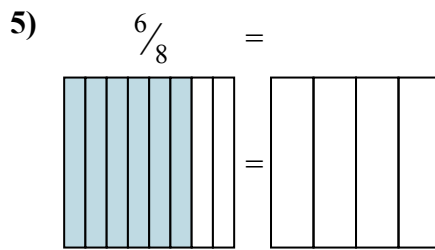
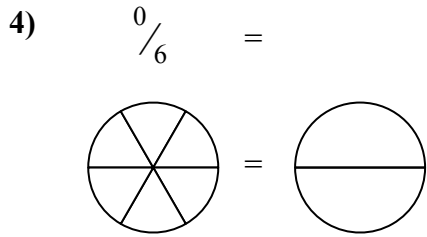
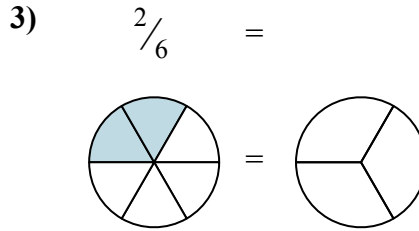
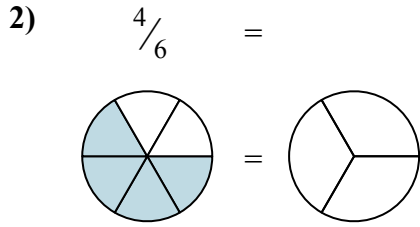
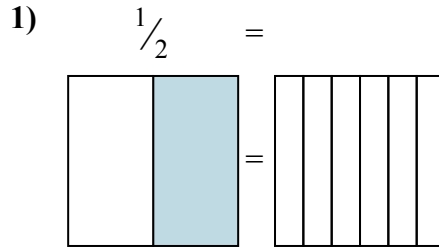
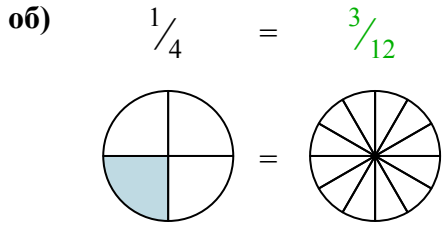




Закрасьте визуальные дроби, чтобы найти ответ.

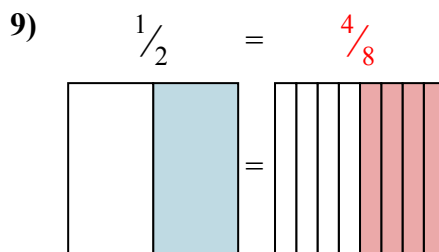
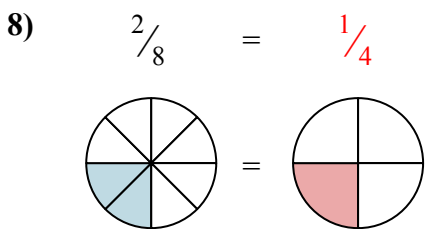
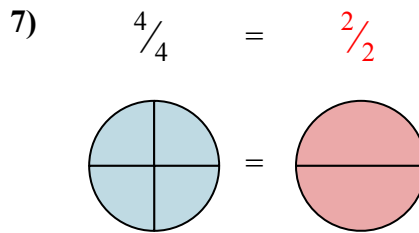
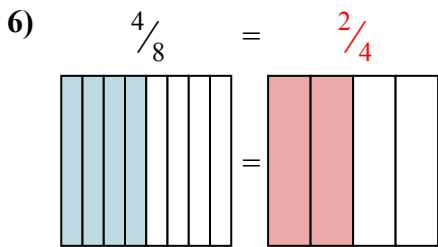
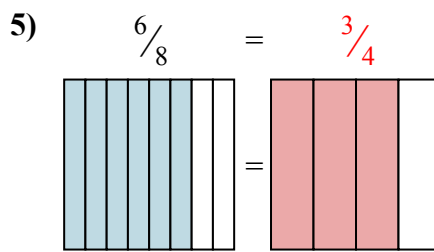
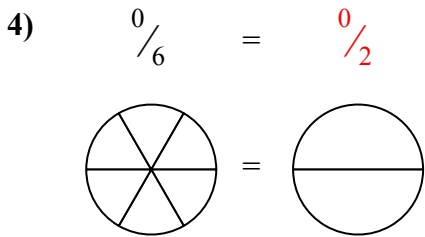
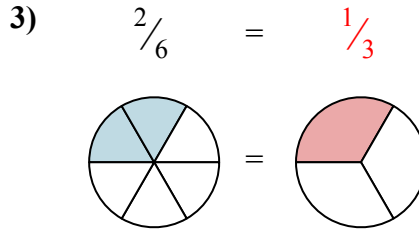
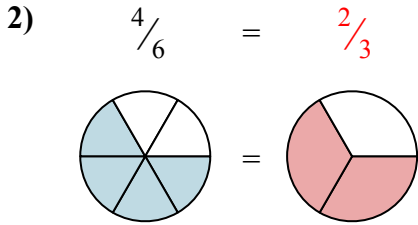
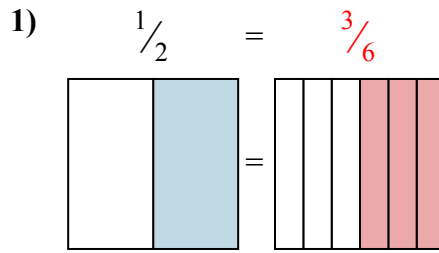
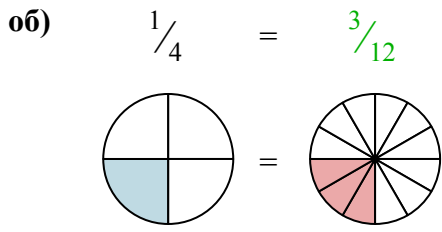


**Ответы**

- об.  $\frac{3}{12}$
1. \_\_\_\_\_
2. \_\_\_\_\_
3. \_\_\_\_\_
4. \_\_\_\_\_
5. \_\_\_\_\_
6. \_\_\_\_\_
7. \_\_\_\_\_
8. \_\_\_\_\_
9. \_\_\_\_\_



Закрасьте визуальные дроби, чтобы найти ответ.



**ОТВЕТЫ**

- об.  $\frac{3}{12}$
- 1.  $\frac{3}{6}$
- 2.  $\frac{2}{3}$
- 3.  $\frac{1}{3}$
- 4.  $\frac{0}{2}$
- 5.  $\frac{3}{4}$
- 6.  $\frac{2}{4}$
- 7.  $\frac{2}{2}$
- 8.  $\frac{1}{4}$
- 9.  $\frac{4}{8}$