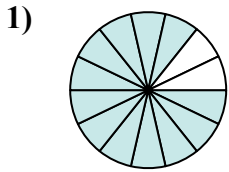


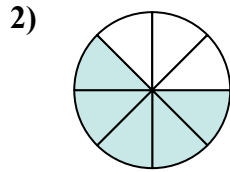


Определите под какой буквой находятся соответствующие дроби.

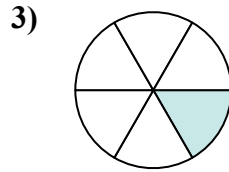
ОТВЕТЫ



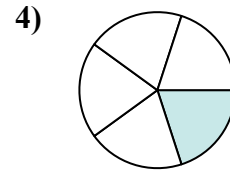
$$\frac{12}{14}$$



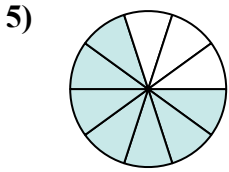
$$\frac{5}{8}$$



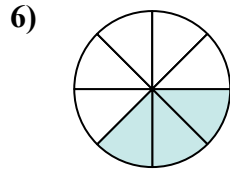
$$\frac{1}{6}$$



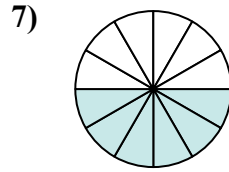
$$\frac{1}{5}$$



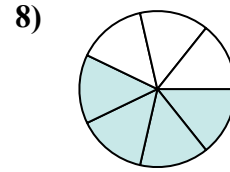
$$\frac{7}{10}$$



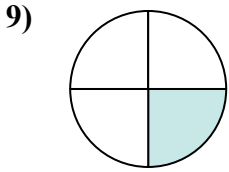
$$\frac{3}{8}$$



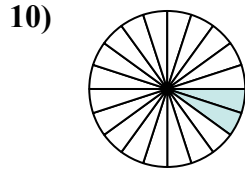
$$\frac{6}{12}$$



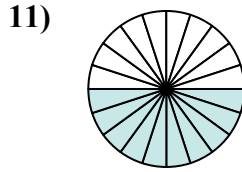
$$\frac{4}{7}$$



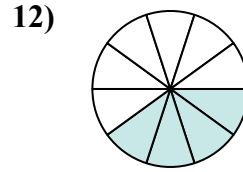
$$\frac{1}{4}$$



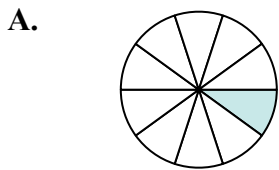
$$\frac{2}{20}$$



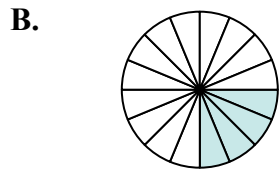
$$\frac{10}{20}$$



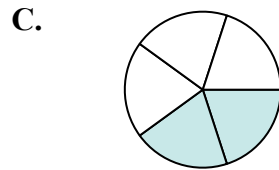
$$\frac{4}{10}$$



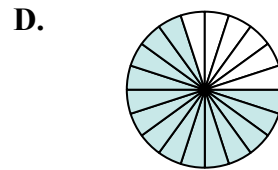
$$\frac{1}{10}$$



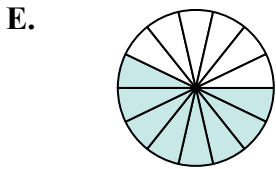
$$\frac{4}{16}$$



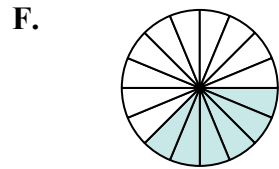
$$\frac{2}{5}$$



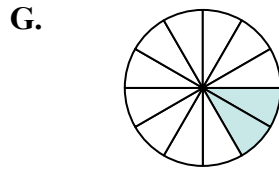
$$\frac{14}{20}$$



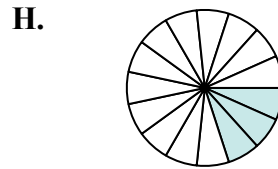
$$\frac{8}{14}$$



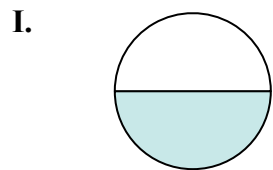
$$\frac{6}{16}$$



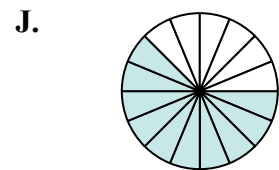
$$\frac{2}{12}$$



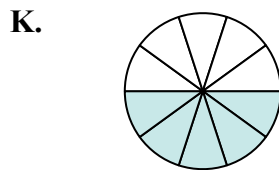
$$\frac{3}{15}$$



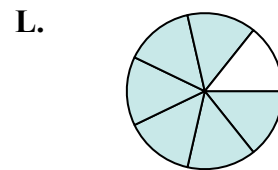
$$\frac{1}{2}$$



$$\frac{10}{16}$$



$$\frac{5}{10}$$



$$\frac{6}{7}$$

1. _____

2. _____

3. _____

4. _____

5. _____

6. _____

7. _____

8. _____

9. _____

10. _____

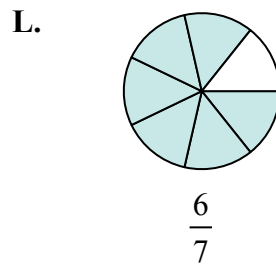
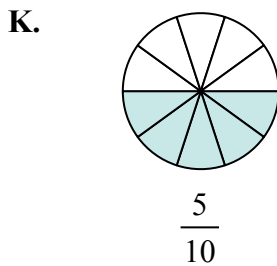
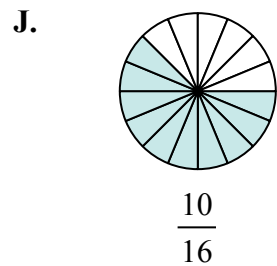
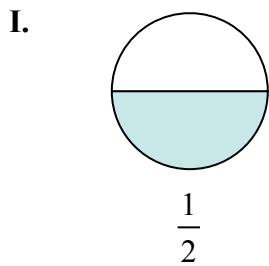
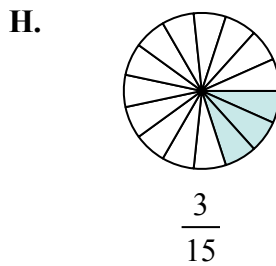
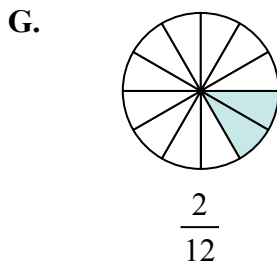
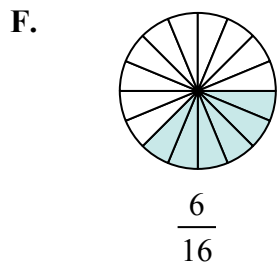
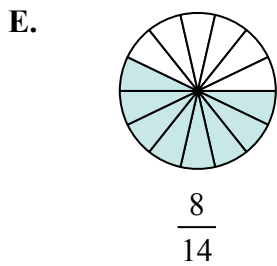
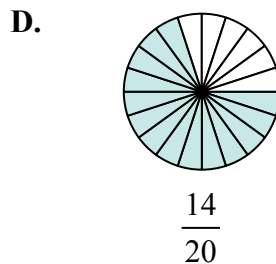
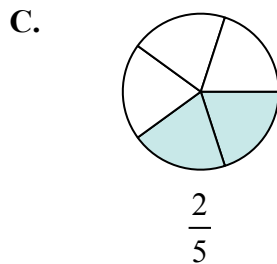
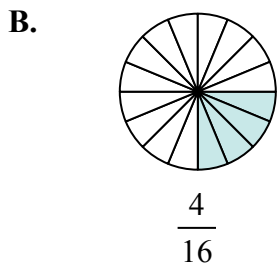
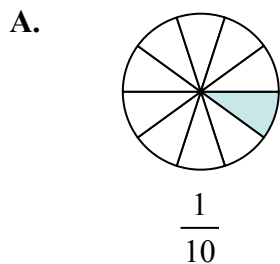
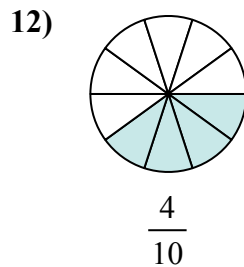
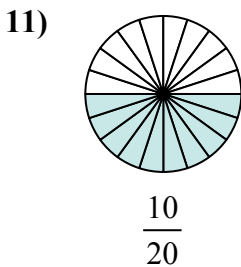
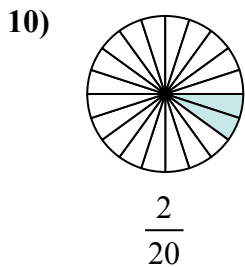
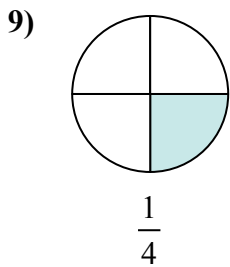
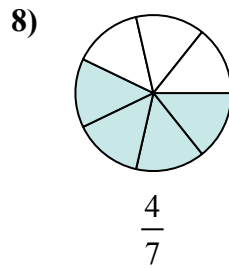
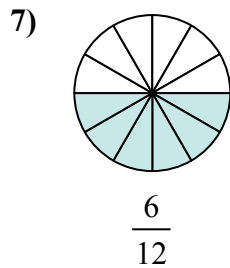
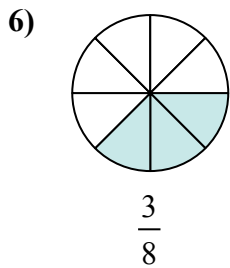
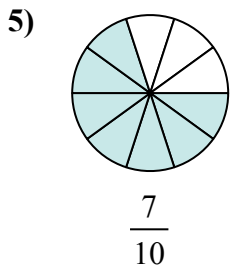
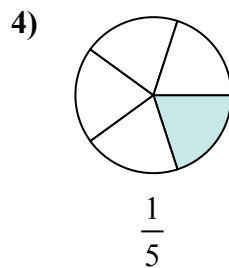
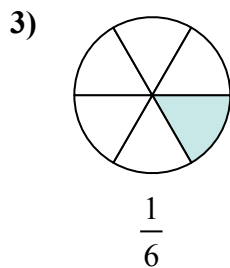
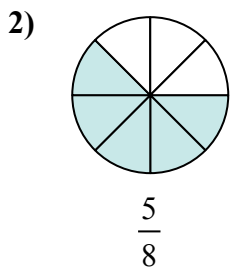
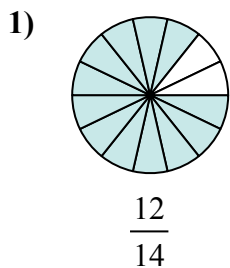
11. _____

12. _____



Определите под какой буквой находятся соответствующие дроби.

ОТВЕТЫ



1. **L**

2. **J**

3. **G**

4. **H**

5. **D**

6. **F**

7. **I**

8. **E**

9. **B**

10. **A**

11. **K**

12. **C**