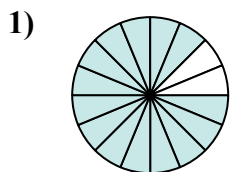


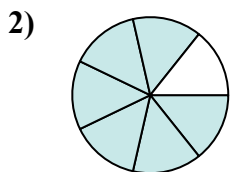


Определите под какой буквой находятся соответствующие дроби.

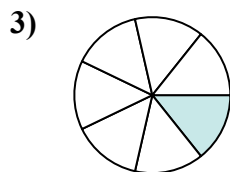
ОТВЕТЫ



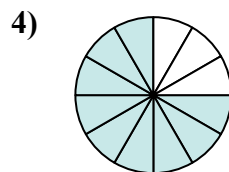
$$\frac{14}{16}$$



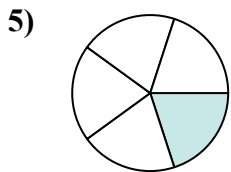
$$\frac{6}{7}$$



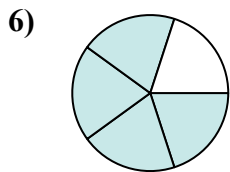
$$\frac{1}{7}$$



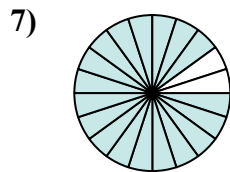
$$\frac{9}{12}$$



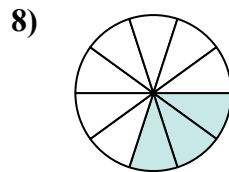
$$\frac{1}{5}$$



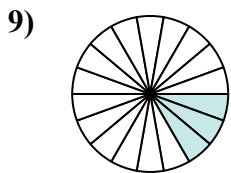
$$\frac{4}{5}$$



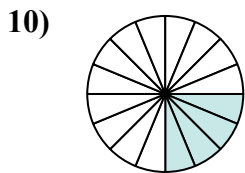
$$\frac{18}{20}$$



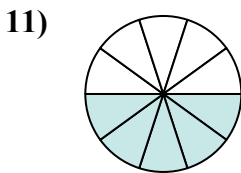
$$\frac{3}{10}$$



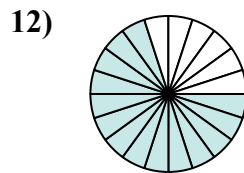
$$\frac{3}{18}$$



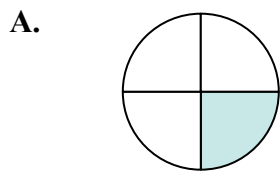
$$\frac{4}{16}$$



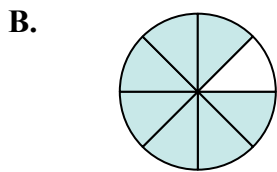
$$\frac{5}{10}$$



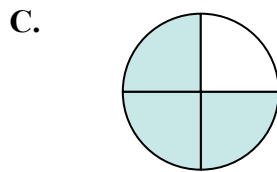
$$\frac{14}{20}$$



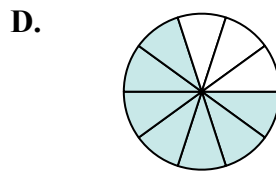
$$\frac{1}{4}$$



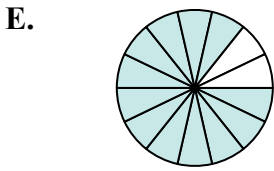
$$\frac{7}{8}$$



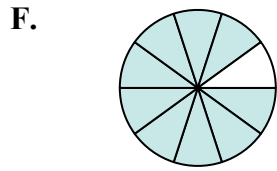
$$\frac{3}{4}$$




$$\frac{7}{10}$$



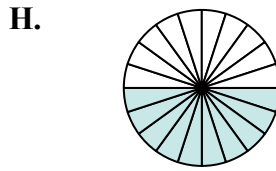
$$\frac{12}{14}$$



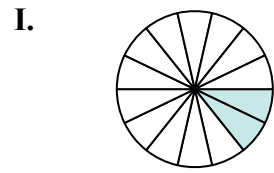
$$\frac{9}{10}$$



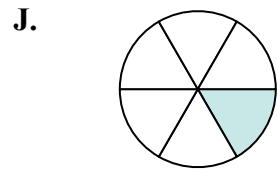
$$\frac{6}{20}$$



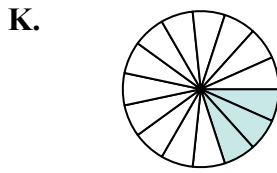
$$\frac{10}{20}$$



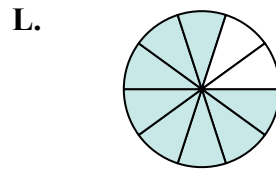
$$\frac{2}{14}$$



$$\frac{1}{6}$$



$$\frac{3}{15}$$



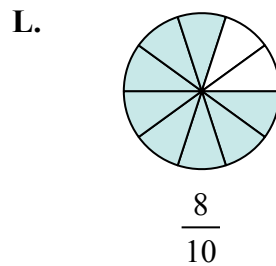
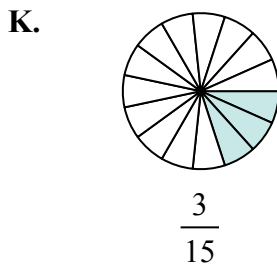
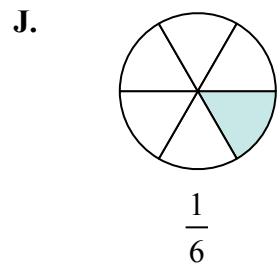
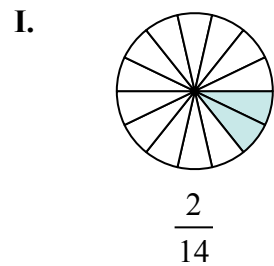
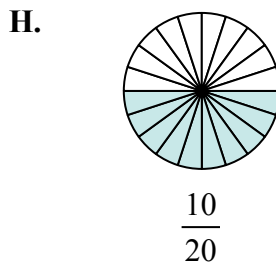
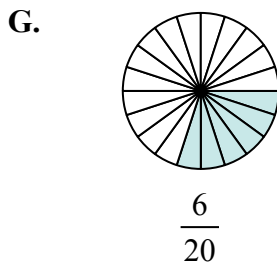
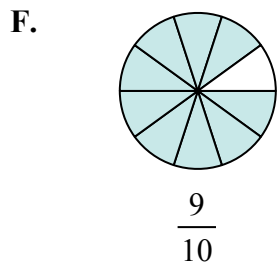
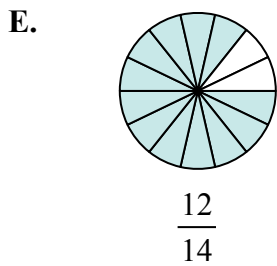
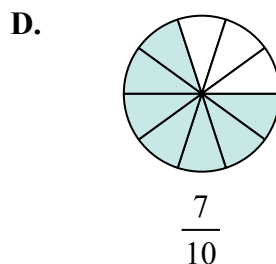
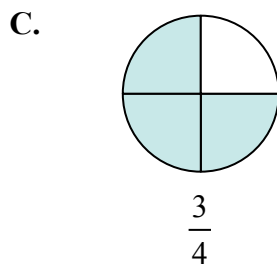
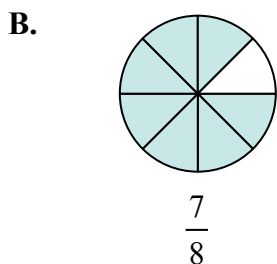
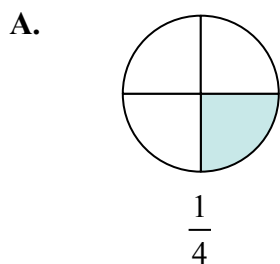
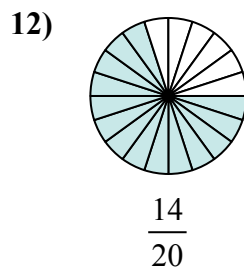
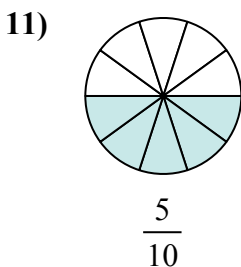
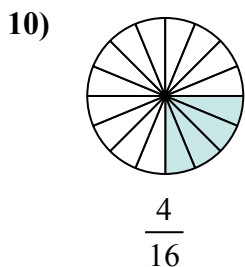
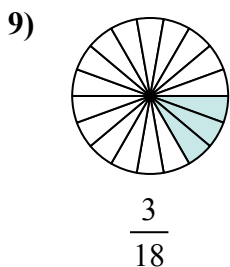
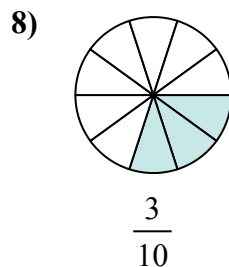
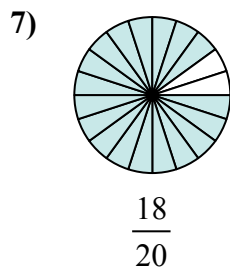
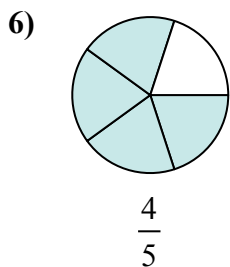
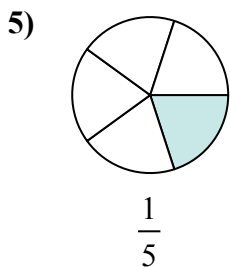
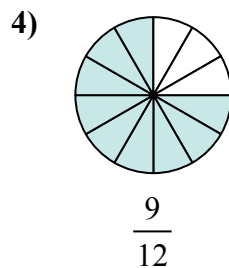
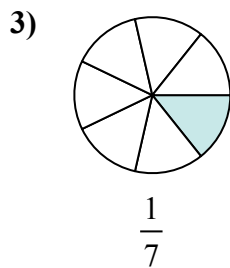
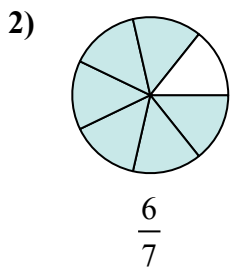
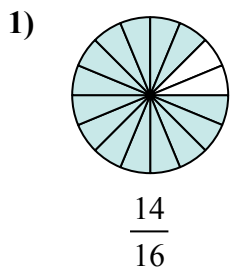
$$\frac{8}{10}$$

1. _____
2. _____
3. _____
4. _____
5. _____
6. _____
7. _____
8. _____
9. _____
10. _____
11. _____
12. _____



Определите под какой буквой находятся соответствующие дроби.

ОТВЕТЫ



1. В
2. Е
3. I
4. С
5. К
6. L
7. F
8. G
9. J
10. А
11. H
12. D