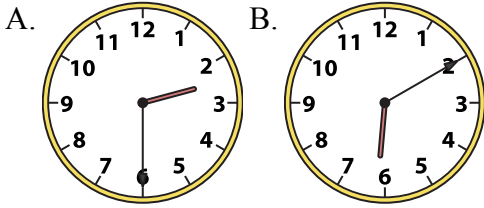




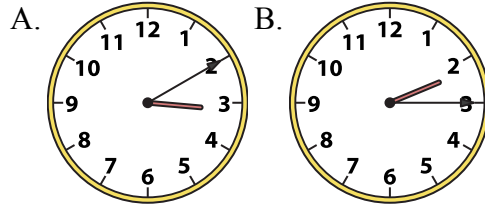
Решите каждую задачу.

**ОТВЕТЫ**

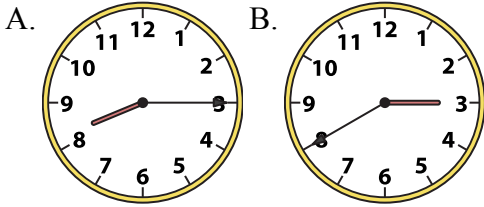
1) 2:30



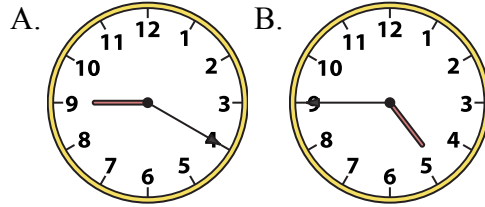
2) 2:15



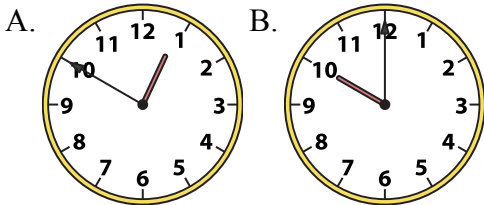
3) 8:15



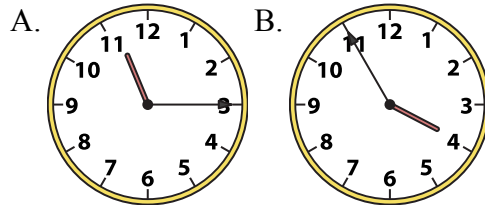
4) 4:45



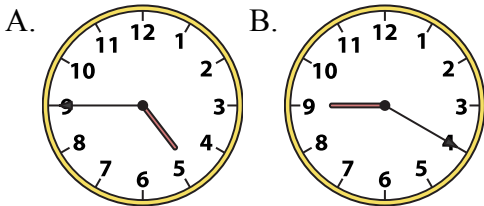
5) 10:00



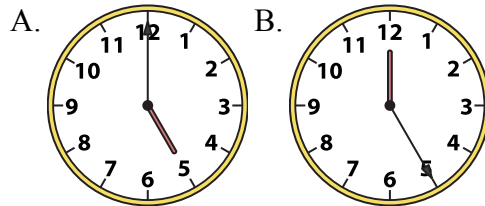
6) 11:15



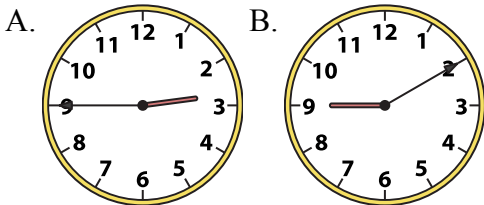
7) 4:45



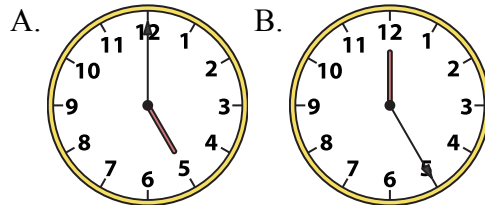
8) 5:00



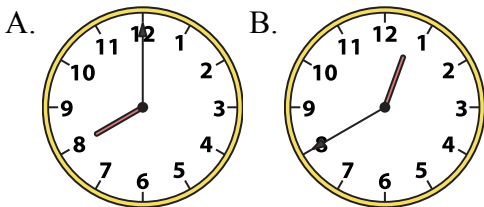
9) 2:45



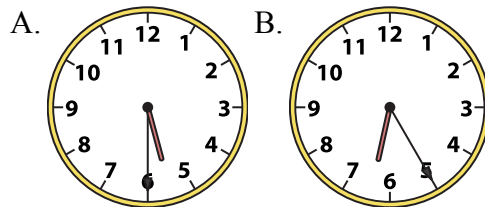
10) 5:00



11) 8:00



12) 5:30



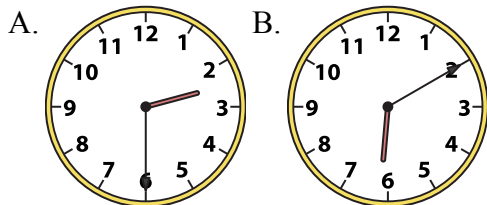
1. \_\_\_\_\_
2. \_\_\_\_\_
3. \_\_\_\_\_
4. \_\_\_\_\_
5. \_\_\_\_\_
6. \_\_\_\_\_
7. \_\_\_\_\_
8. \_\_\_\_\_
9. \_\_\_\_\_
10. \_\_\_\_\_
11. \_\_\_\_\_
12. \_\_\_\_\_



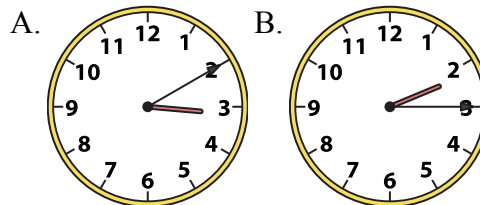
Решите каждую задачу.

**ОТВЕТЫ**

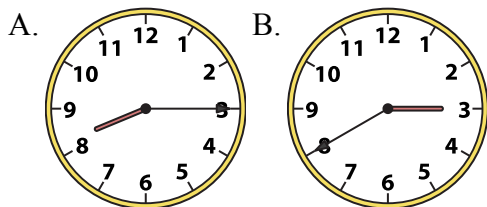
1) 2:30



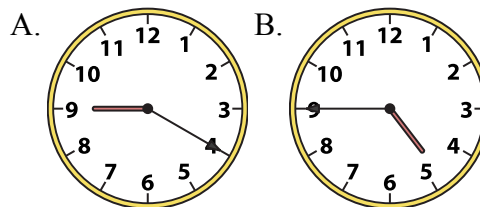
2) 2:15



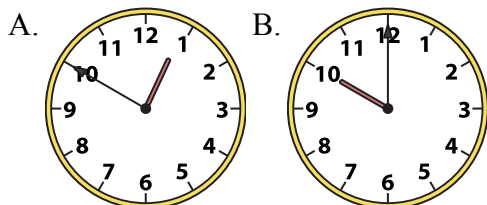
3) 8:15



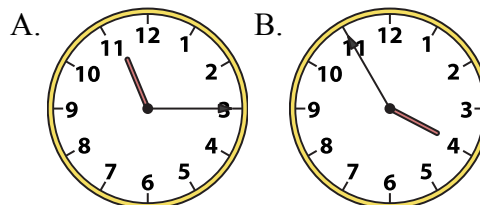
4) 4:45



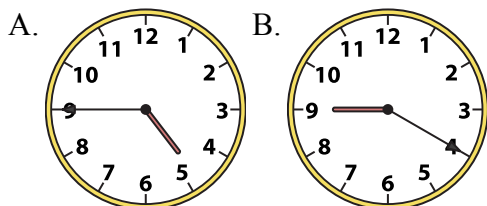
5) 10:00



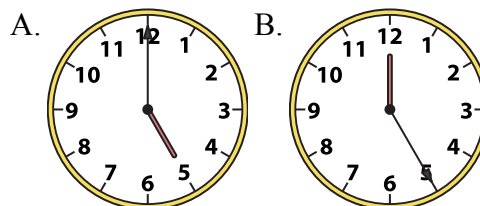
6) 11:15



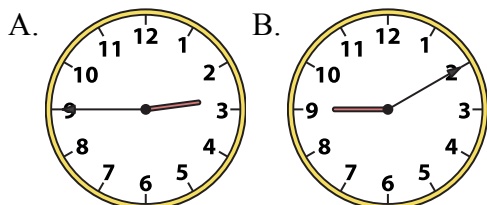
7) 4:45



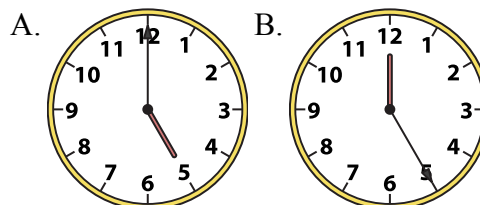
8) 5:00



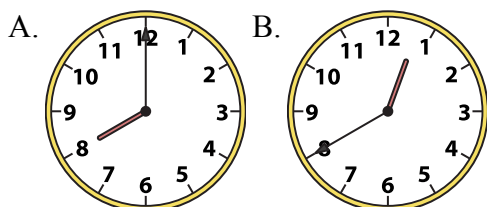
9) 2:45



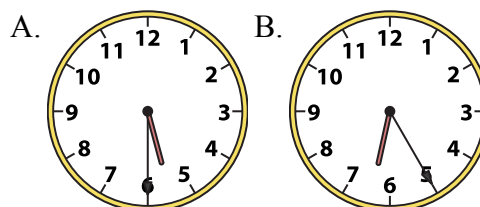
10) 5:00



11) 8:00



12) 5:30

1.     **A**    2.     **B**    3.     **A**    4.     **B**    5.     **B**    6.     **A**    7.     **A**    8.     **A**    9.     **A**    10.     **A**    11.     **A**    12.     **A**