




Решите каждую задачу.


ОТВЕТЫ

1) 12:15

A.




B.




2) 6:30

A.




B.




3) 7:00

A.




B.




4) 8:00

A.



B.




5) 2:00

A.



B.




6) 2:00

A.




B.




7) 12:15

A.




B.




8) 2:30

A.




B.




9) 9:30

A.




B.




10) 3:00

A.




B.



11) 6:15

A.



B.




12) 8:45

A.



B.



1. _____
2. _____
3. _____
4. _____
5. _____
6. _____
7. _____
8. _____
9. _____
10. _____
11. _____
12. _____




Решите каждую задачу.


ОТВЕТЫ

1) 12:15

A.

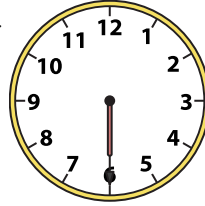


B.




2) 6:30

A.




B.



3) 7:00

A.




B.




4) 8:00

A.



B.



5) 2:00

A.




B.




6) 2:00

A.




B.




7) 12:15

A.




B.




8) 2:30

A.




B.




9) 9:30

A.




B.




10) 3:00

A.




B.



11) 6:15

A.



B.




12) 8:45

A.



B.

1. В2. В3. В4. В5. В6. А7. В8. А9. А10. В11. В12. В