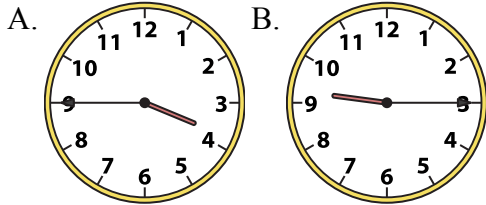




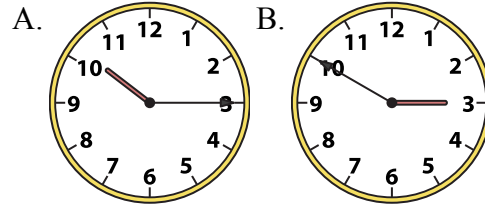
Решите каждую задачу.

ОТВЕТЫ

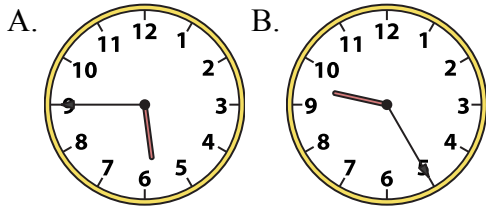
1) 3:45



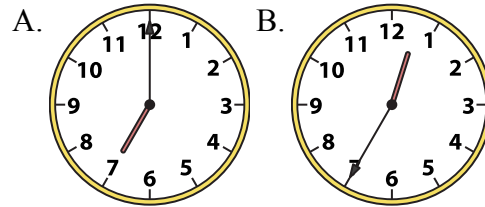
2) 10:15



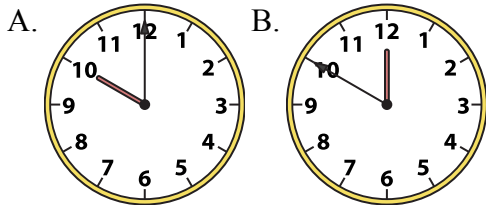
3) 5:45



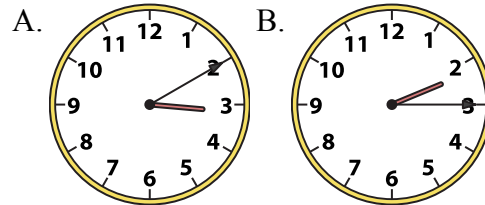
4) 7:00



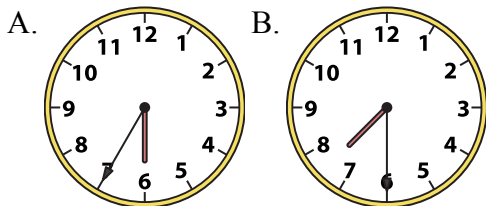
5) 10:00



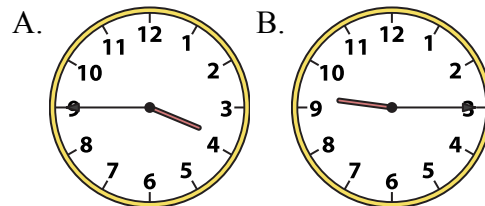
6) 2:15



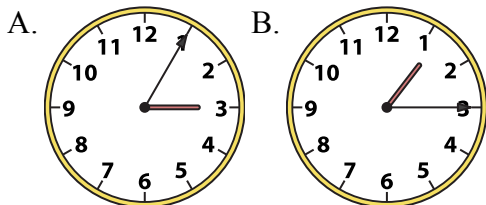
7) 7:30



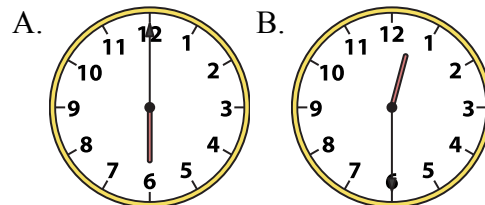
8) 9:15



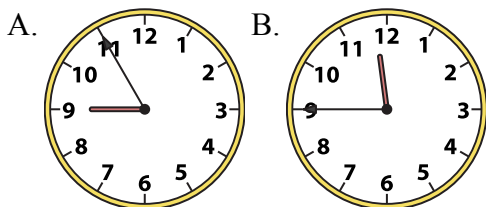
9) 1:15



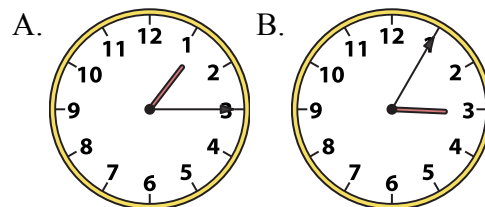
10) 12:30



11) 11:45



12) 1:15



1. _____
2. _____
3. _____
4. _____
5. _____
6. _____
7. _____
8. _____
9. _____
10. _____
11. _____
12. _____




Решите каждую задачу.


ОТВЕТЫ

1) 3:45

A.




B.




2) 10:15

A.




B.



3) 5:45

A.



B.




4) 7:00

A.



B.




5) 10:00

A.




B.




6) 2:15

A.



B.




7) 7:30

A.




B.




8) 9:15

A.




B.




9) 1:15

A.




B.




10) 12:30

A.




B.




11) 11:45

A.




B.




12) 1:15

A.



B.



1. **A**
2. **A**
3. **A**
4. **A**
5. **A**
6. **B**
7. **B**
8. **B**
9. **B**
10. **B**
11. **B**
12. **A**