




Решите каждую задачу.


**ОТВЕТЫ**

1) 12:30

A.




B.




2) 9:45

A.




B.




3) 8:00

A.




B.




4) 2:45

A.



B.




5) 10:30

A.




B.




6) 4:30

A.



B.




7) 5:15

A.



B.




8) 11:45

A.



B.



9) 9:45

A.



B.




10) 6:15

A.




B.




11) 12:45

A.




B.




12) 6:00

A.



B.



1. \_\_\_\_\_

2. \_\_\_\_\_

3. \_\_\_\_\_

4. \_\_\_\_\_

5. \_\_\_\_\_

6. \_\_\_\_\_

7. \_\_\_\_\_

8. \_\_\_\_\_

9. \_\_\_\_\_

10. \_\_\_\_\_

11. \_\_\_\_\_

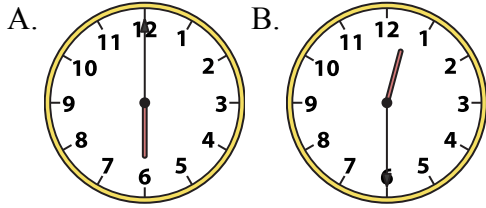
12. \_\_\_\_\_



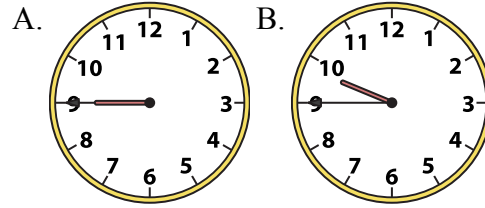
Решите каждую задачу.

**ОТВЕТЫ**

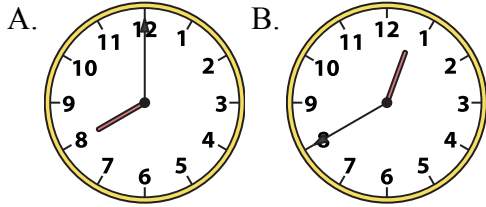
1) 12:30



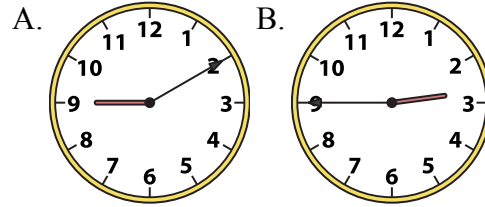
2) 9:45



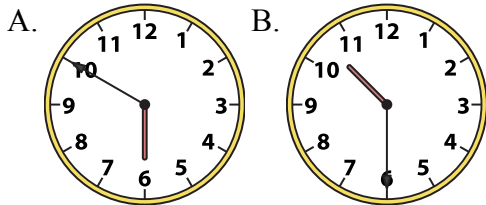
3) 8:00



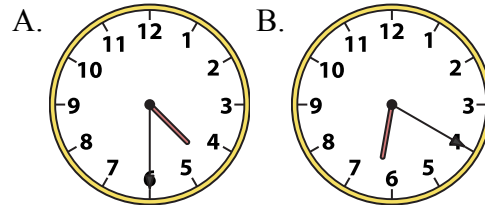
4) 2:45



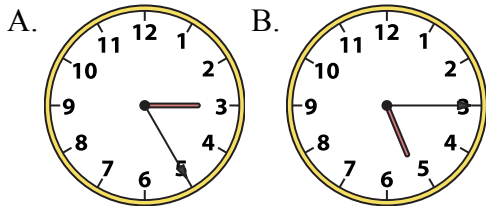
5) 10:30



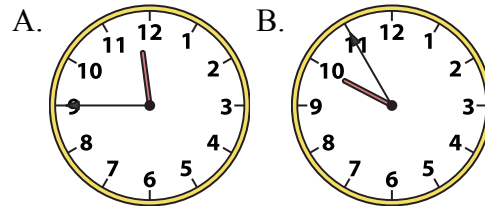
6) 4:30



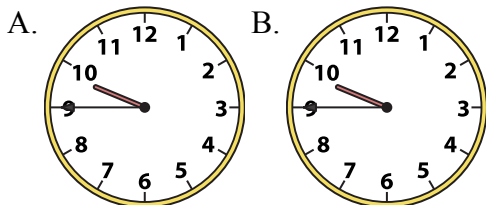
7) 5:15



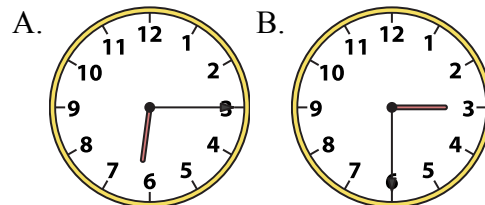
8) 11:45



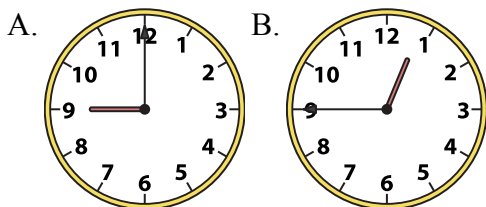
9) 9:45



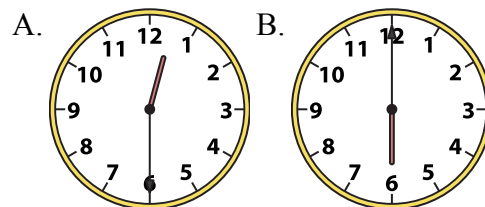
10) 6:15



11) 12:45



12) 6:00



1. В
2. В
3. А
4. В
5. В
6. А
7. В
8. А
9. В
10. А
11. В
12. В