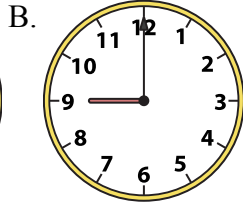
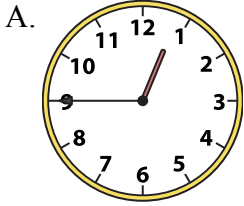




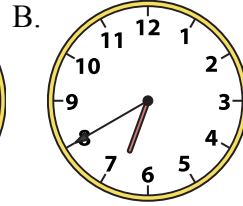
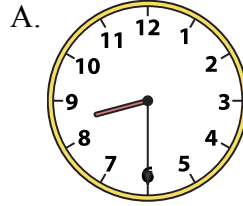
Решите каждую задачу.

ОТВЕТЫ


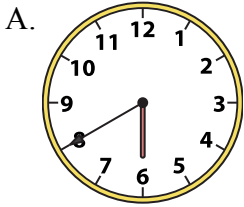
1) 12:45



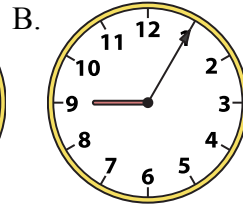
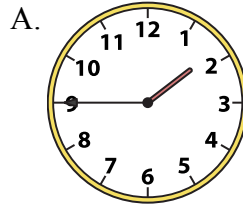
2) 8:30




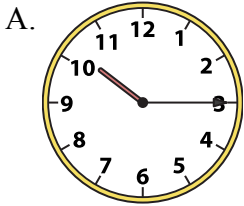
3) 8:30



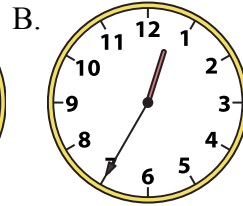
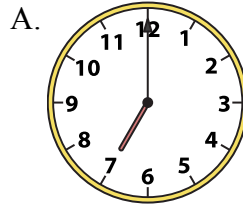
4) 1:45



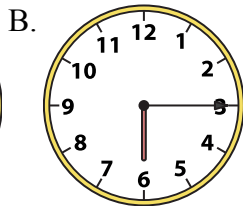
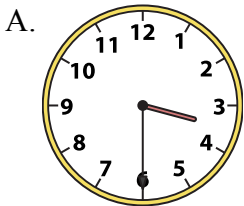
5) 10:15



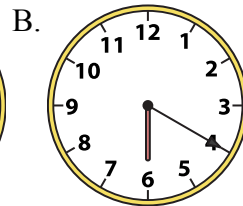
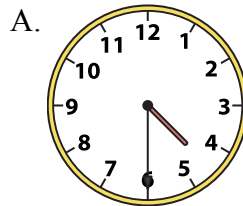
6) 7:00




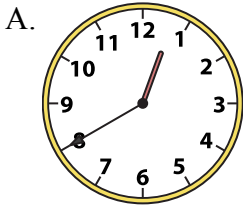
7) 3:30



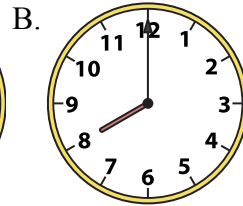
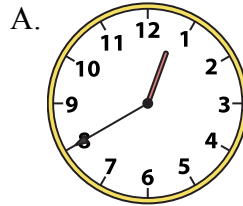
8) 4:30




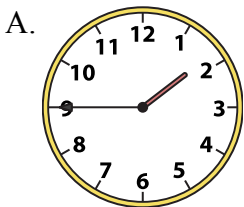
9) 8:00



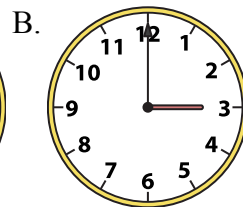
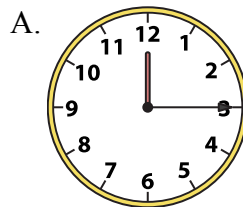
10) 8:00



11) 1:45



12) 3:00



1. _____
2. _____
3. _____
4. _____
5. _____
6. _____
7. _____
8. _____
9. _____
10. _____
11. _____
12. _____




Решите каждую задачу.


ОТВЕТЫ

1) 12:45

A.




B.




2) 8:30

A.




B.




3) 8:30

A.



B.




4) 1:45

A.



B.




5) 10:15

A.




B.




6) 7:00

A.




B.




7) 3:30

A.




B.




8) 4:30

A.



B.




9) 8:00

A.



B.




10) 8:00

A.



B.



11) 1:45

A.




B.




12) 3:00

A.



B.

1. **A** 2. **A** 3. **B** 4. **A** 5. **A** 6. **A** 7. **A** 8. **A** 9. **B** 10. **B** 11. **A** 12. **B**