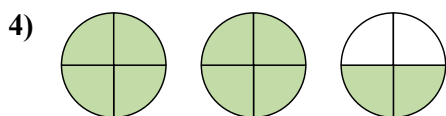
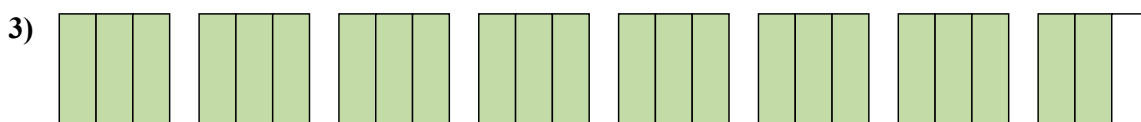
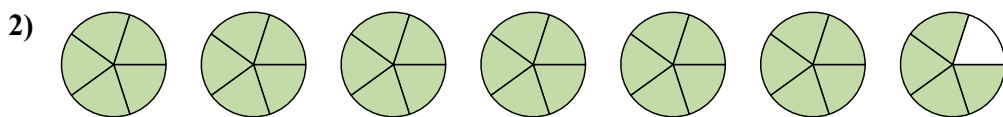
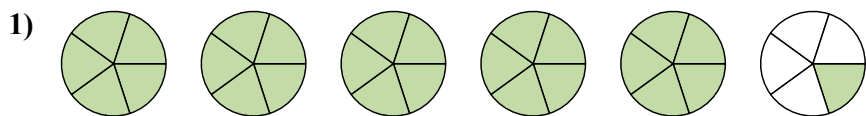


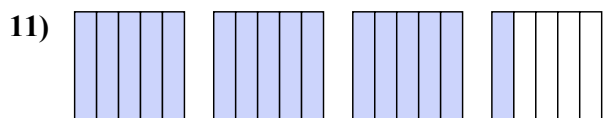
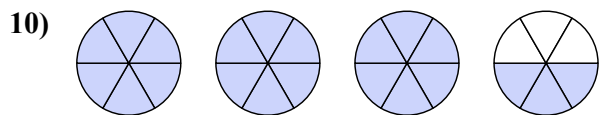
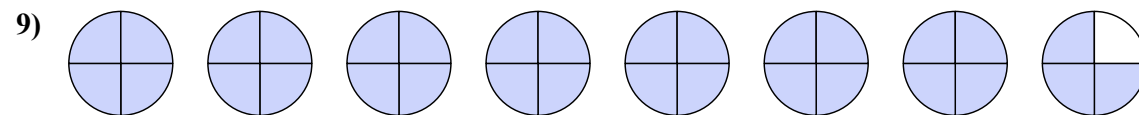
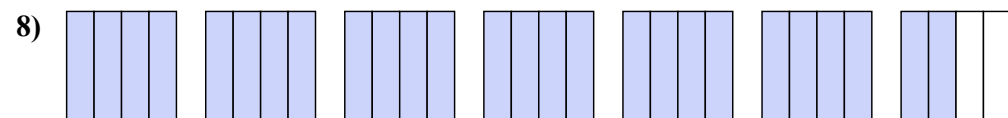
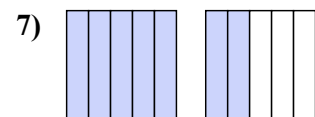
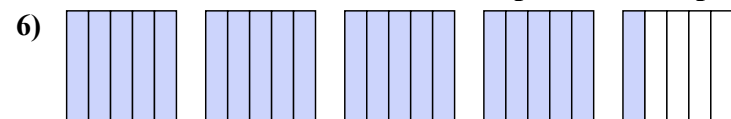




Напишите каждый ряд фигур в виде смешанного числа.



Напишите каждое число в виде неправильной дроби.

**ОТВЕТЫ**

1.  $5\frac{1}{5}$

2.  $6\frac{4}{5}$

3.  $7\frac{2}{3}$

4.  $2\frac{2}{4}$

5.  $2\frac{1}{2}$

6.  $\frac{21}{5}$

7.  $\frac{7}{5}$

8.  $\frac{26}{4}$

9.  $\frac{31}{4}$

10.  $\frac{21}{6}$

11.  $\frac{16}{5}$