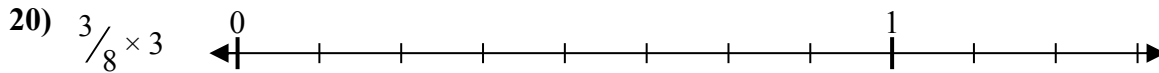
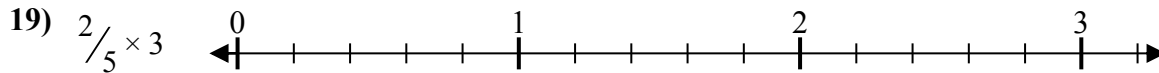
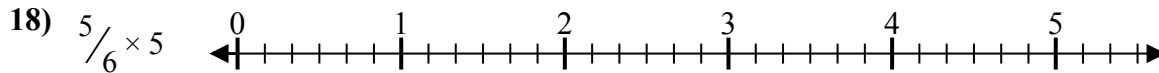
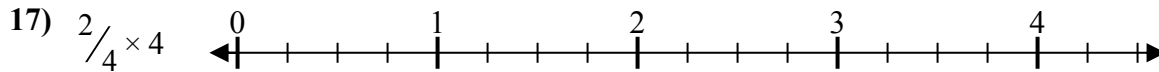
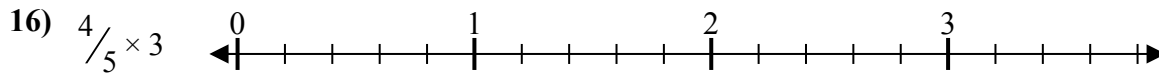
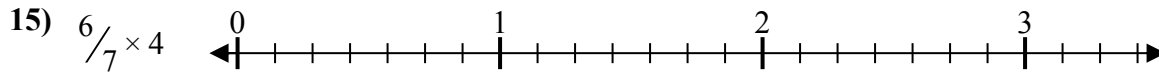
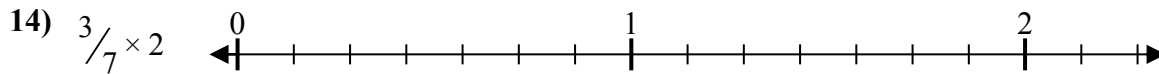
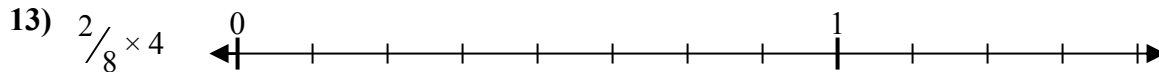
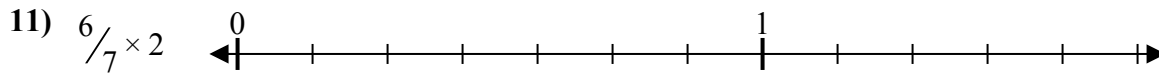
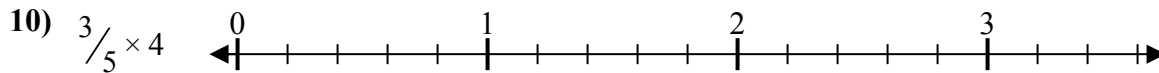
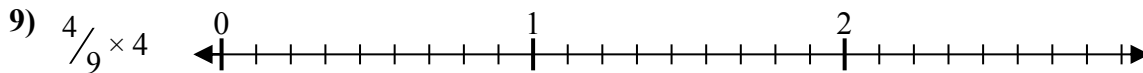
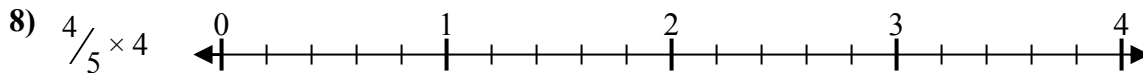
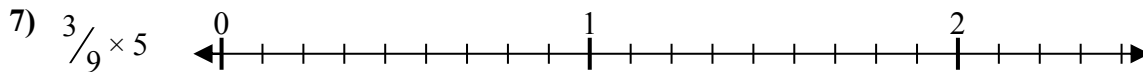
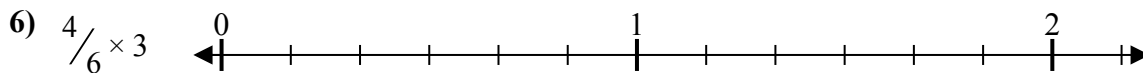
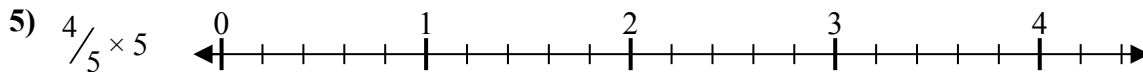
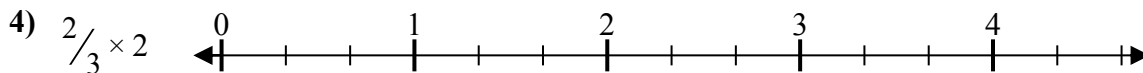

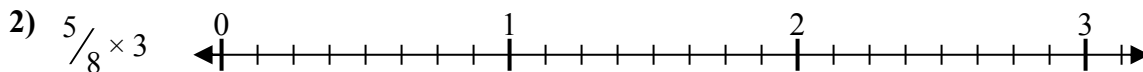
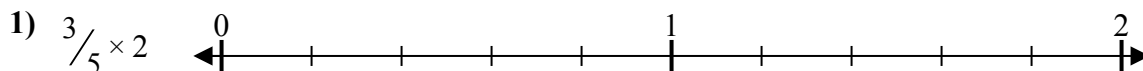




Решите каждую задачу.

Отвeты



1. _____

2. _____

3. _____

4. _____

5. _____

6. _____

7. _____

8. _____

9. _____

10. _____

11. _____

12. _____

13. _____

14. _____

15. _____

16. _____

17. _____

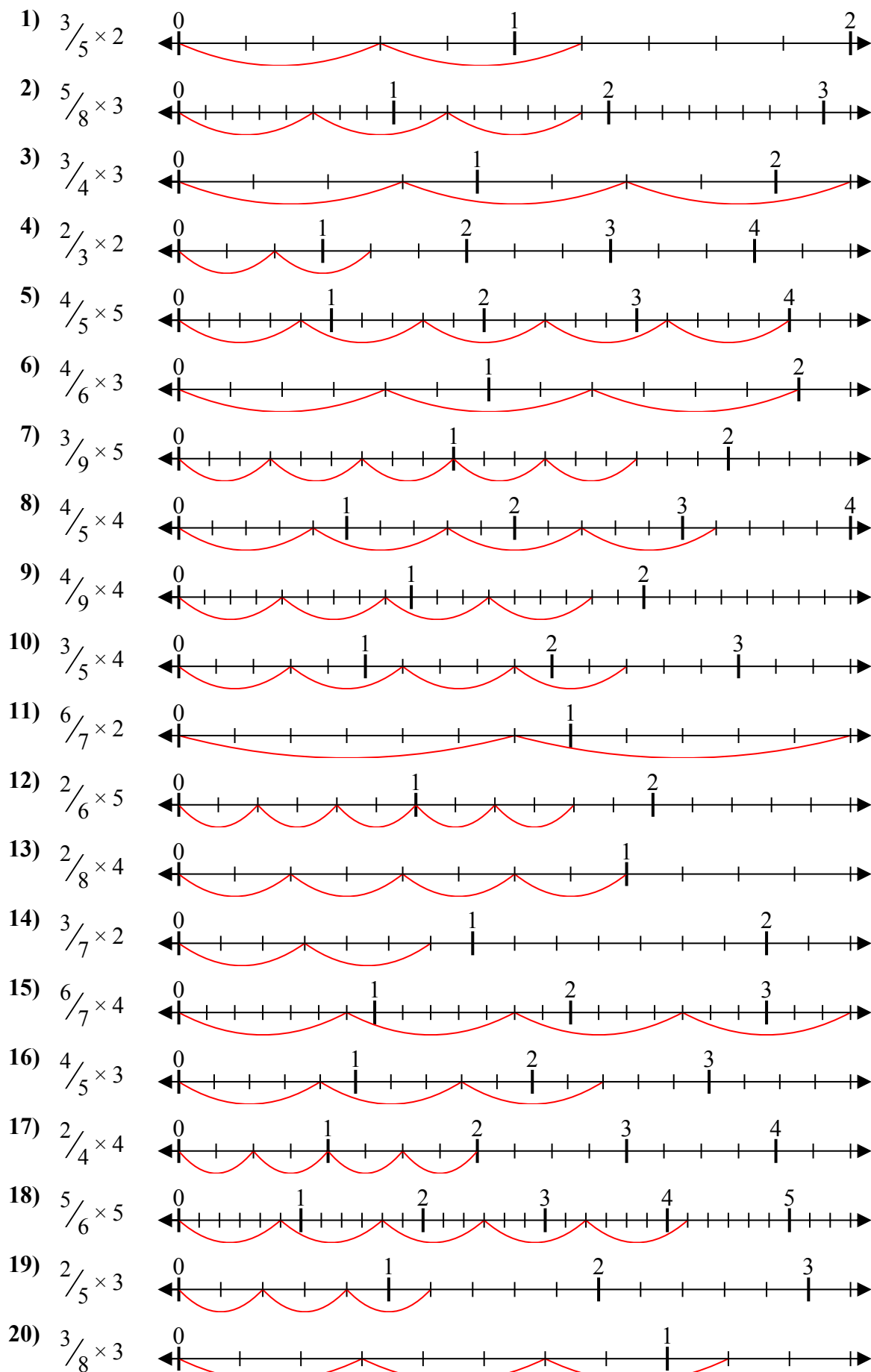
18. _____

19. _____

20. _____



Решите каждую задачу.



Отвeты

1. $\frac{6}{5} = 1\frac{1}{5}$
2. $\frac{15}{8} = 1\frac{7}{8}$
3. $\frac{9}{4} = 2\frac{1}{4}$
4. $\frac{4}{3} = 1\frac{1}{3}$
5. $\frac{20}{5} = 4$
6. $\frac{12}{6} = 2$
7. $\frac{15}{9} = 1\frac{2}{3}$
8. $\frac{16}{5} = 3\frac{1}{5}$
9. $\frac{16}{9} = 1\frac{7}{9}$
10. $\frac{12}{5} = 2\frac{2}{5}$
11. $\frac{12}{7} = 1\frac{5}{7}$
12. $\frac{10}{6} = 1\frac{2}{3}$
13. $\frac{8}{8} = 1$
14. $\frac{6}{7} = \frac{6}{7}$
15. $\frac{24}{7} = 3\frac{3}{7}$
16. $\frac{12}{5} = 2\frac{2}{5}$
17. $\frac{8}{4} = 2$
18. $\frac{25}{6} = 4\frac{1}{6}$
19. $\frac{6}{5} = 1\frac{1}{5}$
20. $\frac{9}{8} = 1\frac{1}{8}$