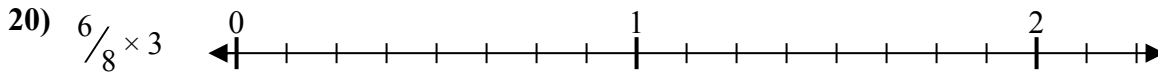
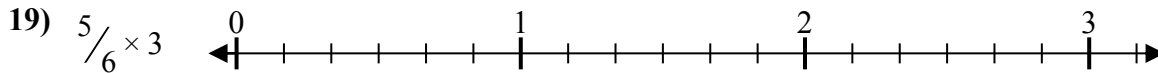
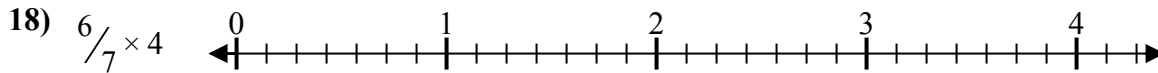
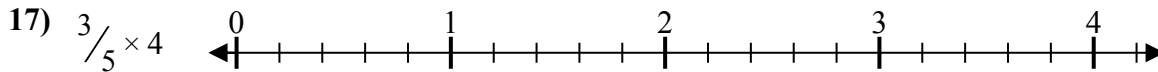
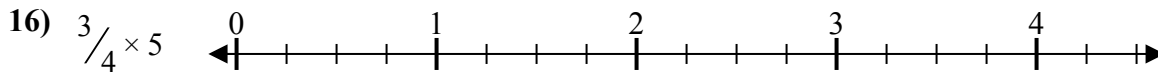
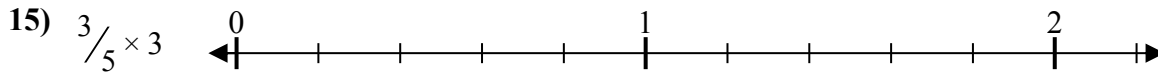
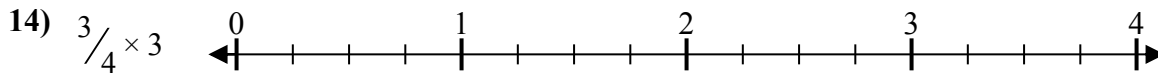
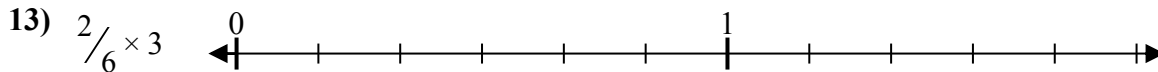
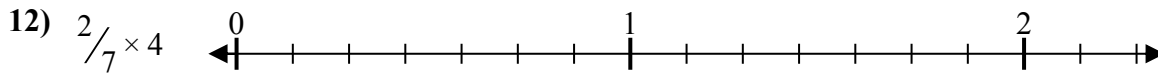
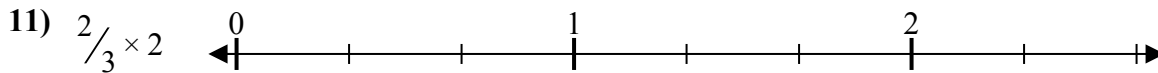
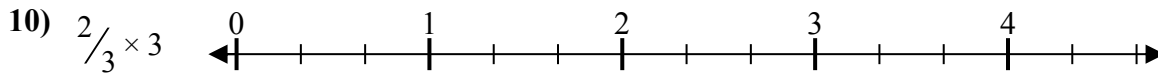
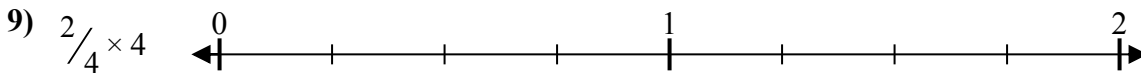
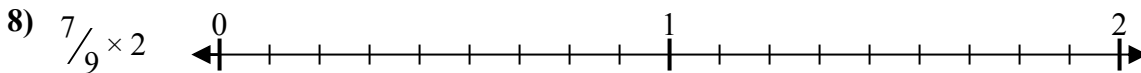
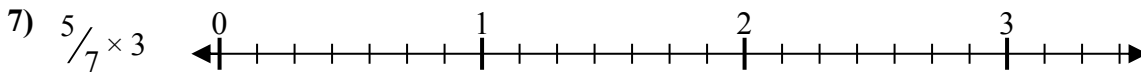
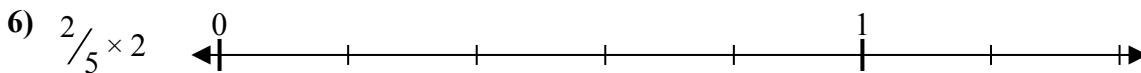
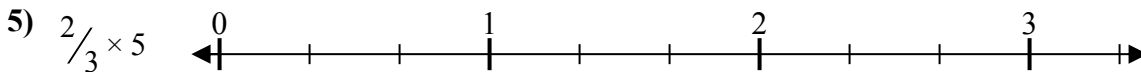
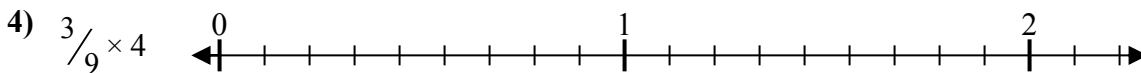
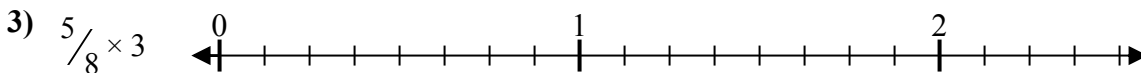
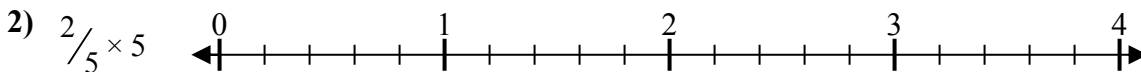
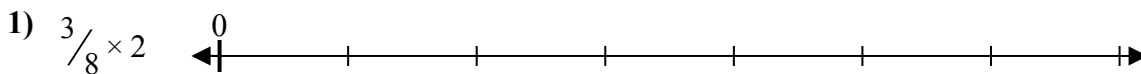




Решите каждую задачу.

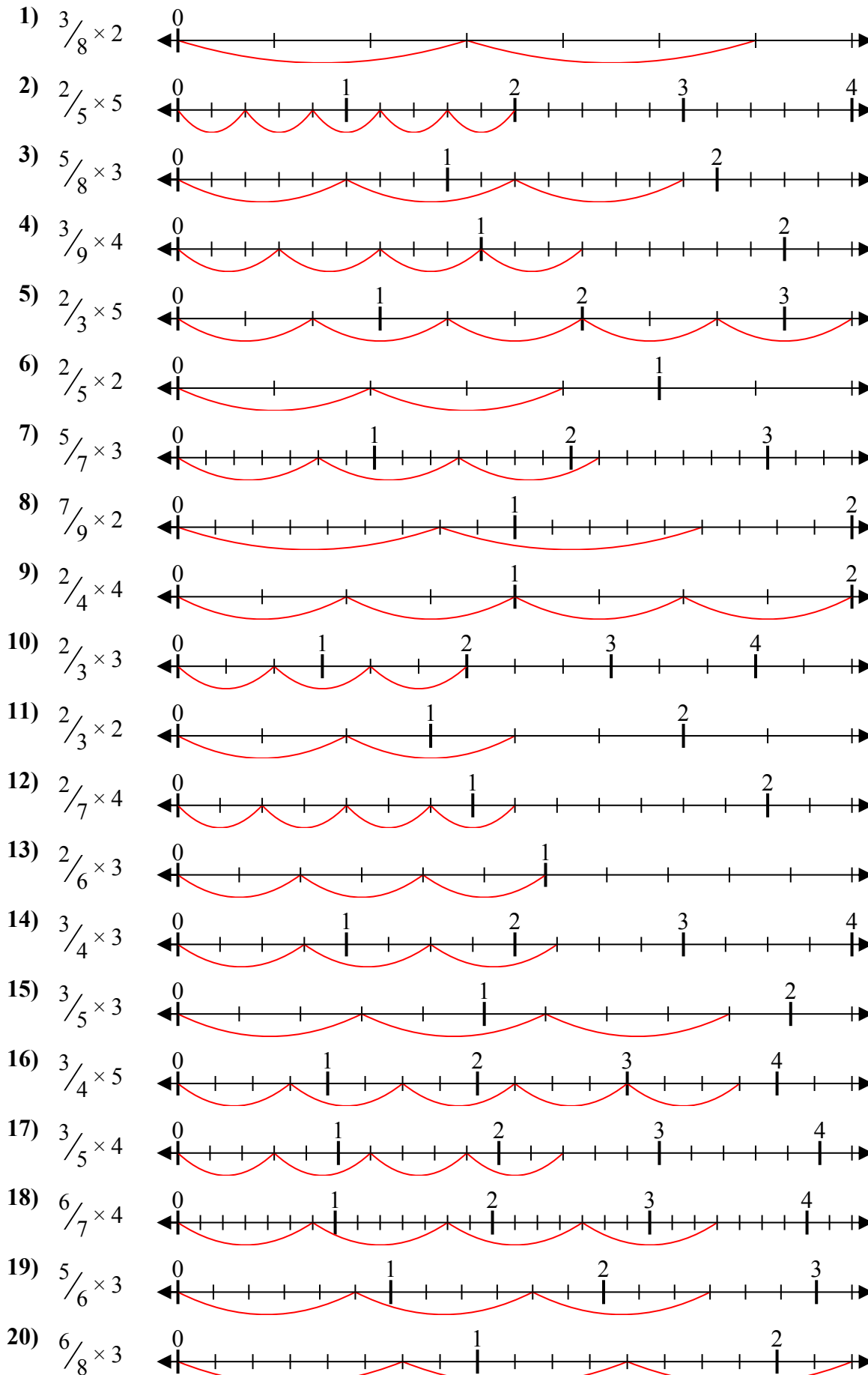
**Отвeты**



1. \_\_\_\_\_
2. \_\_\_\_\_
3. \_\_\_\_\_
4. \_\_\_\_\_
5. \_\_\_\_\_
6. \_\_\_\_\_
7. \_\_\_\_\_
8. \_\_\_\_\_
9. \_\_\_\_\_
10. \_\_\_\_\_
11. \_\_\_\_\_
12. \_\_\_\_\_
13. \_\_\_\_\_
14. \_\_\_\_\_
15. \_\_\_\_\_
16. \_\_\_\_\_
17. \_\_\_\_\_
18. \_\_\_\_\_
19. \_\_\_\_\_
20. \_\_\_\_\_



Решите каждую задачу.



**Отвѣты**

1.  $\frac{6}{8} = \frac{3}{4}$
2.  $\frac{10}{5} = 2$
3.  $\frac{15}{8} = 1\frac{7}{8}$
4.  $\frac{12}{9} = 1\frac{1}{3}$
5.  $\frac{10}{3} = 3\frac{1}{3}$
6.  $\frac{4}{5} = \frac{4}{5}$
7.  $\frac{15}{7} = 2\frac{1}{7}$
8.  $\frac{14}{9} = 1\frac{5}{9}$
9.  $\frac{8}{4} = 2$
10.  $\frac{6}{3} = 2$
11.  $\frac{4}{3} = 1\frac{1}{3}$
12.  $\frac{8}{7} = 1\frac{1}{7}$
13.  $\frac{6}{6} = 1$
14.  $\frac{9}{4} = 2\frac{1}{4}$
15.  $\frac{9}{5} = 1\frac{4}{5}$
16.  $\frac{15}{4} = 3\frac{3}{4}$
17.  $\frac{12}{5} = 2\frac{2}{5}$
18.  $\frac{24}{7} = 3\frac{3}{7}$
19.  $\frac{15}{6} = 2\frac{1}{2}$
20.  $\frac{18}{8} = 2\frac{1}{4}$