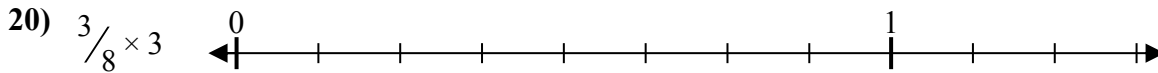
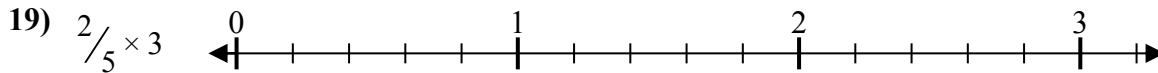
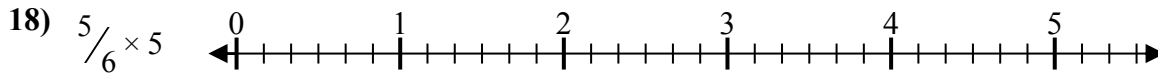
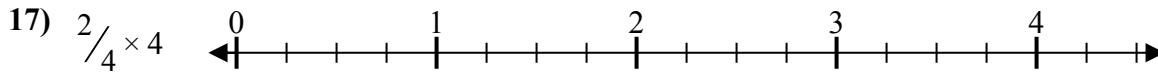
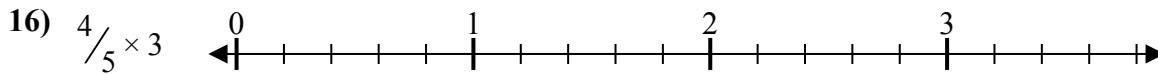
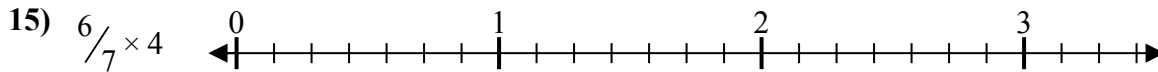
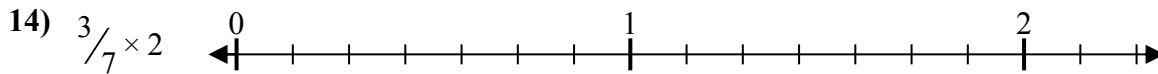
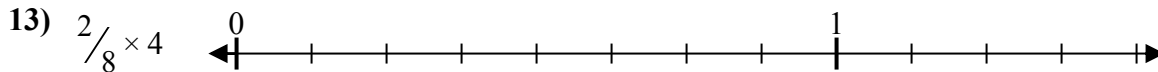
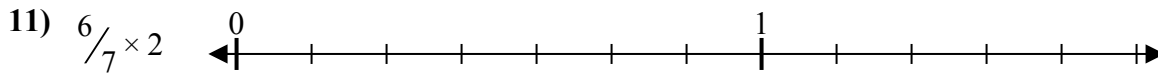
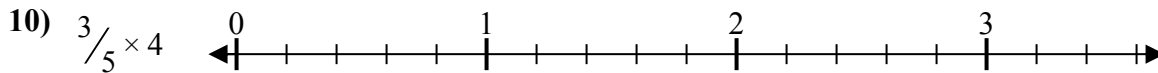
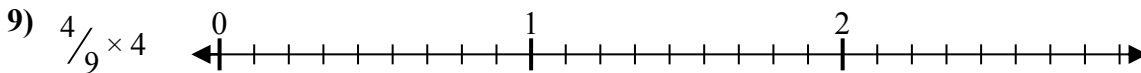
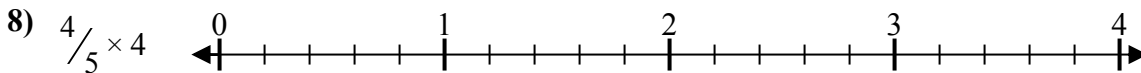
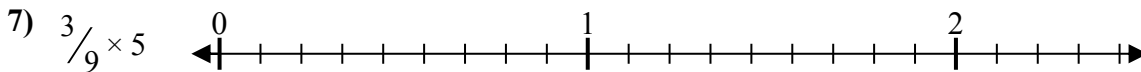
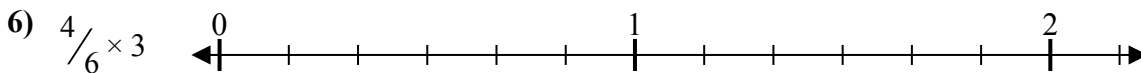
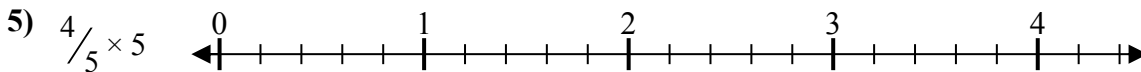
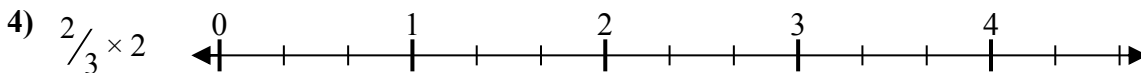

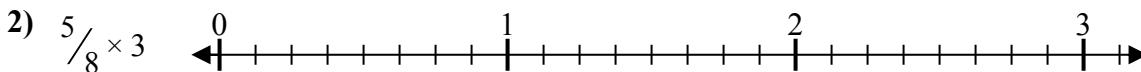
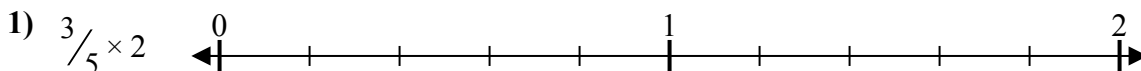




Решите каждую задачу.

Отвeты



1. _____

2. _____

3. _____

4. _____

5. _____

6. _____

7. _____

8. _____

9. _____

10. _____

11. _____

12. _____

13. _____

14. _____

15. _____

16. _____

17. _____

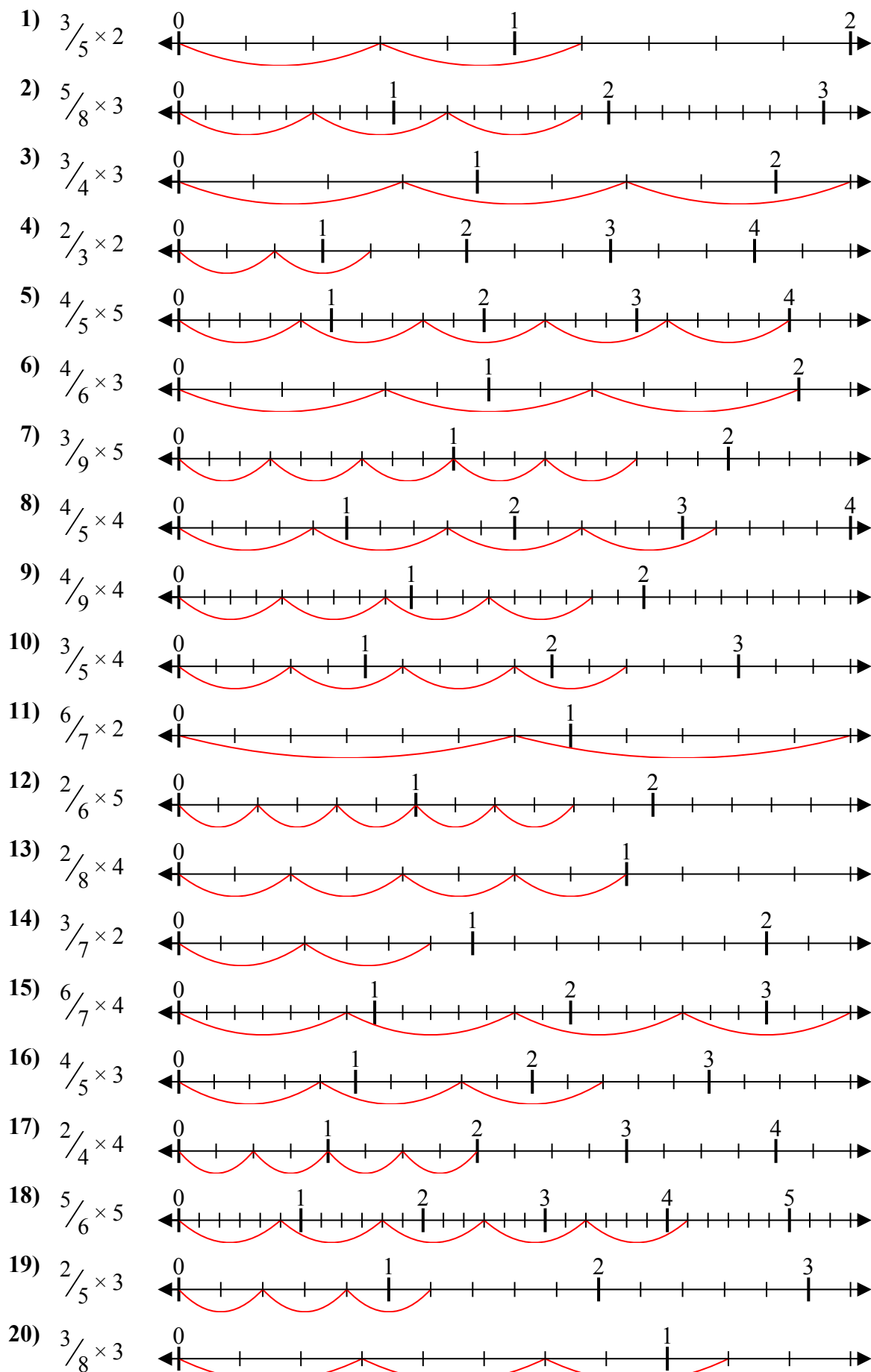
18. _____

19. _____

20. _____



Решите каждую задачу.



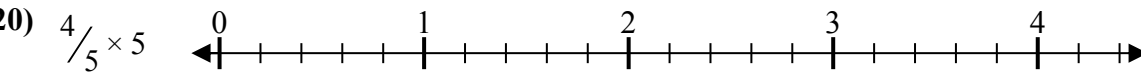
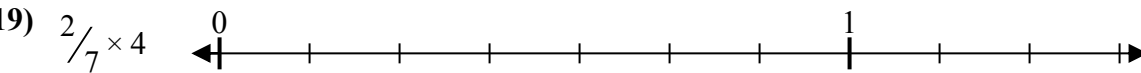
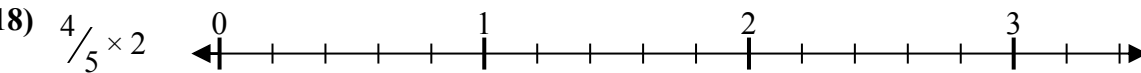
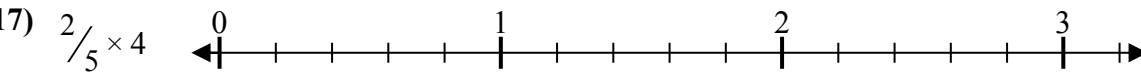
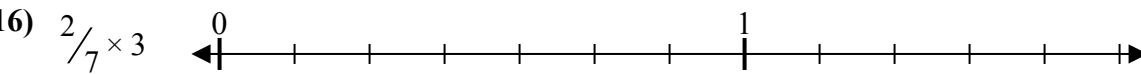
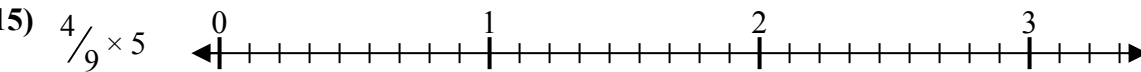
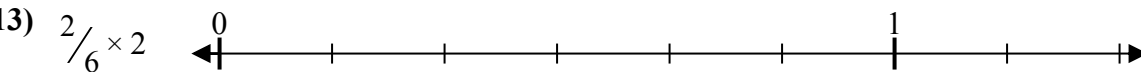
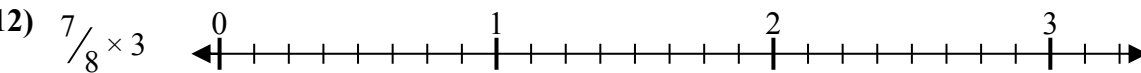
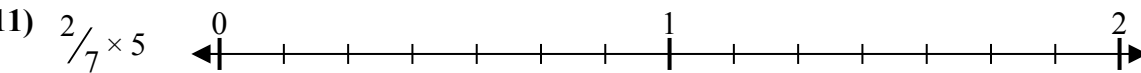
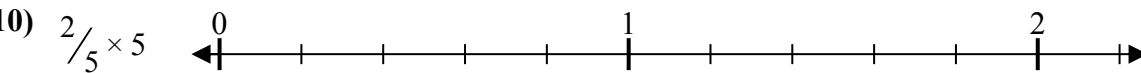
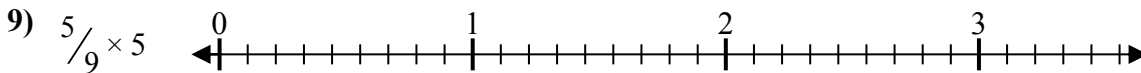

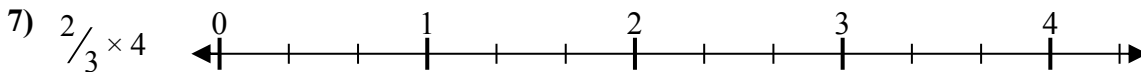
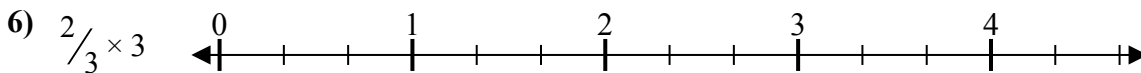
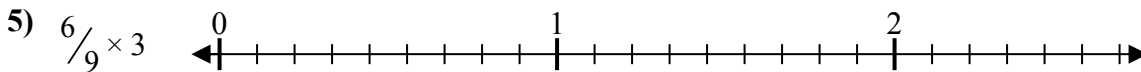
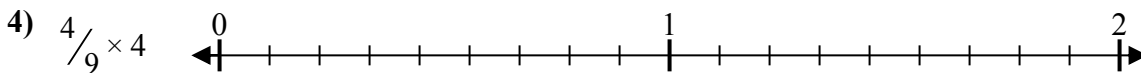
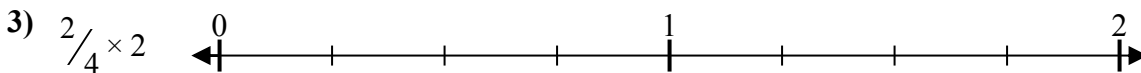
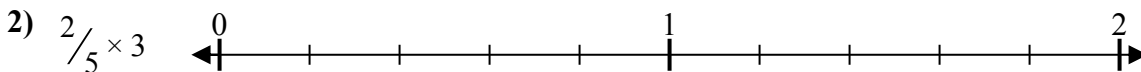
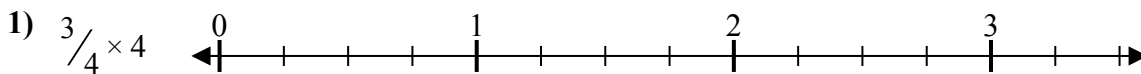
Отвeты

1. $\frac{6}{5} = 1\frac{1}{5}$
2. $\frac{15}{8} = 1\frac{7}{8}$
3. $\frac{9}{4} = 2\frac{1}{4}$
4. $\frac{4}{3} = 1\frac{1}{3}$
5. $\frac{20}{5} = 4$
6. $\frac{12}{6} = 2$
7. $\frac{15}{9} = 1\frac{2}{3}$
8. $\frac{16}{5} = 3\frac{1}{5}$
9. $\frac{16}{9} = 1\frac{7}{9}$
10. $\frac{12}{5} = 2\frac{2}{5}$
11. $\frac{12}{7} = 1\frac{5}{7}$
12. $\frac{10}{6} = 1\frac{2}{3}$
13. $\frac{8}{8} = 1$
14. $\frac{6}{7} = \frac{6}{7}$
15. $\frac{24}{7} = 3\frac{3}{7}$
16. $\frac{12}{5} = 2\frac{2}{5}$
17. $\frac{8}{4} = 2$
18. $\frac{25}{6} = 4\frac{1}{6}$
19. $\frac{6}{5} = 1\frac{1}{5}$
20. $\frac{9}{8} = 1\frac{1}{8}$



Решите каждую задачу.

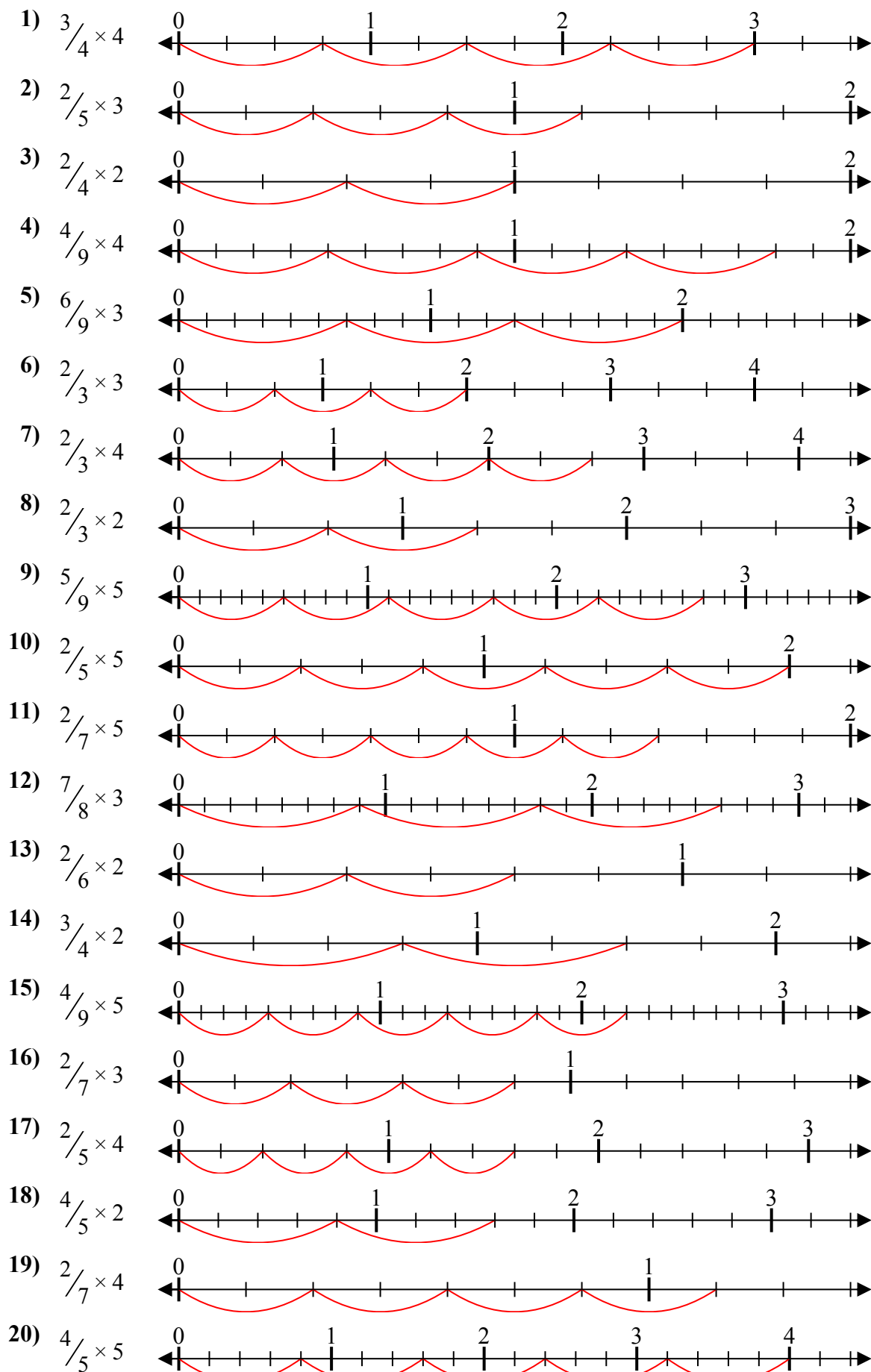
Отвeты



1. _____
2. _____
3. _____
4. _____
5. _____
6. _____
7. _____
8. _____
9. _____
10. _____
11. _____
12. _____
13. _____
14. _____
15. _____
16. _____
17. _____
18. _____
19. _____
20. _____



Решите каждую задачу.



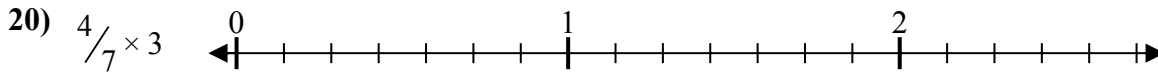

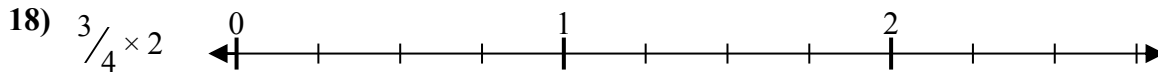
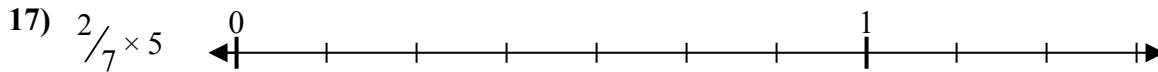

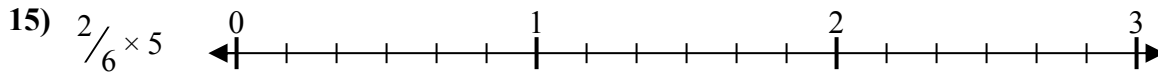
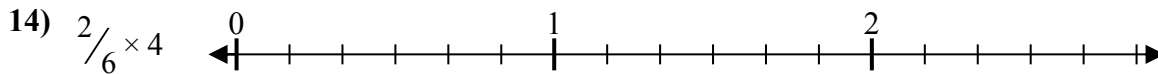
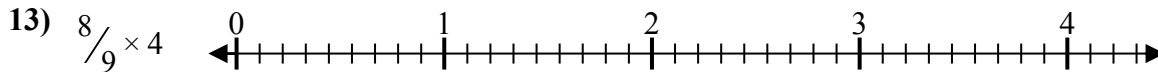
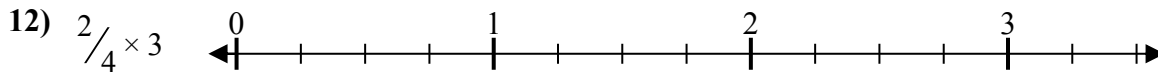

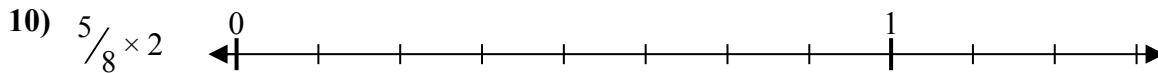
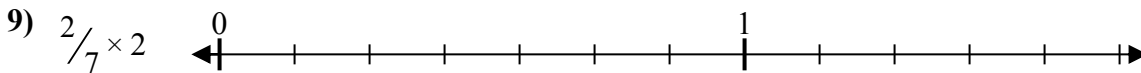
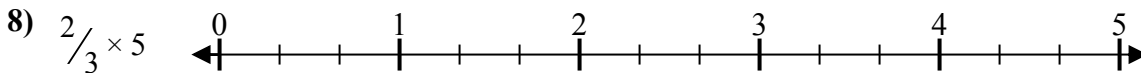
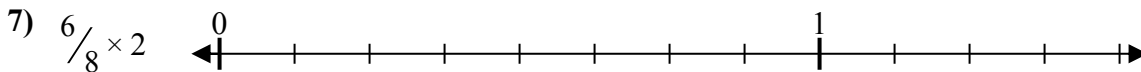
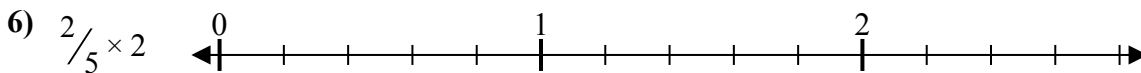
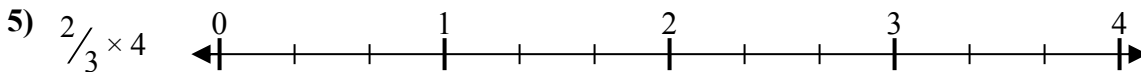
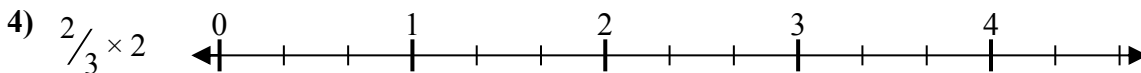
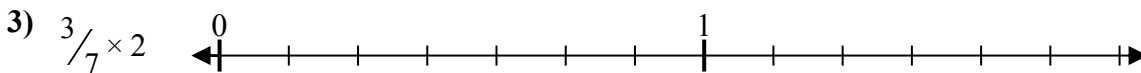
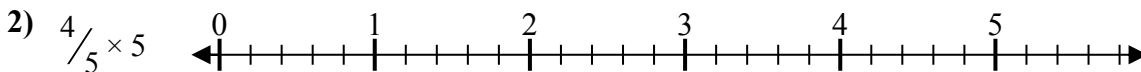
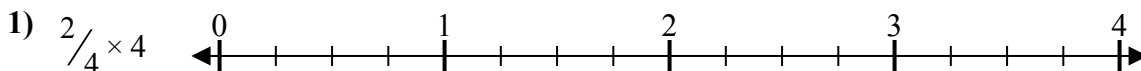
ОТВЕТЫ

1. $\frac{12}{4} = 3$
2. $\frac{6}{5} = 1\frac{1}{5}$
3. $\frac{4}{4} = 1$
4. $\frac{16}{9} = 1\frac{7}{9}$
5. $\frac{18}{9} = 2$
6. $\frac{6}{3} = 2$
7. $\frac{8}{3} = 2\frac{2}{3}$
8. $\frac{4}{3} = 1\frac{1}{3}$
9. $\frac{25}{9} = 2\frac{7}{9}$
10. $\frac{10}{5} = 2$
11. $\frac{10}{7} = 1\frac{3}{7}$
12. $\frac{21}{8} = 2\frac{5}{8}$
13. $\frac{4}{6} = \frac{2}{3}$
14. $\frac{6}{4} = 1\frac{1}{2}$
15. $\frac{20}{9} = 2\frac{2}{9}$
16. $\frac{6}{7} = \frac{6}{7}$
17. $\frac{8}{5} = 1\frac{3}{5}$
18. $\frac{8}{5} = 1\frac{3}{5}$
19. $\frac{8}{7} = 1\frac{1}{7}$
20. $\frac{20}{5} = 4$



Решите каждую задачу.

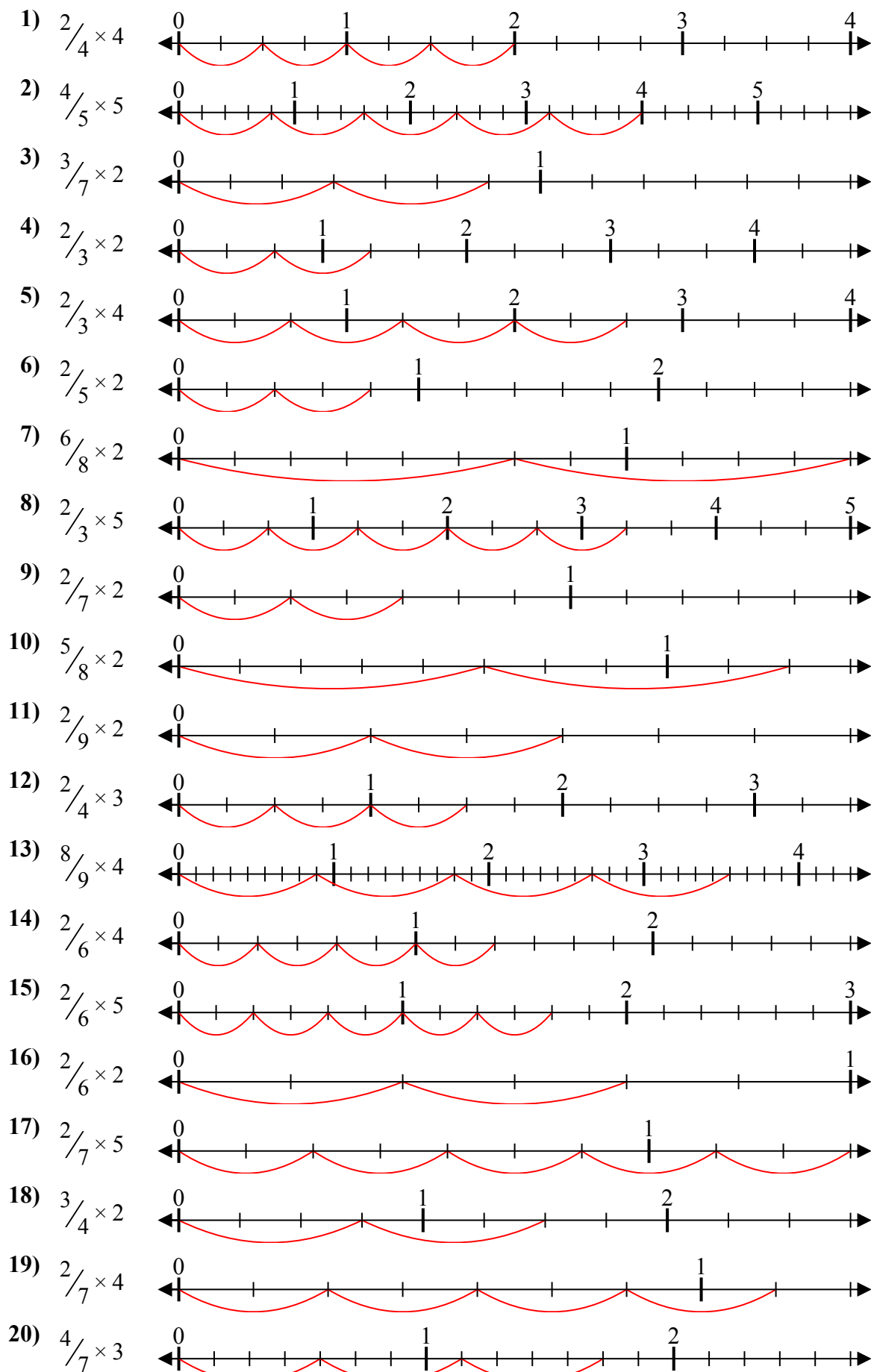
Ответы



1. _____
2. _____
3. _____
4. _____
5. _____
6. _____
7. _____
8. _____
9. _____
10. _____
11. _____
12. _____
13. _____
14. _____
15. _____
16. _____
17. _____
18. _____
19. _____
20. _____



Решите каждую задачу.



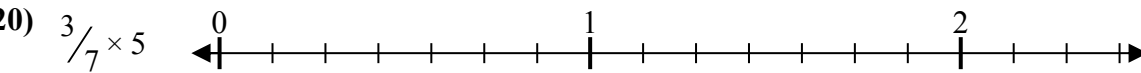
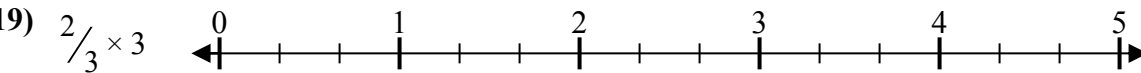
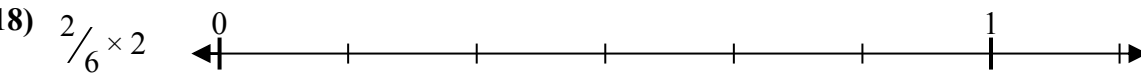
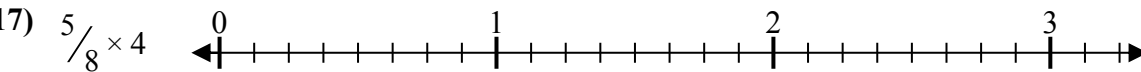
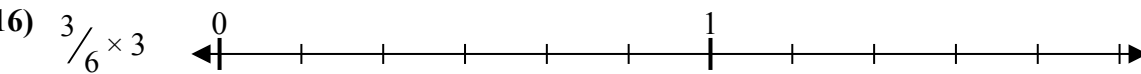
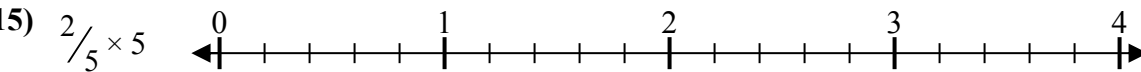
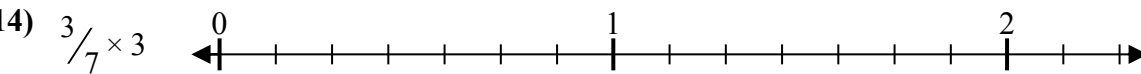
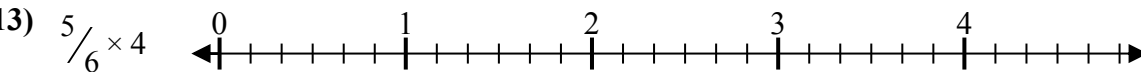

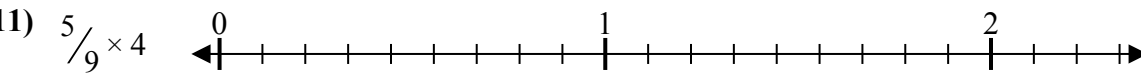
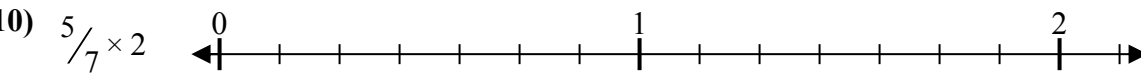
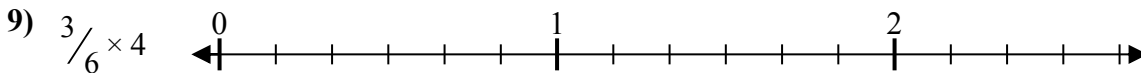
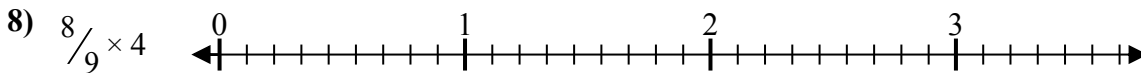
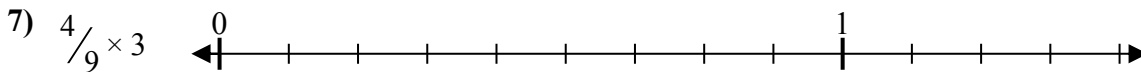
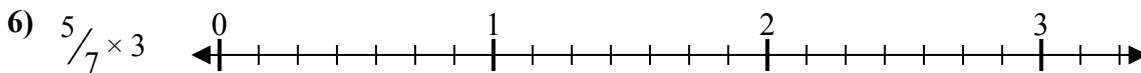

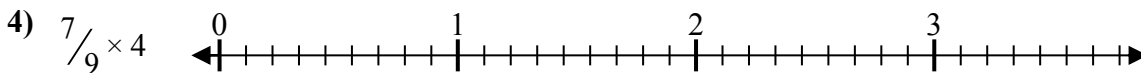
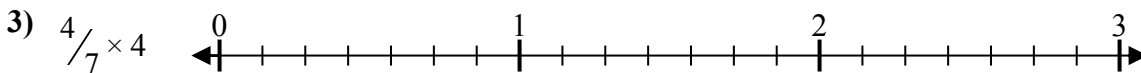
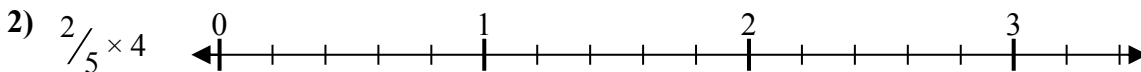
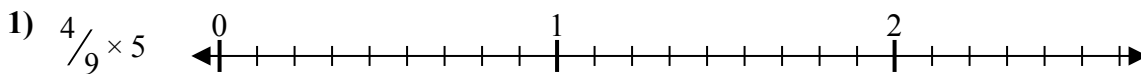
Отвeты

1. $\frac{8}{4} = 2$
2. $\frac{20}{5} = 4$
3. $\frac{6}{7} = \frac{6}{7}$
4. $\frac{4}{3} = 1\frac{1}{3}$
5. $\frac{8}{3} = 2\frac{2}{3}$
6. $\frac{4}{5} = \frac{4}{5}$
7. $\frac{12}{8} = 1\frac{1}{2}$
8. $\frac{10}{3} = 3\frac{1}{3}$
9. $\frac{4}{7} = \frac{4}{7}$
10. $\frac{10}{8} = 1\frac{1}{4}$
11. $\frac{4}{9} = \frac{4}{9}$
12. $\frac{6}{4} = 1\frac{1}{2}$
13. $\frac{32}{9} = 3\frac{5}{9}$
14. $\frac{8}{6} = 1\frac{1}{3}$
15. $\frac{10}{6} = 1\frac{2}{3}$
16. $\frac{4}{6} = \frac{2}{3}$
17. $\frac{10}{7} = 1\frac{3}{7}$
18. $\frac{6}{4} = 1\frac{1}{2}$
19. $\frac{8}{7} = 1\frac{1}{7}$
20. $\frac{12}{7} = 1\frac{5}{7}$



Решите каждую задачу.

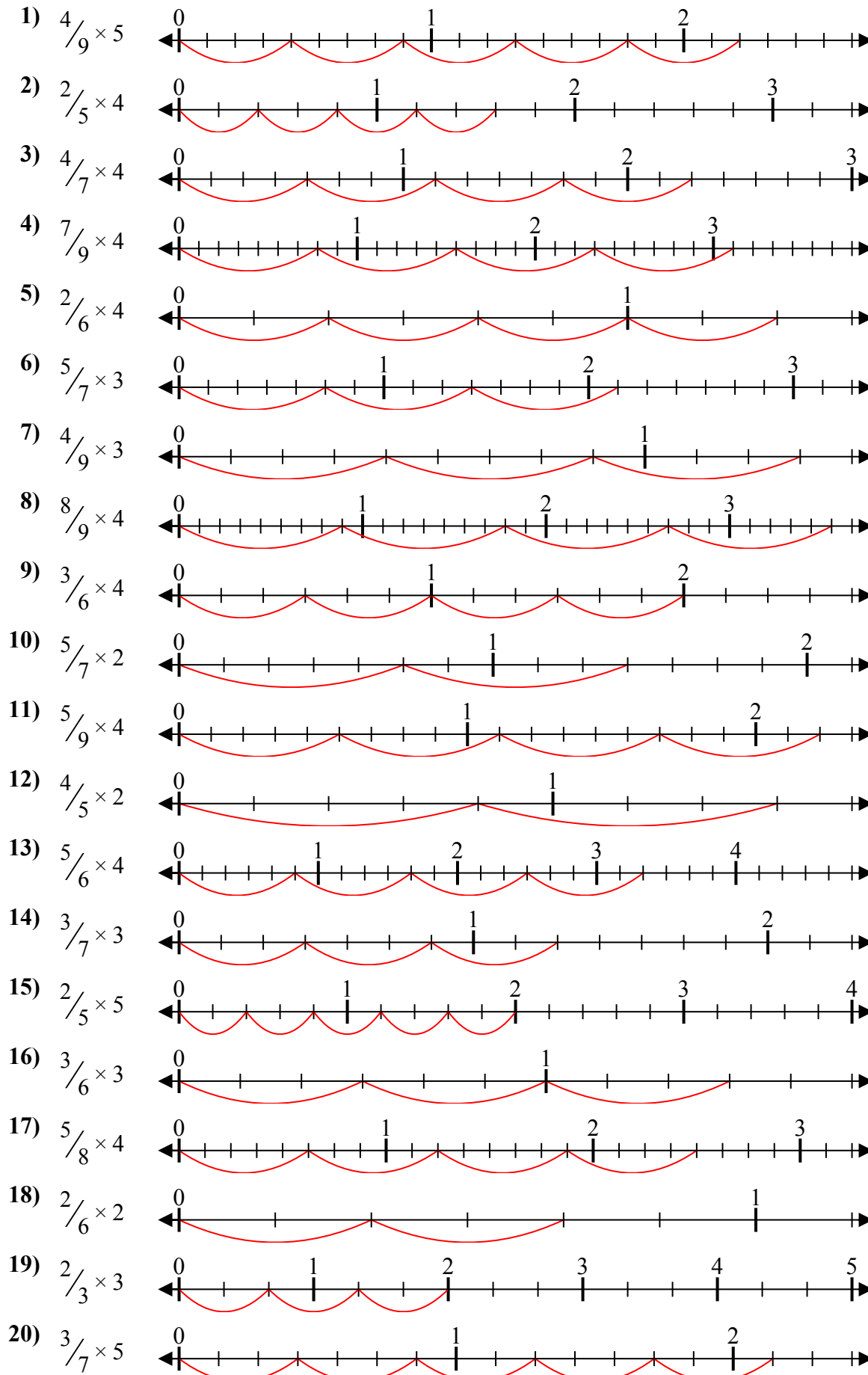
Отвeты



1. _____
2. _____
3. _____
4. _____
5. _____
6. _____
7. _____
8. _____
9. _____
10. _____
11. _____
12. _____
13. _____
14. _____
15. _____
16. _____
17. _____
18. _____
19. _____
20. _____



Решите каждую задачу.



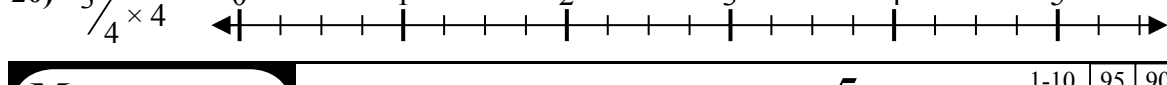
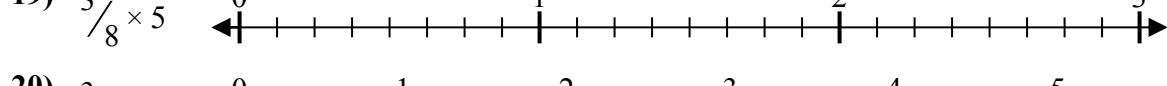
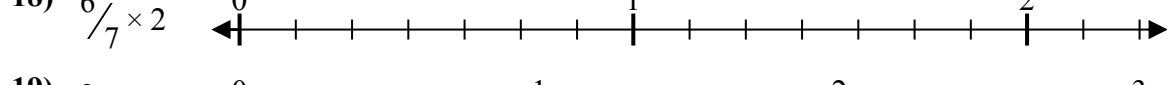
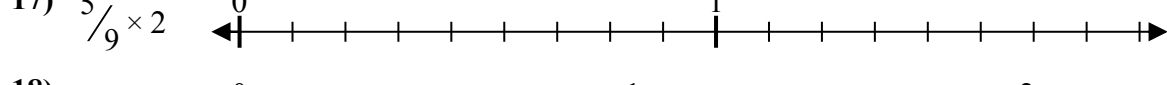
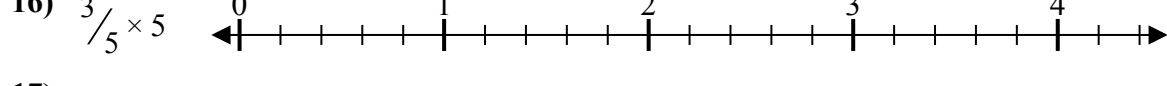
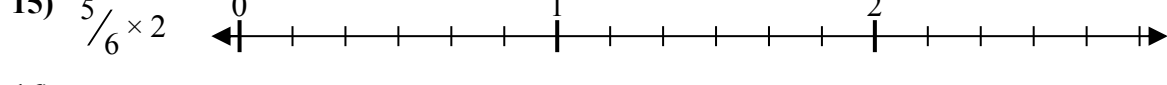
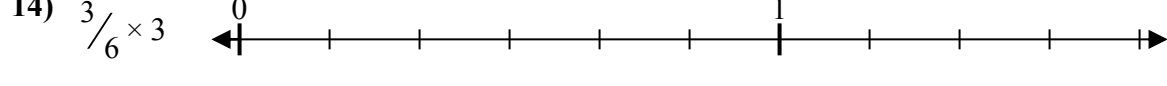
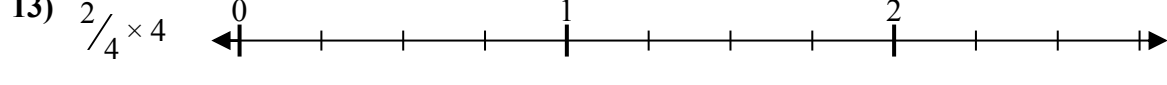
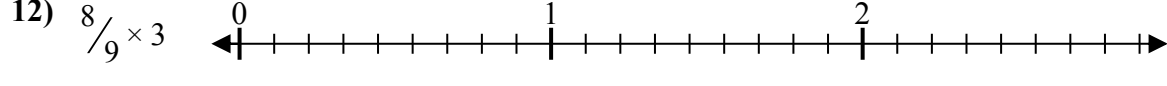
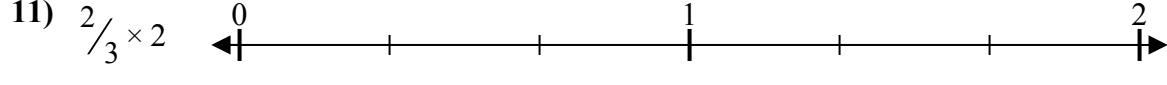
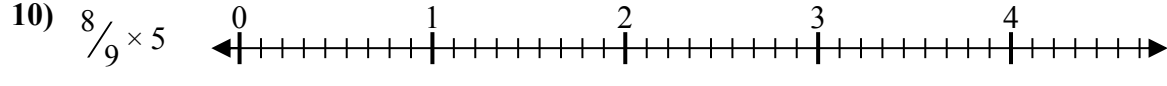
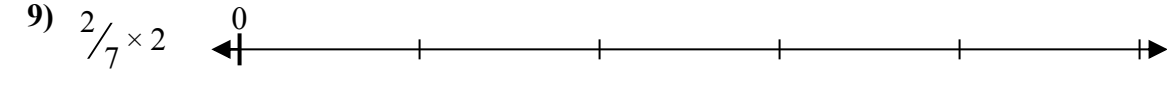
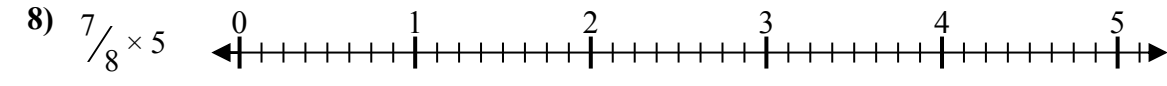
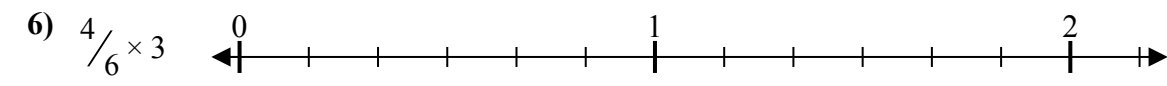
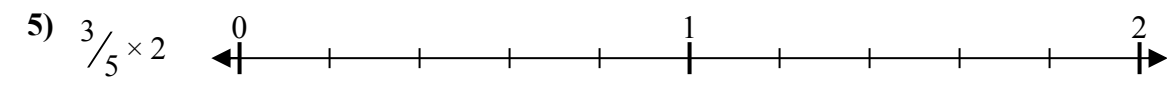
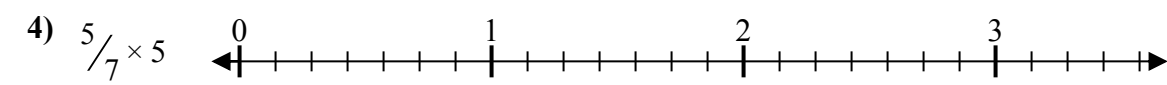
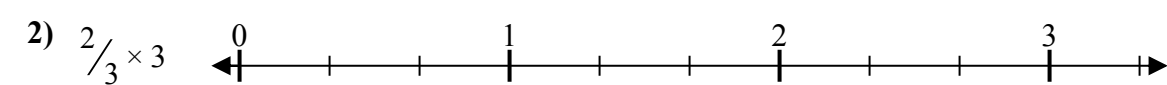
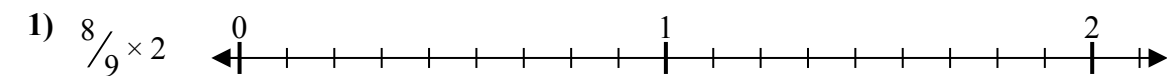
Отвѣты

1. $\frac{20}{9} = 2\frac{2}{9}$
2. $\frac{8}{5} = 1\frac{3}{5}$
3. $\frac{16}{7} = 2\frac{2}{7}$
4. $\frac{28}{9} = 3\frac{1}{9}$
5. $\frac{8}{6} = 1\frac{1}{3}$
6. $\frac{15}{7} = 2\frac{1}{7}$
7. $\frac{12}{9} = 1\frac{1}{3}$
8. $\frac{32}{9} = 3\frac{5}{9}$
9. $\frac{12}{6} = 2$
10. $\frac{10}{7} = 1\frac{3}{7}$
11. $\frac{20}{9} = 2\frac{2}{9}$
12. $\frac{8}{5} = 1\frac{3}{5}$
13. $\frac{20}{6} = 3\frac{1}{3}$
14. $\frac{9}{7} = 1\frac{2}{7}$
15. $\frac{10}{5} = 2$
16. $\frac{9}{6} = 1\frac{1}{2}$
17. $\frac{20}{8} = 2\frac{1}{2}$
18. $\frac{4}{6} = \frac{2}{3}$
19. $\frac{6}{3} = 2$
20. $\frac{15}{7} = 2\frac{1}{7}$



Решите каждую задачу.

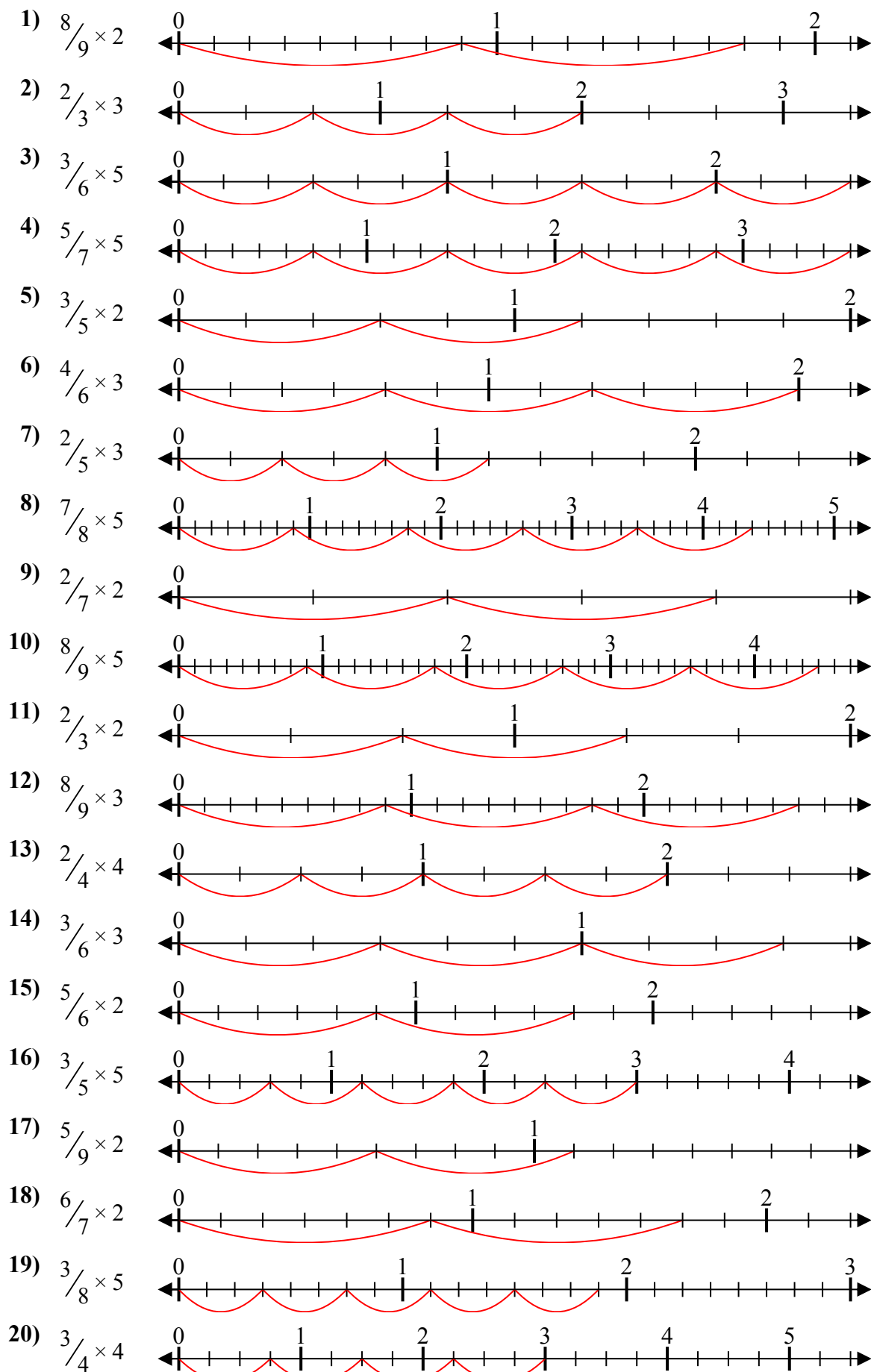
Отвeты



1. _____
2. _____
3. _____
4. _____
5. _____
6. _____
7. _____
8. _____
9. _____
10. _____
11. _____
12. _____
13. _____
14. _____
15. _____
16. _____
17. _____
18. _____
19. _____
20. _____



Решите каждую задачу.



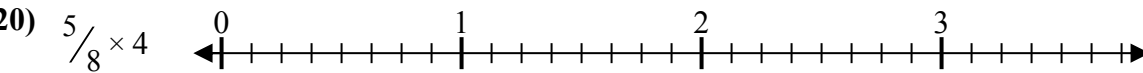
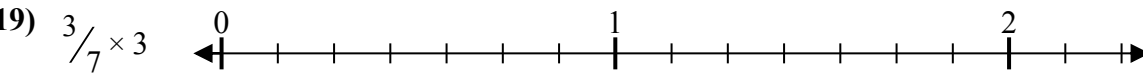
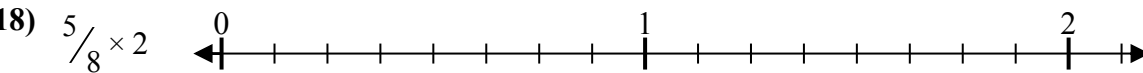
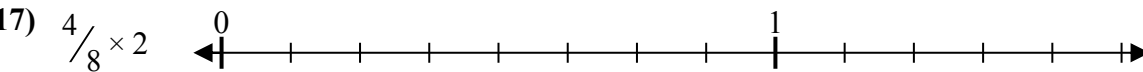
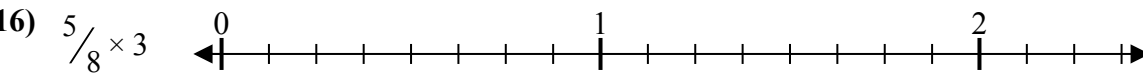
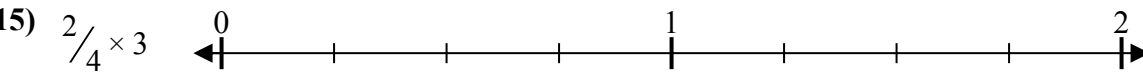
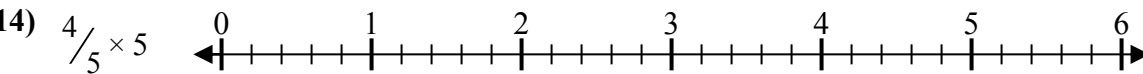
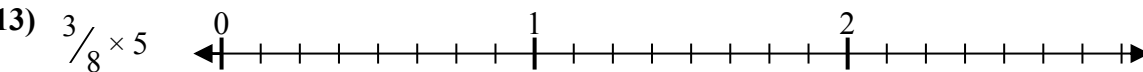
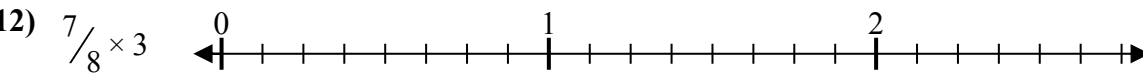
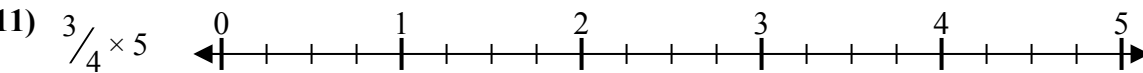
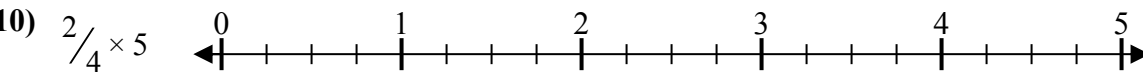
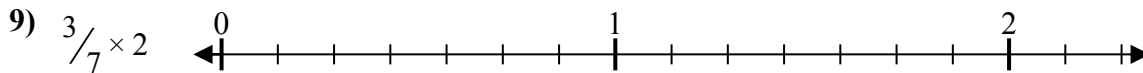
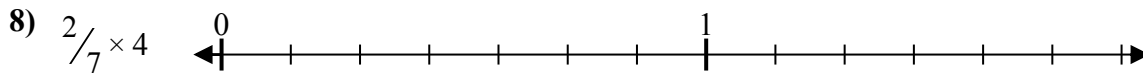
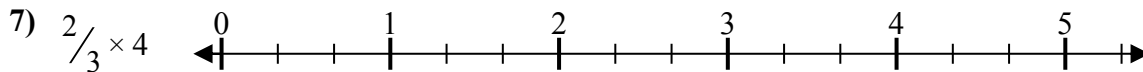
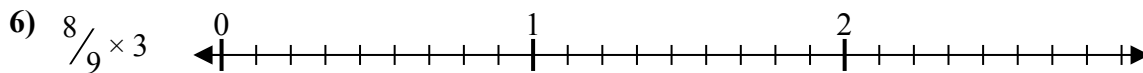
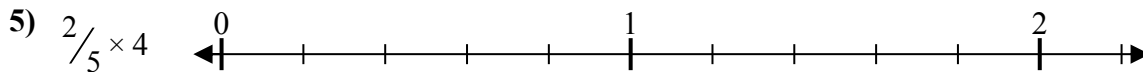
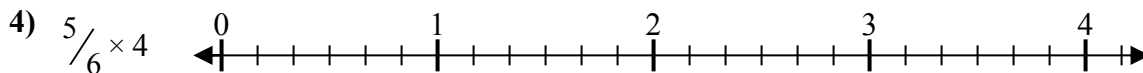
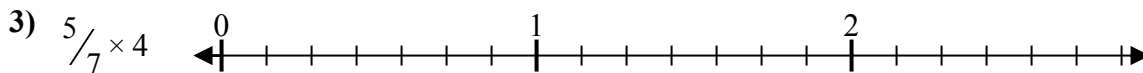
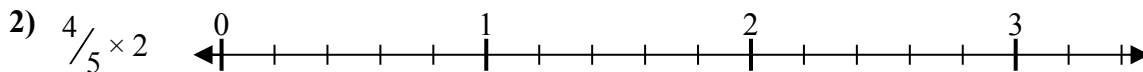
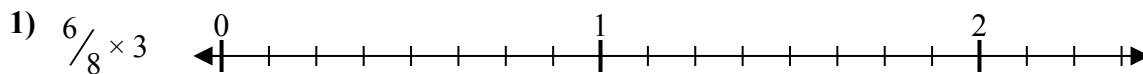
Ответы

1. $\frac{16}{9} = 1\frac{7}{9}$
2. $\frac{6}{3} = 2$
3. $\frac{15}{6} = 2\frac{1}{2}$
4. $\frac{25}{7} = 3\frac{4}{7}$
5. $\frac{6}{5} = 1\frac{1}{5}$
6. $\frac{12}{6} = 2$
7. $\frac{6}{5} = 1\frac{1}{5}$
8. $\frac{35}{8} = 4\frac{3}{8}$
9. $\frac{4}{7} = \frac{4}{7}$
10. $\frac{40}{9} = 4\frac{4}{9}$
11. $\frac{4}{3} = 1\frac{1}{3}$
12. $\frac{24}{9} = 2\frac{2}{3}$
13. $\frac{8}{4} = 2$
14. $\frac{9}{6} = 1\frac{1}{2}$
15. $\frac{10}{6} = 1\frac{2}{3}$
16. $\frac{15}{5} = 3$
17. $\frac{10}{9} = 1\frac{1}{9}$
18. $\frac{12}{7} = 1\frac{5}{7}$
19. $\frac{15}{8} = 1\frac{7}{8}$
20. $\frac{12}{4} = 3$



Решите каждую задачу.

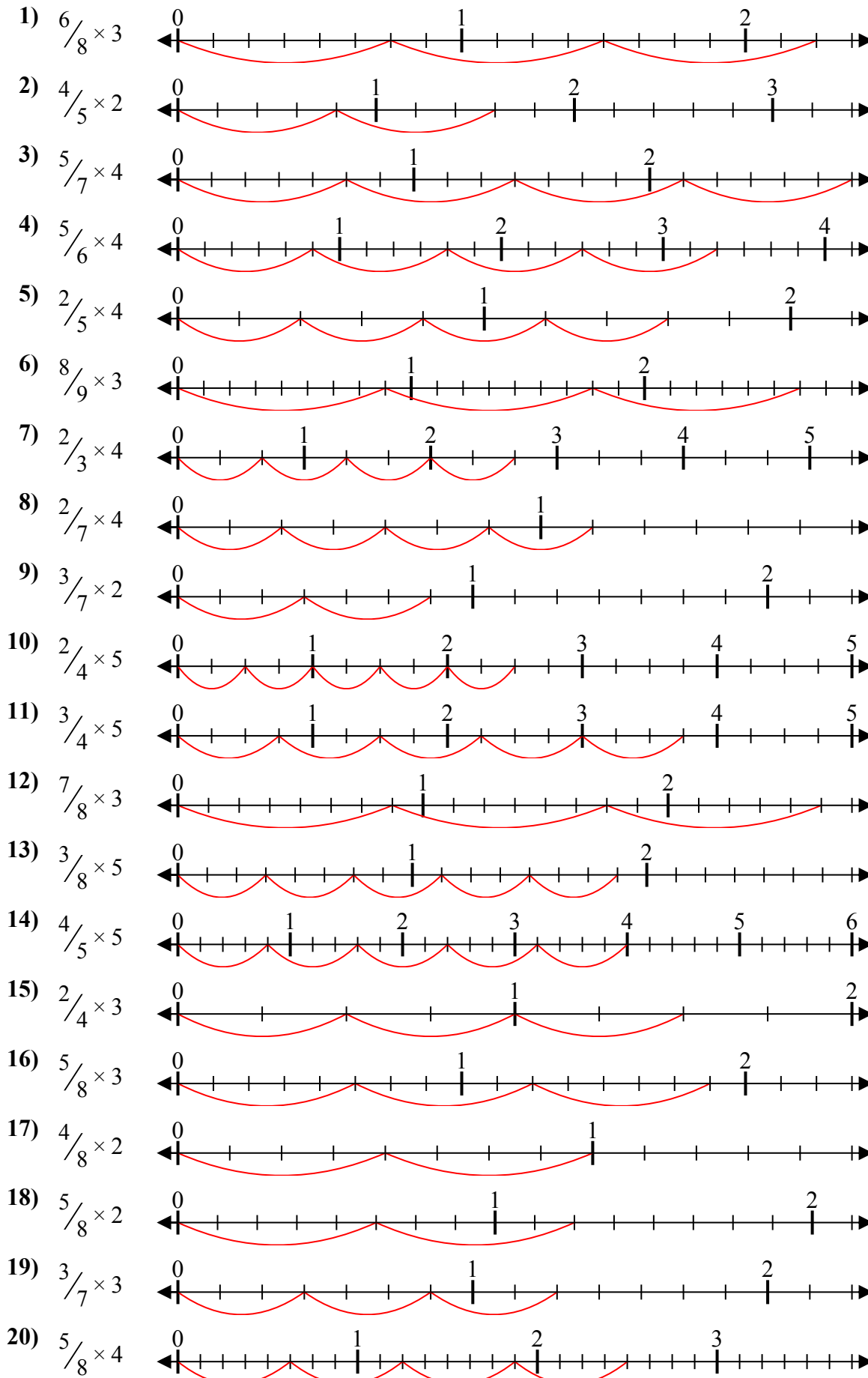
Ответы



1. _____
2. _____
3. _____
4. _____
5. _____
6. _____
7. _____
8. _____
9. _____
10. _____
11. _____
12. _____
13. _____
14. _____
15. _____
16. _____
17. _____
18. _____
19. _____
20. _____



Решите каждую задачу.



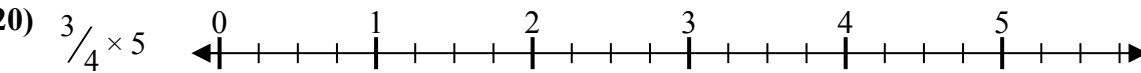
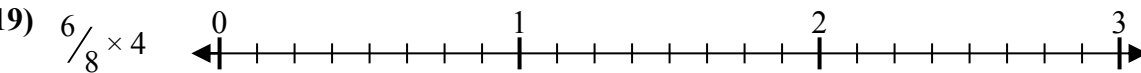
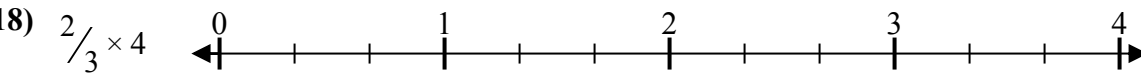

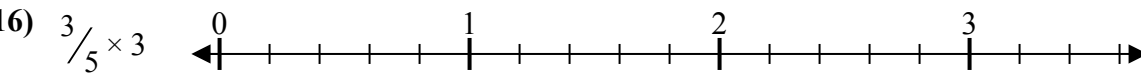
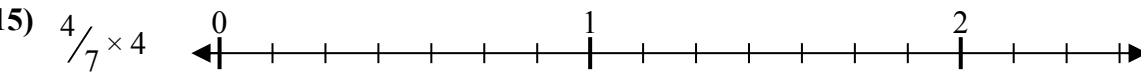
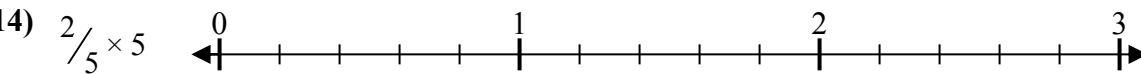
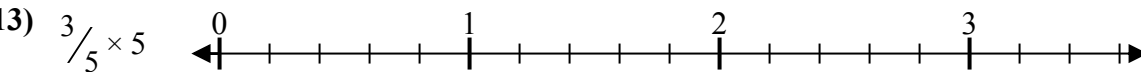
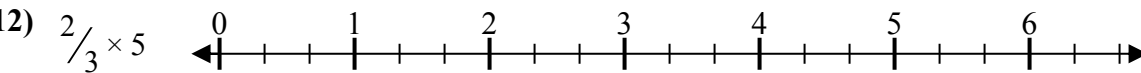
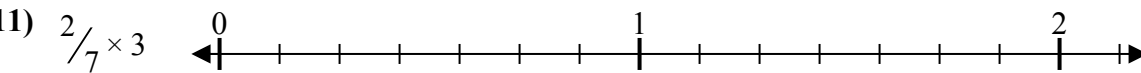
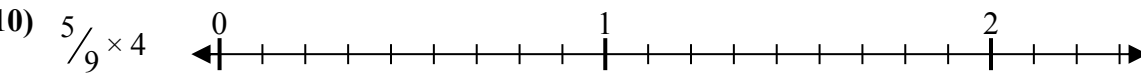
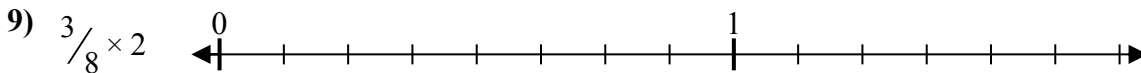
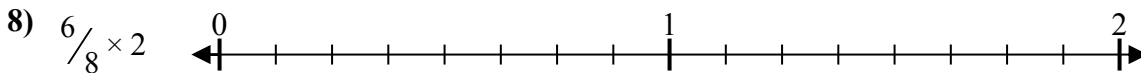
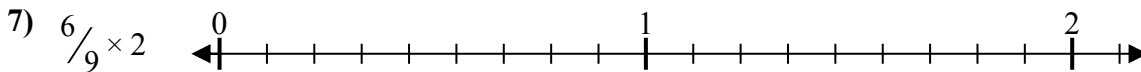
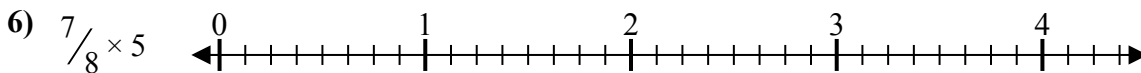

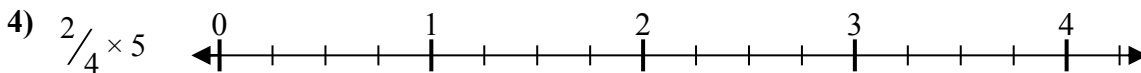
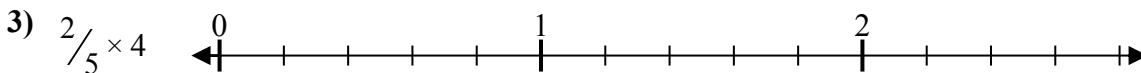
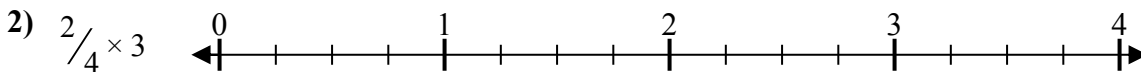
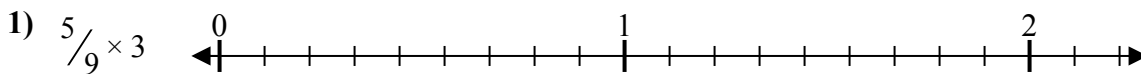
ОТВЕТЫ

1. $\frac{18}{8} = 2\frac{1}{4}$
2. $\frac{8}{5} = 1\frac{3}{5}$
3. $\frac{20}{7} = 2\frac{6}{7}$
4. $\frac{20}{6} = 3\frac{1}{3}$
5. $\frac{8}{5} = 1\frac{3}{5}$
6. $\frac{24}{9} = 2\frac{2}{3}$
7. $\frac{8}{3} = 2\frac{2}{3}$
8. $\frac{8}{7} = 1\frac{1}{7}$
9. $\frac{6}{7} = \frac{6}{7}$
10. $\frac{10}{4} = 2\frac{1}{2}$
11. $\frac{15}{4} = 3\frac{3}{4}$
12. $\frac{21}{8} = 2\frac{5}{8}$
13. $\frac{15}{8} = 1\frac{7}{8}$
14. $\frac{20}{5} = 4$
15. $\frac{6}{4} = 1\frac{1}{2}$
16. $\frac{15}{8} = 1\frac{7}{8}$
17. $\frac{8}{8} = 1$
18. $\frac{10}{8} = 1\frac{1}{4}$
19. $\frac{9}{7} = 1\frac{2}{7}$
20. $\frac{20}{8} = 2\frac{1}{2}$



Решите каждую задачу.

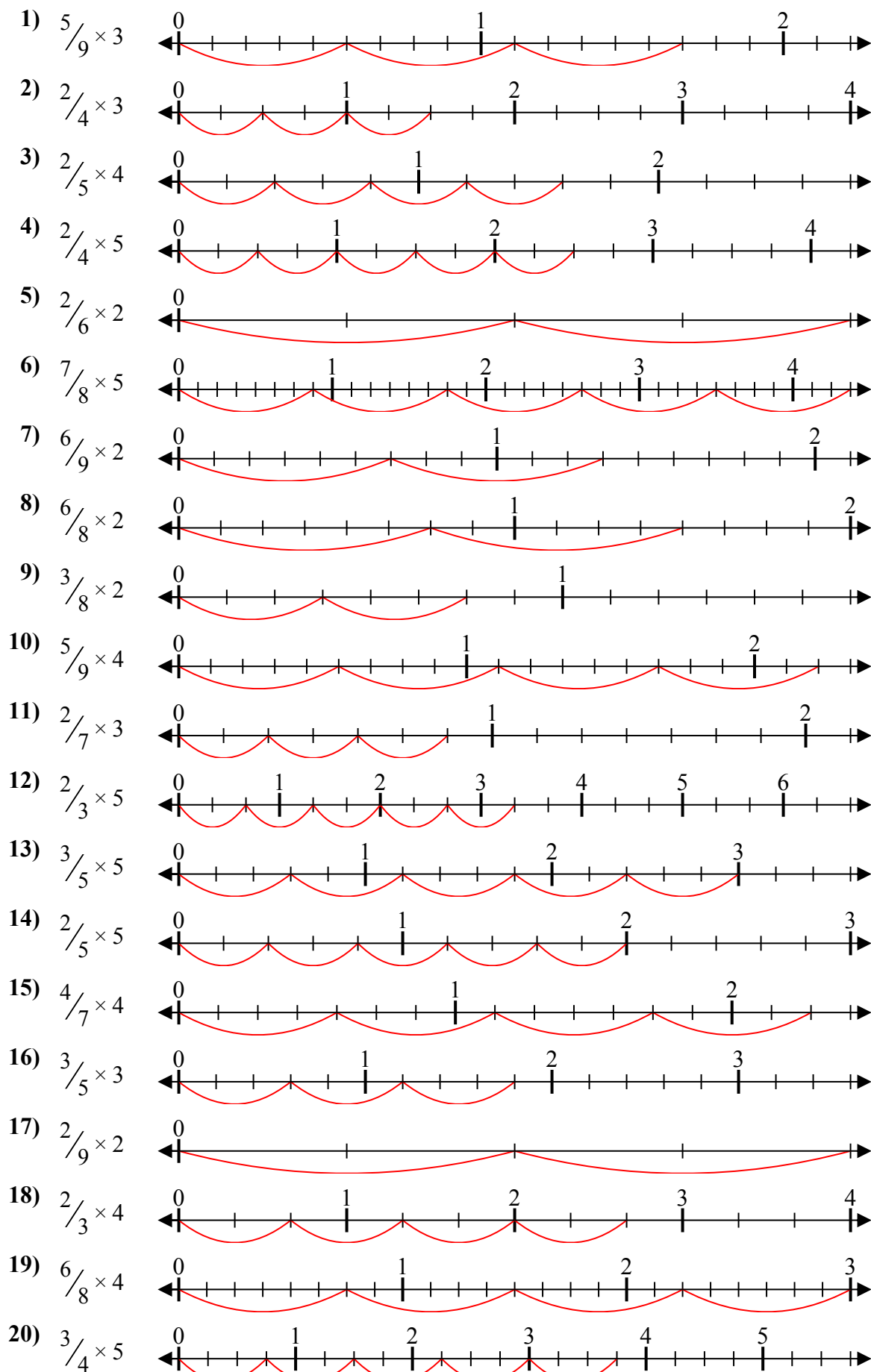
Отвeты



1. _____
2. _____
3. _____
4. _____
5. _____
6. _____
7. _____
8. _____
9. _____
10. _____
11. _____
12. _____
13. _____
14. _____
15. _____
16. _____
17. _____
18. _____
19. _____
20. _____



Решите каждую задачу.



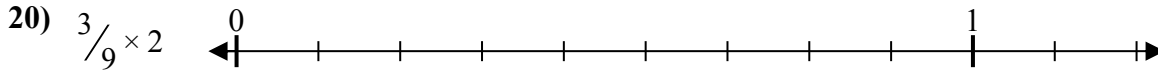
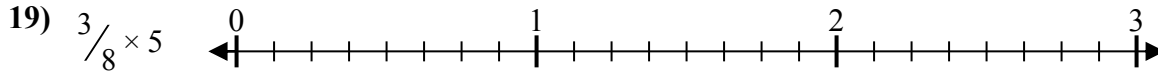
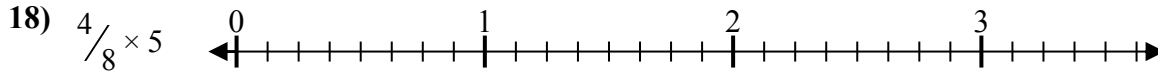
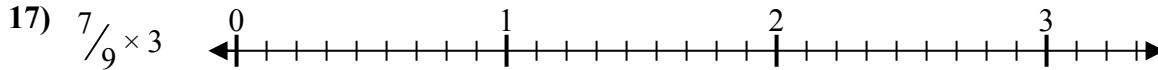
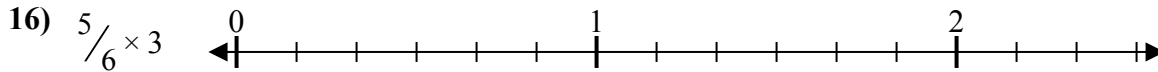
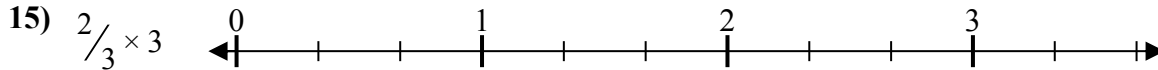
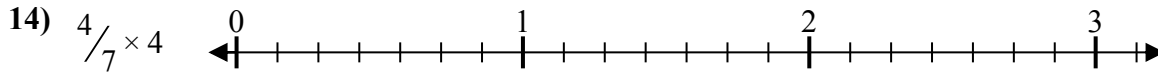
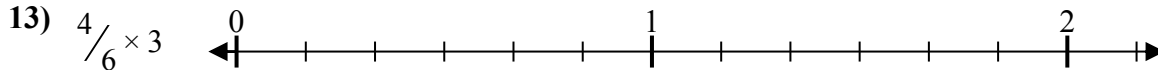
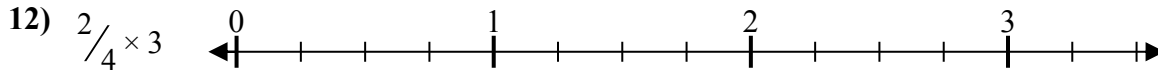
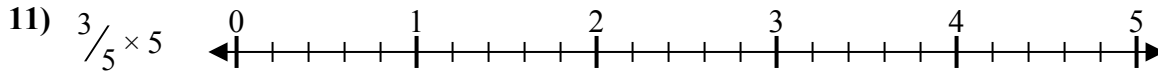
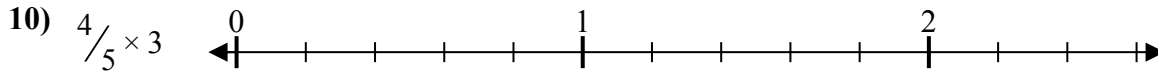
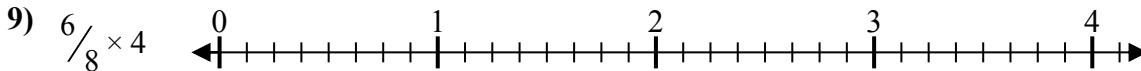
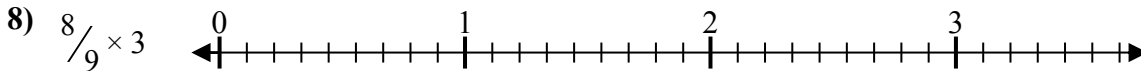
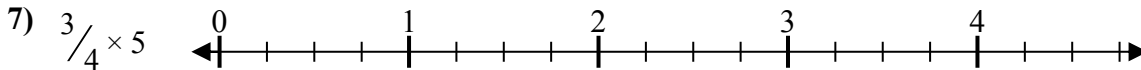

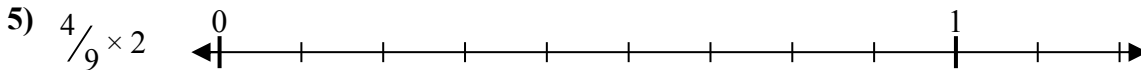
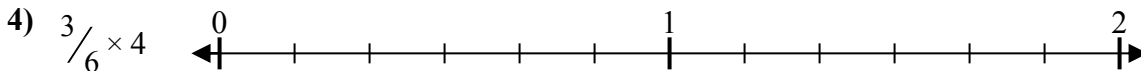
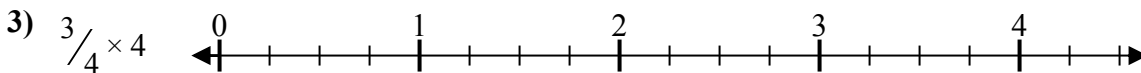

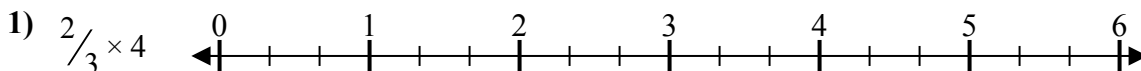
Отвѣты

1. $\frac{15}{9} = 1\frac{2}{3}$
2. $\frac{6}{4} = 1\frac{1}{2}$
3. $\frac{8}{5} = 1\frac{3}{5}$
4. $\frac{10}{4} = 2\frac{1}{2}$
5. $\frac{4}{6} = \frac{2}{3}$
6. $\frac{35}{8} = 4\frac{3}{8}$
7. $\frac{12}{9} = 1\frac{1}{3}$
8. $\frac{12}{8} = 1\frac{1}{2}$
9. $\frac{6}{8} = \frac{3}{4}$
10. $\frac{20}{9} = 2\frac{2}{9}$
11. $\frac{6}{7} = \frac{6}{7}$
12. $\frac{10}{3} = 3\frac{1}{3}$
13. $\frac{15}{5} = 3$
14. $\frac{10}{5} = 2$
15. $\frac{16}{7} = 2\frac{2}{7}$
16. $\frac{9}{5} = 1\frac{4}{5}$
17. $\frac{4}{9} = \frac{4}{9}$
18. $\frac{8}{3} = 2\frac{2}{3}$
19. $\frac{24}{8} = 3$
20. $\frac{15}{4} = 3\frac{3}{4}$



Решите каждую задачу.

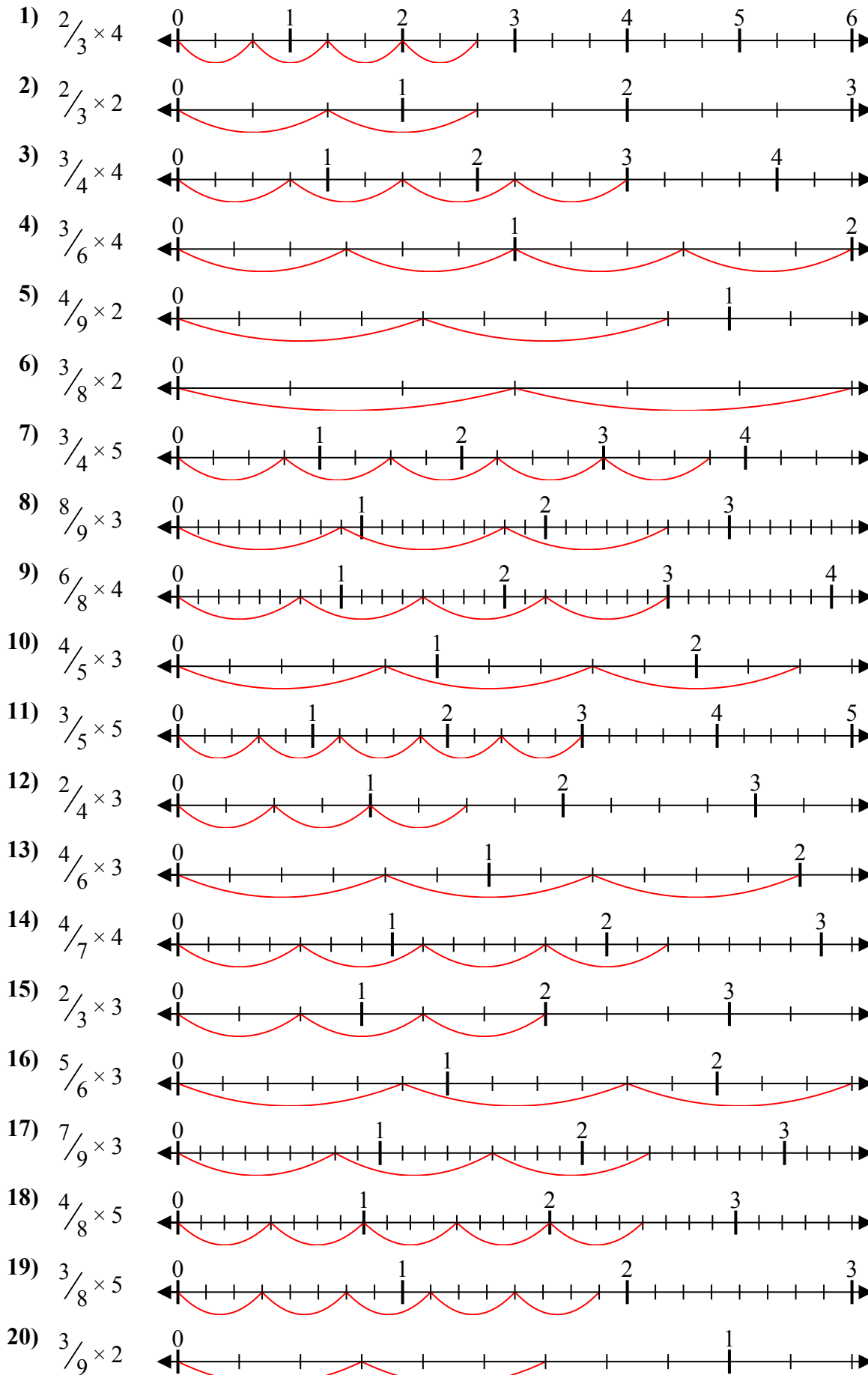
Отвeты



1. _____
2. _____
3. _____
4. _____
5. _____
6. _____
7. _____
8. _____
9. _____
10. _____
11. _____
12. _____
13. _____
14. _____
15. _____
16. _____
17. _____
18. _____
19. _____
20. _____



Решите каждую задачу.



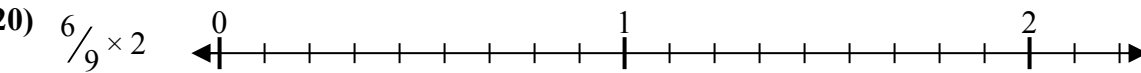
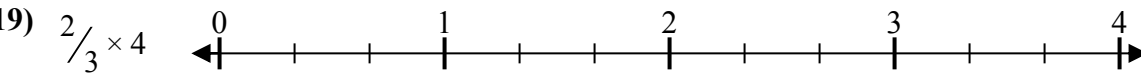
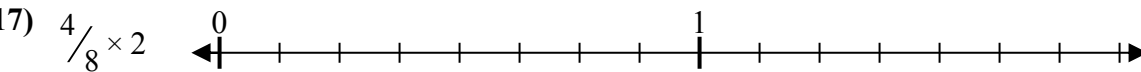
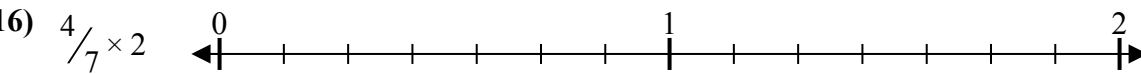
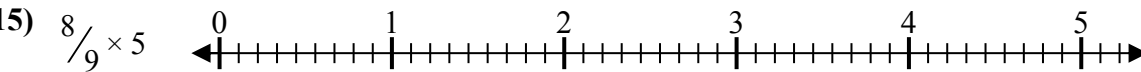
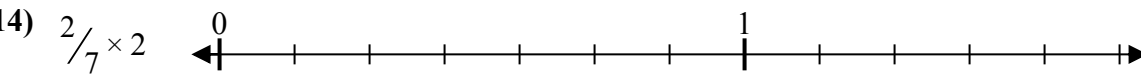
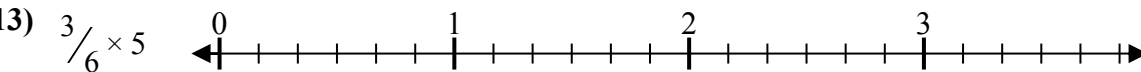
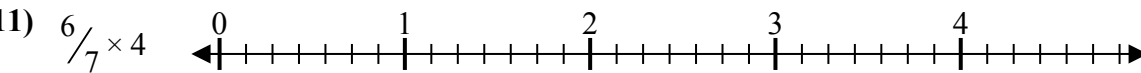
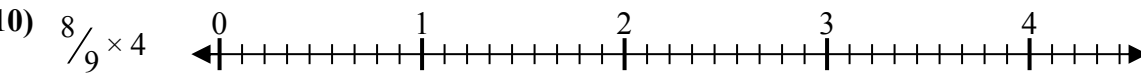
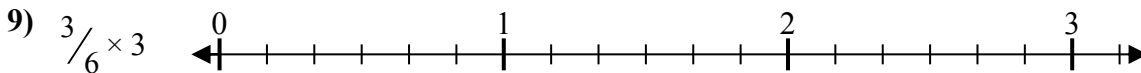
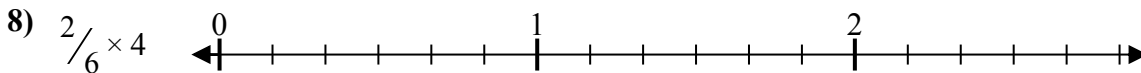
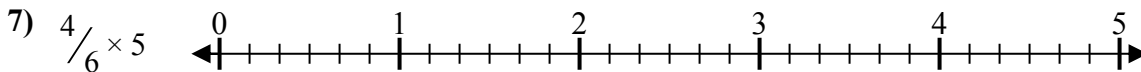
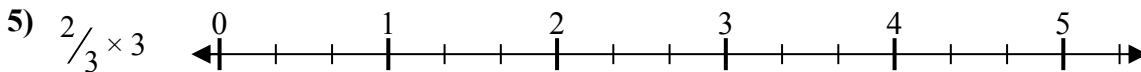
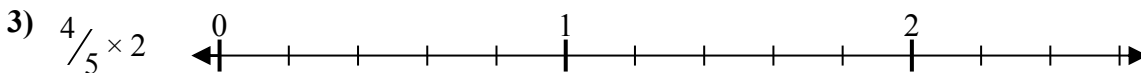

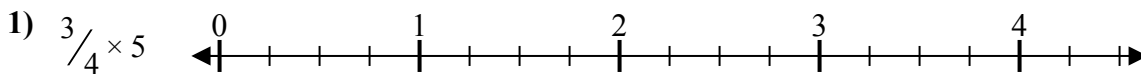
ОТВЕТЫ

1. $\frac{8}{3} = 2\frac{2}{3}$
2. $\frac{4}{3} = 1\frac{1}{3}$
3. $\frac{12}{4} = 3$
4. $\frac{12}{6} = 2$
5. $\frac{8}{9} = \frac{8}{9}$
6. $\frac{6}{8} = \frac{3}{4}$
7. $\frac{15}{4} = 3\frac{3}{4}$
8. $\frac{24}{9} = 2\frac{2}{3}$
9. $\frac{24}{8} = 3$
10. $\frac{12}{5} = 2\frac{2}{5}$
11. $\frac{15}{5} = 3$
12. $\frac{6}{4} = 1\frac{1}{2}$
13. $\frac{12}{6} = 2$
14. $\frac{16}{7} = 2\frac{2}{7}$
15. $\frac{6}{3} = 2$
16. $\frac{15}{6} = 2\frac{1}{2}$
17. $\frac{21}{9} = 2\frac{1}{3}$
18. $\frac{20}{8} = 2\frac{1}{2}$
19. $\frac{15}{8} = 1\frac{7}{8}$
20. $\frac{6}{9} = \frac{2}{3}$



Решите каждую задачу.

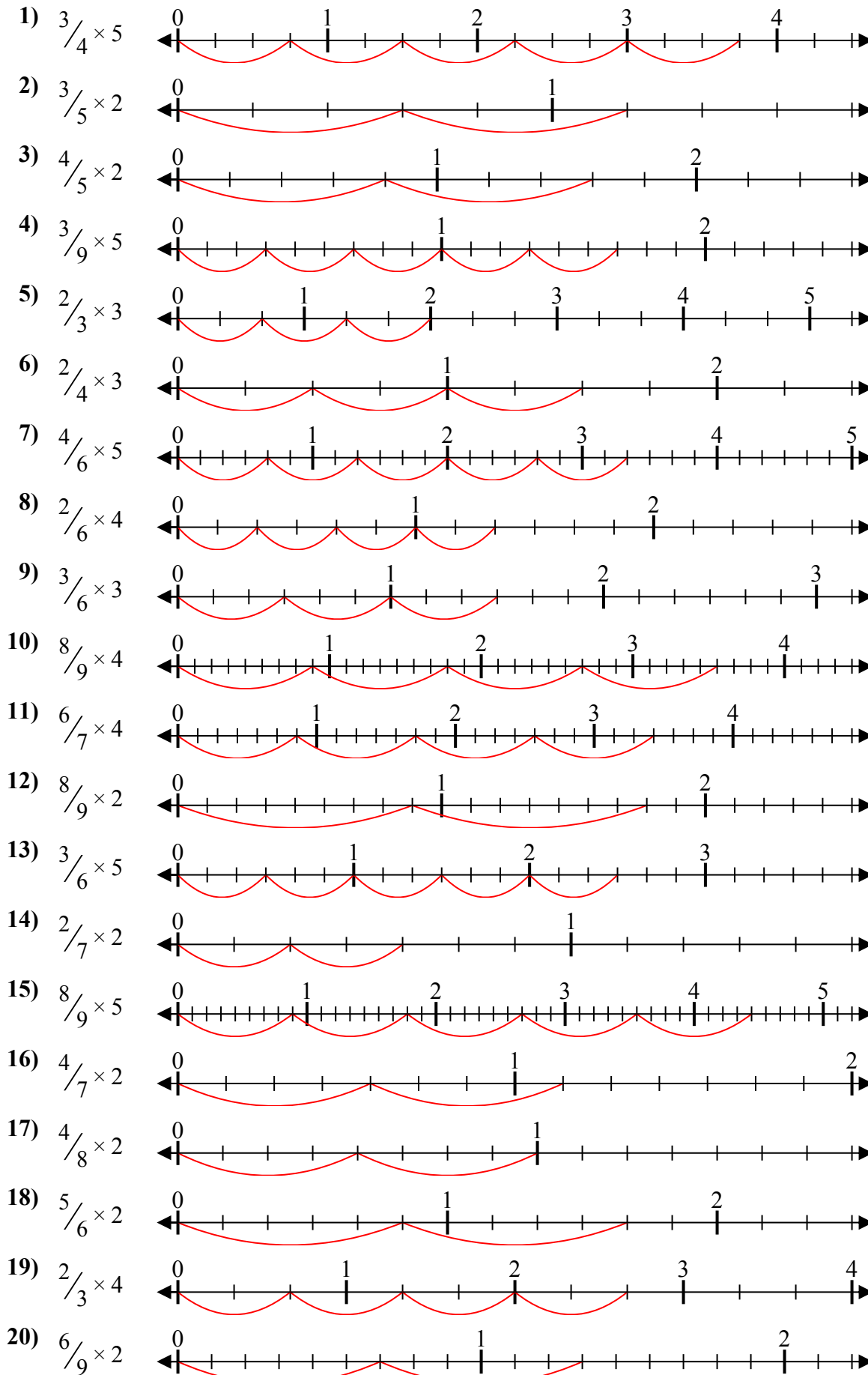
Ответы



1. _____
2. _____
3. _____
4. _____
5. _____
6. _____
7. _____
8. _____
9. _____
10. _____
11. _____
12. _____
13. _____
14. _____
15. _____
16. _____
17. _____
18. _____
19. _____
20. _____



Решите каждую задачу.



Ответы

1. $\frac{15}{4} = 3\frac{3}{4}$
2. $\frac{6}{5} = 1\frac{1}{5}$
3. $\frac{8}{5} = 1\frac{3}{5}$
4. $\frac{15}{9} = 1\frac{2}{3}$
5. $\frac{6}{3} = 2$
6. $\frac{6}{4} = 1\frac{1}{2}$
7. $\frac{20}{6} = 3\frac{1}{3}$
8. $\frac{8}{6} = 1\frac{1}{3}$
9. $\frac{9}{6} = 1\frac{1}{2}$
10. $\frac{32}{9} = 3\frac{5}{9}$
11. $\frac{24}{7} = 3\frac{3}{7}$
12. $\frac{16}{9} = 1\frac{7}{9}$
13. $\frac{15}{6} = 2\frac{1}{2}$
14. $\frac{4}{7} = \frac{4}{7}$
15. $\frac{40}{9} = 4\frac{4}{9}$
16. $\frac{8}{7} = 1\frac{1}{7}$
17. $\frac{8}{8} = 1$
18. $\frac{10}{6} = 1\frac{2}{3}$
19. $\frac{8}{3} = 2\frac{2}{3}$
20. $\frac{12}{9} = 1\frac{1}{3}$



Решите каждую задачу.

Отвeты

1) $\frac{3}{8} \times 2$

2) $\frac{2}{5} \times 5$

3) $\frac{5}{8} \times 3$

4) $\frac{3}{9} \times 4$

5) $\frac{2}{3} \times 5$

6) $\frac{2}{5} \times 2$

7) $\frac{5}{7} \times 3$

8) $\frac{7}{9} \times 2$

9) $\frac{2}{4} \times 4$

10) $\frac{2}{3} \times 3$

11) $\frac{2}{3} \times 2$

12) $\frac{2}{7} \times 4$

13) $\frac{2}{6} \times 3$

14) $\frac{3}{4} \times 3$

15) $\frac{3}{5} \times 3$

16) $\frac{3}{4} \times 5$

17) $\frac{3}{5} \times 4$

18) $\frac{6}{7} \times 4$

19) $\frac{5}{6} \times 3$

20) $\frac{6}{8} \times 3$

1. _____

2. _____

3. _____

4. _____

5. _____

6. _____

7. _____

8. _____

9. _____

10. _____

11. _____

12. _____

13. _____

14. _____

15. _____

16. _____

17. _____

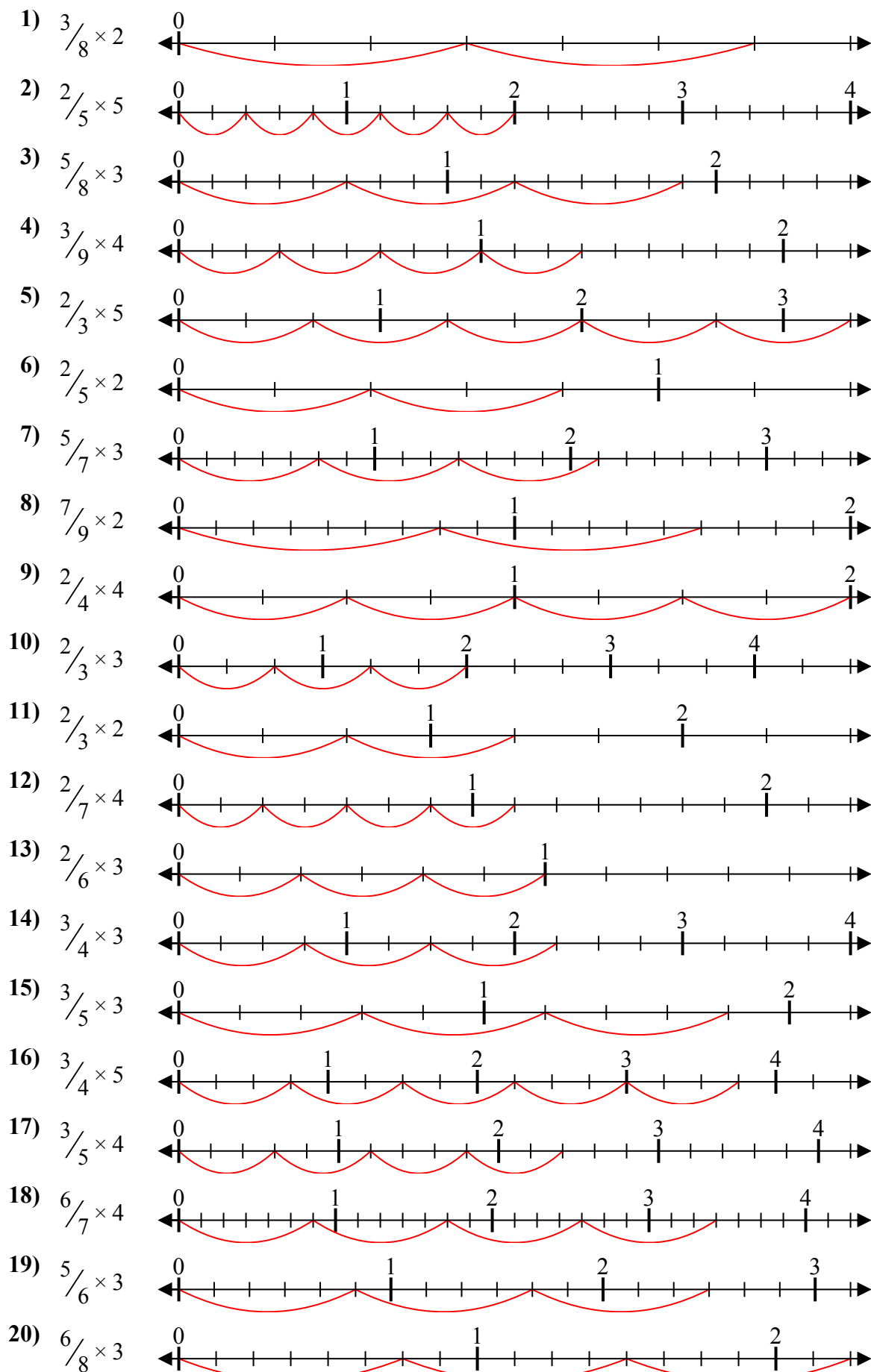
18. _____

19. _____

20. _____



Решите каждую задачу.



Ответы

1. $\frac{6}{8} = \frac{3}{4}$
2. $\frac{10}{5} = 2$
3. $\frac{15}{8} = 1\frac{7}{8}$
4. $\frac{12}{9} = 1\frac{1}{3}$
5. $\frac{10}{3} = 3\frac{1}{3}$
6. $\frac{4}{5} = \frac{4}{5}$
7. $\frac{15}{7} = 2\frac{1}{7}$
8. $\frac{14}{9} = 1\frac{5}{9}$
9. $\frac{8}{4} = 2$
10. $\frac{6}{3} = 2$
11. $\frac{4}{3} = 1\frac{1}{3}$
12. $\frac{8}{7} = 1\frac{1}{7}$
13. $\frac{6}{6} = 1$
14. $\frac{9}{4} = 2\frac{1}{4}$
15. $\frac{9}{5} = 1\frac{4}{5}$
16. $\frac{15}{4} = 3\frac{3}{4}$
17. $\frac{12}{5} = 2\frac{2}{5}$
18. $\frac{24}{7} = 3\frac{3}{7}$
19. $\frac{15}{6} = 2\frac{1}{2}$
20. $\frac{18}{8} = 2\frac{1}{4}$