





Используйте поля с фигурами, показывающие примеры умножения.


об) $\frac{3}{6} \times \frac{1}{9} =$




1) $\frac{2}{3} \times \frac{2}{6} =$




2) $\frac{2}{3} \times \frac{2}{3} =$




3) $\frac{6}{7} \times \frac{1}{3} =$




4) $\frac{1}{7} \times \frac{1}{2} =$




5) $\frac{3}{8} \times \frac{5}{9} =$




6) $\frac{3}{4} \times \frac{1}{7} =$




7) $\frac{2}{8} \times \frac{2}{5} =$




8) $\frac{3}{7} \times \frac{3}{8} =$




9) $\frac{4}{5} \times \frac{1}{4} =$



10) $\frac{2}{4} \times \frac{6}{8} =$



11) $\frac{2}{7} \times \frac{1}{4} =$

**ОТВЕТЫ**об. $\frac{3}{54}$

1. _____

2. _____

3. _____

4. _____

5. _____

6. _____

7. _____

8. _____

9. _____

10. _____

11. _____

