





Используйте поля с фигурами, показывающие примеры умножения.


об) $\frac{2}{5} \times \frac{3}{8} =$




1) $\frac{2}{3} \times \frac{3}{5} =$




2) $\frac{2}{6} \times \frac{7}{8} =$




3) $\frac{5}{8} \times \frac{1}{4} =$




4) $\frac{1}{4} \times \frac{6}{8} =$




5) $\frac{2}{8} \times \frac{7}{8} =$




6) $\frac{1}{2} \times \frac{1}{3} =$




7) $\frac{1}{2} \times \frac{4}{7} =$




8) $\frac{3}{9} \times \frac{3}{4} =$




9) $\frac{2}{9} \times \frac{3}{4} =$



10) $\frac{4}{6} \times \frac{1}{6} =$



11) $\frac{2}{3} \times \frac{7}{8} =$

**ОТВЕТЫ**об. $\frac{6}{40}$

1. _____

2. _____

3. _____

4. _____

5. _____

6. _____

7. _____

8. _____

9. _____

10. _____

11. _____

