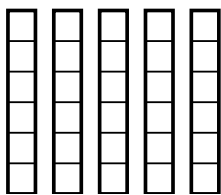




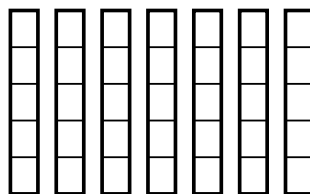
Используйте визуальные модели при решении.

**Ответы**

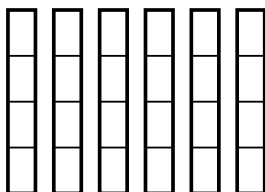
1)  $\frac{2}{6} \times 5 =$



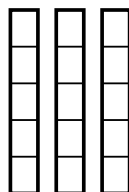
2)  $\frac{3}{5} \times 7 =$



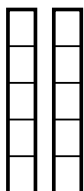
3)  $\frac{1}{4} \times 6 =$



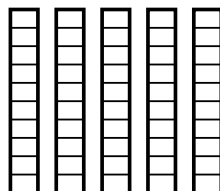
4)  $\frac{3}{5} \times 3 =$



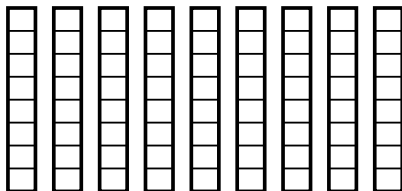
5)  $\frac{2}{5} \times 2 =$



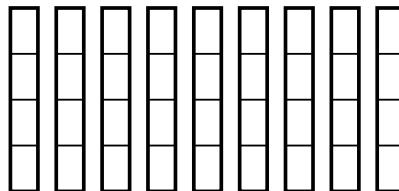
6)  $\frac{3}{10} \times 5 =$



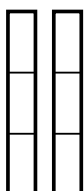
7)  $\frac{2}{8} \times 9 =$



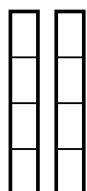
8)  $\frac{3}{4} \times 9 =$



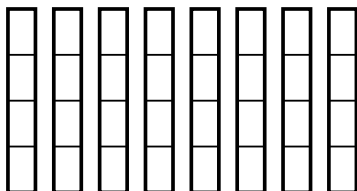
9)  $\frac{2}{3} \times 2 =$



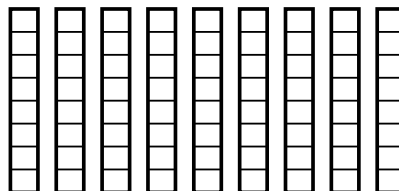
10)  $\frac{1}{4} \times 2 =$



11)  $\frac{1}{4} \times 8 =$



12)  $\frac{6}{8} \times 9 =$



1. \_\_\_\_\_

2. \_\_\_\_\_

3. \_\_\_\_\_

4. \_\_\_\_\_

5. \_\_\_\_\_

6. \_\_\_\_\_

7. \_\_\_\_\_

8. \_\_\_\_\_

9. \_\_\_\_\_

10. \_\_\_\_\_

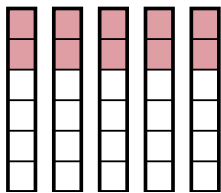
11. \_\_\_\_\_

12. \_\_\_\_\_

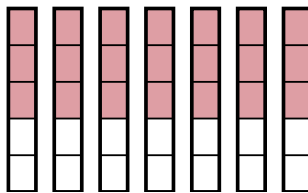


Используйте визуальные модели при решении.

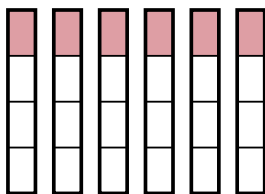
1)  $\frac{2}{6} \times 5 =$



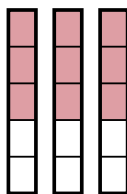
2)  $\frac{3}{5} \times 7 =$



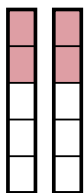
3)  $\frac{1}{4} \times 6 =$



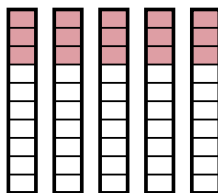
4)  $\frac{3}{5} \times 3 =$



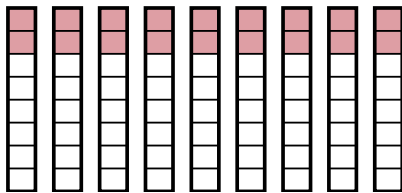
5)  $\frac{2}{5} \times 2 =$



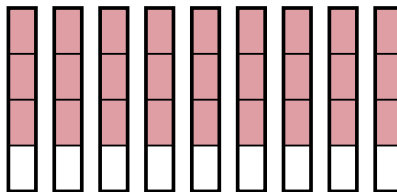
6)  $\frac{3}{10} \times 5 =$



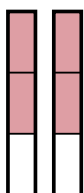
7)  $\frac{2}{8} \times 9 =$



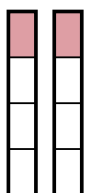
8)  $\frac{3}{4} \times 9 =$



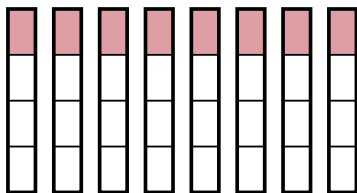
9)  $\frac{2}{3} \times 2 =$



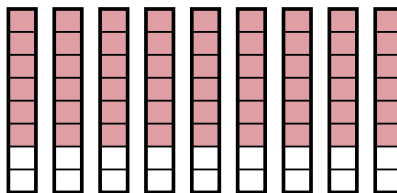
10)  $\frac{1}{4} \times 2 =$



11)  $\frac{1}{4} \times 8 =$



12)  $\frac{6}{8} \times 9 =$



**Отвѣты**

1.  $\frac{10}{6}$

2.  $\frac{21}{5}$

3.  $\frac{6}{4}$

4.  $\frac{9}{5}$

5.  $\frac{4}{5}$

6.  $\frac{15}{10}$

7.  $\frac{18}{8}$

8.  $\frac{27}{4}$

9.  $\frac{4}{3}$

10.  $\frac{2}{4}$

11.  $\frac{8}{4}$

12.  $\frac{54}{8}$