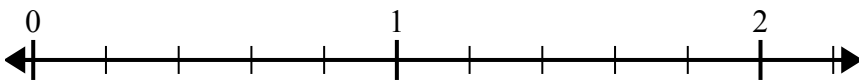
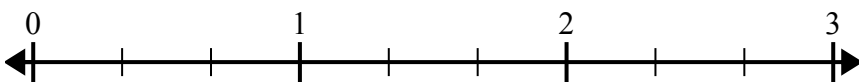


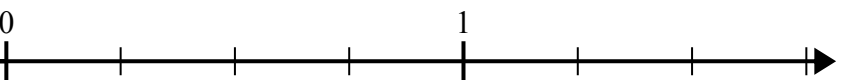


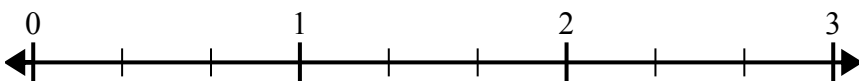
Используйте числовую прямую при решении.

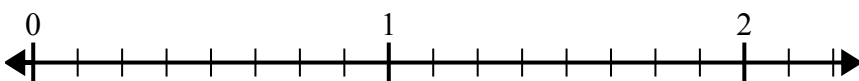
**ОТВЕТЫ**

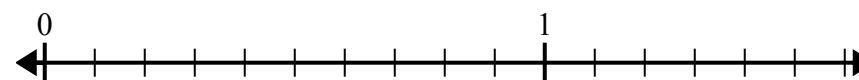
1)  $6 \times \frac{1}{5} =$  

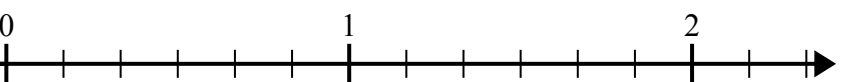
2)  $\frac{1}{3} \times 8 =$  

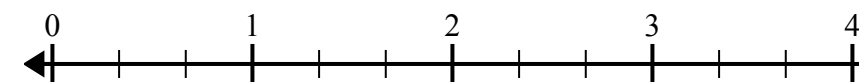
3)  $3 \times \frac{1}{4} =$  

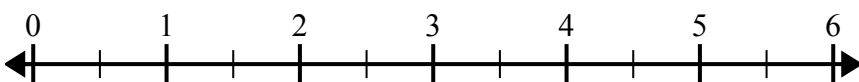
4)  $\frac{1}{3} \times 6 =$  

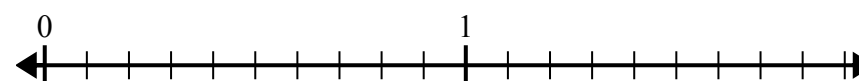
5)  $8 \times \frac{1}{8} =$  

6)  $\frac{1}{10} \times 6 =$  

7)  $\frac{1}{6} \times 4 =$  

8)  $10 \times \frac{1}{3} =$  

9)  $7 \times \frac{1}{2} =$  

10)  $7 \times \frac{1}{10} =$  

1. \_\_\_\_\_

2. \_\_\_\_\_

3. \_\_\_\_\_

4. \_\_\_\_\_

5. \_\_\_\_\_

6. \_\_\_\_\_

7. \_\_\_\_\_

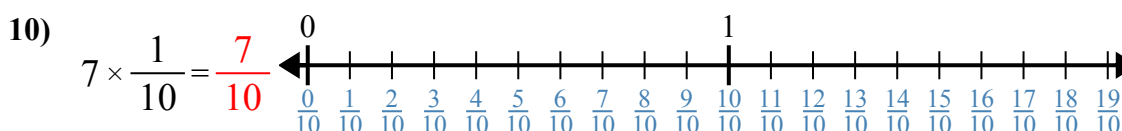
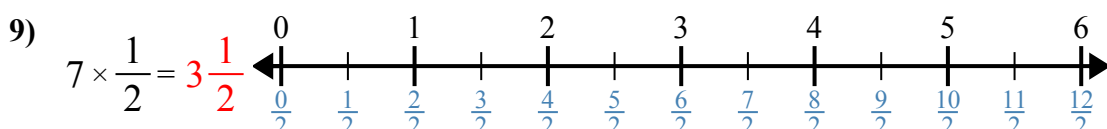
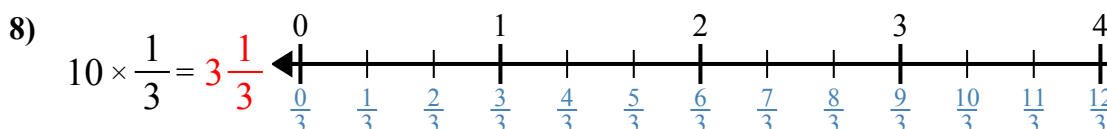
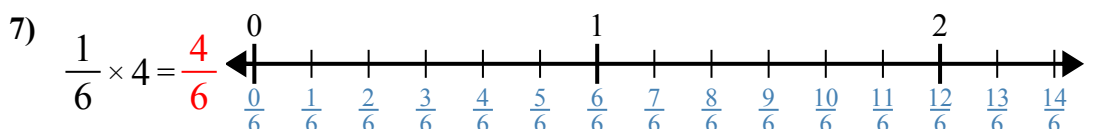
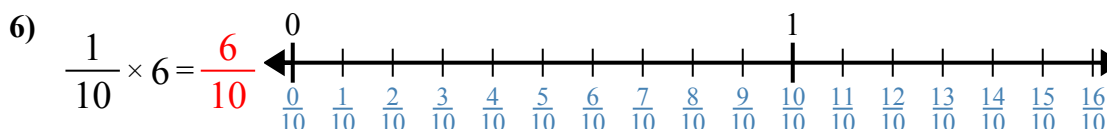
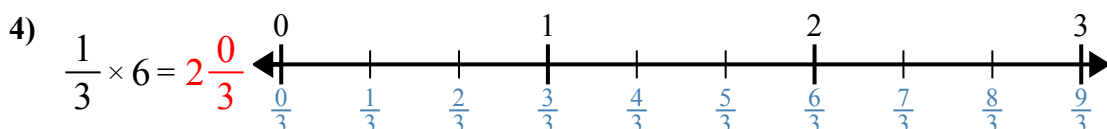
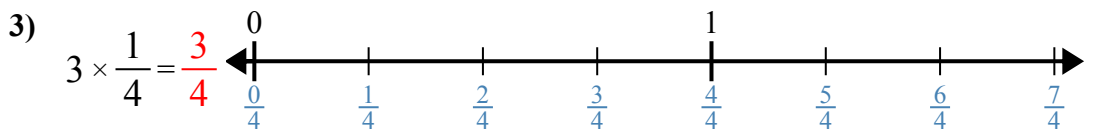
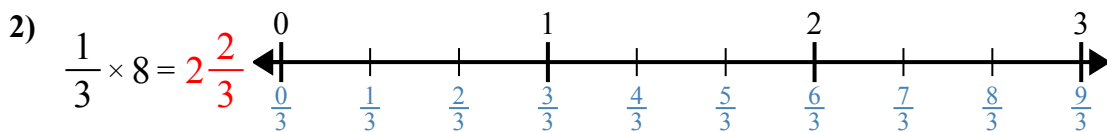
8. \_\_\_\_\_

9. \_\_\_\_\_

10. \_\_\_\_\_



Используйте числовую прямую при решении.

**Ответы**

1.  $1\frac{1}{5}$

2.  $2\frac{2}{3}$

3.  $\frac{3}{4}$

4.  $2\frac{0}{3}$

5.  $1\frac{0}{8}$

6.  $\frac{6}{10}$

7.  $\frac{4}{6}$

8.  $3\frac{1}{3}$

9.  $3\frac{1}{2}$

10.  $\frac{7}{10}$



Используйте числовую прямую при решении.

**Отвeты**

$1\frac{1}{5}$

$1\frac{0}{8}$

$2\frac{2}{3}$

$\frac{7}{10}$

$\frac{6}{10}$

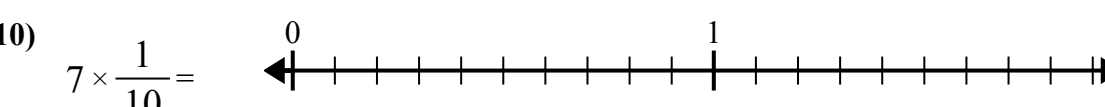
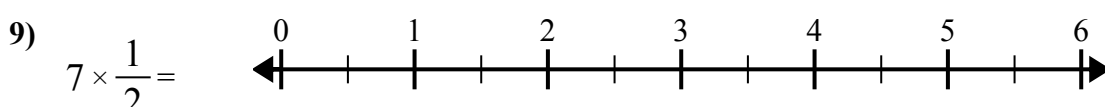
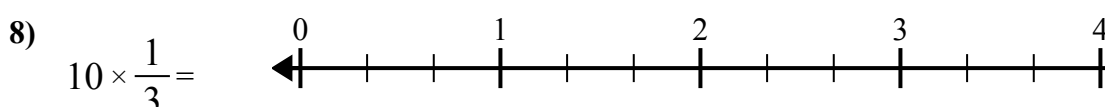
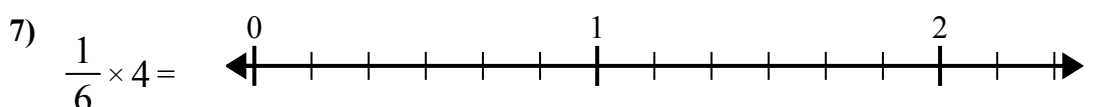
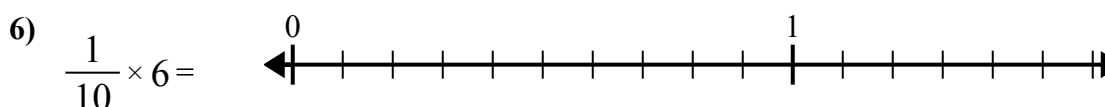
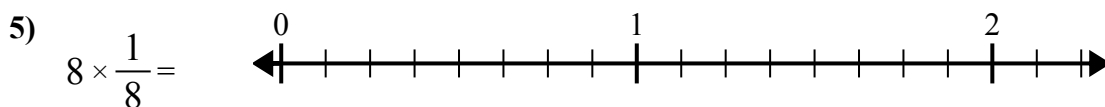
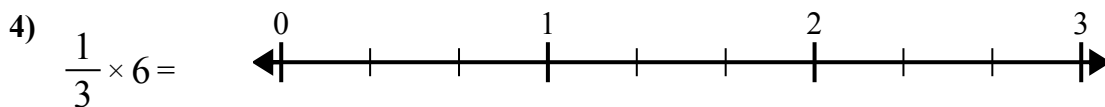
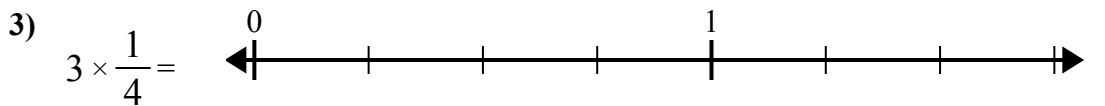
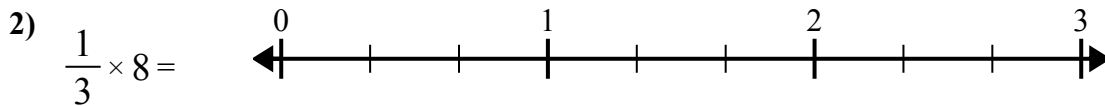
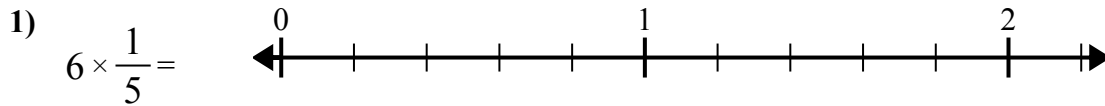
$\frac{4}{6}$

$3\frac{1}{3}$

$\frac{3}{4}$

$3\frac{1}{2}$

$2\frac{0}{3}$



1. \_\_\_\_\_
2. \_\_\_\_\_
3. \_\_\_\_\_
4. \_\_\_\_\_
5. \_\_\_\_\_
6. \_\_\_\_\_
7. \_\_\_\_\_
8. \_\_\_\_\_
9. \_\_\_\_\_
10. \_\_\_\_\_