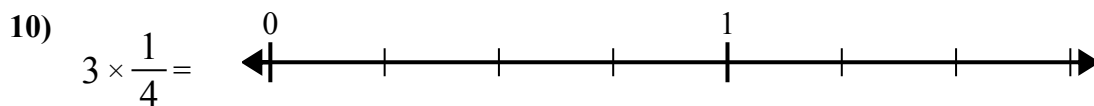
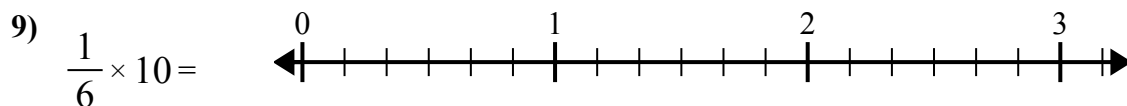
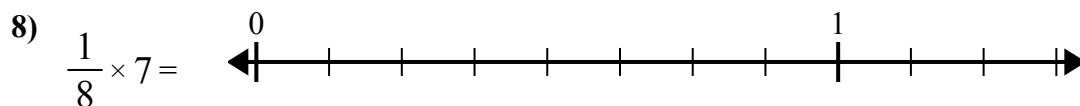
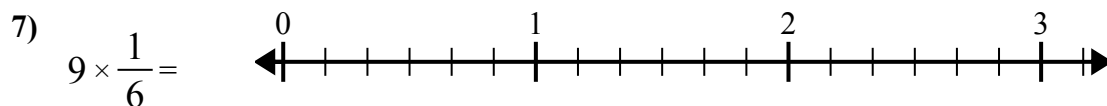
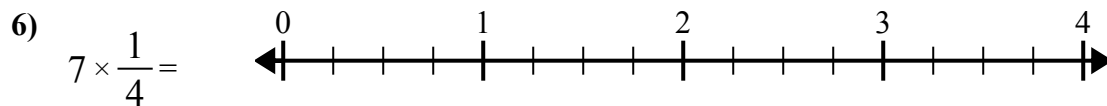
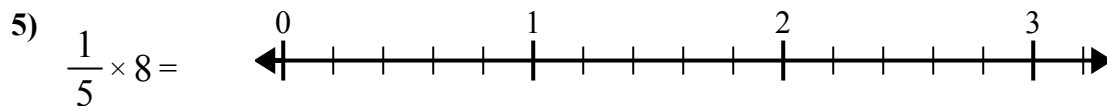
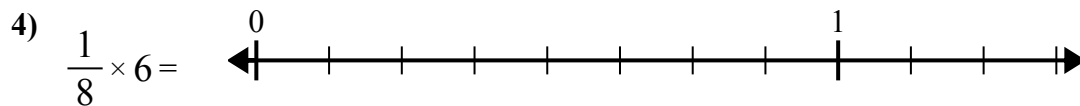
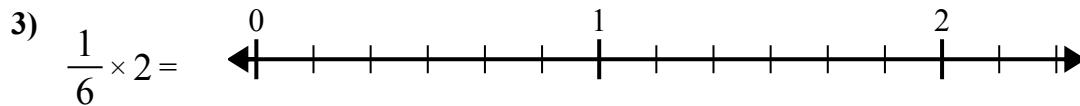
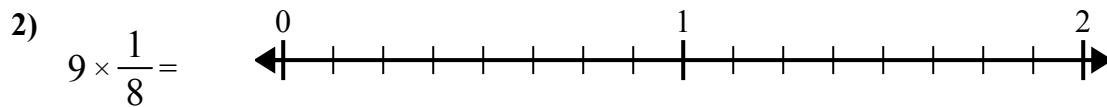
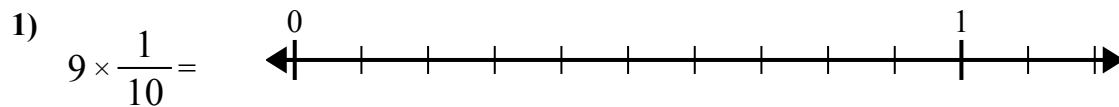




Используйте числовую прямую при решении.



**Ответы**

1. \_\_\_\_\_

2. \_\_\_\_\_

3. \_\_\_\_\_

4. \_\_\_\_\_

5. \_\_\_\_\_

6. \_\_\_\_\_

7. \_\_\_\_\_

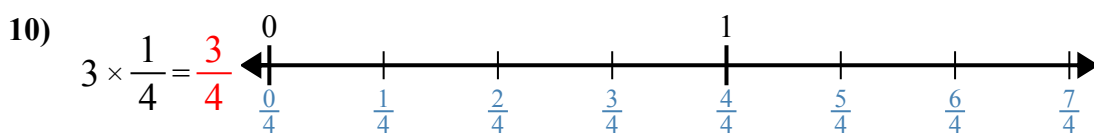
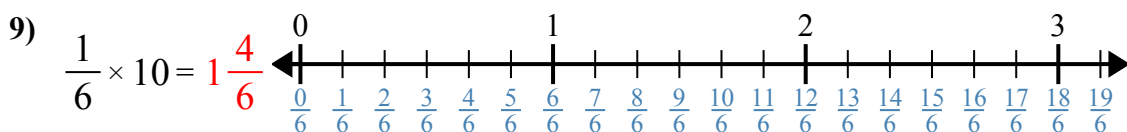
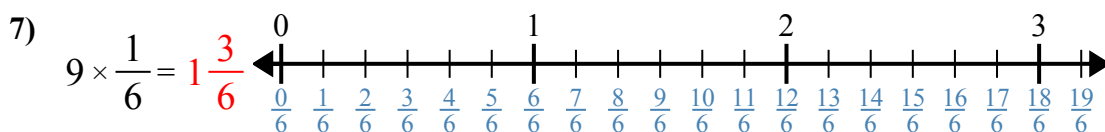
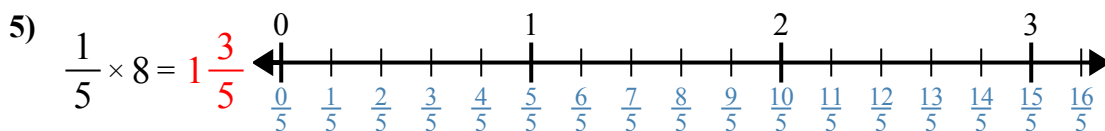
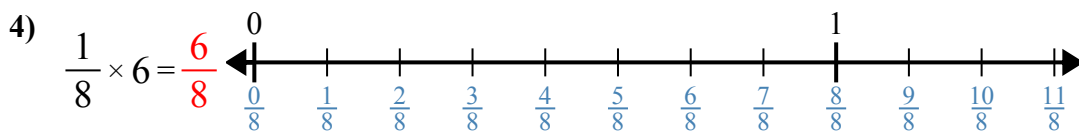
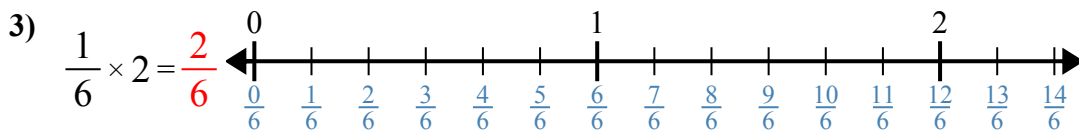
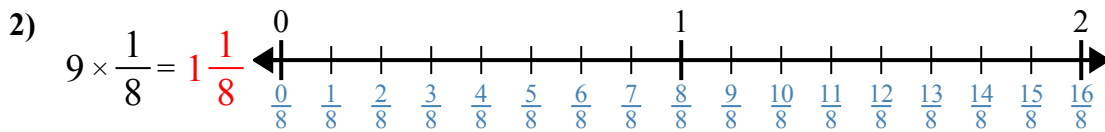
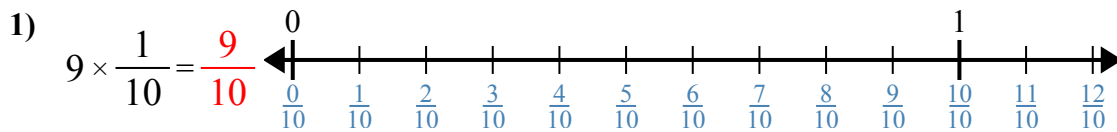
8. \_\_\_\_\_

9. \_\_\_\_\_

10. \_\_\_\_\_



Используйте числовую прямую при решении.



**Отвѣты**

1.            $\frac{9}{10}$           

2.            $1 \frac{1}{8}$           

3.            $\frac{2}{6}$           

4.            $\frac{6}{8}$           

5.            $1 \frac{3}{5}$           

6.            $1 \frac{3}{4}$           

7.            $1 \frac{3}{6}$           

8.            $\frac{7}{8}$           

9.            $1 \frac{4}{6}$           

10.            $\frac{3}{4}$



Используйте числовую прямую при решении.

**Ответы**

$1\frac{3}{4}$

$\frac{3}{4}$

$1\frac{1}{8}$

$1\frac{4}{6}$

$1\frac{3}{6}$

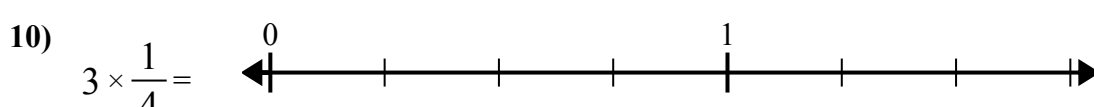
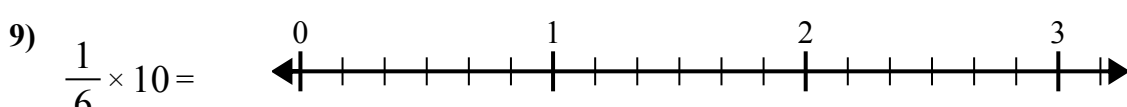
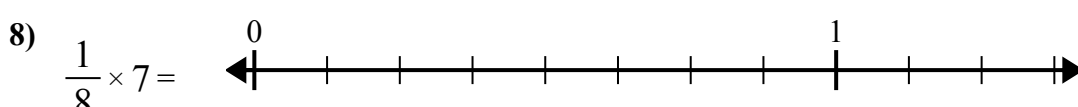
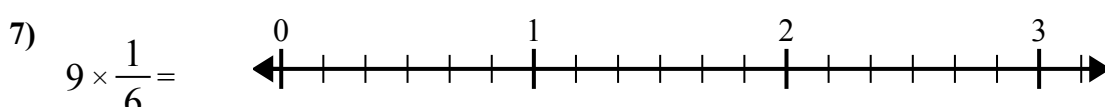
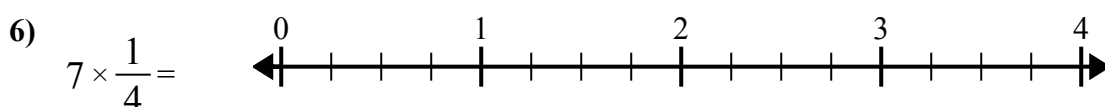
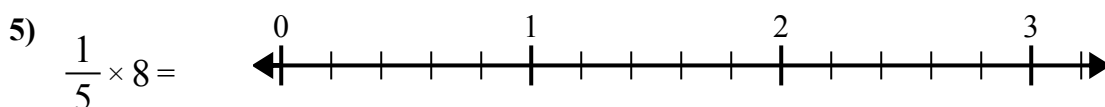
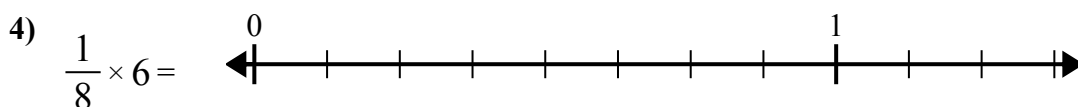
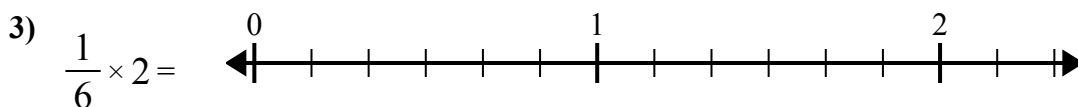
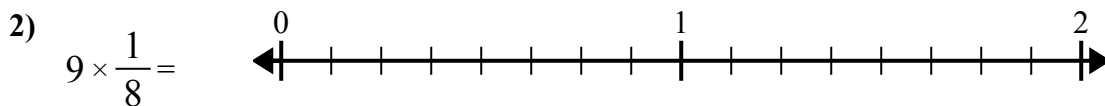
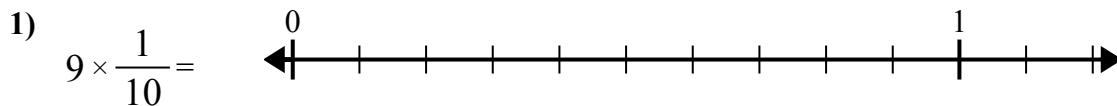
$\frac{2}{6}$

$1\frac{3}{5}$

$\frac{7}{8}$

$\frac{9}{10}$

$\frac{6}{8}$



1. \_\_\_\_\_
2. \_\_\_\_\_
3. \_\_\_\_\_
4. \_\_\_\_\_
5. \_\_\_\_\_
6. \_\_\_\_\_
7. \_\_\_\_\_
8. \_\_\_\_\_
9. \_\_\_\_\_
10. \_\_\_\_\_