





Используйте числовую прямую для решения задачи. Первая отмечена для Вас.


ОТВЕТЫ




1. _____




2. _____



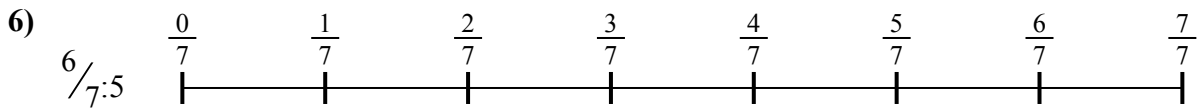
3. _____




4. _____



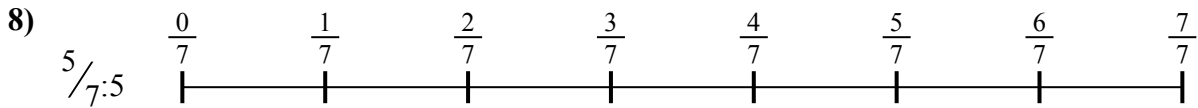
5. _____




6. _____



7. _____



8. _____

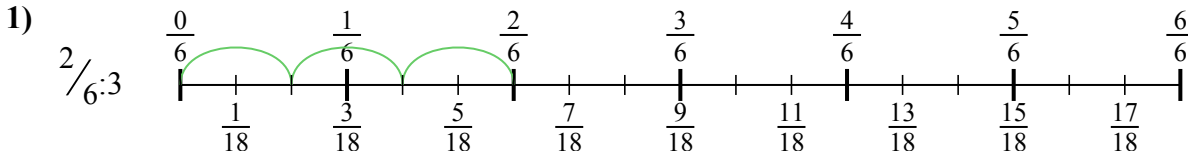


9. _____

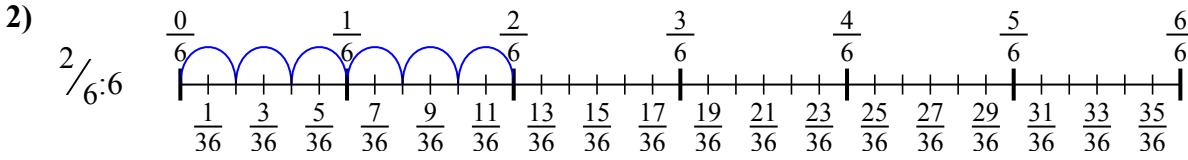


Используйте числовую прямую для решения задачи. Первая отмечена для Вас.

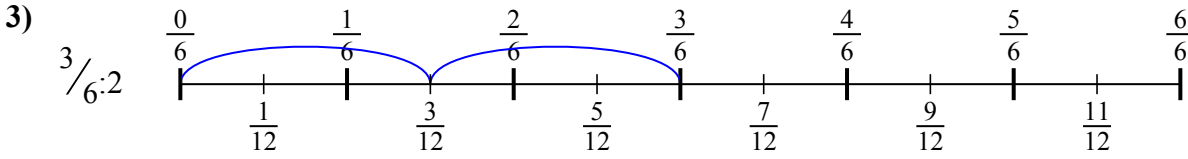
ОТВЕТЫ



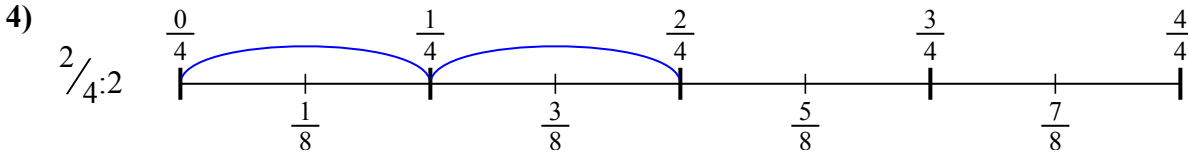
1. $\frac{2}{18}$



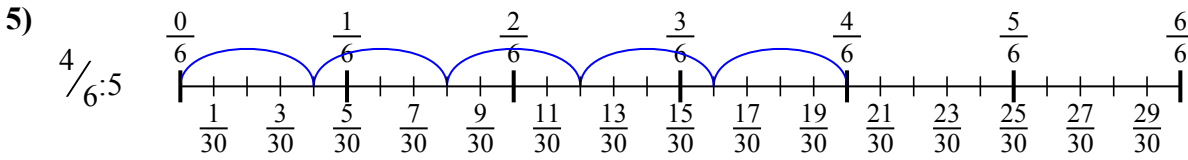
2. $\frac{2}{36}$



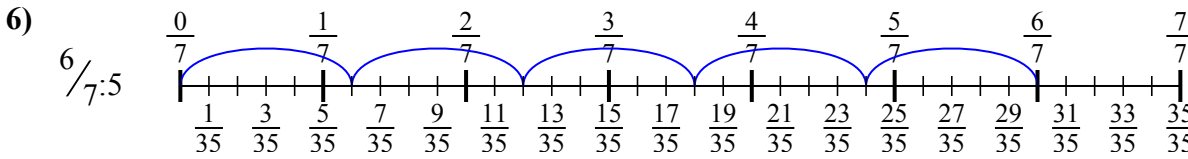
3. $\frac{3}{12}$



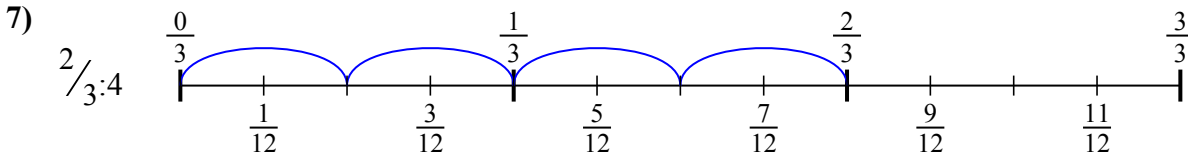
4. $\frac{2}{8}$



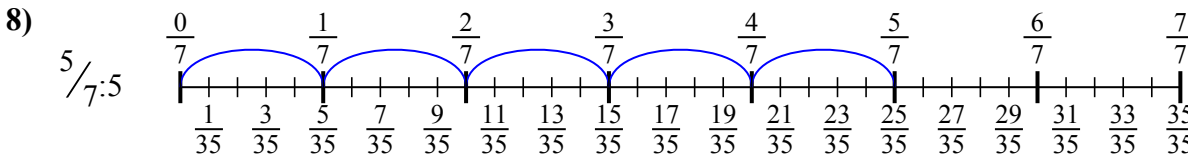
5. $\frac{4}{30}$



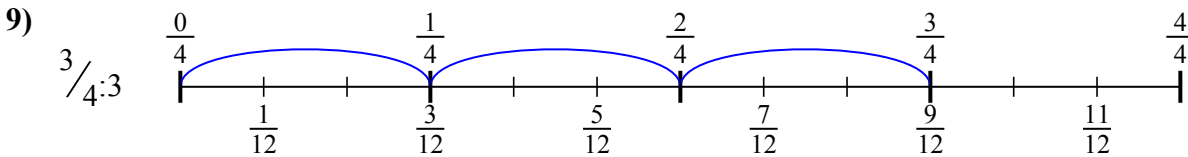
6. $\frac{6}{35}$



7. $\frac{2}{12}$



8. $\frac{5}{35}$



9. $\frac{3}{12}$



Используйте числовую прямую для решения задачи. Первая отмечена для Вас.

ОТВЕТЫ

$\frac{2}{18}$

$\frac{2}{8}$

$\frac{2}{36}$

$\frac{3}{12}$

$\frac{6}{35}$

$\frac{5}{35}$

$\frac{4}{30}$

$\frac{2}{12}$

$\frac{3}{12}$

1. _____

2. _____

3. _____

4. _____

5. _____

6. _____

7. _____

8. _____

9. _____

