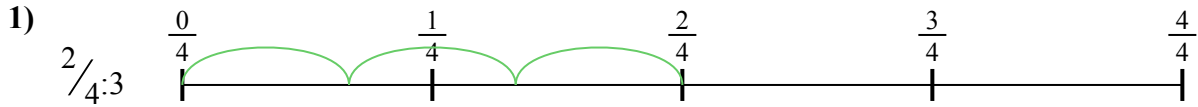




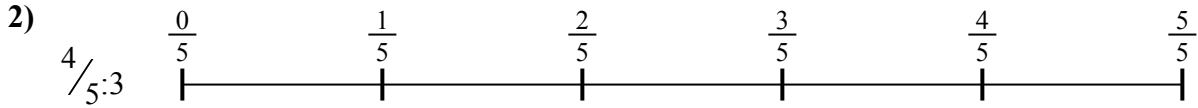
Используйте числовую прямую для решения задачи. Первая отмечена для Вас.

**ОТВЕТЫ**



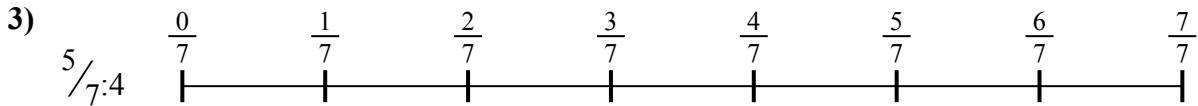
1. \_\_\_\_\_

2. \_\_\_\_\_




3. \_\_\_\_\_

4. \_\_\_\_\_



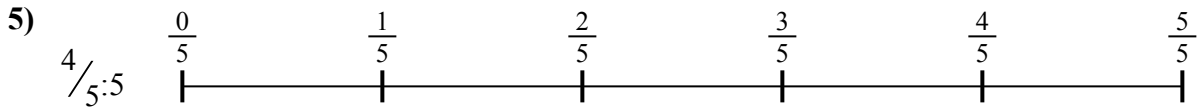
5. \_\_\_\_\_

6. \_\_\_\_\_

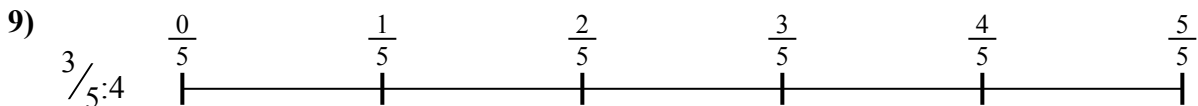
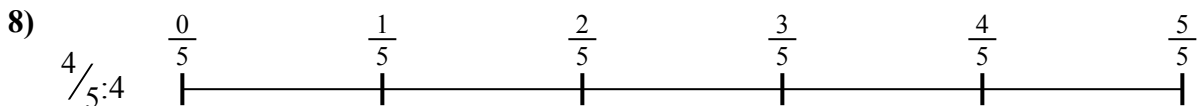


7. \_\_\_\_\_

8. \_\_\_\_\_



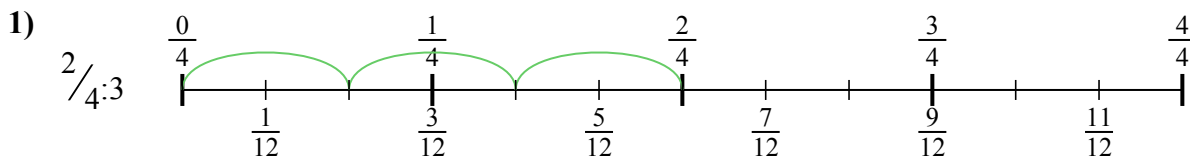
9. \_\_\_\_\_



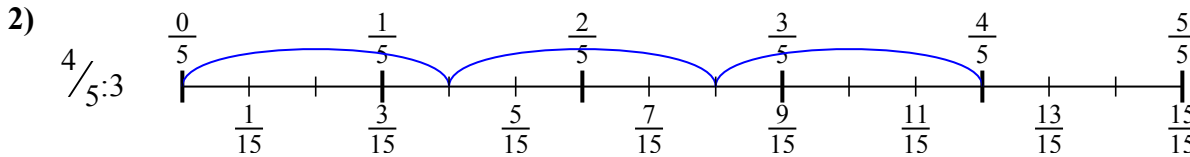


Используйте числовую прямую для решения задачи. Первая отмечена для Вас.

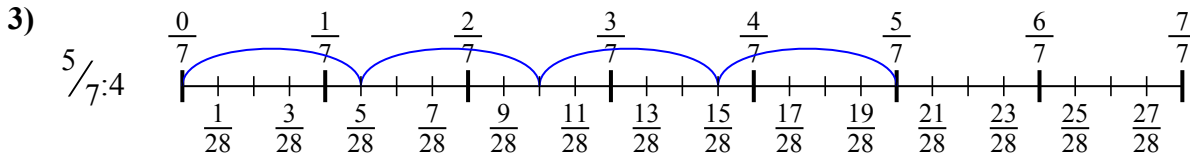
**ОТВЕТЫ**



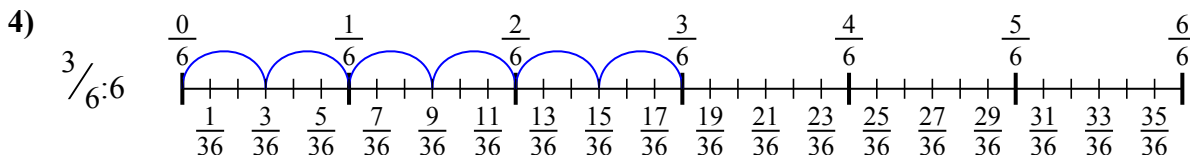
1.  $\frac{2}{12}$



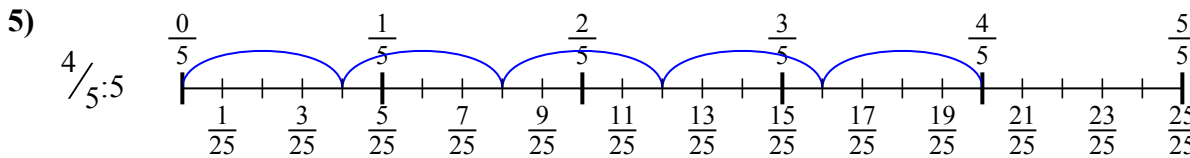
2.  $\frac{4}{15}$



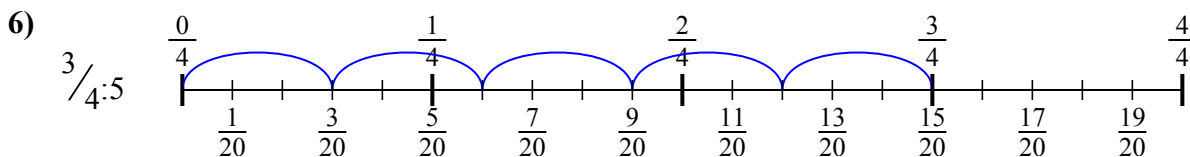
3.  $\frac{5}{28}$



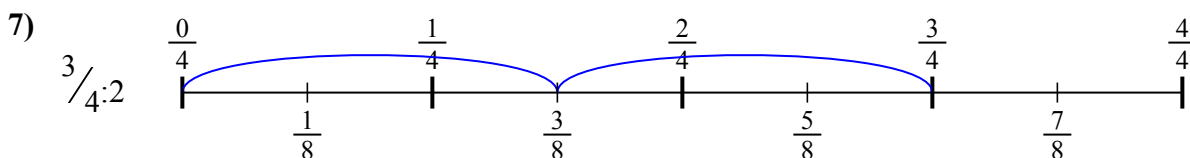
4.  $\frac{3}{36}$



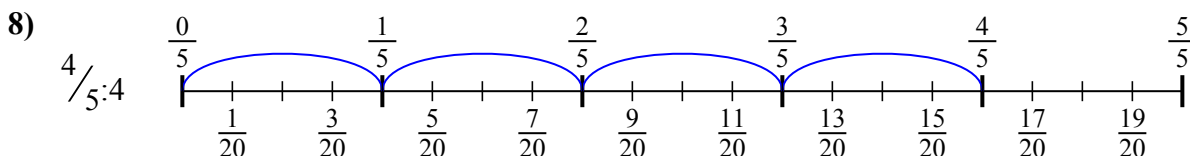
5.  $\frac{4}{25}$



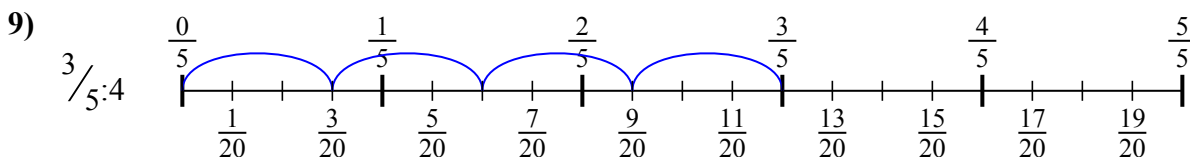
6.  $\frac{3}{20}$



7.  $\frac{3}{8}$



8.  $\frac{4}{20}$



9.  $\frac{3}{20}$



Используйте числовую прямую для решения задачи. Первая отмечена для Вас.

**ОТВЕТЫ**

$\frac{3}{20}$

$\frac{3}{20}$

$\frac{3}{36}$

$\frac{4}{15}$

$\frac{4}{20}$

$\frac{3}{8}$

$\frac{2}{12}$

$\frac{4}{25}$

$\frac{5}{28}$

1. \_\_\_\_\_

2. \_\_\_\_\_

3. \_\_\_\_\_

4. \_\_\_\_\_

5. \_\_\_\_\_

6. \_\_\_\_\_

7. \_\_\_\_\_

8. \_\_\_\_\_

9. \_\_\_\_\_

