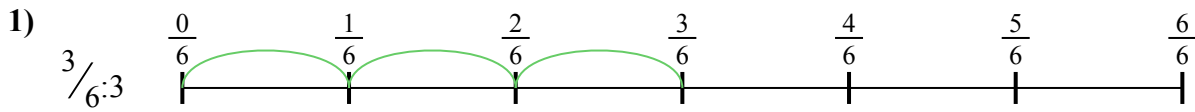





Используйте числовую прямую для решения задачи. Первая отмечена для Вас.

**ОТВЕТЫ**



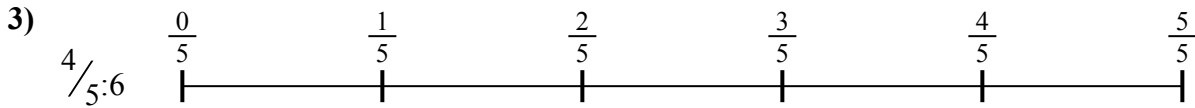
1. \_\_\_\_\_

2. \_\_\_\_\_



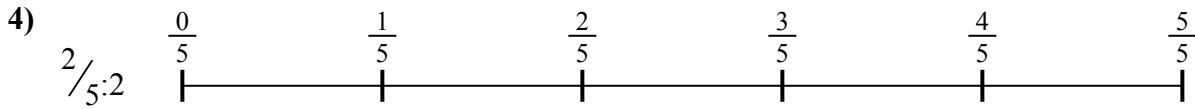
3. \_\_\_\_\_

4. \_\_\_\_\_



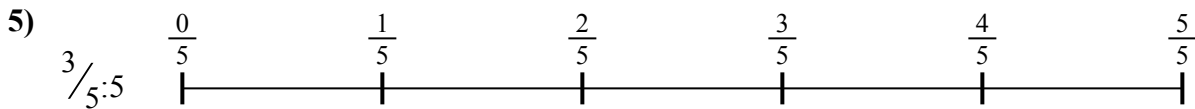
5. \_\_\_\_\_

6. \_\_\_\_\_


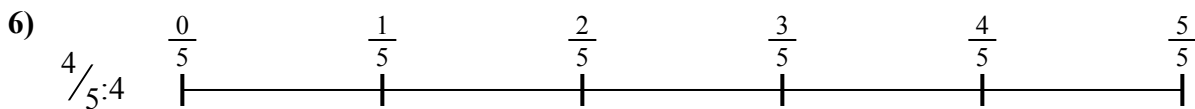


7. \_\_\_\_\_

8. \_\_\_\_\_



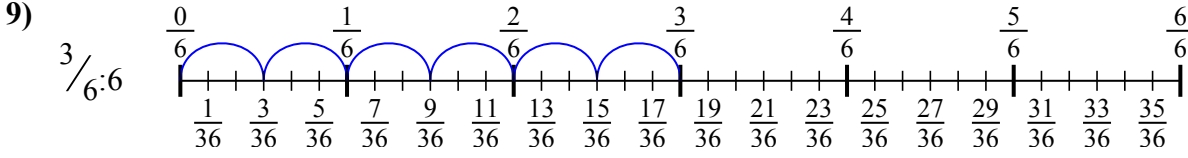
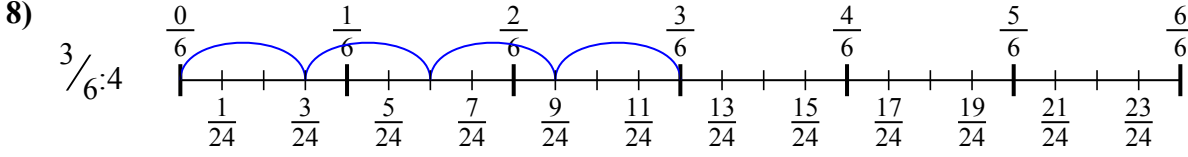
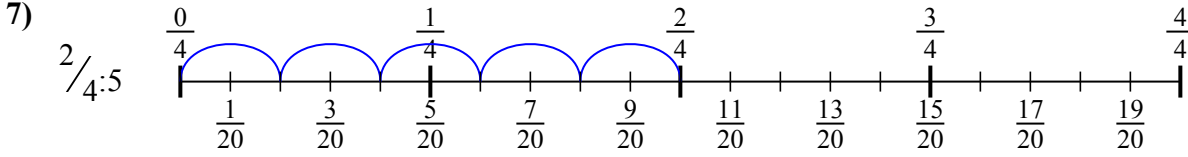
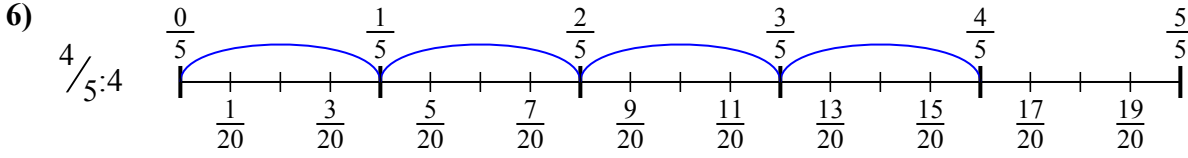
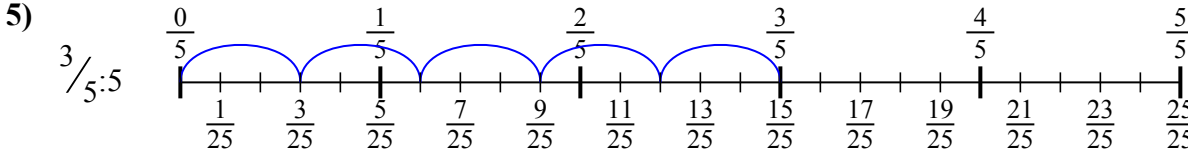
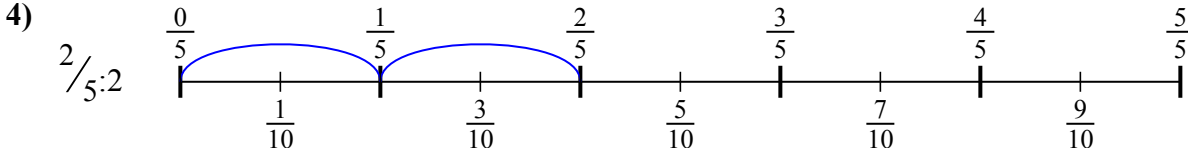
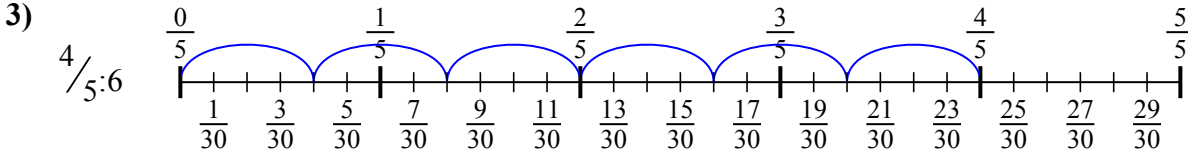
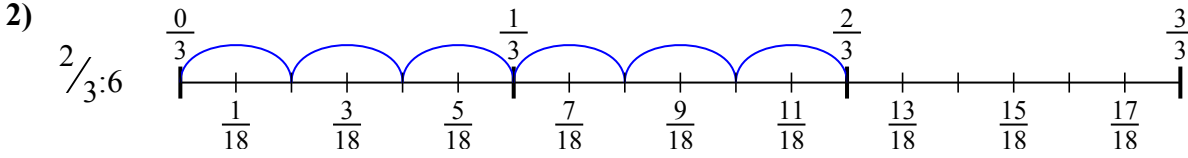
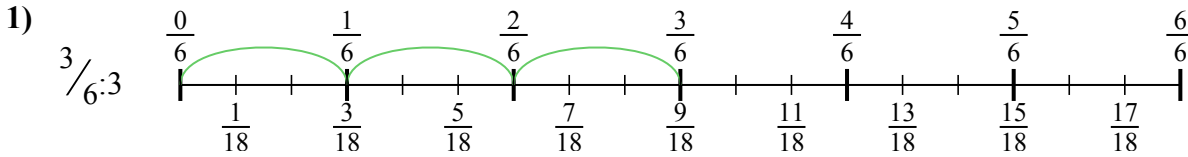
9. \_\_\_\_\_





Используйте числовую прямую для решения задачи. Первая отмечена для Вас.

**ОТВЕТЫ**



1.  $\frac{3}{18}$

2.  $\frac{2}{18}$

3.  $\frac{4}{30}$

4.  $\frac{2}{10}$

5.  $\frac{3}{25}$

6.  $\frac{4}{20}$

7.  $\frac{2}{20}$

8.  $\frac{3}{24}$

9.  $\frac{3}{36}$



Используйте числовую прямую для решения задачи. Первая отмечена для Вас.

**ОТВЕТЫ**

$\frac{3}{24}$

$\frac{2}{20}$

$\frac{4}{20}$

$\frac{2}{18}$

$\frac{2}{10}$

$\frac{3}{18}$

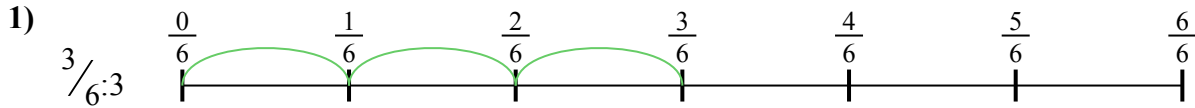
$\frac{4}{30}$

$\frac{3}{25}$

$\frac{3}{36}$


1. \_\_\_\_\_

2. \_\_\_\_\_



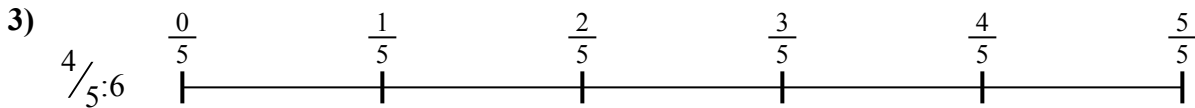
3. \_\_\_\_\_

4. \_\_\_\_\_



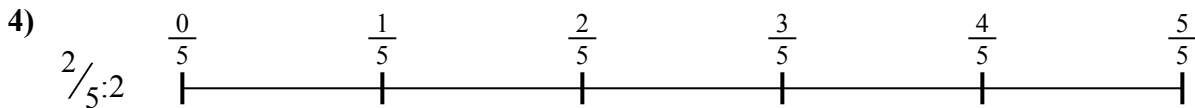
5. \_\_\_\_\_

6. \_\_\_\_\_



7. \_\_\_\_\_

8. \_\_\_\_\_



9. \_\_\_\_\_

