




Используйте числовую прямую для решения задачи. Первая отмечена для Вас.

ОТВЕТЫ

1. _____

2. _____



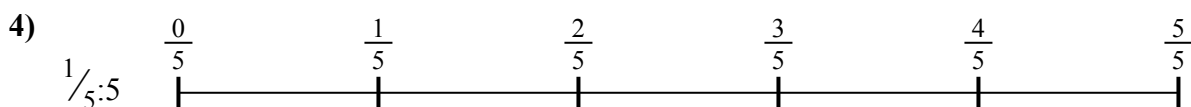
3. _____

4. _____



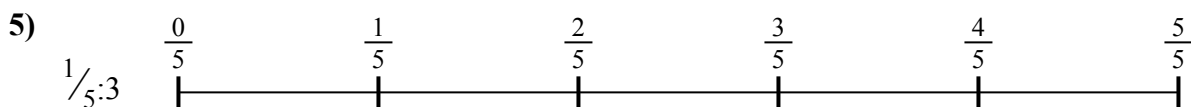
5. _____

6. _____

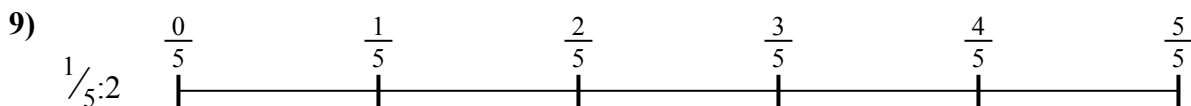
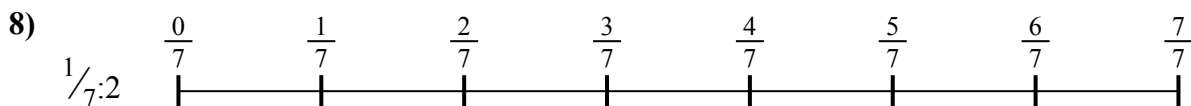


7. _____

8. _____



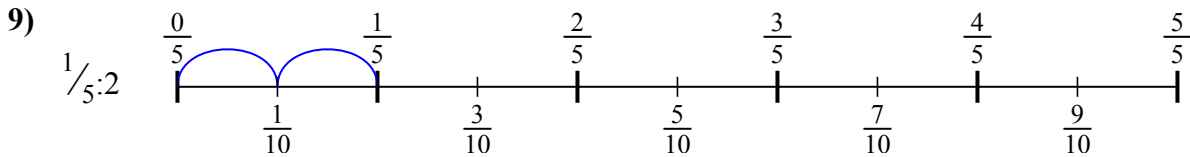
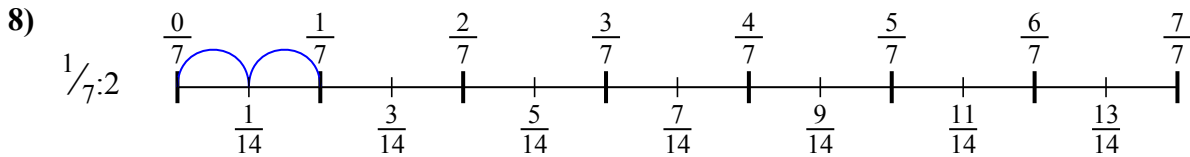
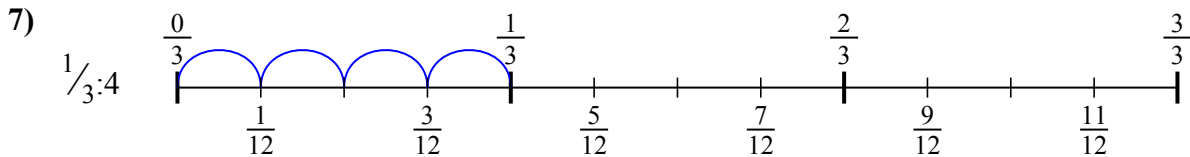
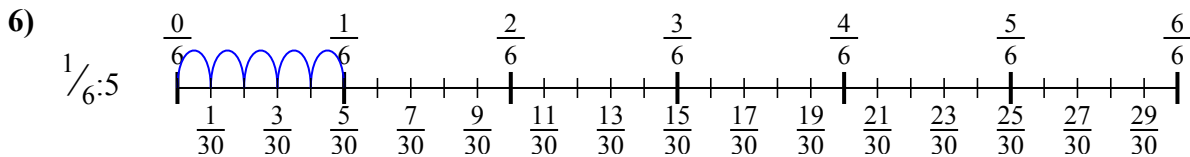
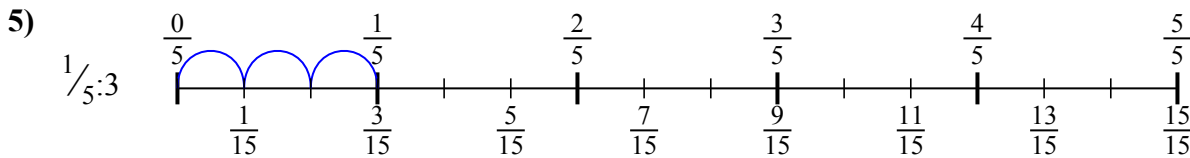
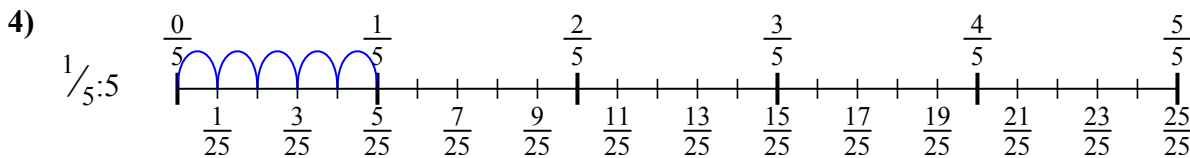
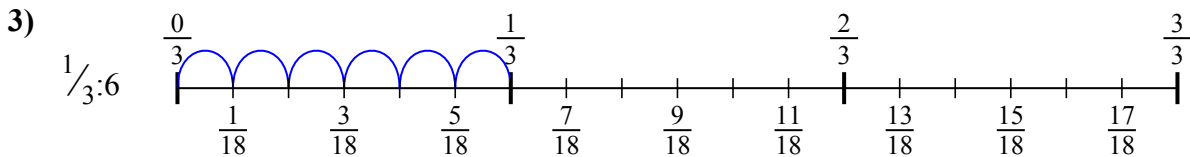
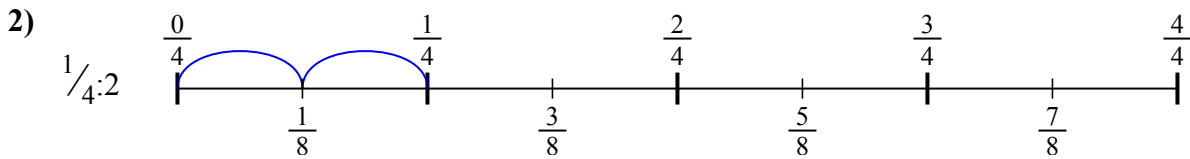
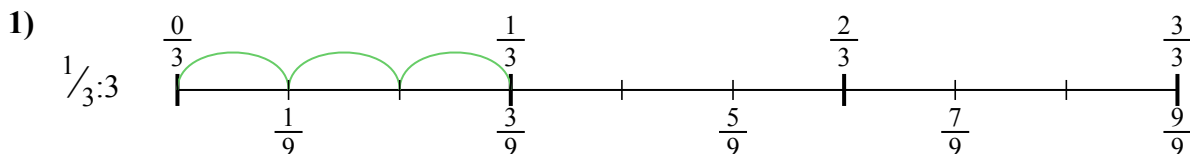
9. _____





Используйте числовую прямую для решения задачи. Первая отмечена для Вас.

ОТВЕТЫ



1. $\frac{1}{9}$

2. $\frac{1}{8}$

3. $\frac{1}{18}$

4. $\frac{1}{25}$

5. $\frac{1}{15}$

6. $\frac{1}{30}$

7. $\frac{1}{12}$

8. $\frac{1}{14}$

9. $\frac{1}{10}$



Используйте числовую прямую для решения задачи. Первая отмечена для Вас.

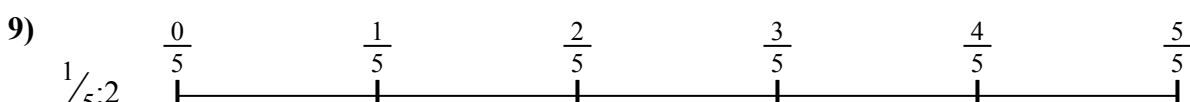
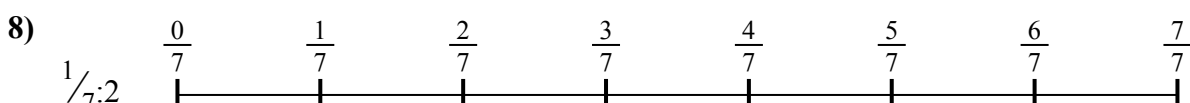
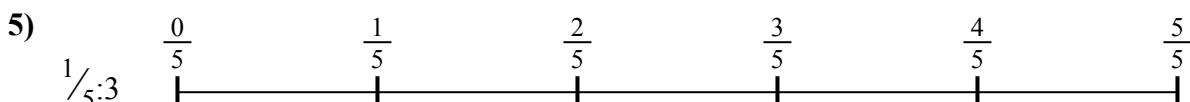
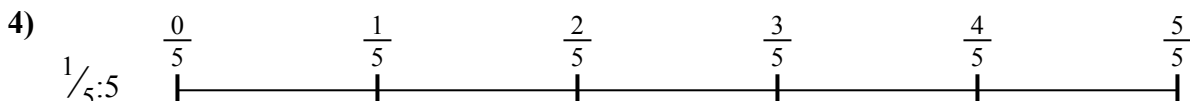
ОТВЕТЫ

$\frac{1}{14}$
 $\frac{1}{18}$
 $\frac{1}{12}$

$\frac{1}{9}$
 $\frac{1}{8}$

$\frac{1}{30}$
 $\frac{1}{25}$

$\frac{1}{10}$
 $\frac{1}{15}$



1. _____
2. _____
3. _____
4. _____
5. _____
6. _____
7. _____
8. _____
9. _____