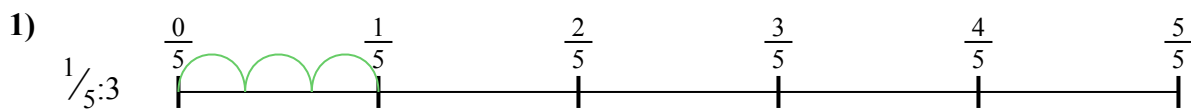


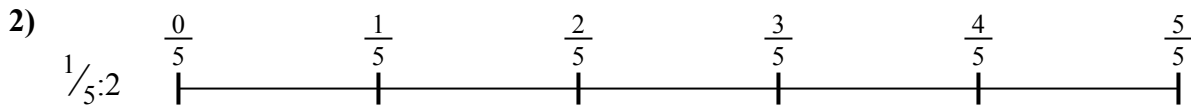


Используйте числовую прямую для решения задачи. Первая отмечена для Вас.

**ОТВЕТЫ**




1. \_\_\_\_\_



2. \_\_\_\_\_



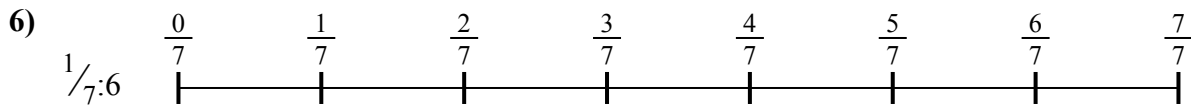
3. \_\_\_\_\_




4. \_\_\_\_\_



5. \_\_\_\_\_




6. \_\_\_\_\_



7. \_\_\_\_\_



8. \_\_\_\_\_

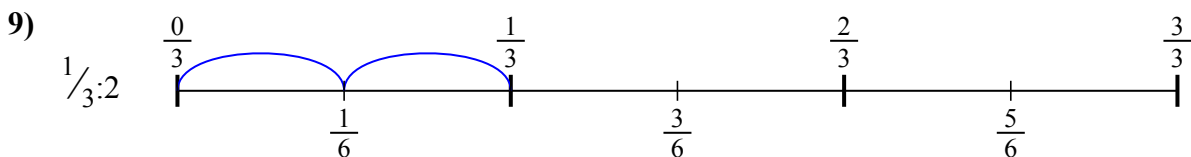
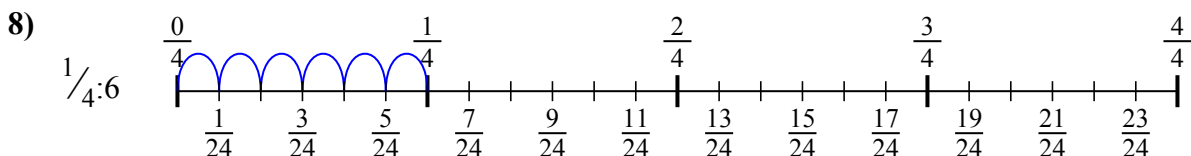
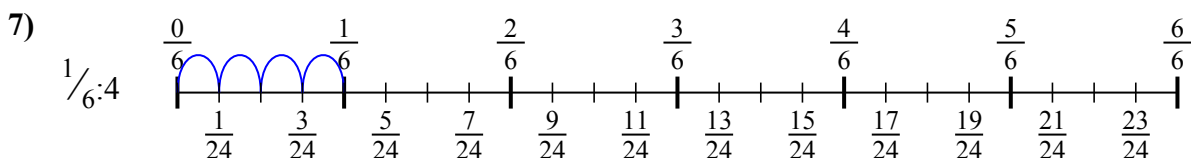
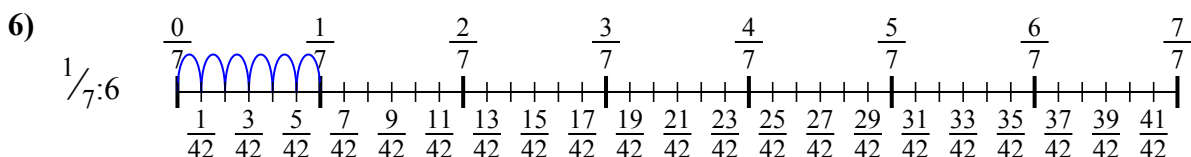
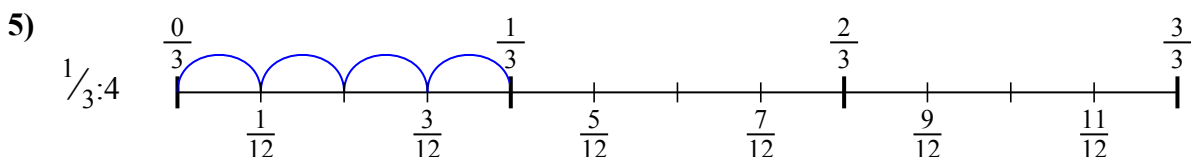
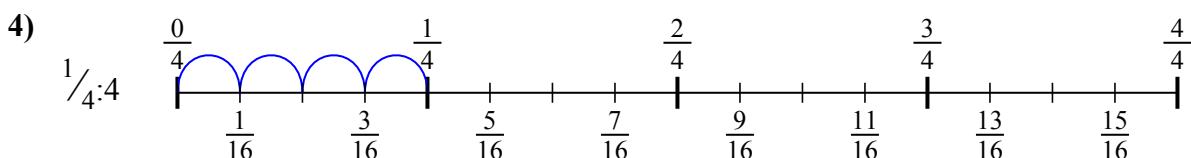
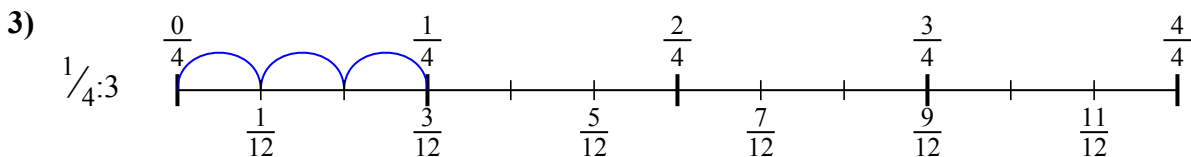
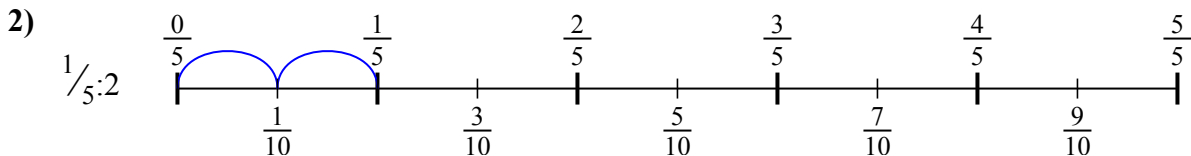
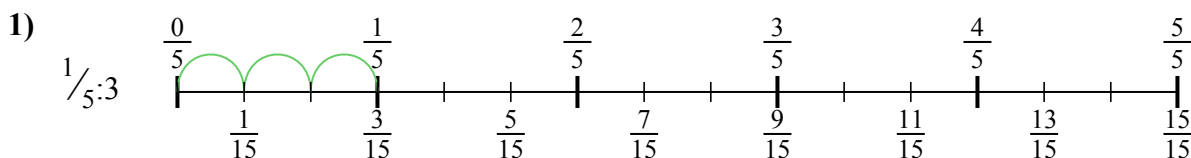


9. \_\_\_\_\_



Используйте числовую прямую для решения задачи. Первая отмечена для Вас.

**ОТВЕТЫ**



1.  $\frac{1}{15}$

2.  $\frac{1}{10}$

3.  $\frac{1}{12}$

4.  $\frac{1}{16}$

5.  $\frac{1}{12}$

6.  $\frac{1}{42}$

7.  $\frac{1}{24}$

8.  $\frac{1}{24}$

9.  $\frac{1}{6}$



Используйте числовую прямую для решения задачи. Первая отмечена для Вас.

**ОТВЕТЫ**

$\frac{1}{16}$

$\frac{1}{15}$

$\frac{1}{12}$

$\frac{1}{42}$


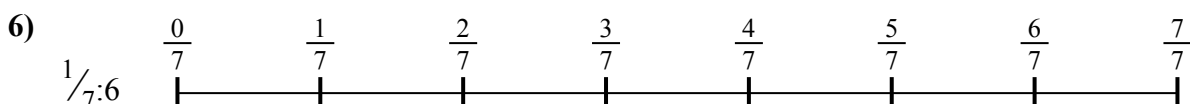


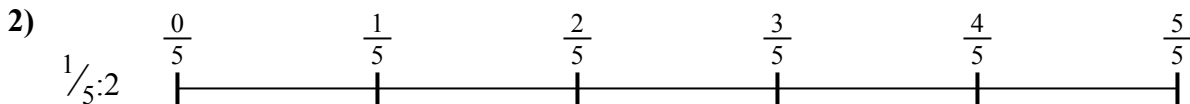
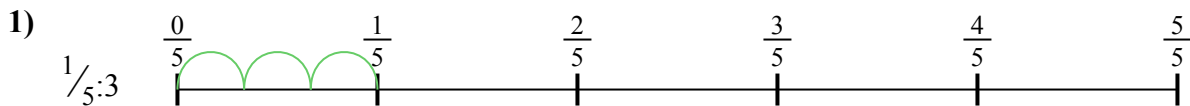
$\frac{1}{12}$

$\frac{1}{10}$

$\frac{1}{24}$

$\frac{1}{6}$

$\frac{1}{24}$



1. \_\_\_\_\_

2. \_\_\_\_\_

3. \_\_\_\_\_

4. \_\_\_\_\_

5. \_\_\_\_\_

6. \_\_\_\_\_

7. \_\_\_\_\_

8. \_\_\_\_\_

9. \_\_\_\_\_