



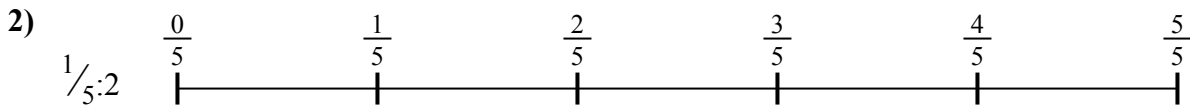
Используйте числовую прямую для решения задачи. Первая отмечена для Вас.

ОТВЕТЫ



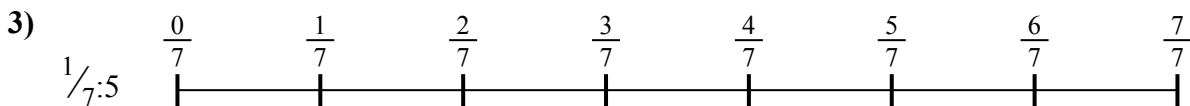
1. _____

2. _____



3. _____

4. _____



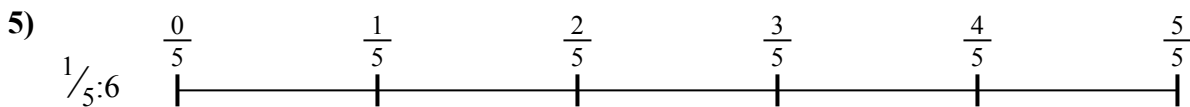
5. _____

6. _____

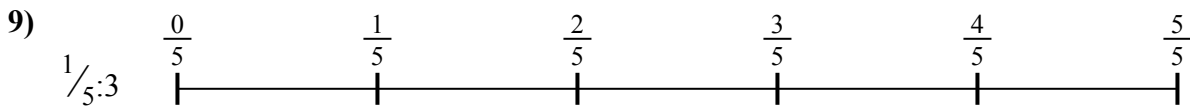


7. _____

8. _____



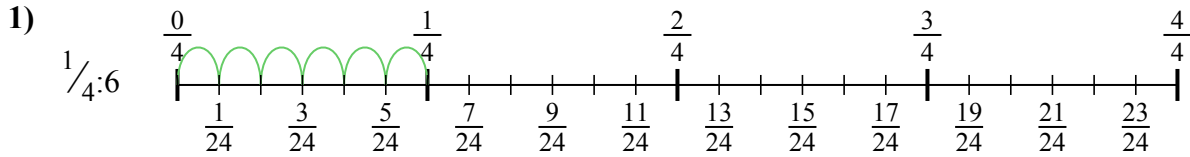
9. _____



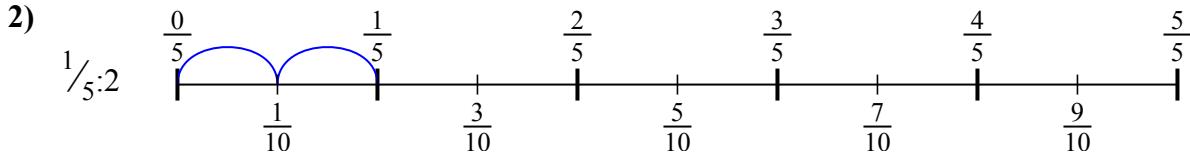


Используйте числовую прямую для решения задачи. Первая отмечена для Вас.

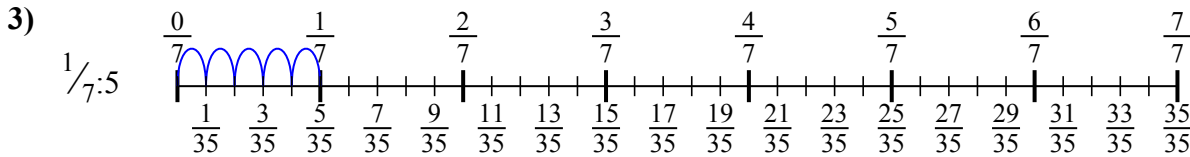
ОТВЕТЫ



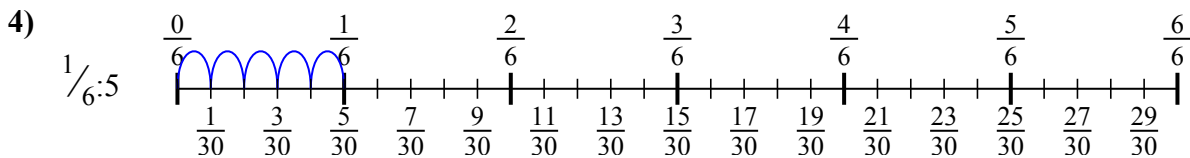
1. $\frac{1}{24}$



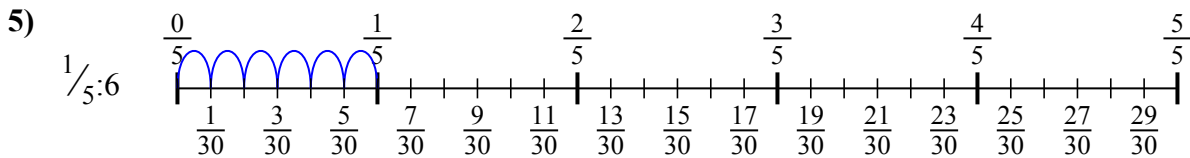
2. $\frac{1}{10}$



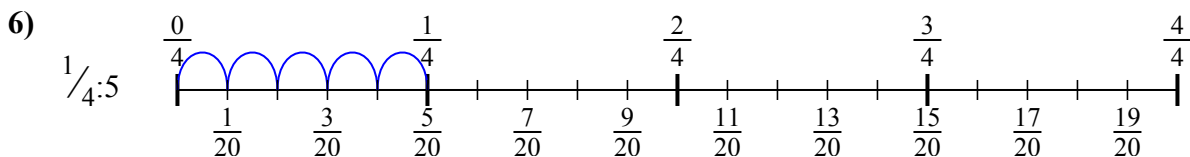
3. $\frac{1}{35}$



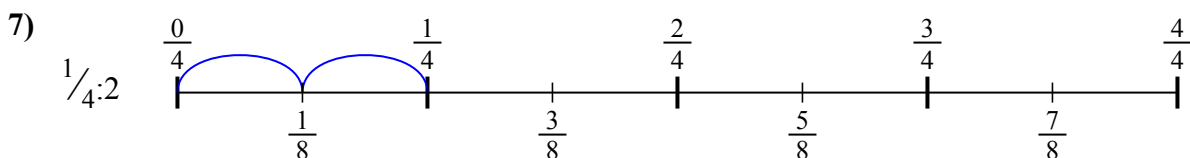
4. $\frac{1}{30}$



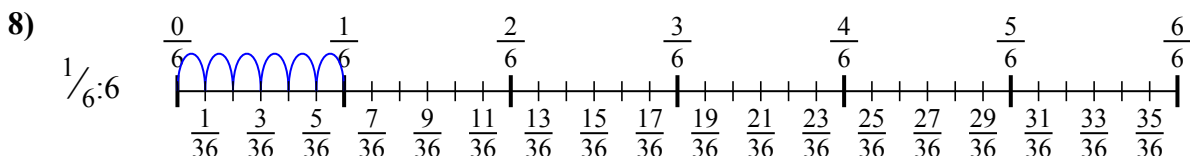
5. $\frac{1}{30}$



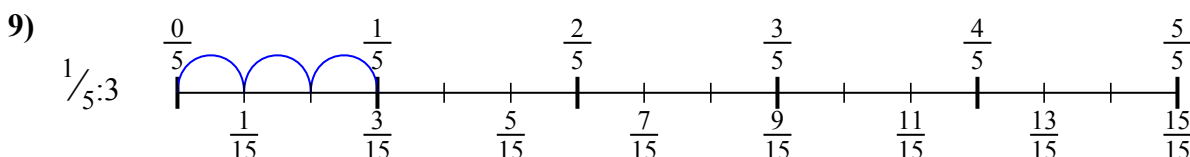
6. $\frac{1}{20}$



7. $\frac{1}{8}$



8. $\frac{1}{36}$



9. $\frac{1}{15}$



Используйте числовую прямую для решения задачи. Первая отмечена для Вас.

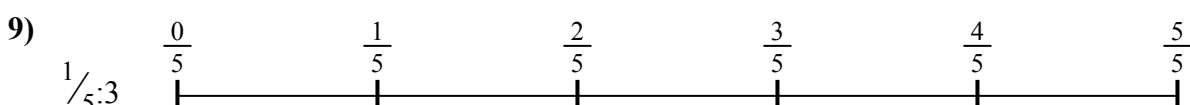

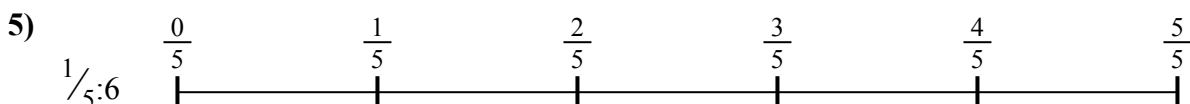
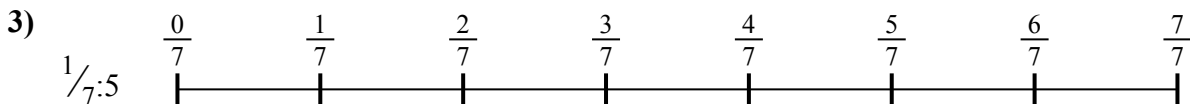
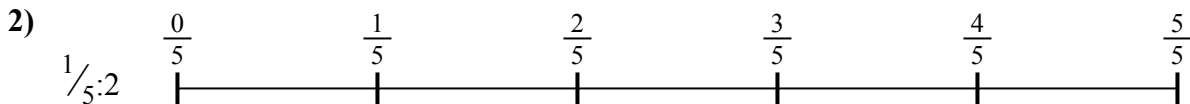
ОТВЕТЫ

$\frac{1}{30}$
 $\frac{1}{15}$
 $\frac{1}{10}$

$\frac{1}{36}$
 $\frac{1}{24}$

$\frac{1}{20}$
 $\frac{1}{30}$

$\frac{1}{8}$
 $\frac{1}{35}$



1. _____
2. _____
3. _____
4. _____
5. _____
6. _____
7. _____
8. _____
9. _____