
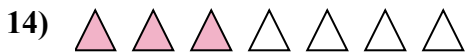
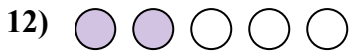
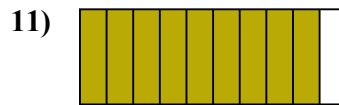
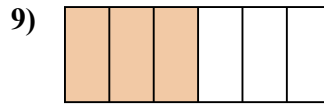
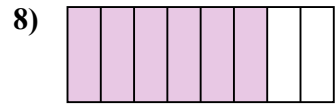
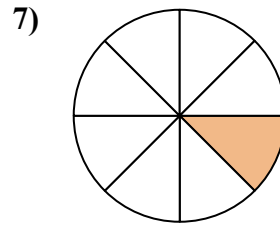
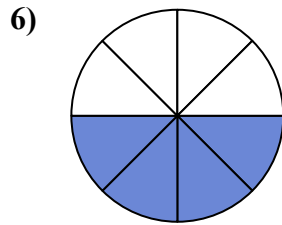
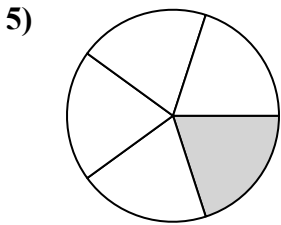
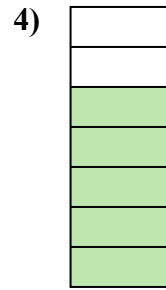
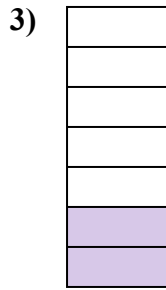






Определите, закрашенная часть 'больше', 'меньше' или 'равна' половине.

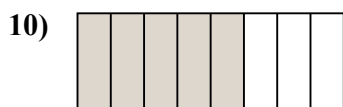
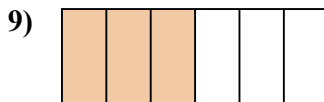
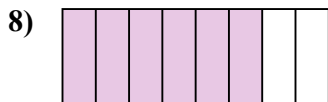
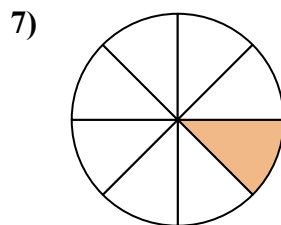
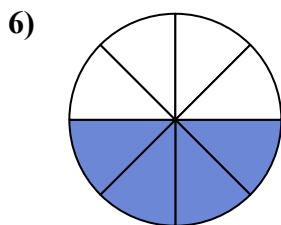
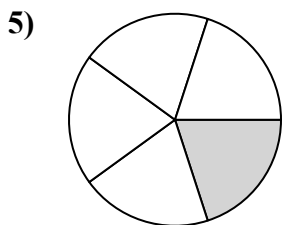
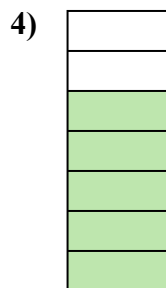
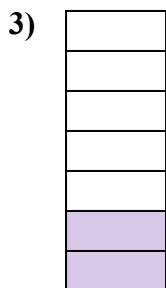


**ОТВЕТЫ**



1. \_\_\_\_\_
2. \_\_\_\_\_
3. \_\_\_\_\_
4. \_\_\_\_\_
5. \_\_\_\_\_
6. \_\_\_\_\_
7. \_\_\_\_\_
8. \_\_\_\_\_
9. \_\_\_\_\_
10. \_\_\_\_\_
11. \_\_\_\_\_
12. \_\_\_\_\_
13. \_\_\_\_\_
14. \_\_\_\_\_
15. \_\_\_\_\_
16. \_\_\_\_\_
17. \_\_\_\_\_
18. \_\_\_\_\_
19. \_\_\_\_\_
20. \_\_\_\_\_



Определите, закрашенная часть 'больше', 'меньше' или 'равна' половине.



**ОТВЕТЫ**

1. меньше

2. меньше

3. меньше

4. больше

5. меньше

6. равно

7. меньше

8. больше

9. равно

10. больше

11. больше

12. меньше

13. больше

14. меньше

15. больше

16. меньше

17. меньше

18. больше

19. равно

20. меньше