

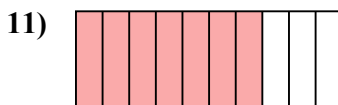


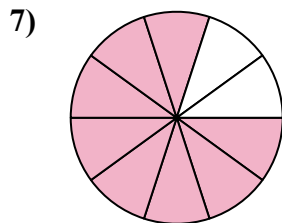
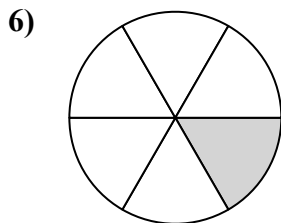
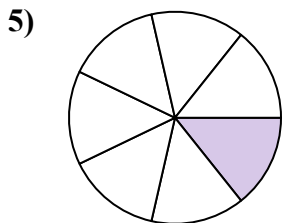
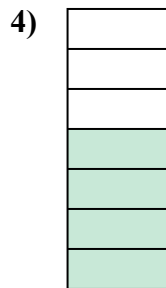
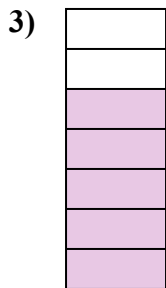
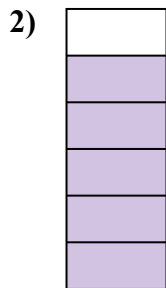
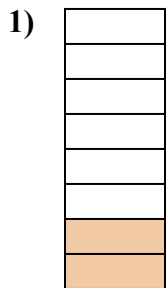




Определите, закрашенная часть 'больше', 'меньше' или 'равна' половине.

**Ответы**



1. \_\_\_\_\_

2. \_\_\_\_\_

3. \_\_\_\_\_

4. \_\_\_\_\_

5. \_\_\_\_\_

6. \_\_\_\_\_

7. \_\_\_\_\_

8. \_\_\_\_\_

9. \_\_\_\_\_

10. \_\_\_\_\_

11. \_\_\_\_\_

12. \_\_\_\_\_

13. \_\_\_\_\_

14. \_\_\_\_\_

15. \_\_\_\_\_

16. \_\_\_\_\_

17. \_\_\_\_\_

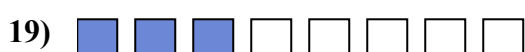

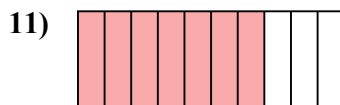
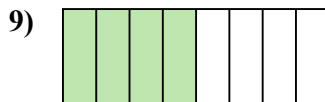

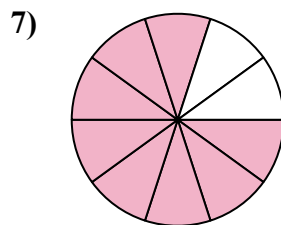
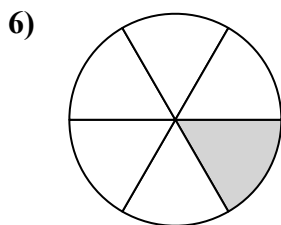
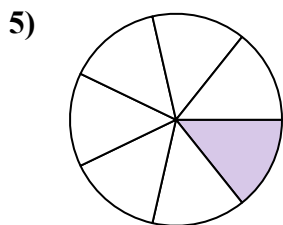
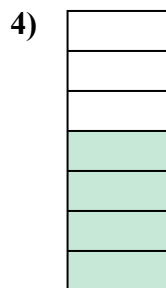
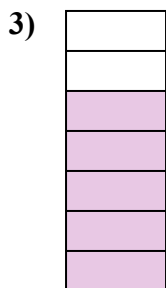

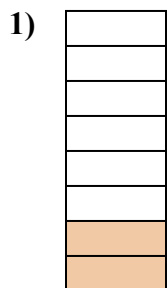
18. \_\_\_\_\_

19. \_\_\_\_\_

20. \_\_\_\_\_



Определите, закрашенная часть 'больше', 'меньше' или 'равна' половине.



**ОТВЕТЫ**

1. меньше

2. больше

3. больше

4. больше

5. меньше

6. меньше

7. больше

8. меньше

9. равно

10. равно

11. больше

12. больше

13. меньше

14. равно

15. равно

16. меньше

17. больше

18. больше

19. меньше

20. больше