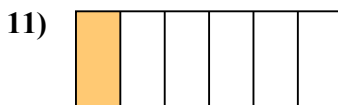
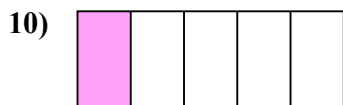
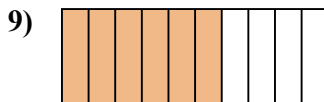
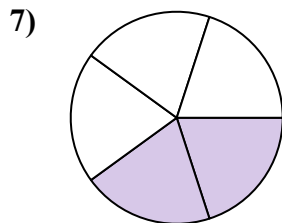
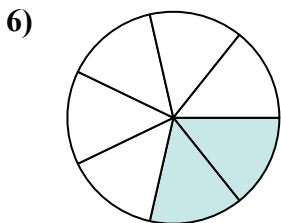
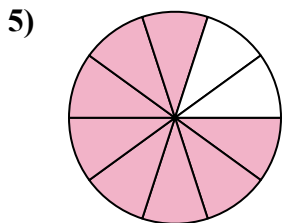








Определите, закрашенная часть 'больше', 'меньше' или 'равна' половине.

**ОТВЕТЫ**



1. \_\_\_\_\_

2. \_\_\_\_\_

3. \_\_\_\_\_

4. \_\_\_\_\_

5. \_\_\_\_\_

6. \_\_\_\_\_

7. \_\_\_\_\_

8. \_\_\_\_\_

9. \_\_\_\_\_

10. \_\_\_\_\_

11. \_\_\_\_\_

12. \_\_\_\_\_

13. \_\_\_\_\_

14. \_\_\_\_\_

15. \_\_\_\_\_

16. \_\_\_\_\_

17. \_\_\_\_\_


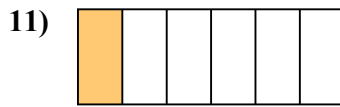
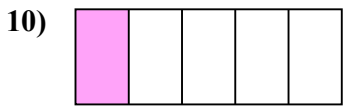
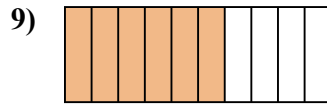
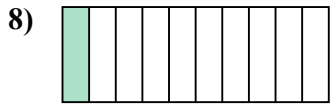
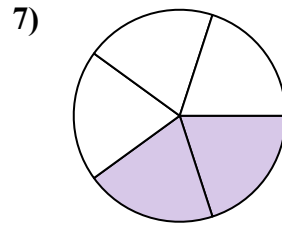
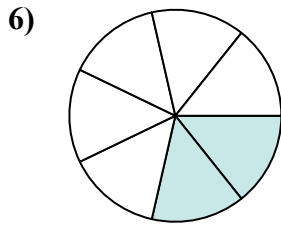
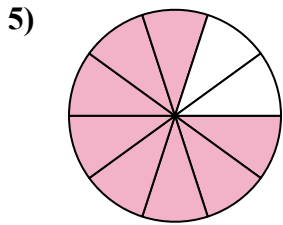


18. \_\_\_\_\_

19. \_\_\_\_\_

20. \_\_\_\_\_



Определите, закрашенная часть 'больше', 'меньше' или 'равна' половине.



**ОТВЕТЫ**

1. больше

2. меньше

3. меньше

4. больше

5. больше

6. меньше

7. меньше

8. меньше

9. больше

10. меньше

11. меньше

12. больше

13. равно

14. больше

15. меньше

16. меньше

17. равно

18. меньше

19. меньше

20. равно