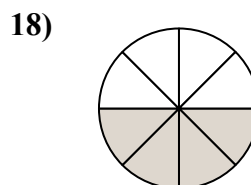
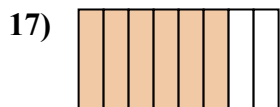
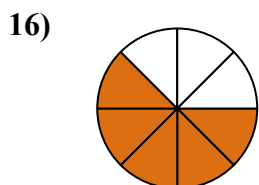
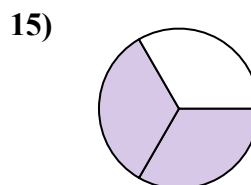
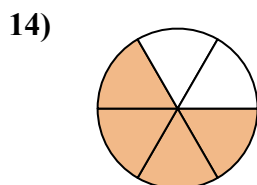
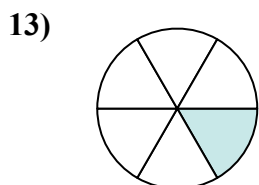
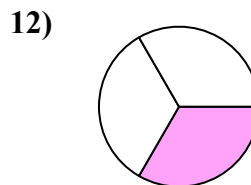
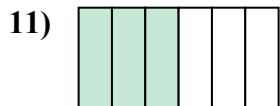
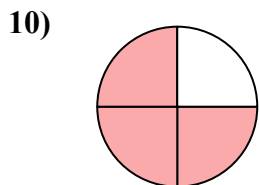
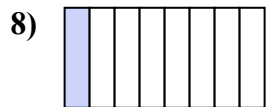
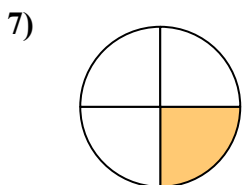
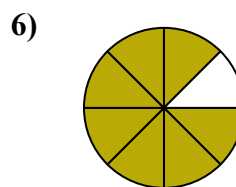
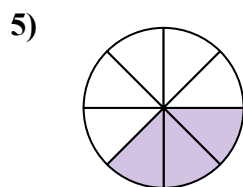

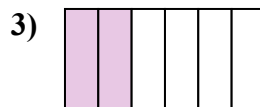





Напишите дробь, равную закрашенной части в фигуре.



Ответы

1. _____

2. _____

3. _____

4. _____

5. _____

6. _____

7. _____

8. _____

9. _____

10. _____

11. _____

12. _____

13. _____

14. _____

15. _____

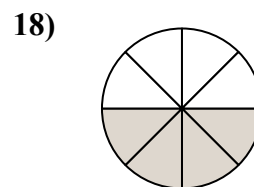
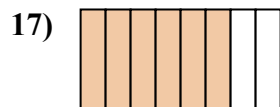
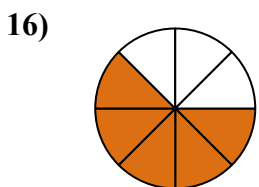
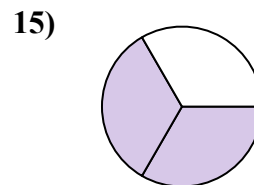
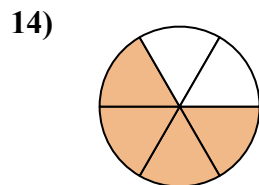
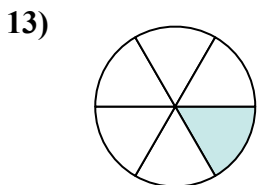
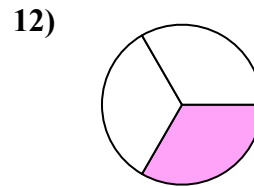
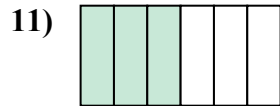
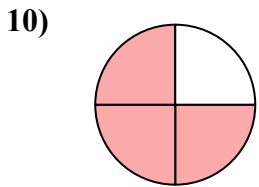
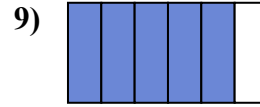
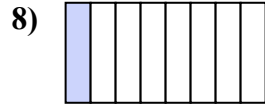
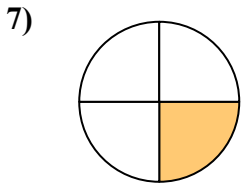
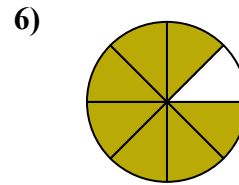
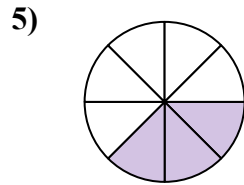
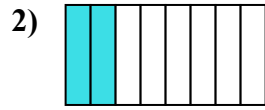
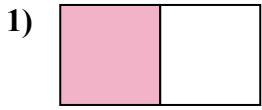
16. _____

17. _____

18. _____



Напишите дробь, равную закрашенной части в фигуре.



Отвѣты

1. $\frac{1}{2}$

2. $\frac{2}{8}$

3. $\frac{2}{6}$

4. $\frac{2}{4}$

5. $\frac{3}{8}$

6. $\frac{7}{8}$

7. $\frac{1}{4}$

8. $\frac{1}{8}$

9. $\frac{5}{6}$

10. $\frac{3}{4}$

11. $\frac{3}{6}$

12. $\frac{1}{3}$

13. $\frac{1}{6}$

14. $\frac{4}{6}$

15. $\frac{2}{3}$

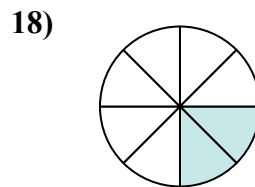
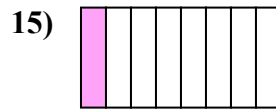
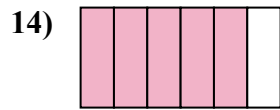
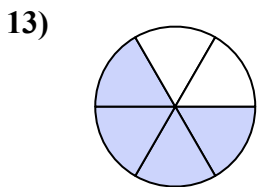
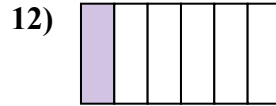
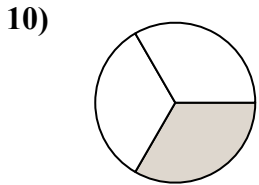
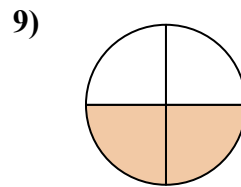
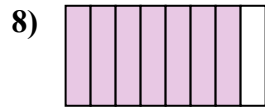
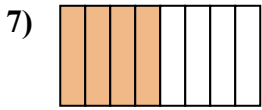
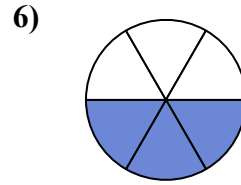
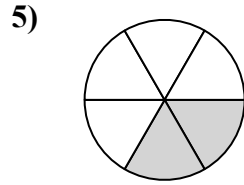
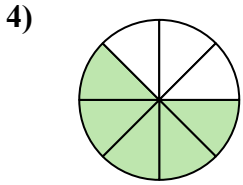
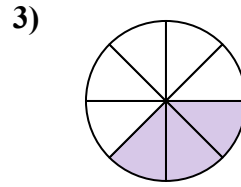
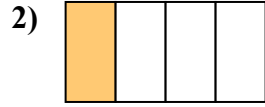
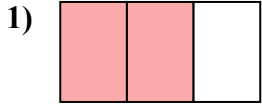
16. $\frac{5}{8}$

17. $\frac{6}{8}$

18. $\frac{4}{8}$



Напишите дробь, равную закрашенной части в фигуре.



Ответы

1. _____

2. _____

3. _____

4. _____

5. _____

6. _____

7. _____

8. _____

9. _____

10. _____

11. _____

12. _____

13. _____

14. _____

15. _____

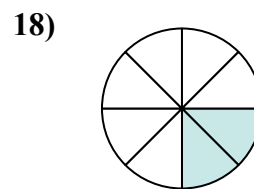
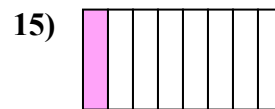
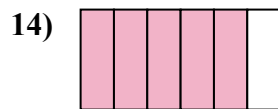
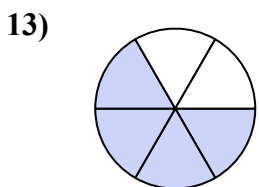
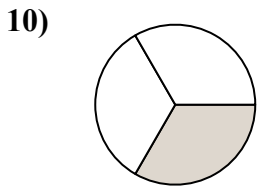
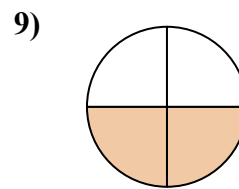
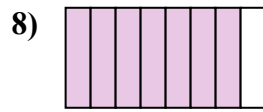
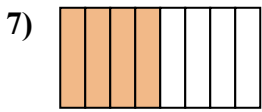
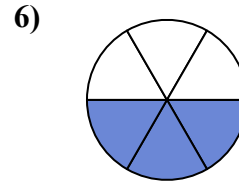
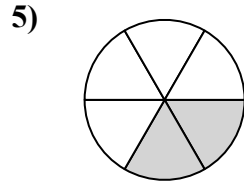
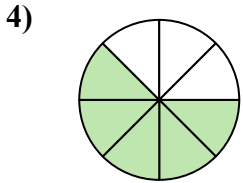
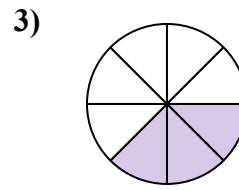
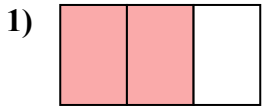
16. _____

17. _____

18. _____



Напишите дробь, равную закрашенной части в фигуре.



ОТВЕТЫ

1. $\frac{2}{3}$

2. $\frac{1}{4}$

3. $\frac{3}{8}$

4. $\frac{5}{8}$

5. $\frac{2}{6}$

6. $\frac{3}{6}$

7. $\frac{4}{8}$

8. $\frac{7}{8}$

9. $\frac{2}{4}$

10. $\frac{1}{3}$

11. $\frac{1}{2}$

12. $\frac{1}{6}$

13. $\frac{4}{6}$

14. $\frac{5}{6}$

15. $\frac{1}{8}$

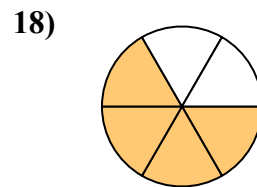
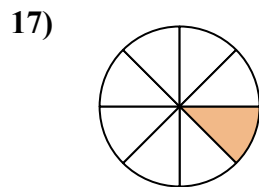
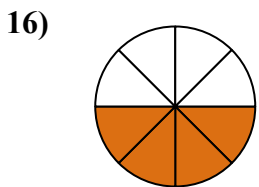
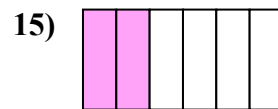
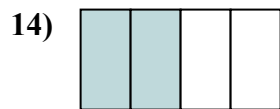
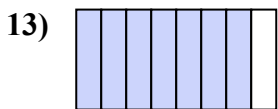
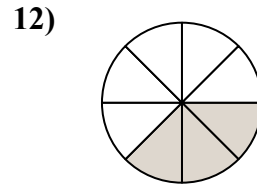

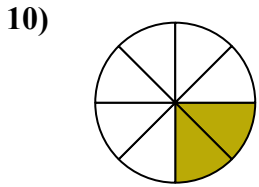
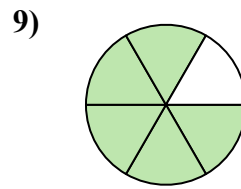
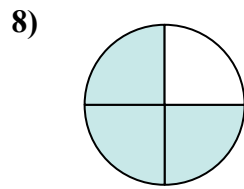
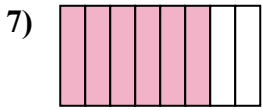
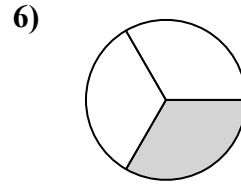

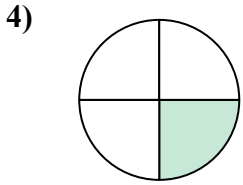
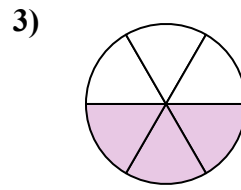
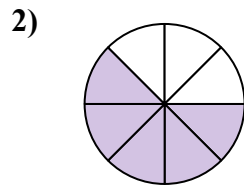
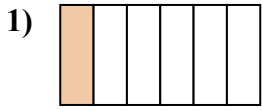
16. $\frac{3}{4}$

17. $\frac{6}{8}$

18. $\frac{2}{8}$



Напишите дробь, равную закрашенной части в фигуре.



Ответы

1. _____

2. _____

3. _____

4. _____

5. _____

6. _____

7. _____

8. _____

9. _____

10. _____

11. _____

12. _____

13. _____

14. _____

15. _____

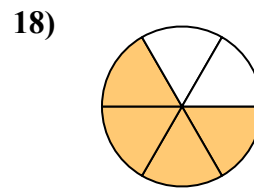
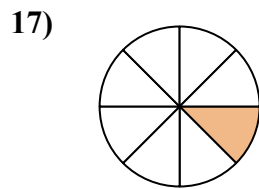
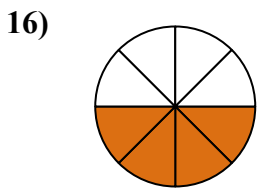
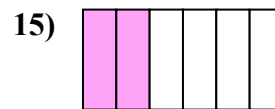
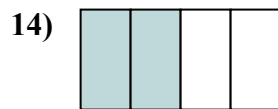
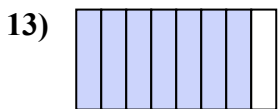
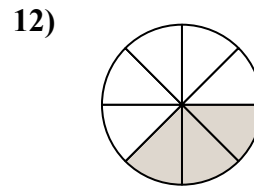

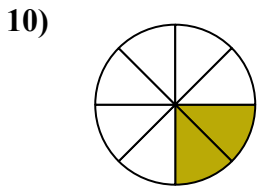
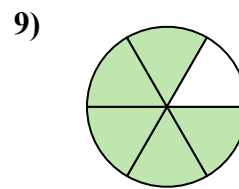
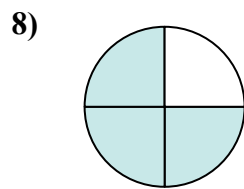
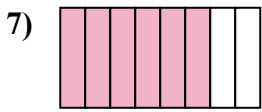
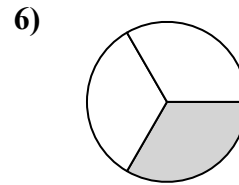
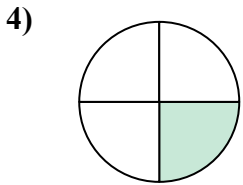
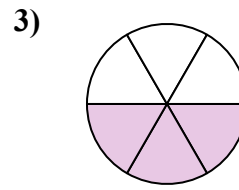
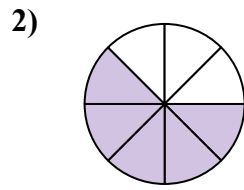
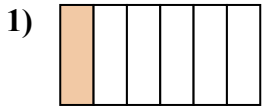
16. _____

17. _____

18. _____



Напишите дробь, равную закрашенной части в фигуре.



Ответы

1. $\frac{1}{6}$

2. $\frac{5}{8}$

3. $\frac{3}{6}$

4. $\frac{1}{4}$

5. $\frac{1}{2}$

6. $\frac{1}{3}$

7. $\frac{6}{8}$

8. $\frac{3}{4}$

9. $\frac{5}{6}$

10. $\frac{2}{8}$

11. $\frac{2}{3}$

12. $\frac{3}{8}$

13. $\frac{7}{8}$

14. $\frac{2}{4}$

15. $\frac{2}{6}$

16. $\frac{4}{8}$

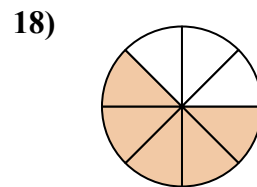
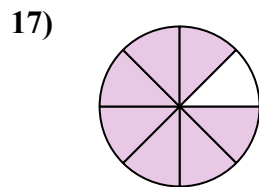
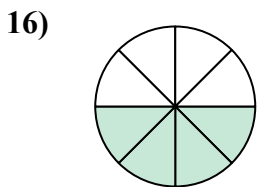
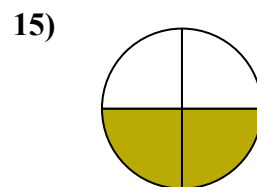
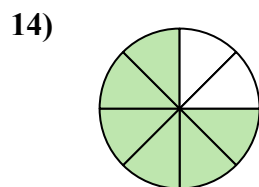
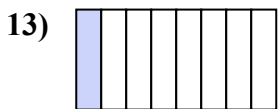
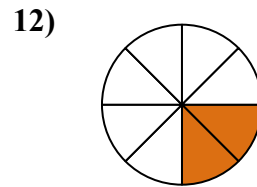
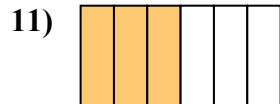
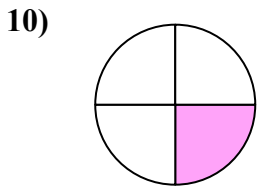
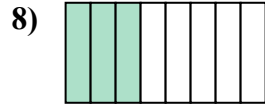
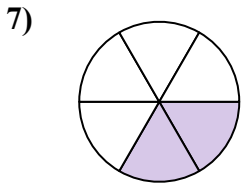
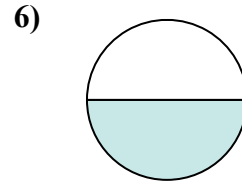
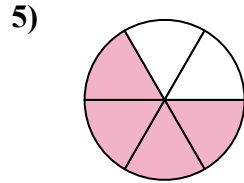
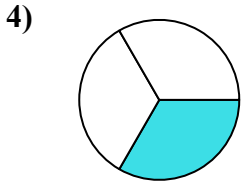
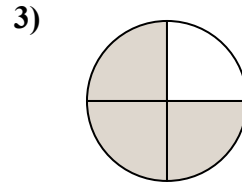
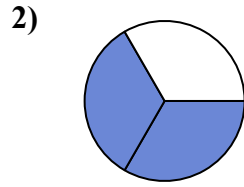
17. $\frac{1}{8}$

18. $\frac{4}{6}$



Напишите дробь, равную закрашенной части в фигуре.

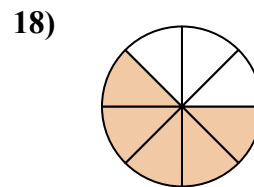
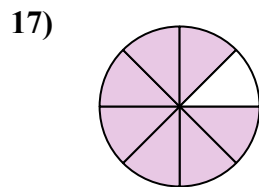
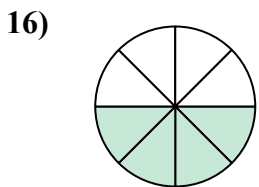
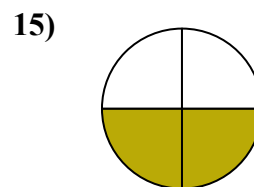
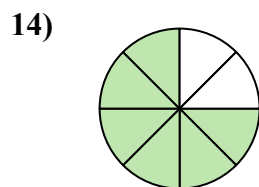
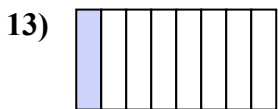
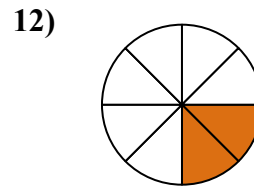
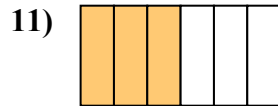
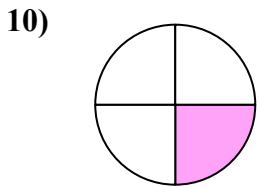
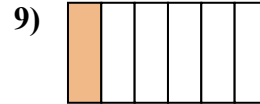
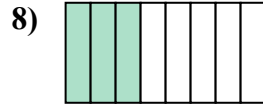
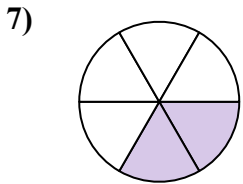
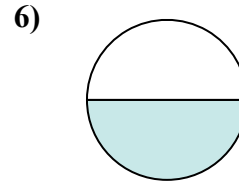
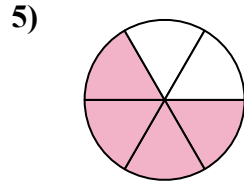
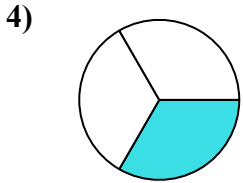
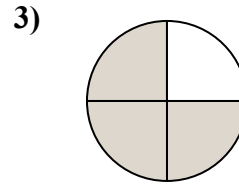
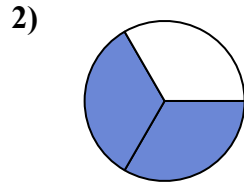
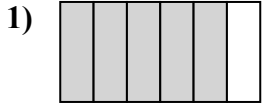
Ответы



1. _____
2. _____
3. _____
4. _____
5. _____
6. _____
7. _____
8. _____
9. _____
10. _____
11. _____
12. _____
13. _____
14. _____
15. _____
16. _____
17. _____
18. _____



Напишите дробь, равную закрашенной части в фигуре.



Ответы

1. $\frac{5}{6}$

2. $\frac{2}{3}$

3. $\frac{3}{4}$

4. $\frac{1}{3}$

5. $\frac{4}{6}$

6. $\frac{1}{2}$

7. $\frac{2}{6}$

8. $\frac{3}{8}$

9. $\frac{1}{6}$

10. $\frac{1}{4}$

11. $\frac{3}{6}$

12. $\frac{2}{8}$

13. $\frac{1}{8}$

14. $\frac{6}{8}$

15. $\frac{2}{4}$

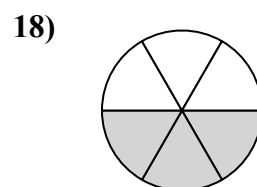
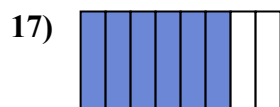
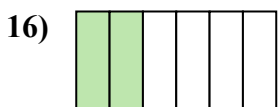
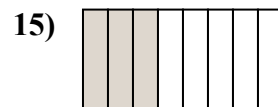
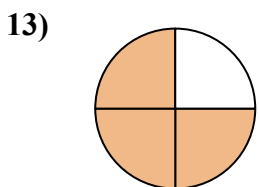
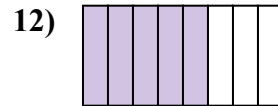
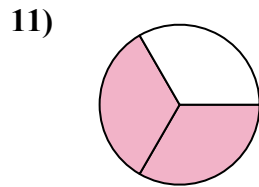
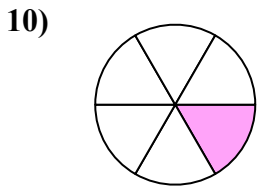
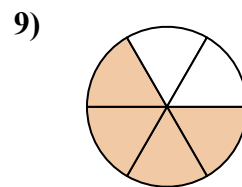
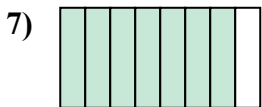
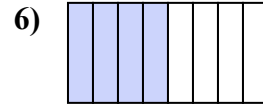
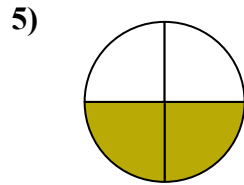
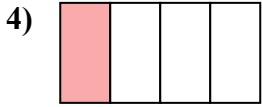
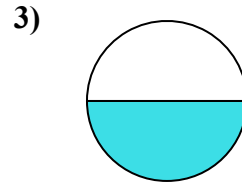
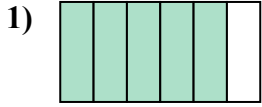
16. $\frac{4}{8}$

17. $\frac{7}{8}$

18. $\frac{5}{8}$



Напишите дробь, равную закрашенной части в фигуре.

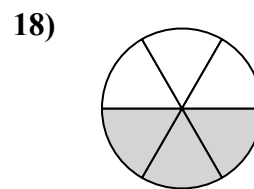
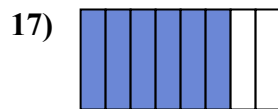
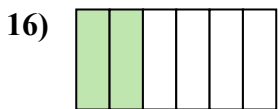
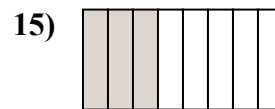
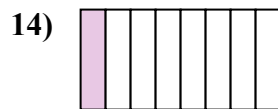
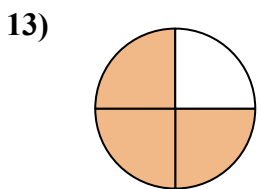
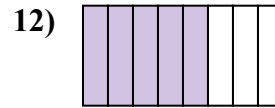
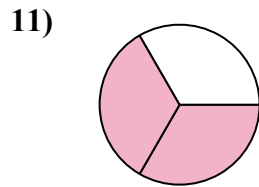
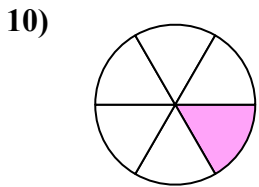
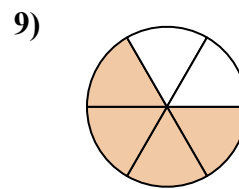
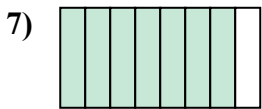
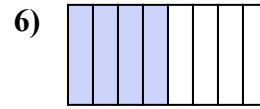
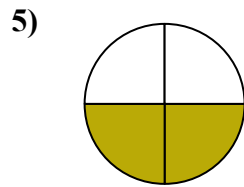
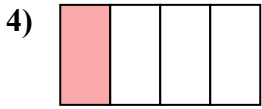
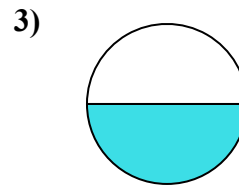
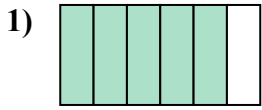


Ответы

1. _____
2. _____
3. _____
4. _____
5. _____
6. _____
7. _____
8. _____
9. _____
10. _____
11. _____
12. _____
13. _____
14. _____
15. _____
16. _____
17. _____
18. _____



Напишите дробь, равную закрашенной части в фигуре.



ОТВЕТЫ

1. $\frac{5}{6}$

2. $\frac{1}{3}$

3. $\frac{1}{2}$

4. $\frac{1}{4}$

5. $\frac{2}{4}$

6. $\frac{4}{8}$

7. $\frac{7}{8}$

8. $\frac{2}{8}$

9. $\frac{4}{6}$

10. $\frac{1}{6}$

11. $\frac{2}{3}$

12. $\frac{5}{8}$

13. $\frac{3}{4}$

14. $\frac{1}{8}$

15. $\frac{3}{8}$

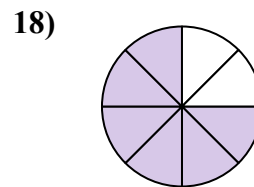
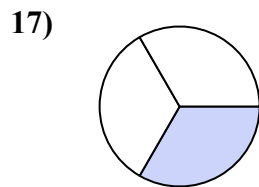
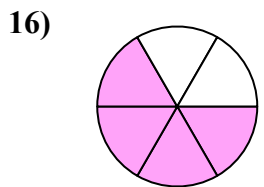
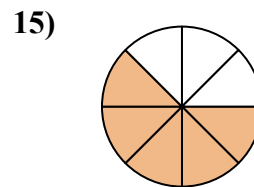
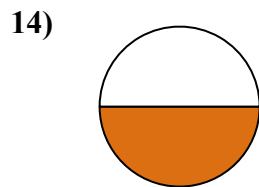
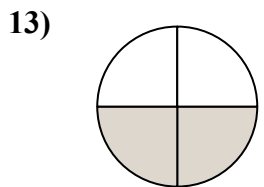
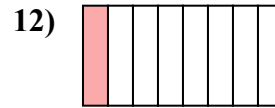

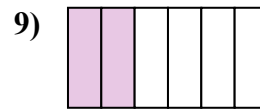
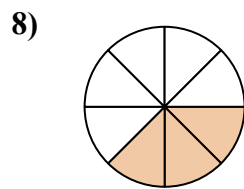
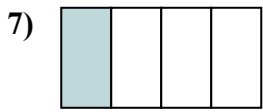
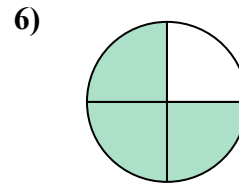
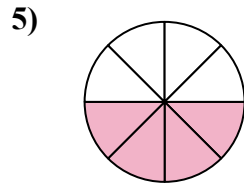
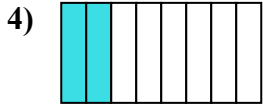
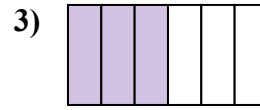
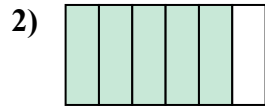
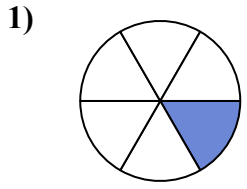
16. $\frac{2}{6}$

17. $\frac{6}{8}$

18. $\frac{3}{6}$



Напишите дробь, равную закрашенной части в фигуре.

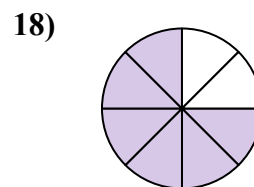
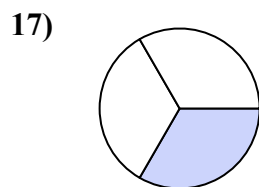
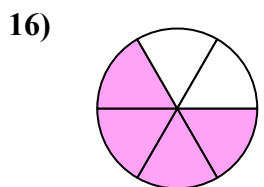
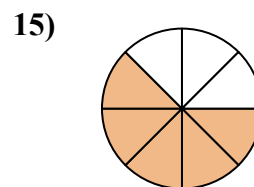
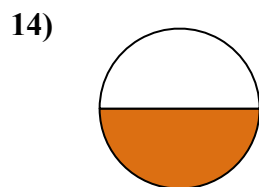
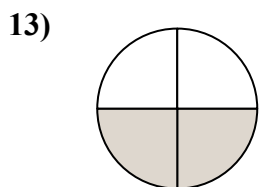
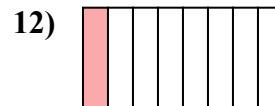

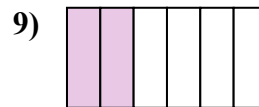
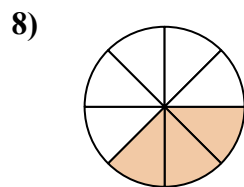

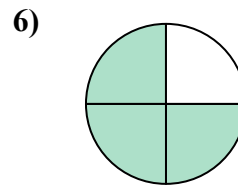
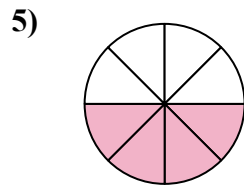
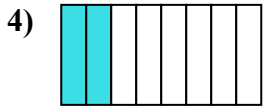
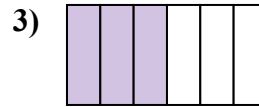
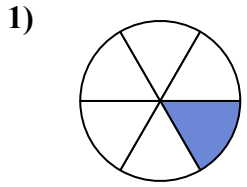


ОТВЕТЫ

1. _____
2. _____
3. _____
4. _____
5. _____
6. _____
7. _____
8. _____
9. _____
10. _____
11. _____
12. _____
13. _____
14. _____
15. _____
16. _____
17. _____
18. _____



Напишите дробь, равную закрашенной части в фигуре.



ОТВЕТЫ

1. 1/6

2. 5/6

3. 3/6

4. 2/8

5. 4/8

6. 3/4

7. 1/4

8. 3/8

9. 2/6

10. 2/3

11. 7/8

12. 1/8

13. 2/4

14. 1/2

15. 5/8

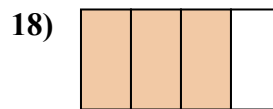
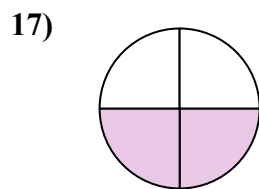
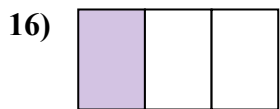
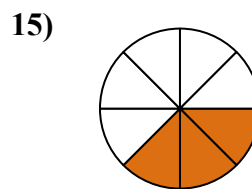
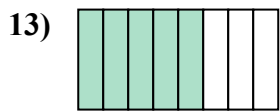
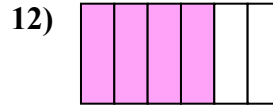
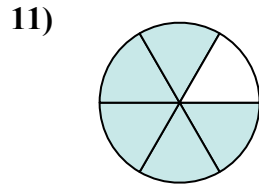
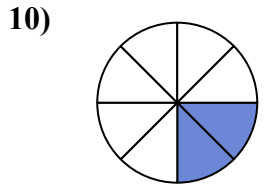
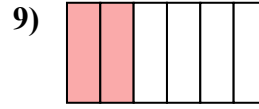
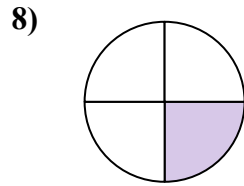
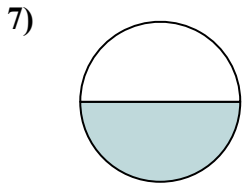
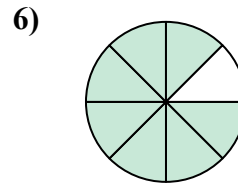
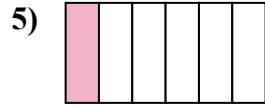
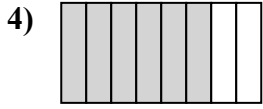
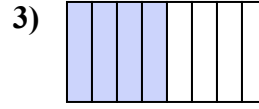
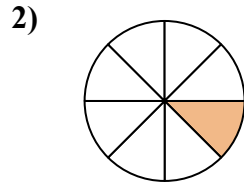
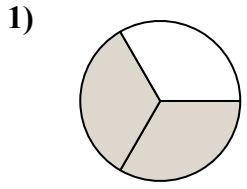
16. 4/6

17. 1/3

18. 6/8



Напишите дробь, равную закрашенной части в фигуре.


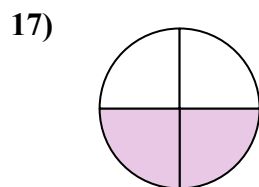

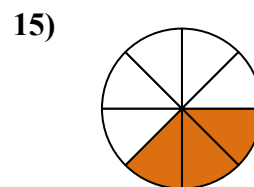
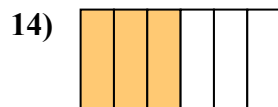

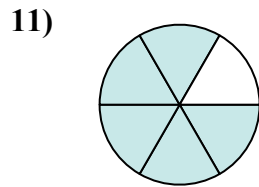
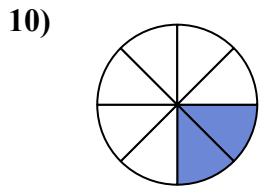
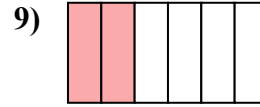
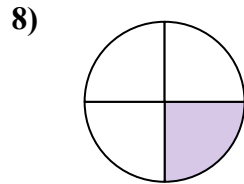
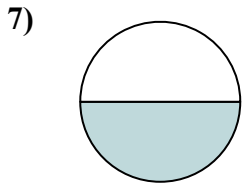
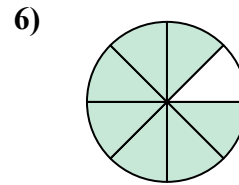
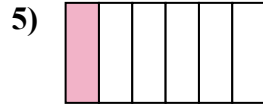
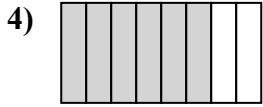
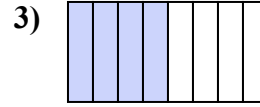
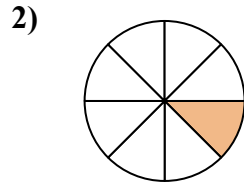
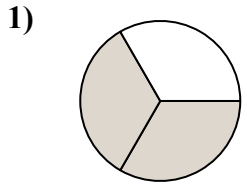


ОТВЕТЫ

1. _____
2. _____
3. _____
4. _____
5. _____
6. _____
7. _____
8. _____
9. _____
10. _____
11. _____
12. _____
13. _____
14. _____
15. _____
16. _____
17. _____
18. _____



Напишите дробь, равную закрашенной части в фигуре.



Отвeты

1. $\frac{2}{3}$

2. $\frac{1}{8}$

3. $\frac{4}{8}$

4. $\frac{6}{8}$

5. $\frac{1}{6}$

6. $\frac{7}{8}$

7. $\frac{1}{2}$

8. $\frac{1}{4}$

9. $\frac{2}{6}$

10. $\frac{2}{8}$

11. $\frac{5}{6}$

12. $\frac{4}{6}$

13. $\frac{5}{8}$

14. $\frac{3}{6}$

15. $\frac{3}{8}$

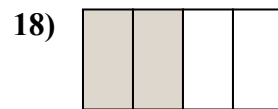
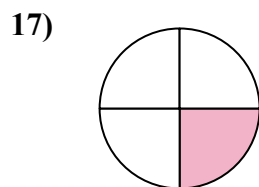

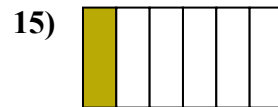
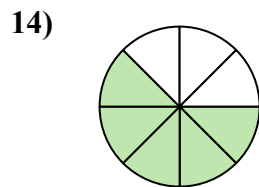
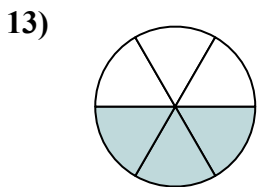
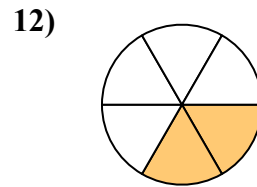
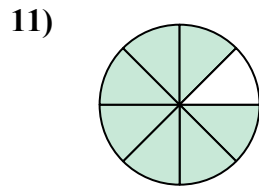
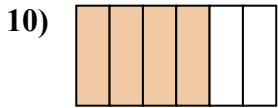
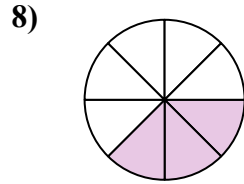
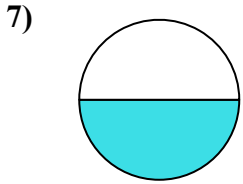
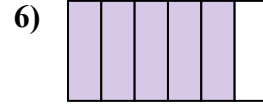
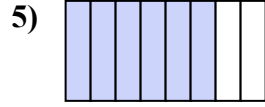
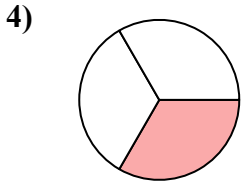
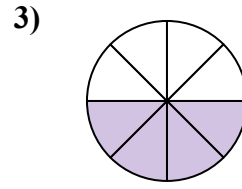
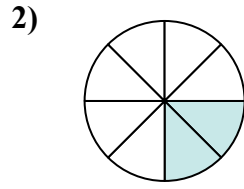
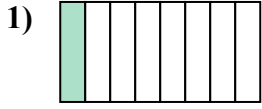
16. $\frac{1}{3}$

17. $\frac{2}{4}$

18. $\frac{3}{4}$



Напишите дробь, равную закрашенной части в фигуре.

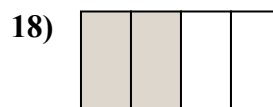
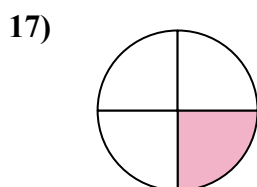
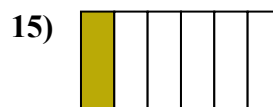
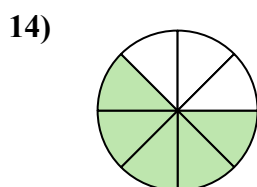
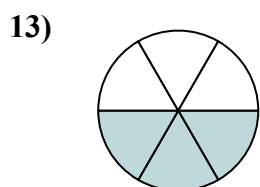
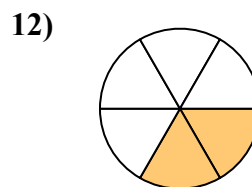
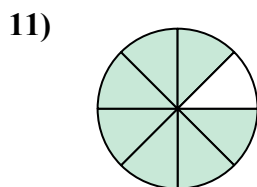
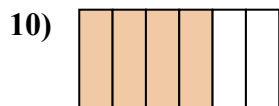

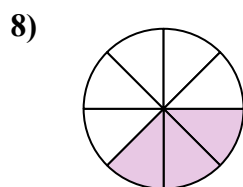
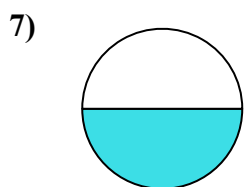
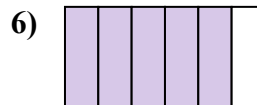
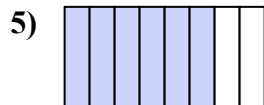
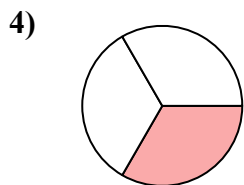
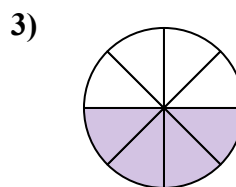
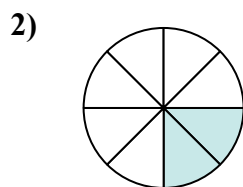


Отвeты

1. _____
2. _____
3. _____
4. _____
5. _____
6. _____
7. _____
8. _____
9. _____
10. _____
11. _____
12. _____
13. _____
14. _____
15. _____
16. _____
17. _____
18. _____



Напишите дробь, равную закрашенной части в фигуре.



Ответы

1. 1/8

2. 2/8

3. 4/8

4. 1/3

5. 6/8

6. 5/6

7. 1/2

8. 3/8

9. 2/3

10. 4/6

11. 7/8

12. 2/6

13. 3/6

14. 5/8

15. 1/6

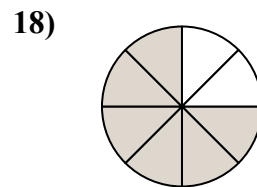
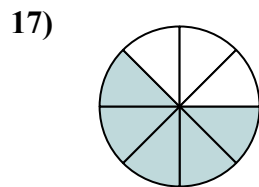
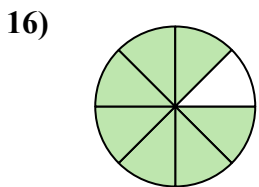
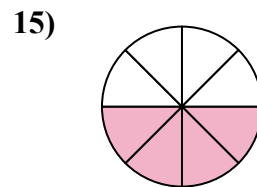
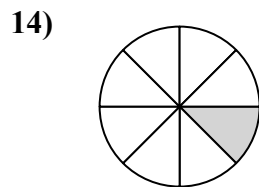
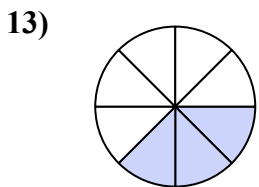
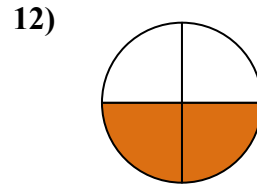
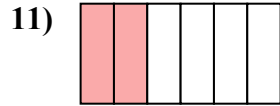
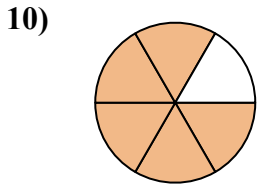
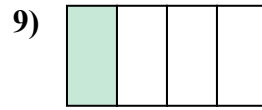
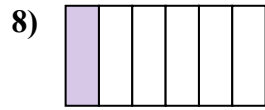
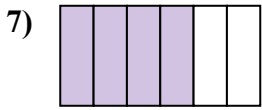
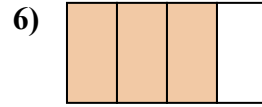
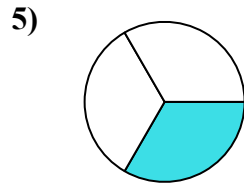

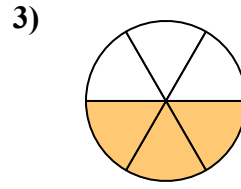
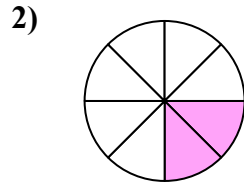
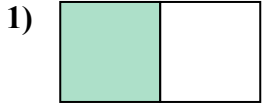
16. 3/4

17. 1/4

18. 2/4



Напишите дробь, равную закрашенной части в фигуре.



Ответы

1. _____

2. _____

3. _____

4. _____

5. _____

6. _____

7. _____

8. _____

9. _____

10. _____

11. _____

12. _____

13. _____

14. _____

15. _____

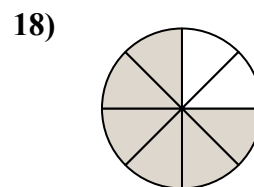
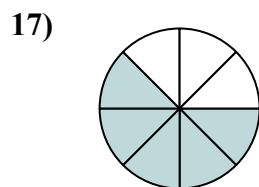
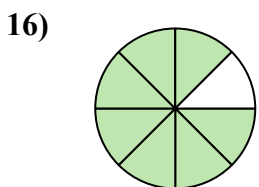
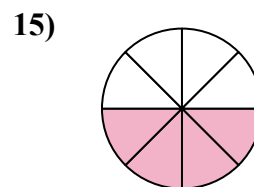
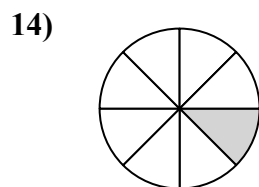
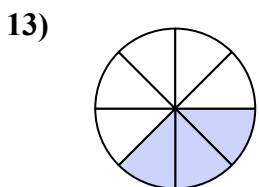
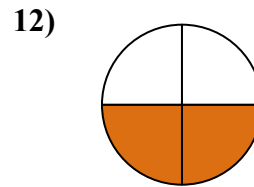
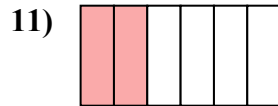
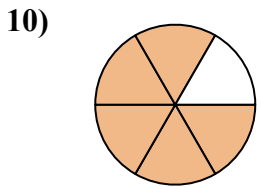
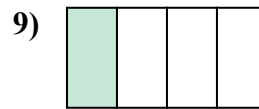
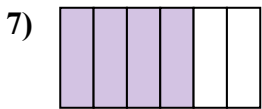
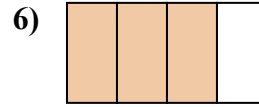
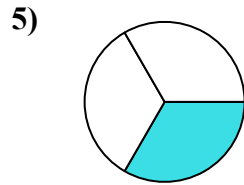

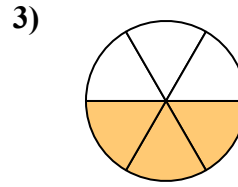
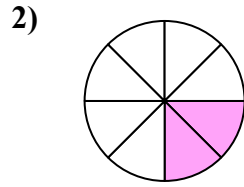
16. _____

17. _____

18. _____



Напишите дробь, равную закрашенной части в фигуре.



Отвѣты

1. $\frac{1}{2}$

2. $\frac{2}{8}$

3. $\frac{3}{6}$

4. $\frac{2}{3}$

5. $\frac{1}{3}$

6. $\frac{3}{4}$

7. $\frac{4}{6}$

8. $\frac{1}{6}$

9. $\frac{1}{4}$

10. $\frac{5}{6}$

11. $\frac{2}{6}$

12. $\frac{2}{4}$

13. $\frac{3}{8}$

14. $\frac{1}{8}$

15. $\frac{4}{8}$

16. $\frac{7}{8}$

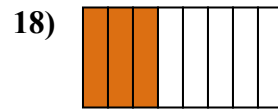
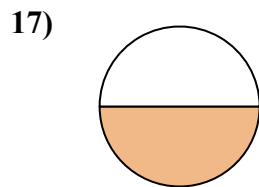
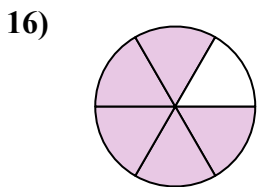
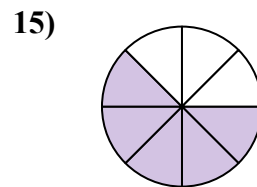
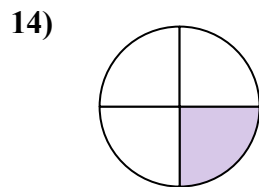
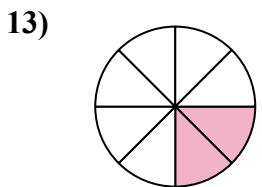
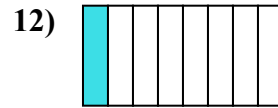
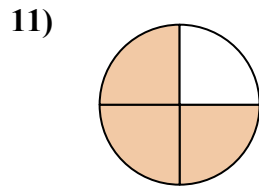
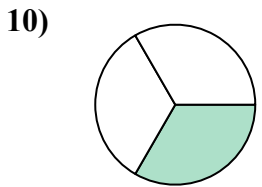
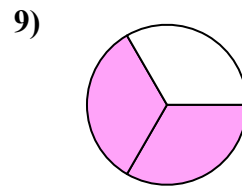
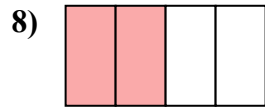
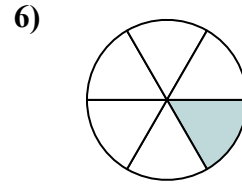
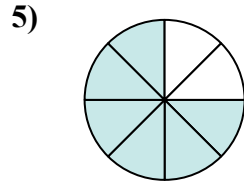
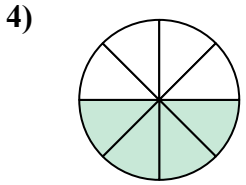
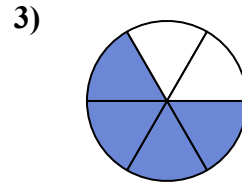
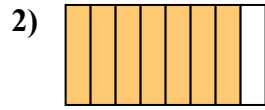
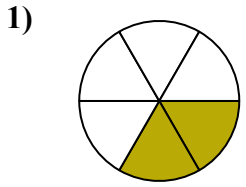
17. $\frac{5}{8}$

18. $\frac{6}{8}$



Напишите дробь, равную закрашенной части в фигуре.

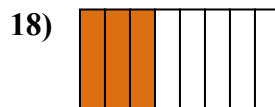
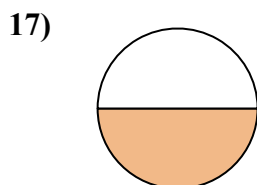
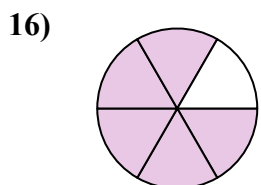
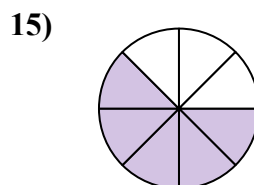
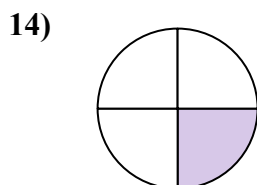
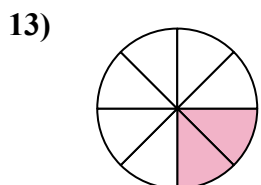
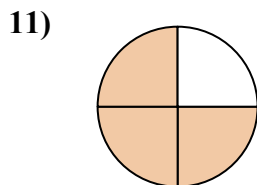
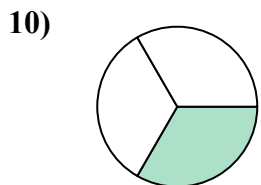
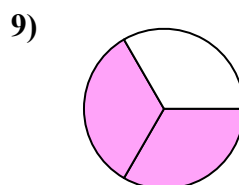
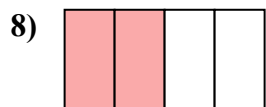
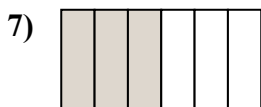
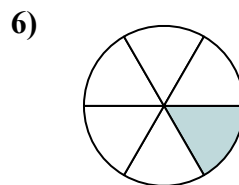
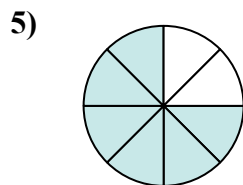
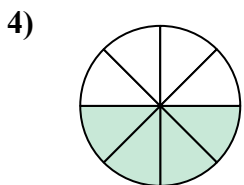
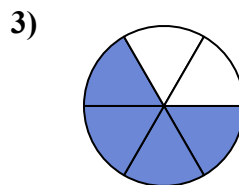
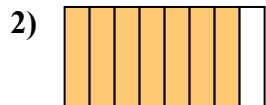
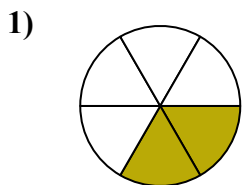
ОТВЕТЫ



1. _____
2. _____
3. _____
4. _____
5. _____
6. _____
7. _____
8. _____
9. _____
10. _____
11. _____
12. _____
13. _____
14. _____
15. _____
16. _____
17. _____
18. _____



Напишите дробь, равную закрашенной части в фигуре.



Отвѣты

1. $\frac{2}{6}$

2. $\frac{7}{8}$

3. $\frac{4}{6}$

4. $\frac{4}{8}$

5. $\frac{6}{8}$

6. $\frac{1}{6}$

7. $\frac{3}{6}$

8. $\frac{2}{4}$

9. $\frac{2}{3}$

10. $\frac{1}{3}$

11. $\frac{3}{4}$

12. $\frac{1}{8}$

13. $\frac{2}{8}$

14. $\frac{1}{4}$

15. $\frac{5}{8}$

16. $\frac{5}{6}$

17. $\frac{1}{2}$

18. $\frac{3}{8}$