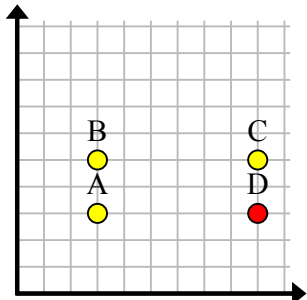


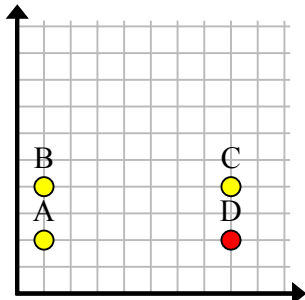


Найдите координаты точки D, чтобы получился прямоугольник.

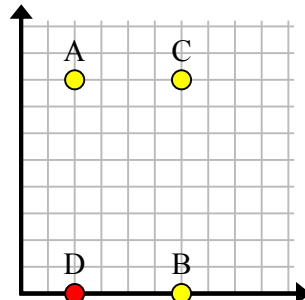
об)



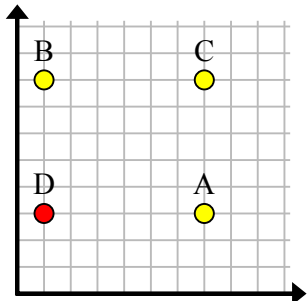
1)



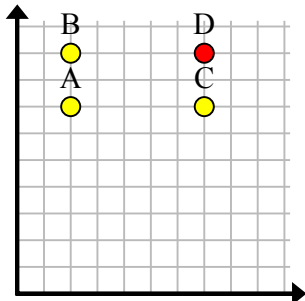
2)



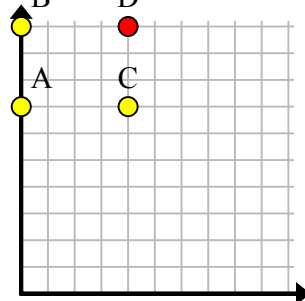
3)



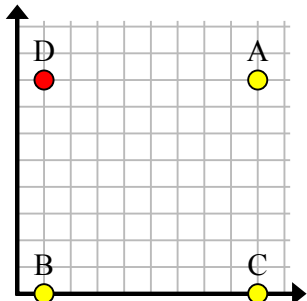
4)



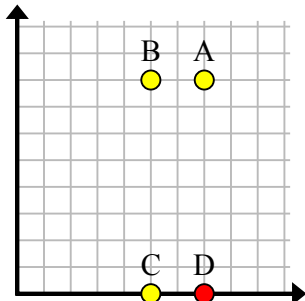
5)



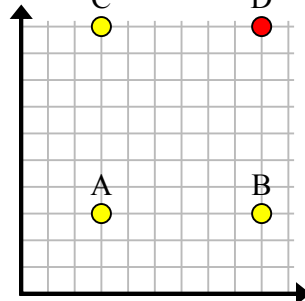
6)



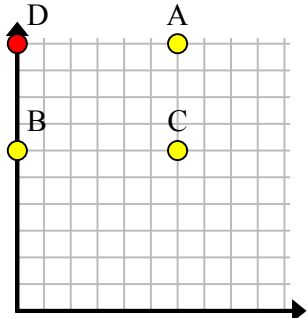
7)



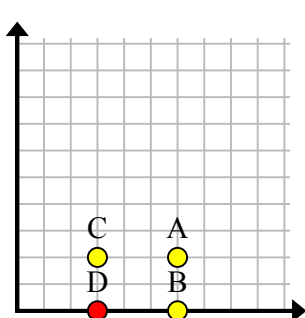
8)



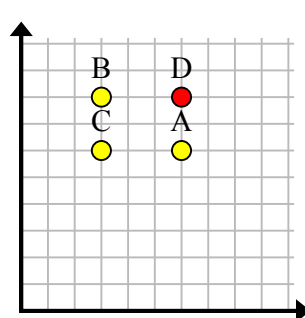
9)



10)



11)

**Ответы**об. (9, 3)1. (8, 2)2. (2, 0)3. (1, 3)4. (7, 9)5. (4, 10)6. (1, 8)7. (7, 0)8. (9, 10)9. (0, 10)10. (3, 0)11. (6, 8)