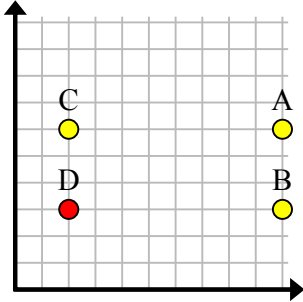


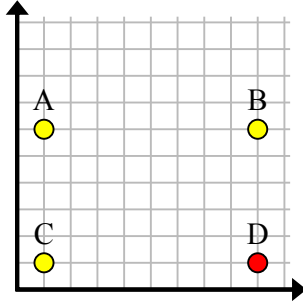


Найдите координаты точки D, чтобы получился прямоугольник.

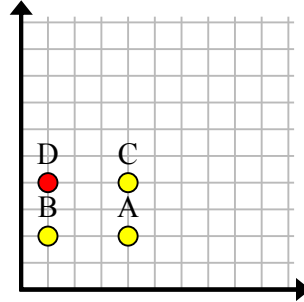
об)



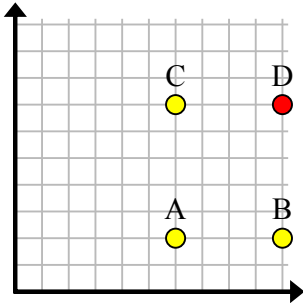
1)



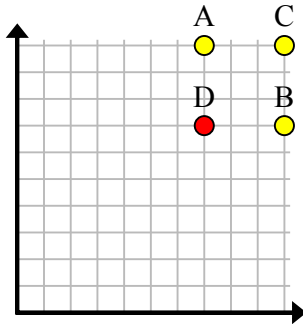
2)



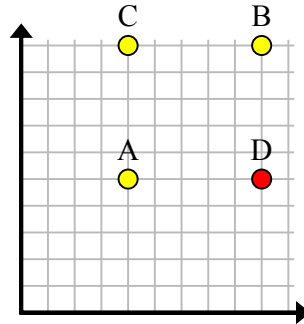
3)



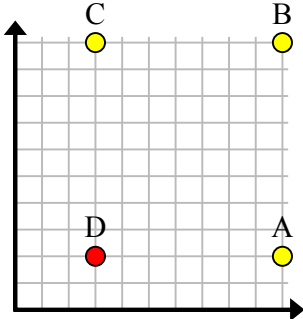
4)



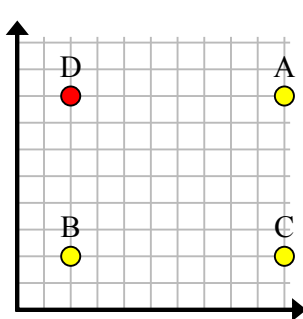
5)



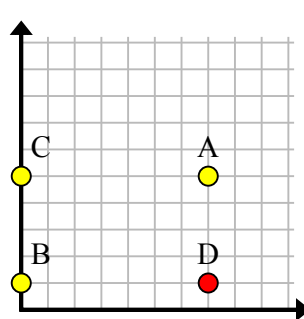
6)



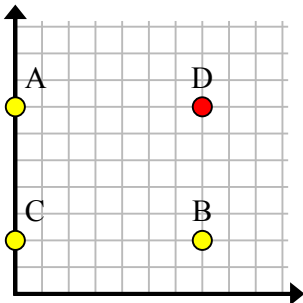
7)



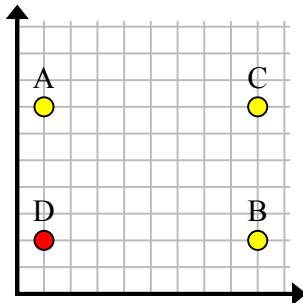
8)



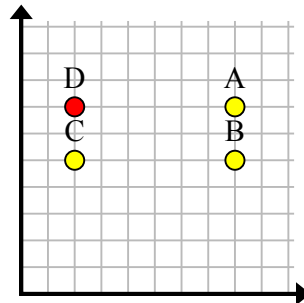
9)



10)



11)

**Ответы**об. (2, 3)1. (9, 1)2. (1, 4)3. (10, 7)4. (7, 7)5. (9, 5)6. (3, 2)7. (2, 8)8. (7, 1)9. (7, 7)10. (1, 2)11. (2, 7)