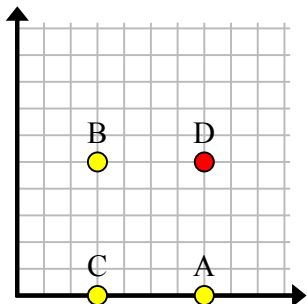




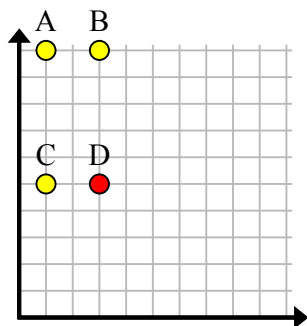


Найдите координаты точки D, чтобы получился прямоугольник.

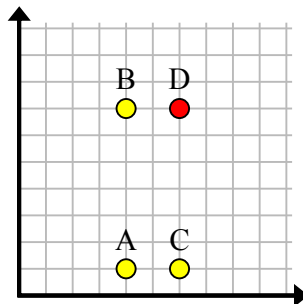
об)



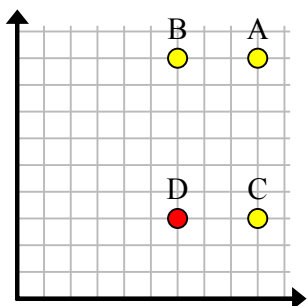
1)



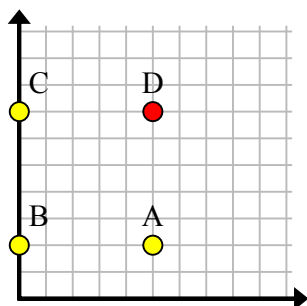
2)



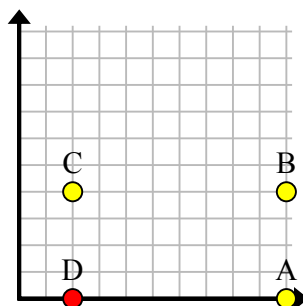
3)



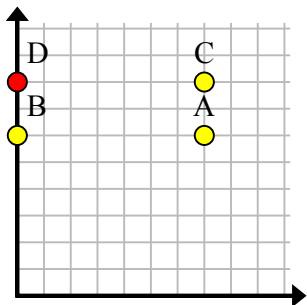
4)



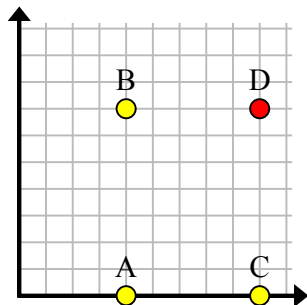
5)



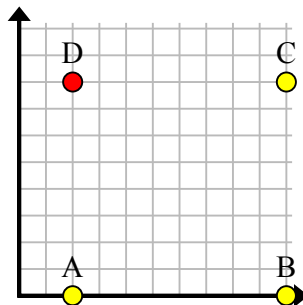
6)



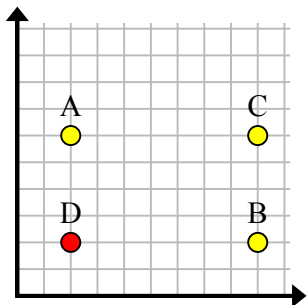
7)



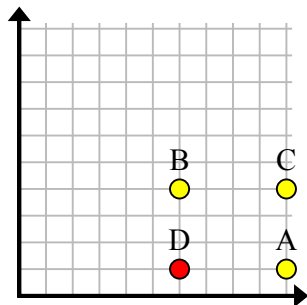
8)



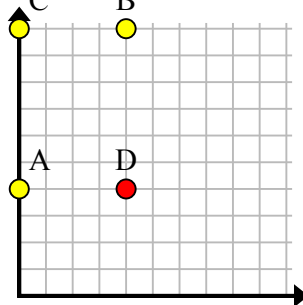
9)



10)



11)

**Отвeты**об. (7, 5)1. (3, 5)2. (6, 7)3. (6, 3)4. (5, 7)5. (2, 0)6. (0, 8)7. (9, 7)8. (2, 8)9. (2, 2)10. (6, 1)11. (4, 4)