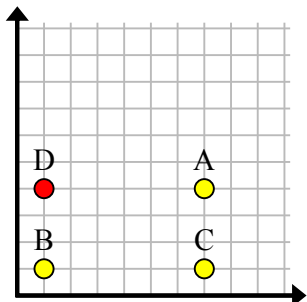




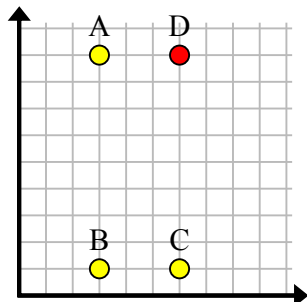


Найдите координаты точки D, чтобы получился прямоугольник.

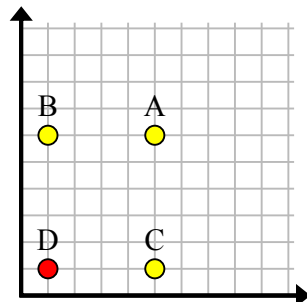
об)



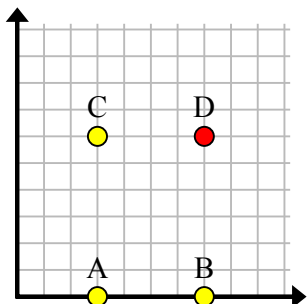
1)



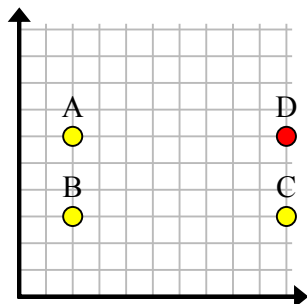
2)



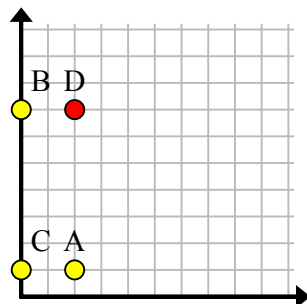
3)



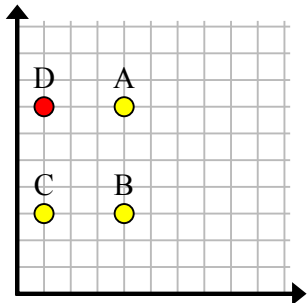
4)



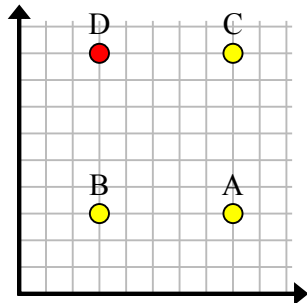
5)



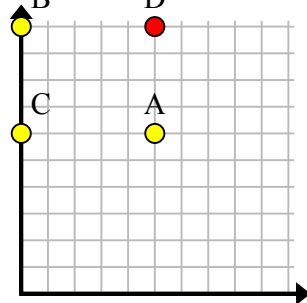
6)



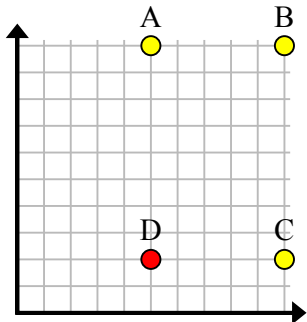
7)



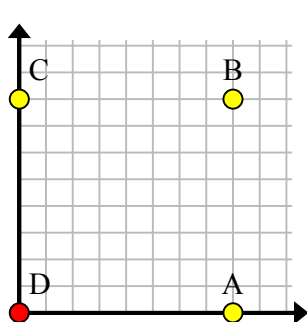
8)



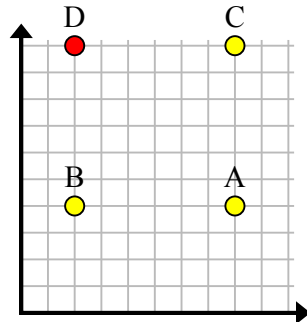
9)



10)



11)

**Ответы**об. (1, 4)1. (6, 9)2. (1, 1)3. (7, 6)4. (10, 6)5. (2, 7)6. (1, 7)7. (3, 9)8. (5, 10)9. (5, 2)10. (0, 0)11. (2, 10)