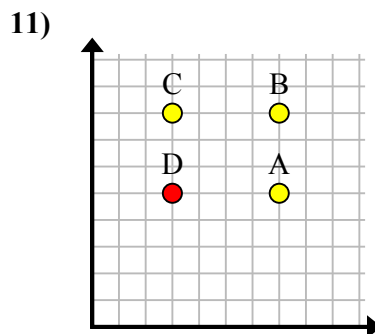
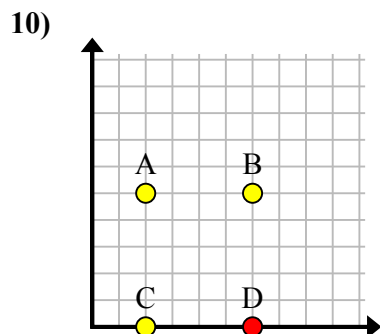
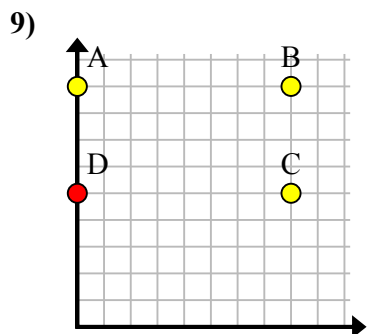
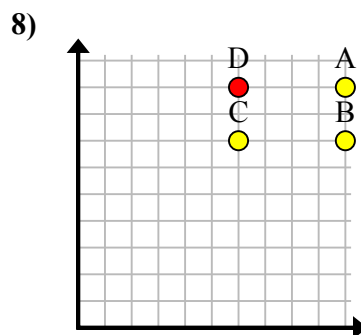
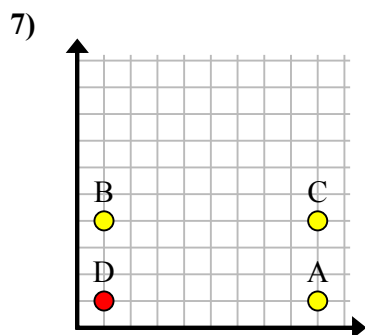
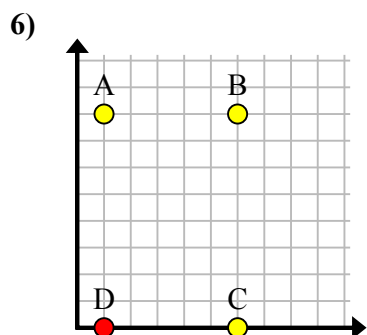
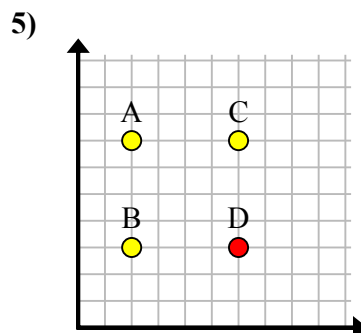
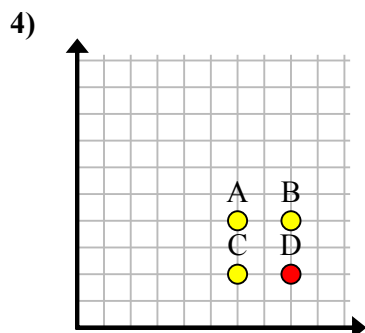
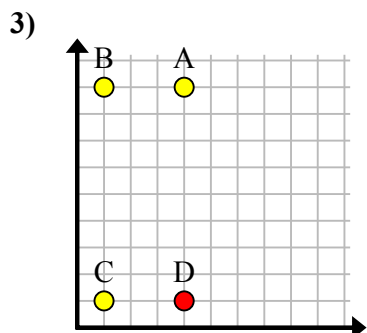
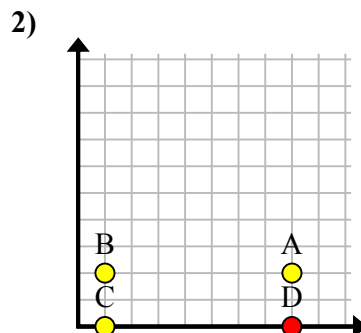
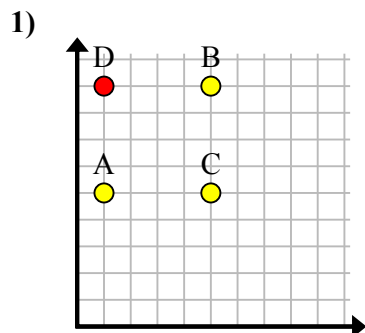
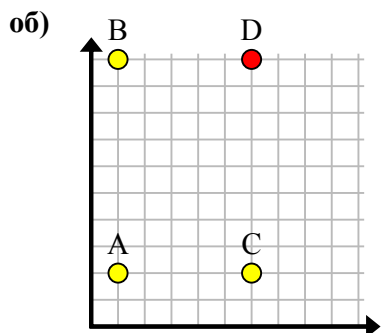




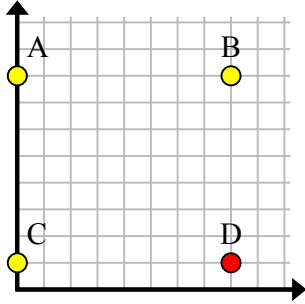
Найдите координаты точки D, чтобы получился прямоугольник.

**Отвeты**об. (6, 10)1. (1, 9)2. (8, 0)3. (4, 1)4. (8, 2)5. (6, 3)6. (1, 0)7. (1, 1)8. (6, 9)9. (0, 5)10. (6, 0)11. (3, 5)

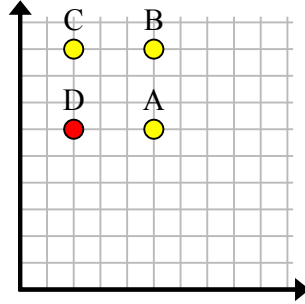


Найдите координаты точки D, чтобы получился прямоугольник.

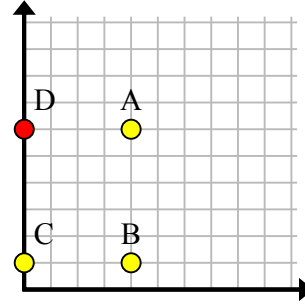
об)



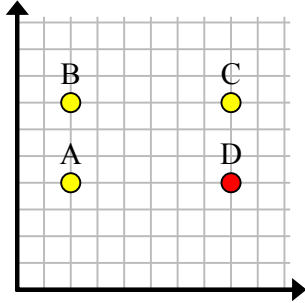
1)



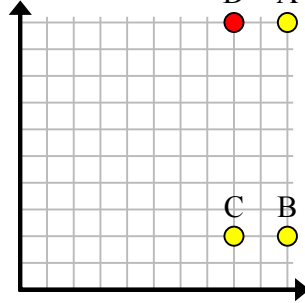
2)



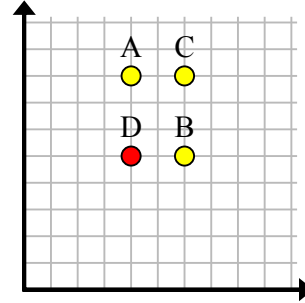
3)



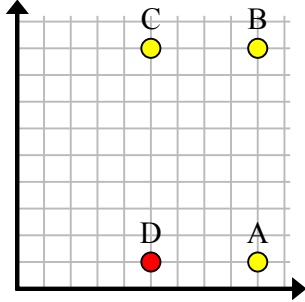
4)



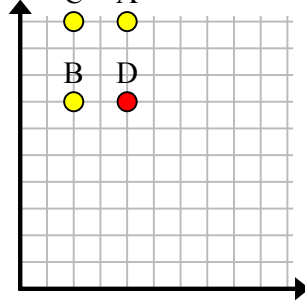
5)



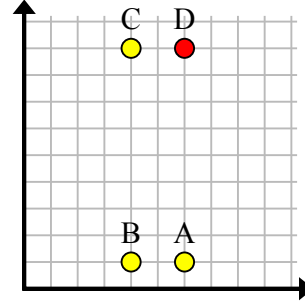
6)



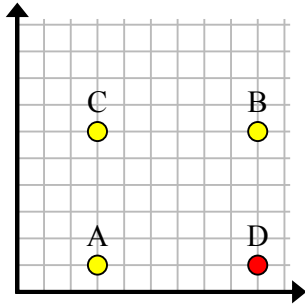
7)



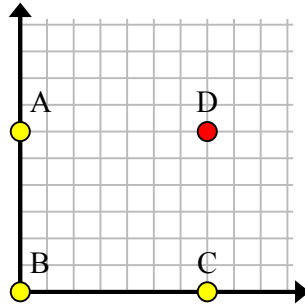
8)



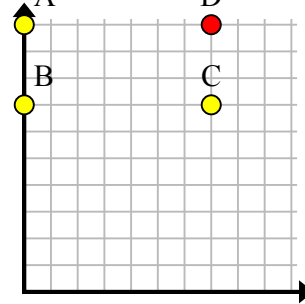
9)



10)



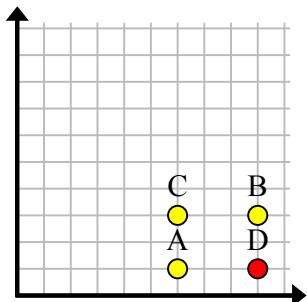
11)

**Отв**об. (8, 1)1. (2, 6)2. (0, 6)3. (8, 4)4. (8, 10)5. (4, 5)6. (5, 1)7. (4, 7)8. (6, 9)9. (9, 1)10. (7, 6)11. (7, 10)

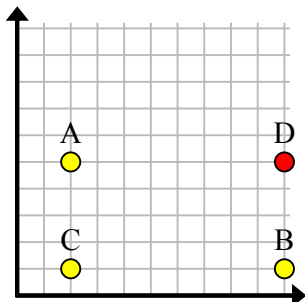


Найдите координаты точки D, чтобы получился прямоугольник.

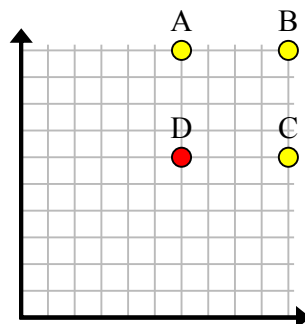
об)



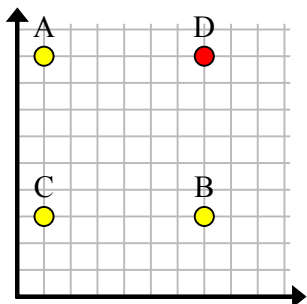
1)



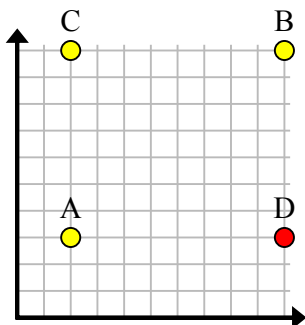
2)



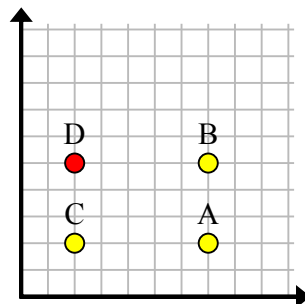
3)



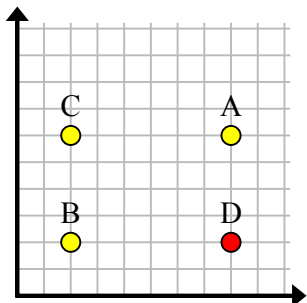
4)



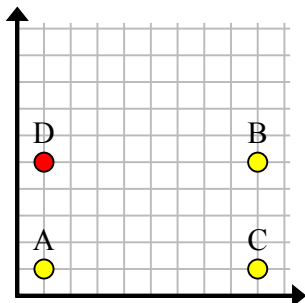
5)



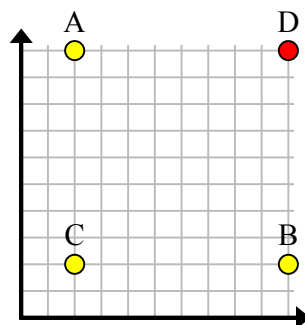
6)



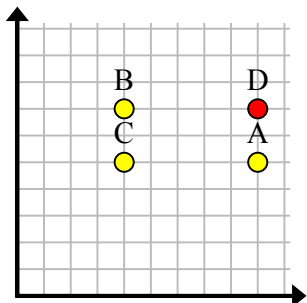
7)



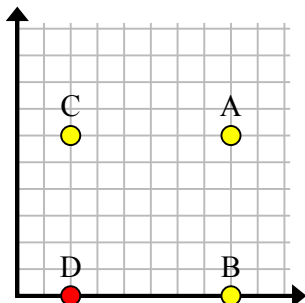
8)



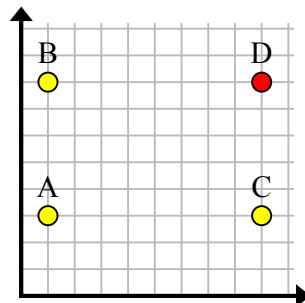
9)



10)



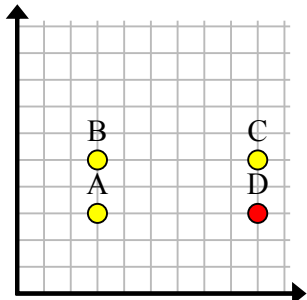
11)

**Ответы**об. (9, 1)1. (10, 5)2. (6, 6)3. (7, 9)4. (10, 3)5. (2, 5)6. (8, 2)7. (1, 5)8. (10, 10)9. (9, 7)10. (2, 0)11. (9, 8)

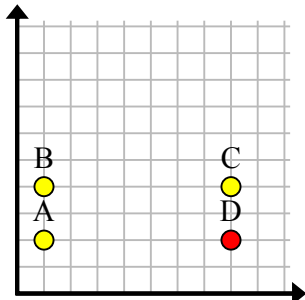


Найдите координаты точки D, чтобы получился прямоугольник.

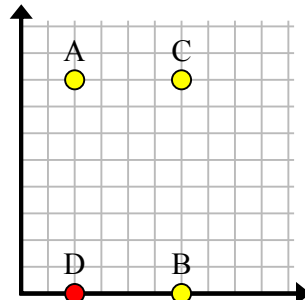
об)



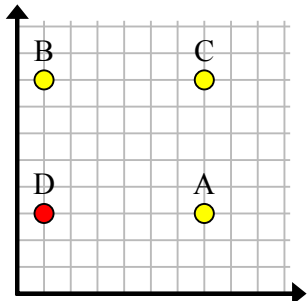
1)



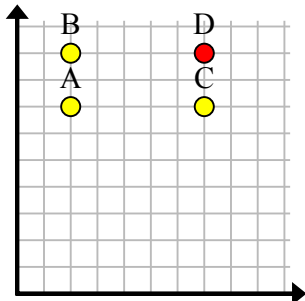
2)



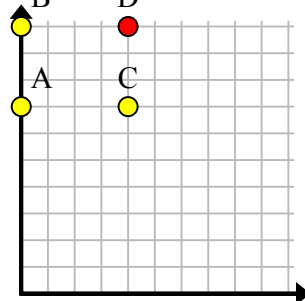
3)



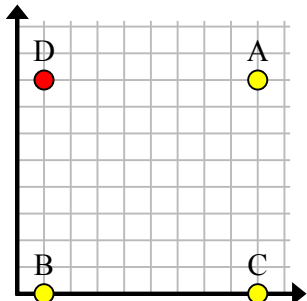
4)



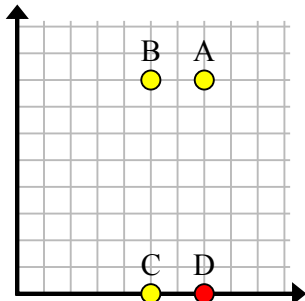
5)



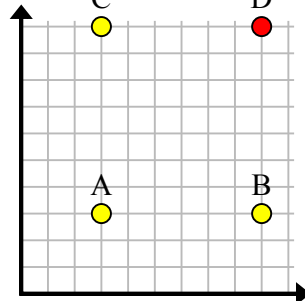
6)



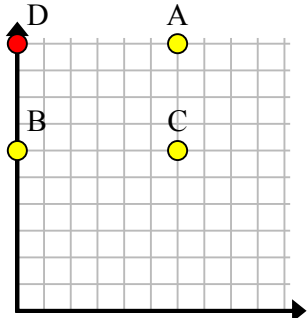
7)



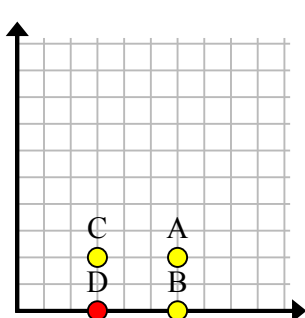
8)



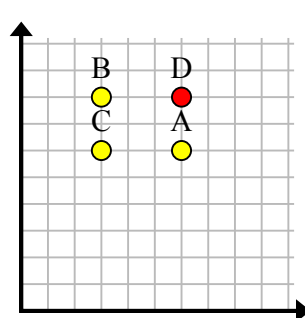
9)



10)



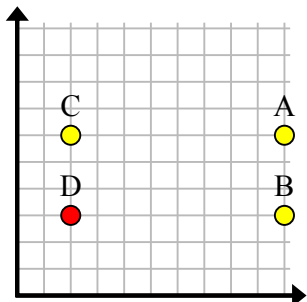
11)

**Отвeты**об. (9, 3)1. (8, 2)2. (2, 0)3. (1, 3)4. (7, 9)5. (4, 10)6. (1, 8)7. (7, 0)8. (9, 10)9. (0, 10)10. (3, 0)11. (6, 8)

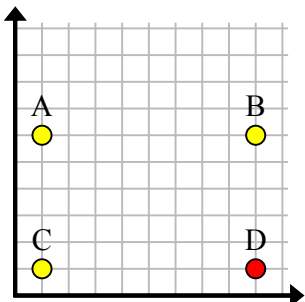


Найдите координаты точки D, чтобы получился прямоугольник.

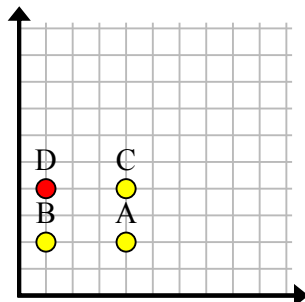
об)



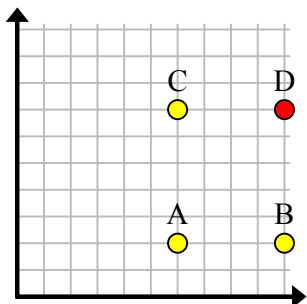
1)



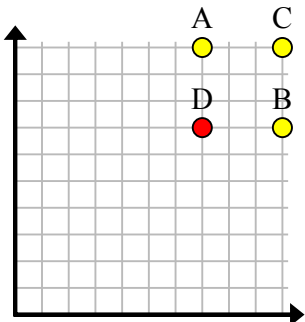
2)



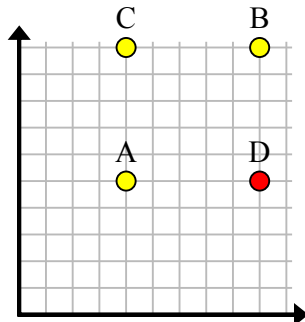
3)



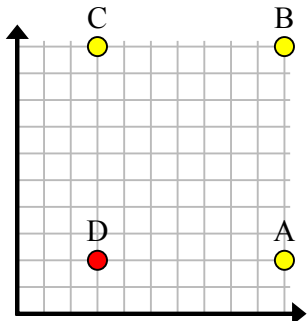
4)



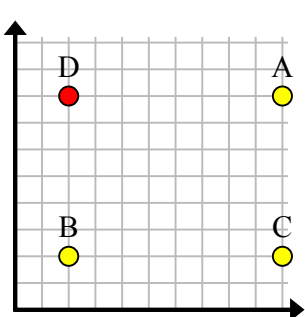
5)



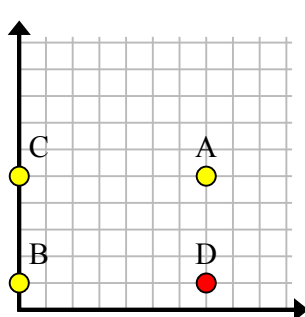
6)



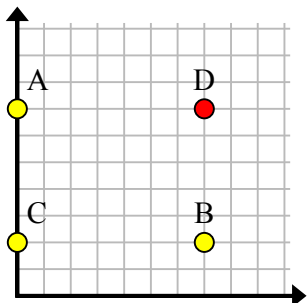
7)



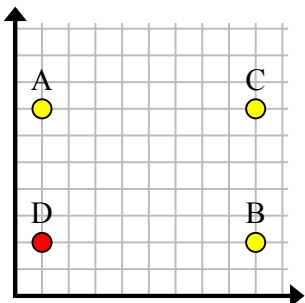
8)



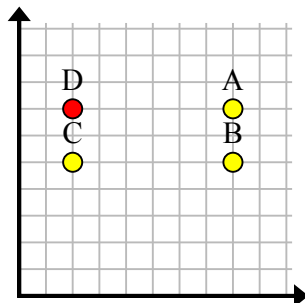
9)



10)



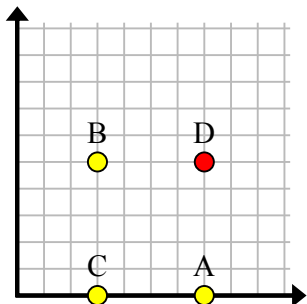
11)

**Ответы**об. (2, 3)1. (9, 1)2. (1, 4)3. (10, 7)4. (7, 7)5. (9, 5)6. (3, 2)7. (2, 8)8. (7, 1)9. (7, 7)10. (1, 2)11. (2, 7)

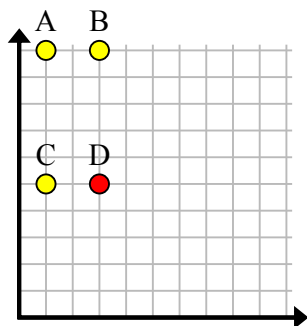


Найдите координаты точки D, чтобы получился прямоугольник.

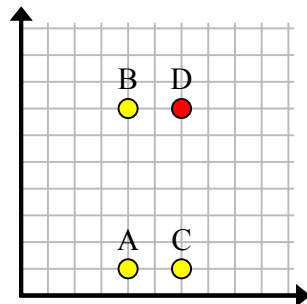
об)



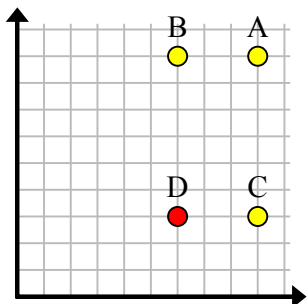
1)



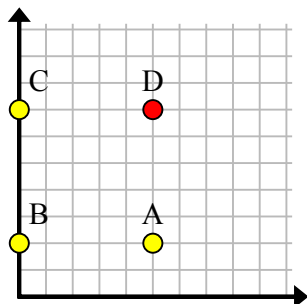
2)



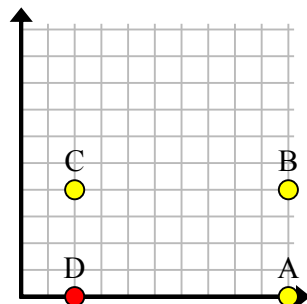
3)



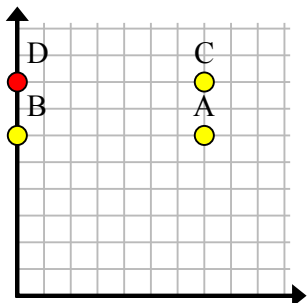
4)



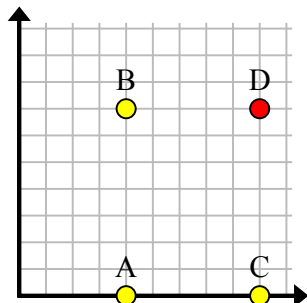
5)



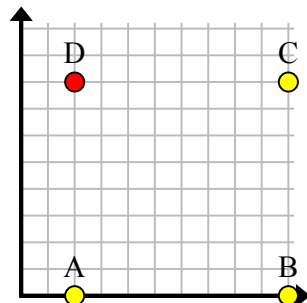
6)



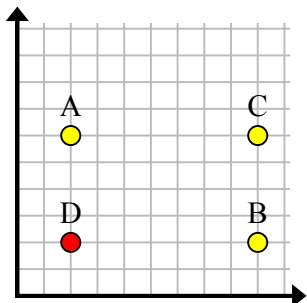
7)



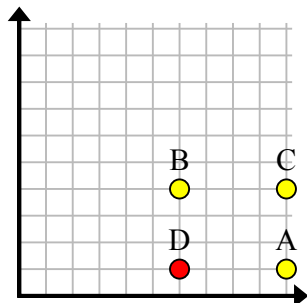
8)



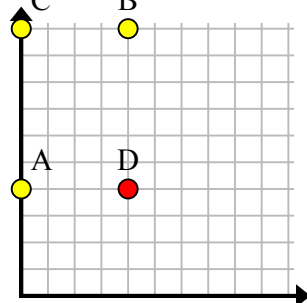
9)



10)



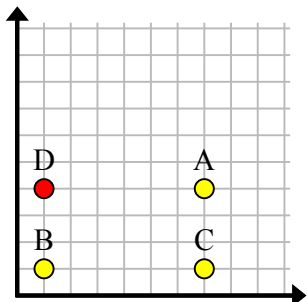
11)

**Отвeты**об. (7, 5)1. (3, 5)2. (6, 7)3. (6, 3)4. (5, 7)5. (2, 0)6. (0, 8)7. (9, 7)8. (2, 8)9. (2, 2)10. (6, 1)11. (4, 4)

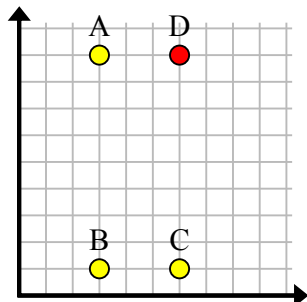


Найдите координаты точки D, чтобы получился прямоугольник.

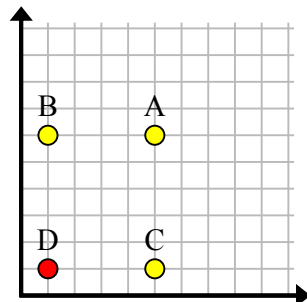
об)



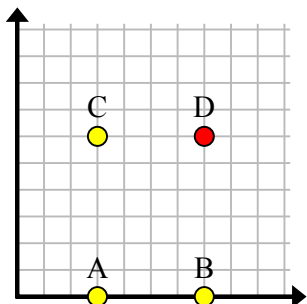
1)



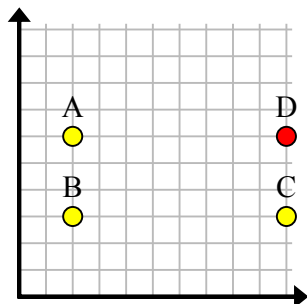
2)



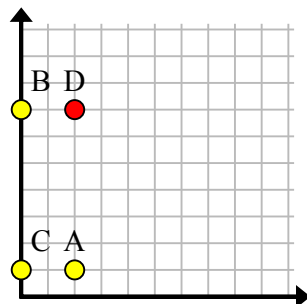
3)



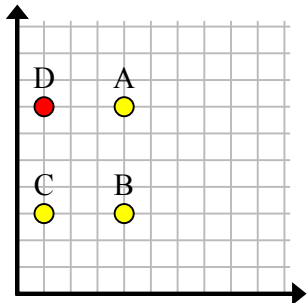
4)



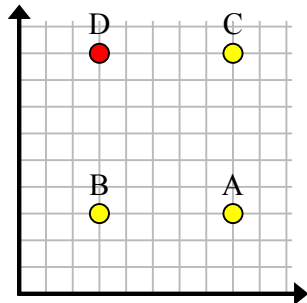
5)



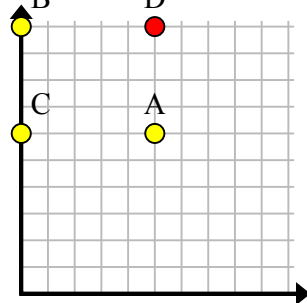
6)



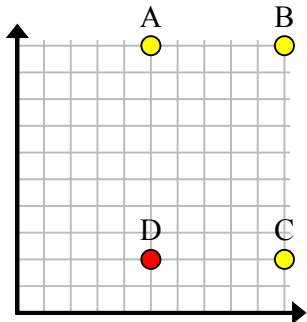
7)



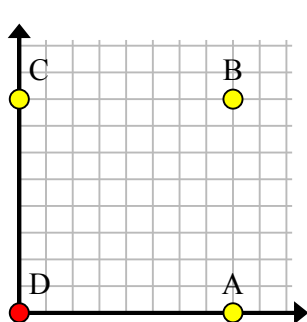
8)



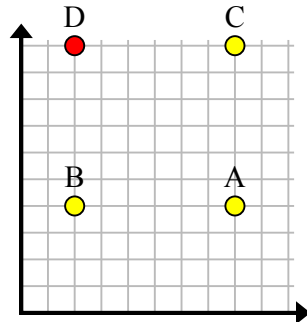
9)



10)



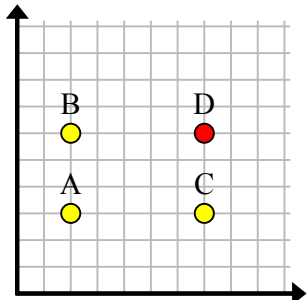
11)

**Ответы**об. (1, 4)1. (6, 9)2. (1, 1)3. (7, 6)4. (10, 6)5. (2, 7)6. (1, 7)7. (3, 9)8. (5, 10)9. (5, 2)10. (0, 0)11. (2, 10)

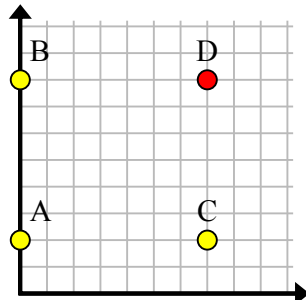


Найдите координаты точки D, чтобы получился прямоугольник.

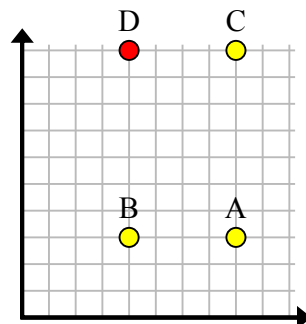
об)



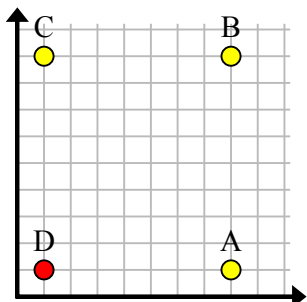
1)



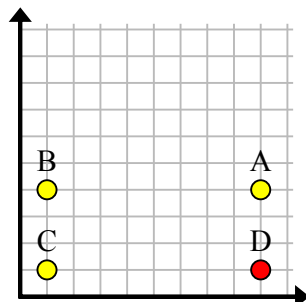
2)



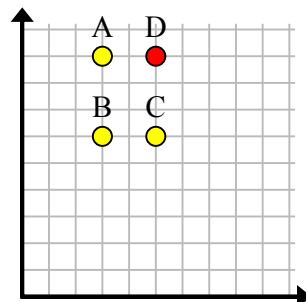
3)



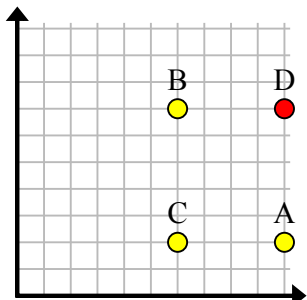
4)



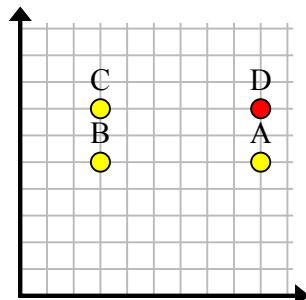
5)



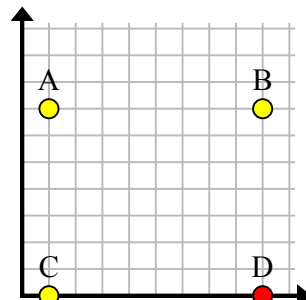
6)



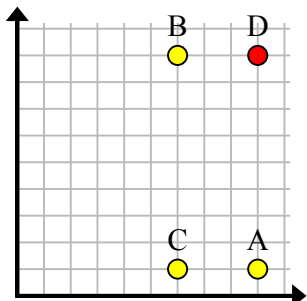
7)



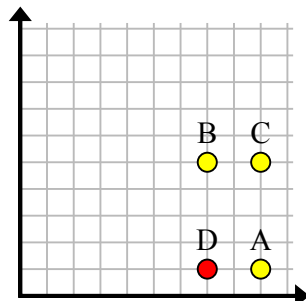
8)



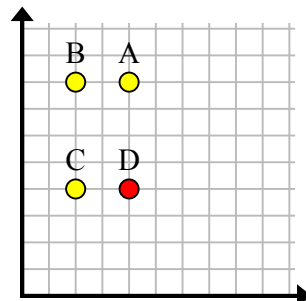
9)



10)



11)

**Ответы**об. (7, 6)1. (7, 8)2. (4, 10)3. (1, 1)4. (9, 1)5. (5, 9)6. (10, 7)7. (9, 7)8. (9, 0)9. (9, 9)10. (7, 1)11. (4, 4)