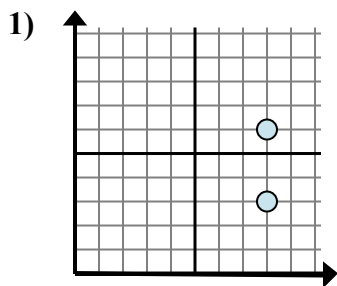


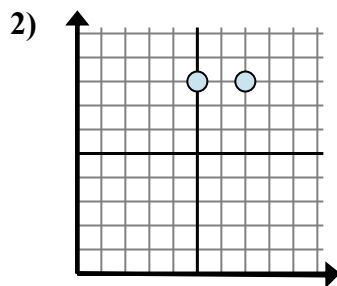


Определите, какое выражение лучше всего показывает расстояние между двумя точками.

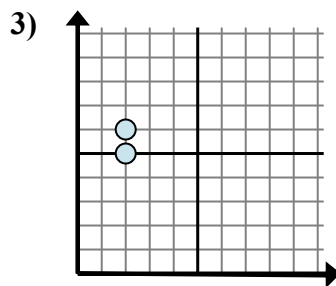
**ОТВЕТЫ**



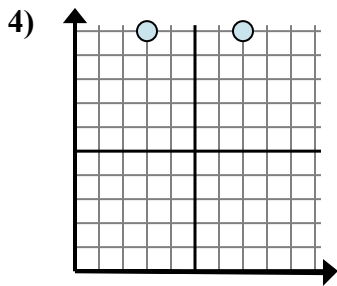
- A.  $6 - 3$
- B.  $6 - 8$
- C.  $8 - 8$
- D.  $3 - 8$



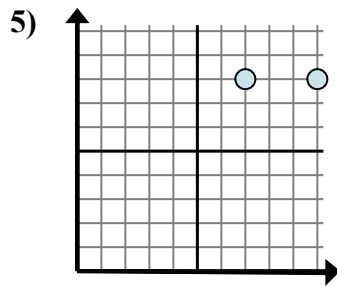
- A.  $8 - 7$
- B.  $7 - 5$
- C.  $8 - 7$
- D.  $8 - 8$



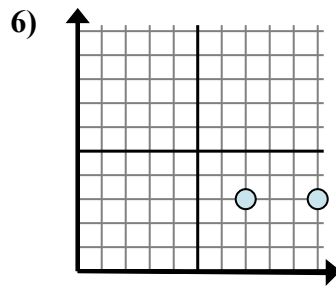
- A.  $6 - 5$
- B.  $2 - 5$
- C.  $5 - 2$
- D.  $6 - 2$



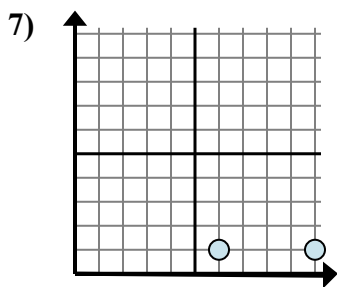
- A.  $7 - 3$
- B.  $10 - 3$
- C.  $10 - 3$
- D.  $10 - 10$



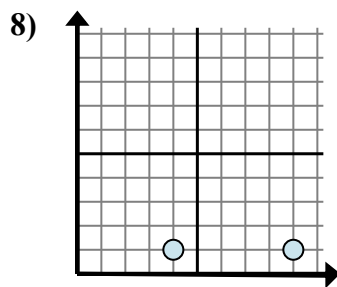
- A.  $8 - 8$
- B.  $10 - 8$
- C.  $7 - 8$
- D.  $10 - 7$



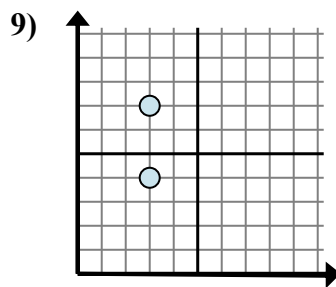
- A.  $10 - 7$
- B.  $7 - 3$
- C.  $3 - 10$
- D.  $3 - 10$



- A.  $10 - 6$
- B.  $6 - 1$
- C.  $6 - 10$
- D.  $1 - 1$



- A.  $4 - 9$
- B.  $9 - 4$
- C.  $1 - 9$
- D.  $4 - 1$



- A.  $3 - 3$
- B.  $4 - 3$
- C.  $3 - 3$
- D.  $7 - 4$

1. \_\_\_\_\_

2. \_\_\_\_\_

3. \_\_\_\_\_

4. \_\_\_\_\_

5. \_\_\_\_\_

6. \_\_\_\_\_

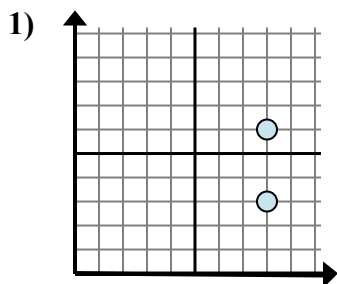
7. \_\_\_\_\_

8. \_\_\_\_\_

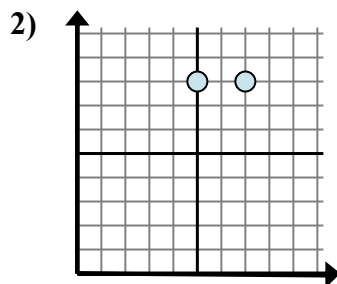
9. \_\_\_\_\_



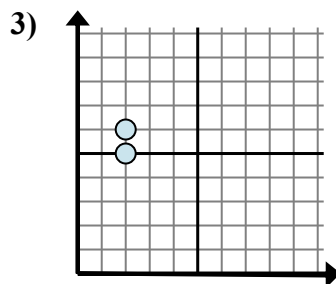
Определите, какое выражение лучше всего показывает расстояние между двумя точками.



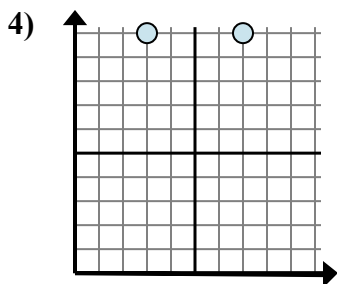
- A.  $6 - 3$
- B.  $6 - 8$
- C.  $8 - 8$
- D.  $3 - 8$



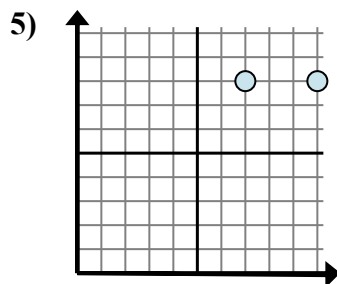
- A.  $8 - 7$
- B.  $7 - 5$
- C.  $8 - 7$
- D.  $8 - 8$



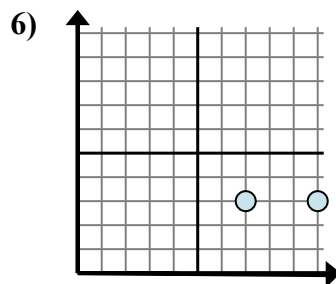
- A.  $6 - 5$
- B.  $2 - 5$
- C.  $5 - 2$
- D.  $6 - 2$



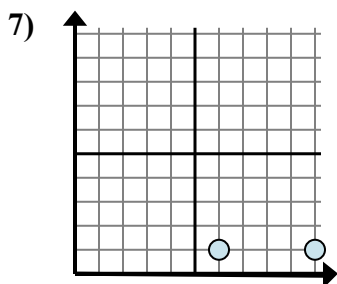
- A.  $7 - 3$
- B.  $10 - 3$
- C.  $10 - 3$
- D.  $10 - 10$



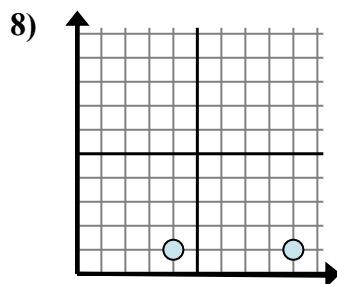
- A.  $8 - 8$
- B.  $10 - 8$
- C.  $7 - 8$
- D.  $10 - 7$



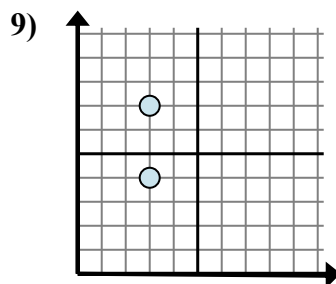
- A.  $10 - 7$
- B.  $7 - 3$
- C.  $3 - 10$
- D.  $3 - 10$



- A.  $10 - 6$
- B.  $6 - 1$
- C.  $6 - 10$
- D.  $1 - 1$



- A.  $4 - 9$
- B.  $9 - 4$
- C.  $1 - 9$
- D.  $4 - 1$



- A.  $3 - 3$
- B.  $4 - 3$
- C.  $3 - 3$
- D.  $7 - 4$

**ОТВЕТЫ**

- 1.           **A**
- 2.           **B**
- 3.           **A**
- 4.           **A**
- 5.           **D**
- 6.           **A**
- 7.           **A**
- 8.           **B**
- 9.           **D**