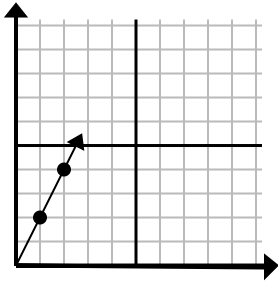




Определите, какой вариант представляет собой точку на линии, если она будет продолжаться.

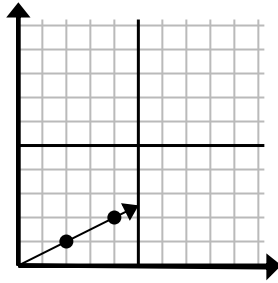
ОТВЕТЫ

1)



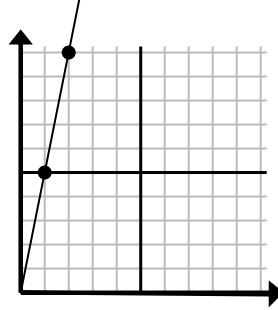
- A. (3 6)
- B. (7 3)
- C. (6 4)
- D. (7 14)

2)



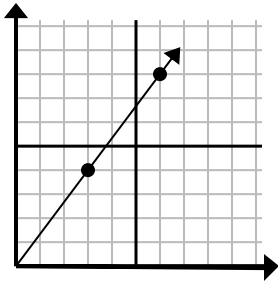
- A. (5 6)
- B. (5 4)
- C. (6 3)
- D. (9 6)

3)



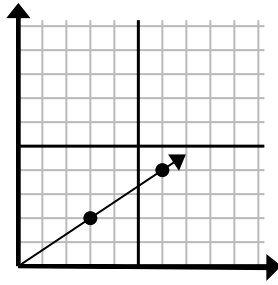
- A. (7 10)
- B. (3 15)
- C. (6 30)
- D. (5 8)

4)



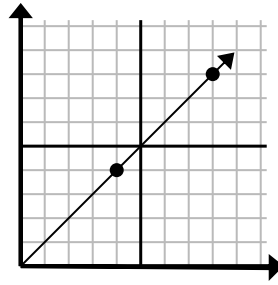
- A. (12 16)
- B. (10 6)
- C. (21 28)
- D. (9 12)

5)



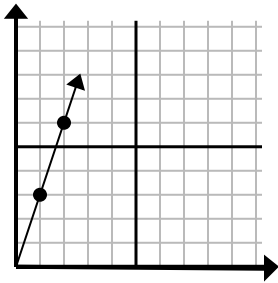
- A. (9 4)
- B. (9 6)
- C. (15 10)
- D. (12 8)

6)



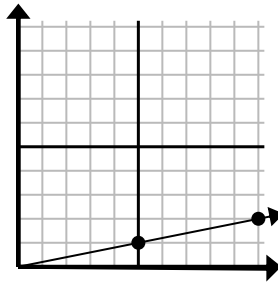
- A. (16 16)
- B. (12 12)
- C. (9 9)
- D. (24 24)

7)



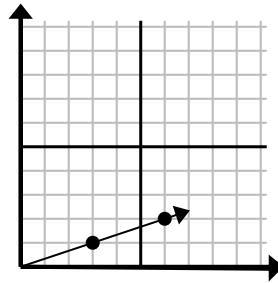
- A. (5 8)
- B. (5 15)
- C. (6 18)
- D. (3 9)

8)



- A. (11 5)
- B. (15 2)
- C. (15 3)
- D. (14 2)

9)



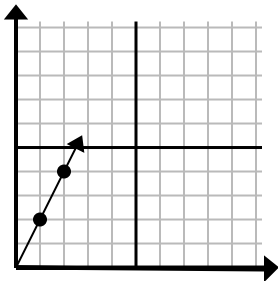
- A. (10 6)
- B. (9 3)
- C. (8 6)
- D. (9 2)

1. _____
2. _____
3. _____
4. _____
5. _____
6. _____
7. _____
8. _____
9. _____



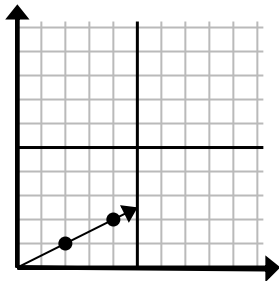
Определите, какой вариант представляет собой точку на линии, если она будет продолжаться.

1)



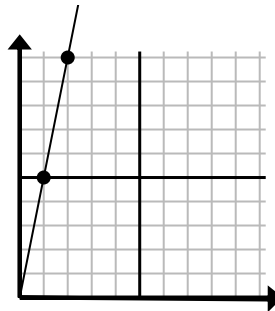
- A. (3 6)
- B. (7 3)
- C. (6 4)
- D. (7 14)

2)



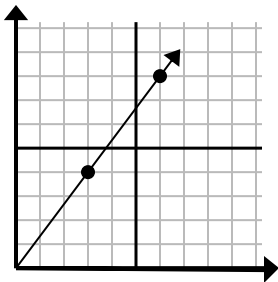
- A. (5 6)
- B. (5 4)
- C. (6 3)
- D. (9 6)

3)



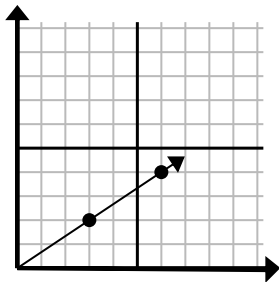
- A. (7 10)
- B. (3 15)
- C. (6 30)
- D. (5 8)

4)



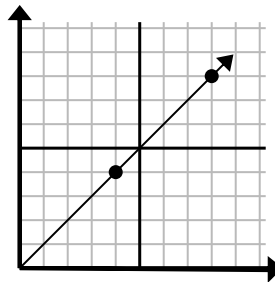
- A. (12 16)
- B. (10 6)
- C. (21 28)
- D. (9 12)

5)



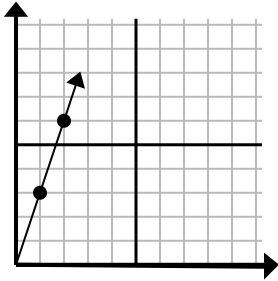
- A. (9 4)
- B. (9 6)
- C. (15 10)
- D. (12 8)

6)



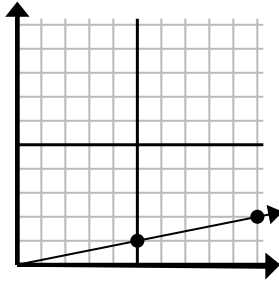
- A. (16 16)
- B. (12 12)
- C. (9 9)
- D. (24 24)

7)



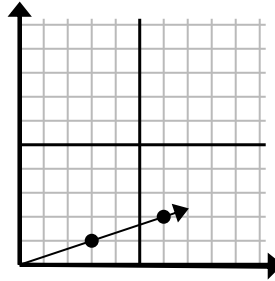
- A. (5 8)
- B. (5 15)
- C. (6 18)
- D. (3 9)

8)



- A. (11 5)
- B. (15 2)
- C. (15 3)
- D. (14 2)

9)



- A. (10 6)
- B. (9 3)
- C. (8 6)
- D. (9 2)

ОТВЕТЫ

1. **A**
2. **C**
3. **B**
4. **D**
5. **B**
6. **B**
7. **D**
8. **C**
9. **B**