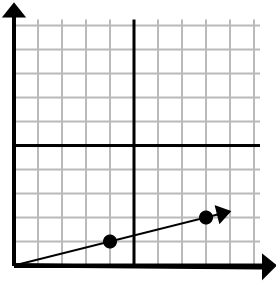




Определите, какой вариант представляет собой точку на линии, если она будет продолжаться.

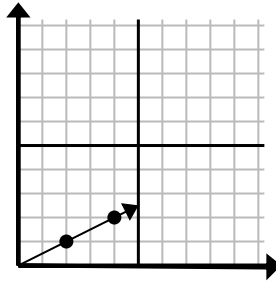
Ответы

1)



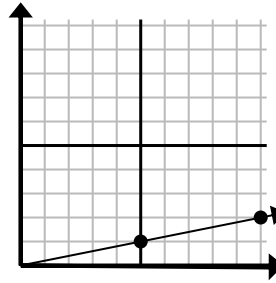
- A. (12 3)
B. (28 7)
C. (20 5)
D. (10 2)

2)



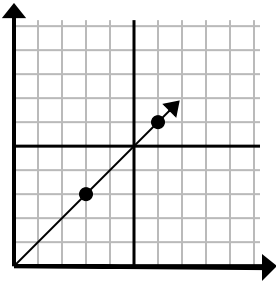
- A. (6 3)
B. (10 5)
C. (14 7)
D. (7 3)

3)



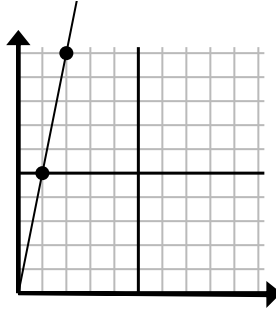
- A. (14 3)
B. (13 5)
C. (15 3)
D. (35 7)

4)



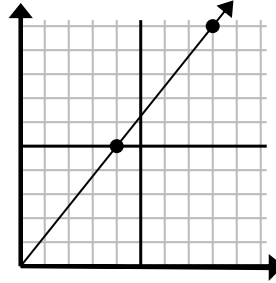
- A. (8 7)
B. (15 15)
C. (9 9)
D. (21 21)

5)



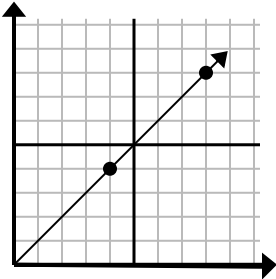
- A. (3 15)
B. (3 7)
C. (7 35)
D. (5 25)

6)



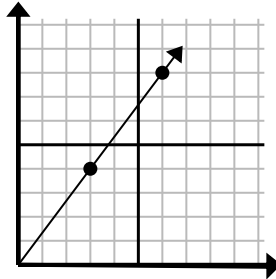
- A. (12 10)
B. (24 30)
C. (13 9)
D. (12 15)

7)



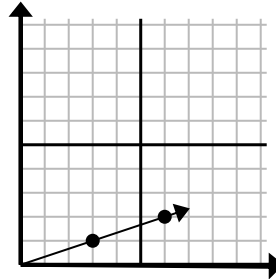
- A. (12 8)
B. (12 12)
C. (13 8)
D. (20 20)

8)



- A. (21 28)
B. (8 6)
C. (9 12)
D. (9 7)

9)



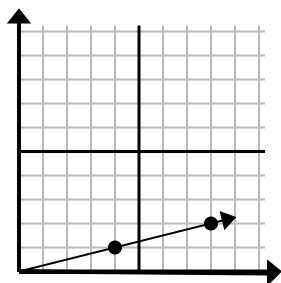
- A. (15 5)
B. (9 3)
C. (10 2)
D. (12 4)

1. _____
2. _____
3. _____
4. _____
5. _____
6. _____
7. _____
8. _____
9. _____



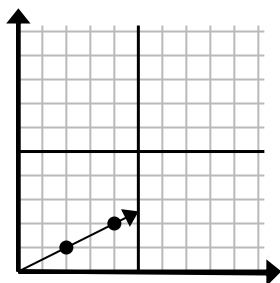
Определите, какой вариант представляет собой точку на линии, если она будет продолжаться.

1)



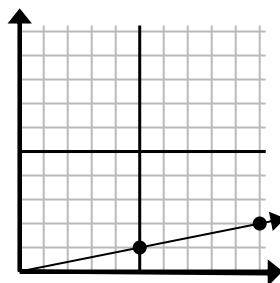
- A. (12 3)
B. (28 7)
C. (20 5)
D. (10 2)

2)



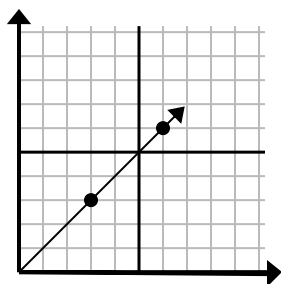
- A. (6 3)
B. (10 5)
C. (14 7)
D. (7 3)

3)



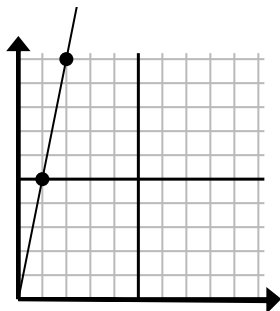
- A. (14 3)
B. (13 5)
C. (15 3)
D. (35 7)

4)



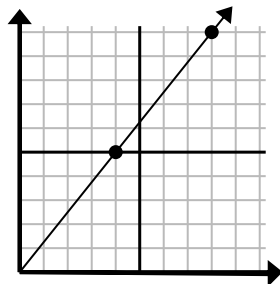
- A. (8 7)
B. (15 15)
C. (9 9)
D. (21 21)

5)



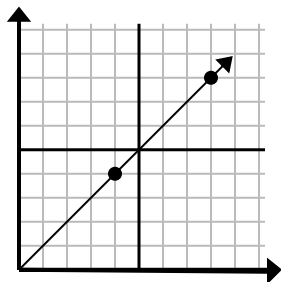
- A. (3 15)
B. (3 7)
C. (7 35)
D. (5 25)

6)



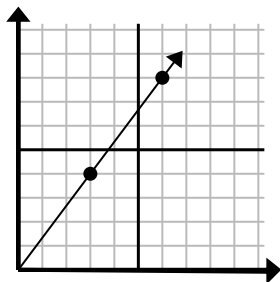
- A. (12 10)
B. (24 30)
C. (13 9)
D. (12 15)

7)



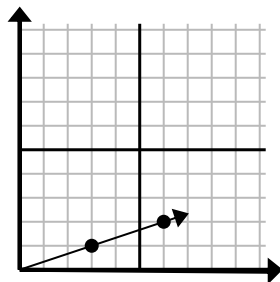
- A. (12 8)
B. (12 12)
C. (13 8)
D. (20 20)

8)



- A. (21 28)
B. (8 6)
C. (9 12)
D. (9 7)

9)



- A. (15 5)
B. (9 3)
C. (10 2)
D. (12 4)

ОТВЕТЫ1. **A** 2. **A** 3. **C** 4. **C** 5. **A** 6. **D** 7. **B** 8. **C** 9. **B**