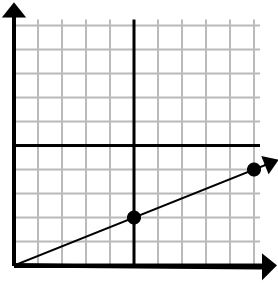




Определите, какой вариант представляет собой точку на линии, если она будет продолжаться.

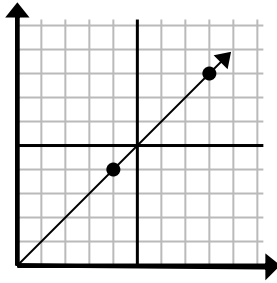
Ответы

1)



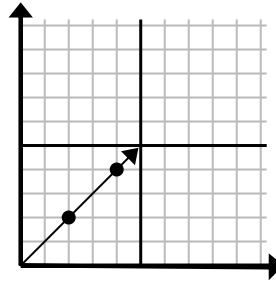
- A. (15 6)
- B. (25 10)
- C. (20 8)
- D. (30 12)

2)



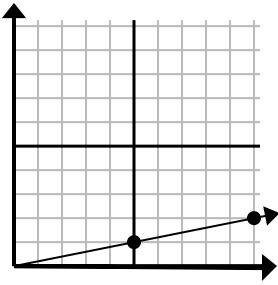
- A. (20 20)
- B. (11 6)
- C. (12 8)
- D. (12 12)

3)



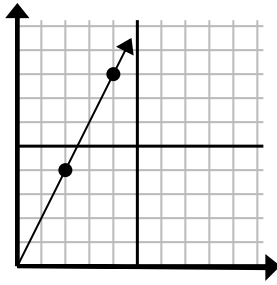
- A. (8 6)
- B. (10 10)
- C. (6 6)
- D. (14 14)

4)



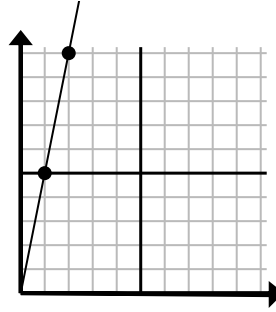
- A. (30 6)
- B. (14 5)
- C. (15 3)
- D. (14 3)

5)



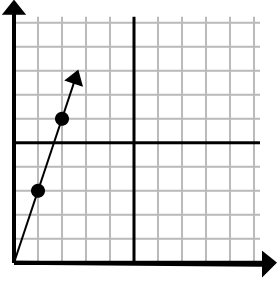
- A. (12 24)
- B. (6 12)
- C. (9 6)
- D. (7 7)

6)



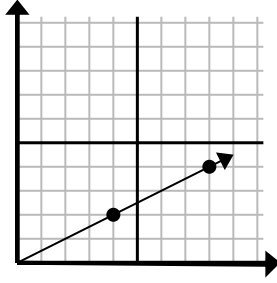
- A. (5 25)
- B. (6 7)
- C. (3 15)
- D. (4 8)

7)



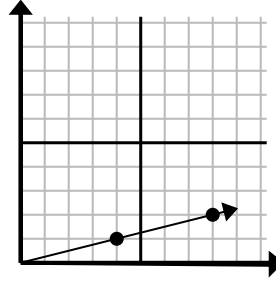
- A. (6 5)
- B. (6 18)
- C. (3 9)
- D. (7 21)

8)



- A. (20 10)
- B. (28 14)
- C. (13 7)
- D. (12 6)

9)



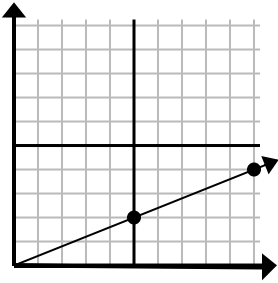
- A. (16 4)
- B. (24 6)
- C. (28 7)
- D. (12 3)

- 1. _____
- 2. _____
- 3. _____
- 4. _____
- 5. _____
- 6. _____
- 7. _____
- 8. _____
- 9. _____



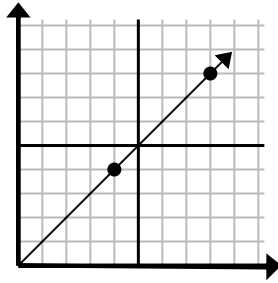
Определите, какой вариант представляет собой точку на линии, если она будет продолжаться.

1)



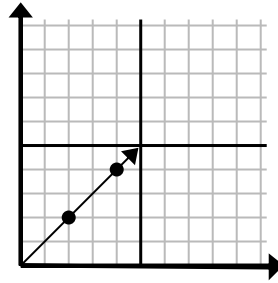
- A. (15 6)
- B. (25 10)
- C. (20 8)
- D. (30 12)

2)



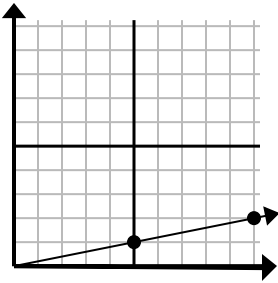
- A. (20 20)
- B. (11 6)
- C. (12 8)
- D. (12 12)

3)



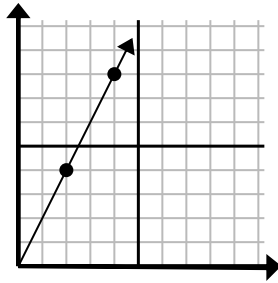
- A. (8 6)
- B. (10 10)
- C. (6 6)
- D. (14 14)

4)



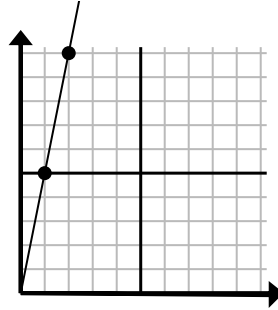
- A. (30 6)
- B. (14 5)
- C. (15 3)
- D. (14 3)

5)



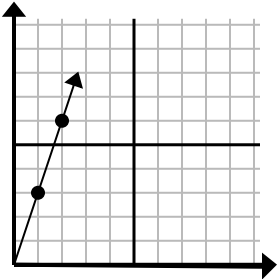
- A. (12 24)
- B. (6 12)
- C. (9 6)
- D. (7 7)

6)



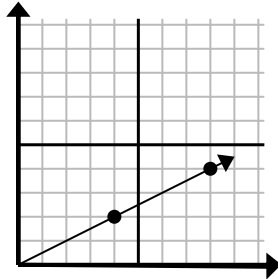
- A. (5 25)
- B. (6 7)
- C. (3 15)
- D. (4 8)

7)



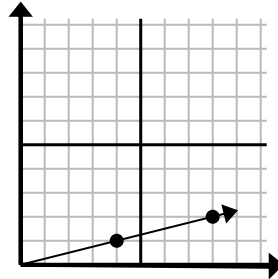
- A. (6 5)
- B. (6 18)
- C. (3 9)
- D. (7 21)

8)



- A. (20 10)
- B. (28 14)
- C. (13 7)
- D. (12 6)

9)



- A. (16 4)
- B. (24 6)
- C. (28 7)
- D. (12 3)

ОТВЕТЫ

1. **A**
2. **D**
3. **C**
4. **C**
5. **B**
6. **C**
7. **C**
8. **D**
9. **D**