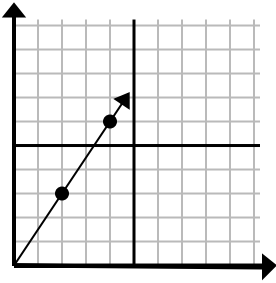




Определите, какой вариант представляет собой точку на линии, если она будет продолжаться.

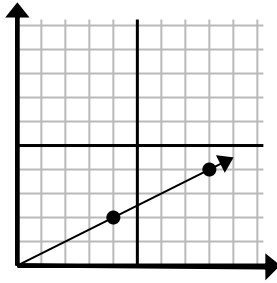
ОТВЕТЫ

1)



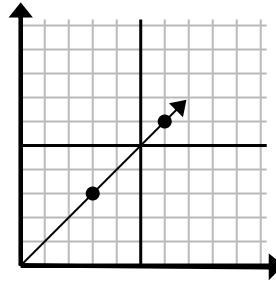
- A. (6 9)
B. (8 6)
C. (5 8)
D. (5 5)

2)



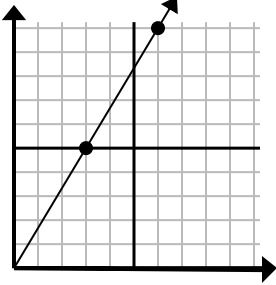
- A. (12 7)
B. (12 6)
C. (24 12)
D. (20 10)

3)



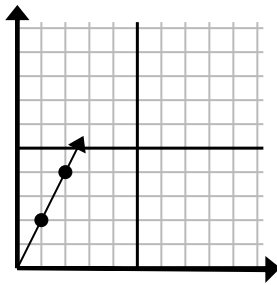
- A. (11 5)
B. (9 9)
C. (18 18)
D. (11 8)

4)



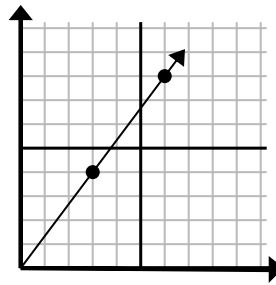
- A. (8 9)
B. (12 20)
C. (9 15)
D. (11 6)

5)



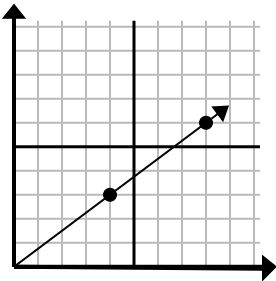
- A. (7 14)
B. (7 7)
C. (3 6)
D. (6 12)

6)



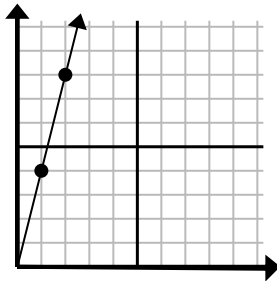
- A. (18 24)
B. (21 28)
C. (9 12)
D. (11 9)

7)



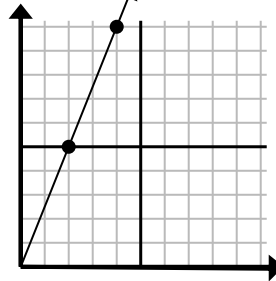
- A. (12 9)
B. (28 21)
C. (24 18)
D. (11 8)

8)



- A. (3 12)
B. (4 6)
C. (4 16)
D. (7 28)

9)



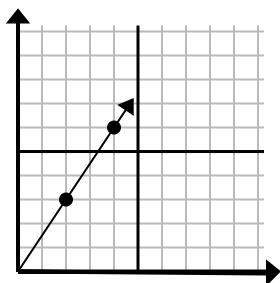
- A. (8 20)
B. (14 35)
C. (5 9)
D. (6 15)

1. _____
2. _____
3. _____
4. _____
5. _____
6. _____
7. _____
8. _____
9. _____



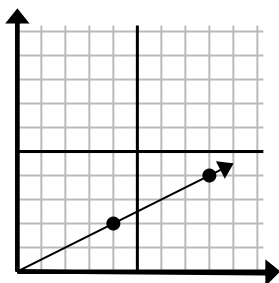
Определите, какой вариант представляет собой точку на линии, если она будет продолжаться.

1)



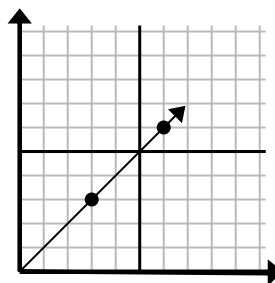
- A. (6 9)
B. (8 6)
C. (5 8)
D. (5 5)

2)



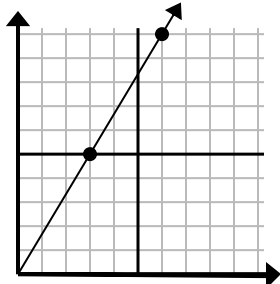
- A. (12 7)
B. (12 6)
C. (24 12)
D. (20 10)

3)



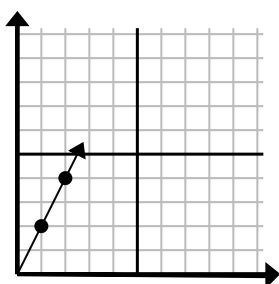
- A. (11 5)
B. (9 9)
C. (18 18)
D. (11 8)

4)



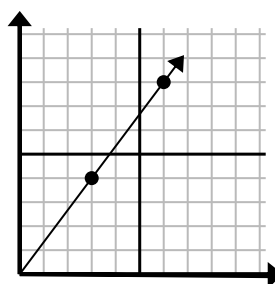
- A. (8 9)
B. (12 20)
C. (9 15)
D. (11 6)

5)



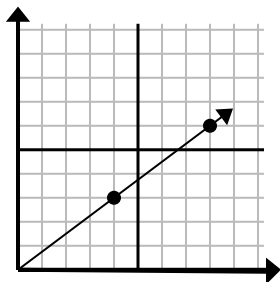
- A. (7 14)
B. (7 7)
C. (3 6)
D. (6 12)

6)



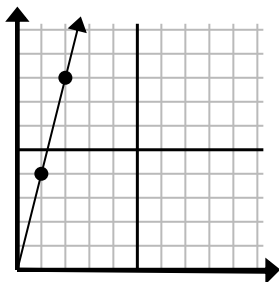
- A. (18 24)
B. (21 28)
C. (9 12)
D. (11 9)

7)



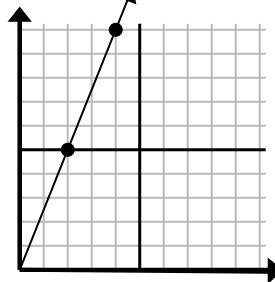
- A. (12 9)
B. (28 21)
C. (24 18)
D. (11 8)

8)



- A. (3 12)
B. (4 6)
C. (4 16)
D. (7 28)

9)



- A. (8 20)
B. (14 35)
C. (5 9)
D. (6 15)

ОТВЕТЫ

1. A
2. B
3. B
4. C
5. C
6. C
7. A
8. A
9. D