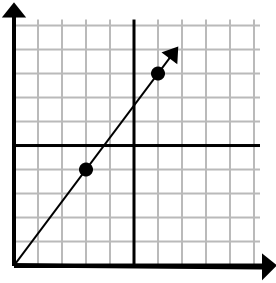




Определите, какой вариант представляет собой точку на линии, если она будет продолжаться.

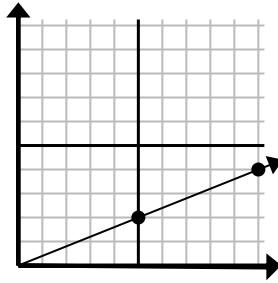
Ответы

1)



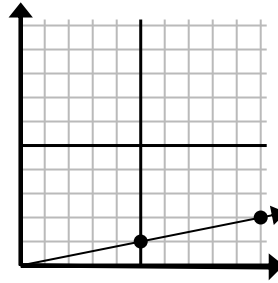
- A. (18 24)
 B. (15 20)
 C. (9 12)
 D. (9 5)

2)



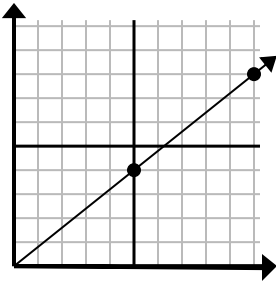
- A. (11 7)
 B. (25 10)
 C. (30 12)
 D. (15 6)

3)



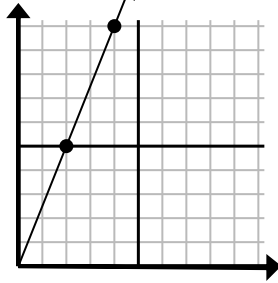
- A. (15 3)
 B. (20 4)
 C. (30 6)
 D. (12 6)

4)



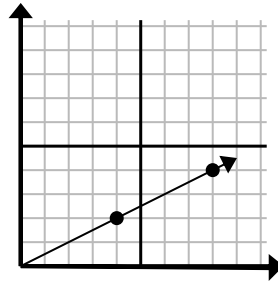
- A. (13 5)
 B. (15 12)
 C. (30 24)
 D. (11 6)

5)



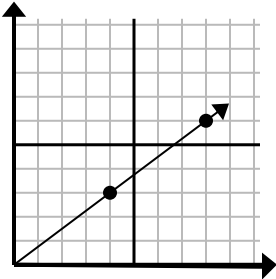
- A. (8 20)
 B. (7 6)
 C. (6 15)
 D. (10 25)

6)



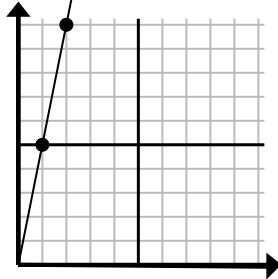
- A. (24 12)
 B. (28 14)
 C. (12 6)
 D. (10 4)

7)



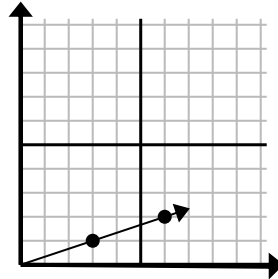
- A. (12 9)
 B. (24 18)
 C. (12 4)
 D. (16 12)

8)



- A. (6 8)
 B. (3 15)
 C. (7 7)
 D. (6 30)

9)

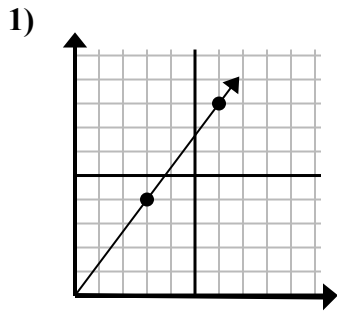


- A. (9 3)
 B. (8 6)
 C. (7 2)
 D. (18 6)

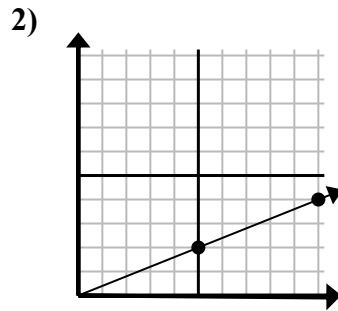
1. _____
 2. _____
 3. _____
 4. _____
 5. _____
 6. _____
 7. _____
 8. _____
 9. _____



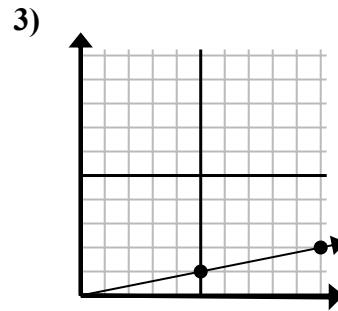
Определите, какой вариант представляет собой точку на линии, если она будет продолжаться.



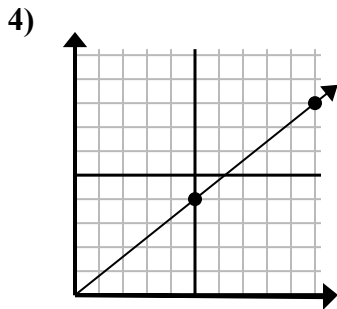
- A. (18 24)
 B. (15 20)
 C. (9 12)
 D. (9 5)



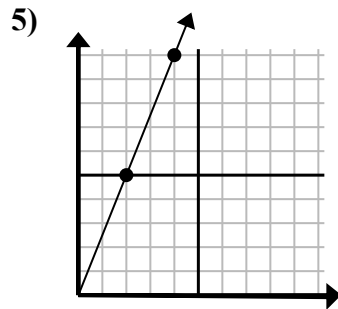
- A. (11 7)
 B. (25 10)
 C. (30 12)
 D. (15 6)



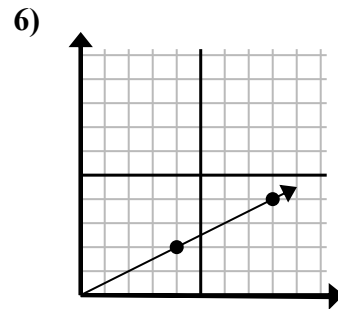
- A. (15 3)
 B. (20 4)
 C. (30 6)
 D. (12 6)



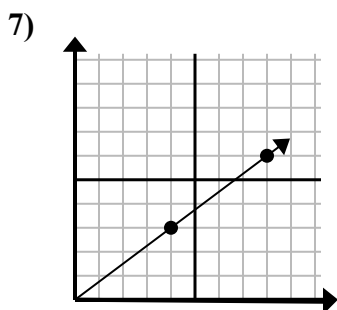
- A. (13 5)
 B. (15 12)
 C. (30 24)
 D. (11 6)



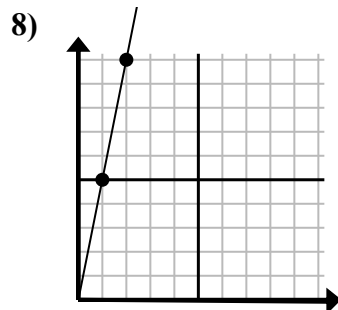
- A. (8 20)
 B. (7 6)
 C. (6 15)
 D. (10 25)



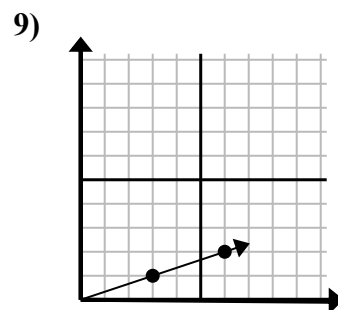
- A. (24 12)
 B. (28 14)
 C. (12 6)
 D. (10 4)



- A. (12 9)
 B. (24 18)
 C. (12 4)
 D. (16 12)



- A. (6 8)
 B. (3 15)
 C. (7 7)
 D. (6 30)



- A. (9 3)
 B. (8 6)
 C. (7 2)
 D. (18 6)

ОТВЕТЫ

1. C
 2. D
 3. A
 4. B
 5. C
 6. C
 7. A
 8. B
 9. A