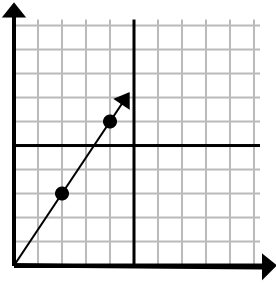




Определите, какой вариант представляет собой точку на линии, если она будет продолжаться.

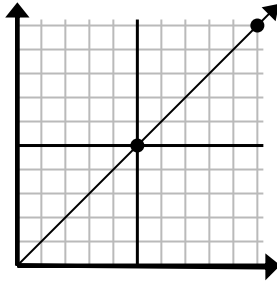
Ответы

1)



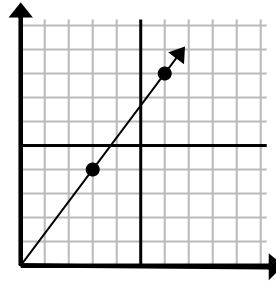
- A. (6 9)  
 B. (5 4)  
 C. (12 18)  
 D. (14 21)

2)



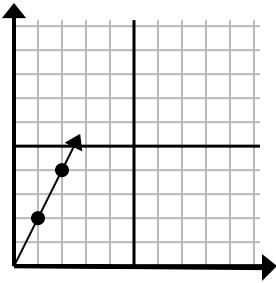
- A. (30 30)  
 B. (15 15)  
 C. (15 7)  
 D. (20 20)

3)



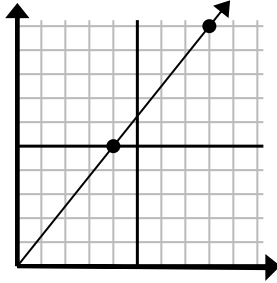
- A. (8 5)  
 B. (12 16)  
 C. (9 12)  
 D. (11 6)

4)



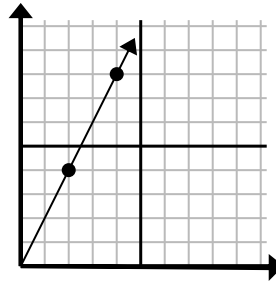
- A. (3 6)  
 B. (4 8)  
 C. (6 12)  
 D. (7 14)

5)



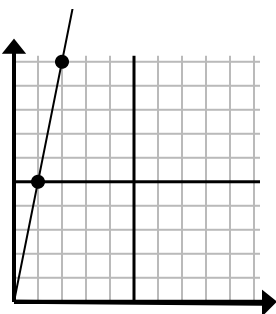
- A. (16 20)  
 B. (13 10)  
 C. (28 35)  
 D. (12 15)

6)



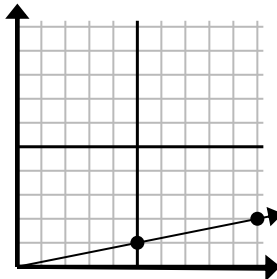
- A. (14 28)  
 B. (7 8)  
 C. (10 20)  
 D. (6 12)

7)



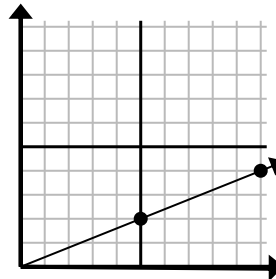
- A. (5 8)  
 B. (7 35)  
 C. (3 15)  
 D. (6 30)

8)



- A. (25 5)  
 B. (15 3)  
 C. (35 7)  
 D. (11 4)

9)



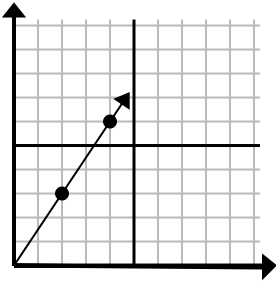
- A. (20 8)  
 B. (14 6)  
 C. (15 6)  
 D. (25 10)

1. \_\_\_\_\_  
 2. \_\_\_\_\_  
 3. \_\_\_\_\_  
 4. \_\_\_\_\_  
 5. \_\_\_\_\_  
 6. \_\_\_\_\_  
 7. \_\_\_\_\_  
 8. \_\_\_\_\_  
 9. \_\_\_\_\_



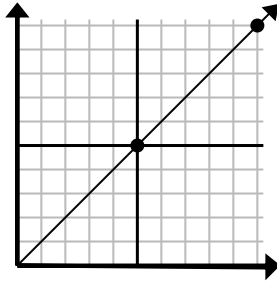
Определите, какой вариант представляет собой точку на линии, если она будет продолжаться.

1)



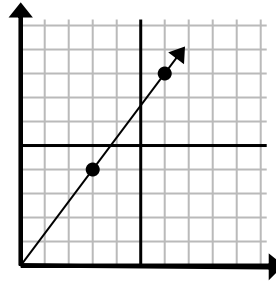
- A. (6 9)  
 B. (5 4)  
 C. (12 18)  
 D. (14 21)

2)



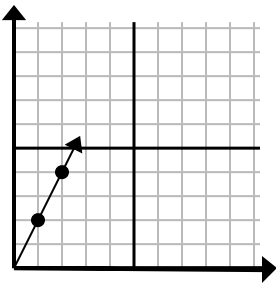
- A. (30 30)  
 B. (15 15)  
 C. (15 7)  
 D. (20 20)

3)



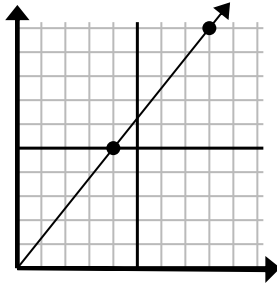
- A. (8 5)  
 B. (12 16)  
 C. (9 12)  
 D. (11 6)

4)



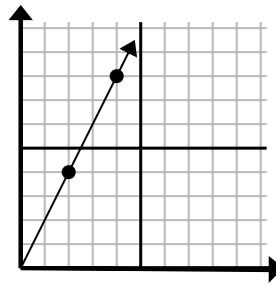
- A. (3 6)  
 B. (4 8)  
 C. (6 12)  
 D. (7 14)

5)



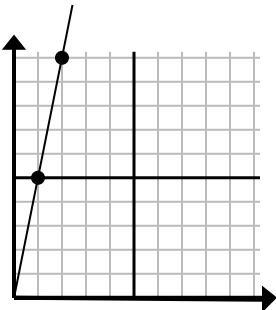
- A. (16 20)  
 B. (13 10)  
 C. (28 35)  
 D. (12 15)

6)



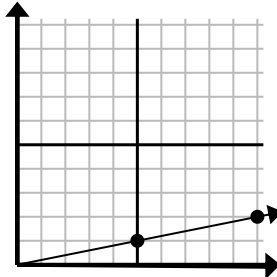
- A. (14 28)  
 B. (7 8)  
 C. (10 20)  
 D. (6 12)

7)



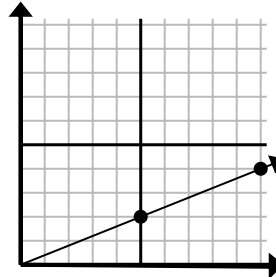
- A. (5 8)  
 B. (7 35)  
 C. (3 15)  
 D. (6 30)

8)



- A. (25 5)  
 B. (15 3)  
 C. (35 7)  
 D. (11 4)

9)



- A. (20 8)  
 B. (14 6)  
 C. (15 6)  
 D. (25 10)

ОТВЕТЫ

1.     A      
 2.     B      
 3.     C      
 4.     A      
 5.     D      
 6.     D      
 7.     C      
 8.     B      
 9.     C