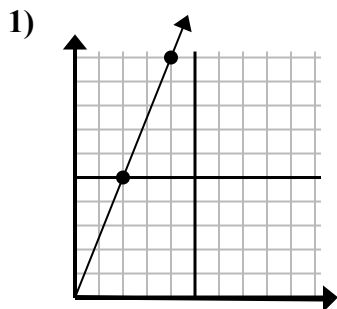
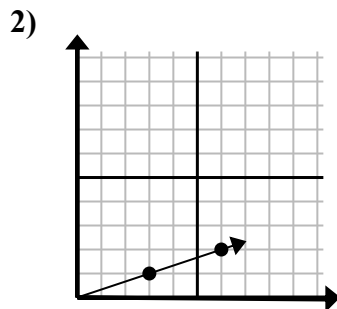




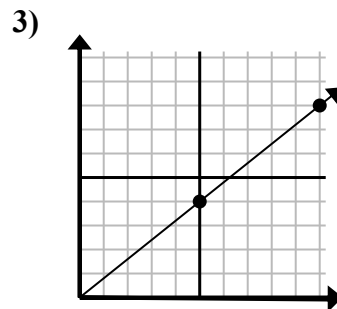
Определите, какой вариант представляет собой точку на линии, если она будет продолжаться.

Ответы

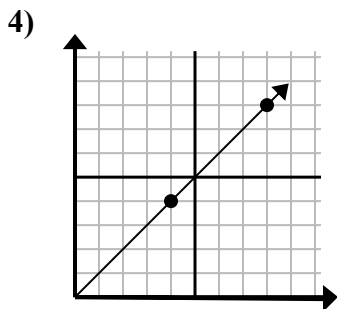
- A. (12 30)
B. (8 20)
C. (8 10)
D. (6 15)



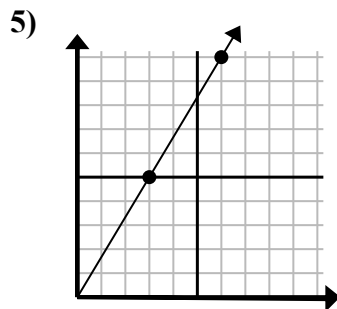
- A. (9 3)
B. (10 6)
C. (15 5)
D. (18 6)



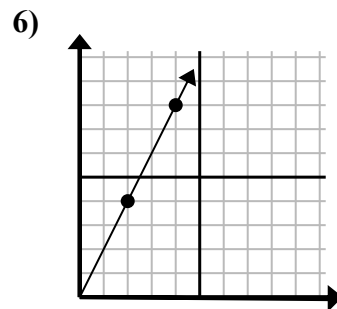
- A. (11 9)
B. (15 12)
C. (20 16)
D. (25 20)



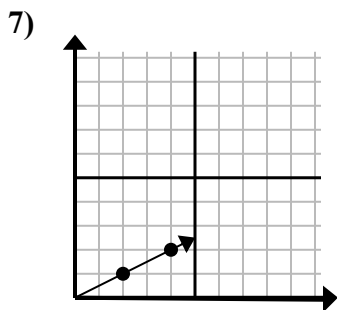
- A. (16 16)
B. (12 12)
C. (13 5)
D. (28 28)



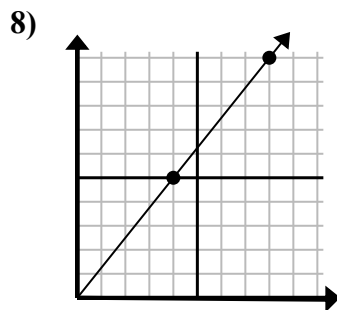
- A. (8 10)
B. (15 25)
C. (7 6)
D. (9 15)



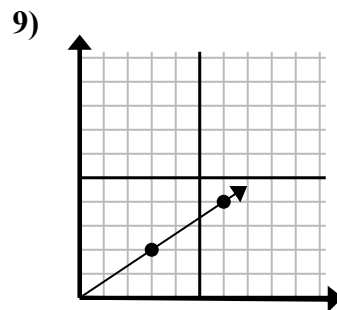
- A. (6 5)
B. (6 12)
C. (12 24)
D. (8 16)



- A. (9 2)
B. (6 3)
C. (14 7)
D. (7 4)



- A. (9 10)
B. (12 15)
C. (20 25)
D. (24 30)

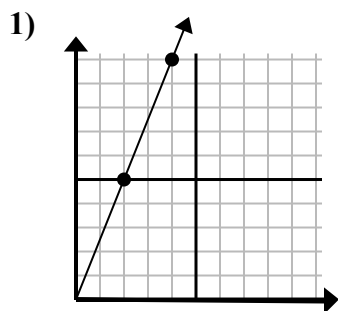


- A. (18 12)
B. (8 7)
C. (11 5)
D. (9 6)

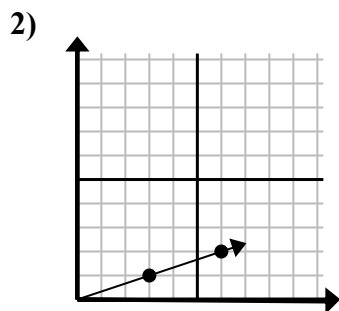
1. _____
2. _____
3. _____
4. _____
5. _____
6. _____
7. _____
8. _____
9. _____



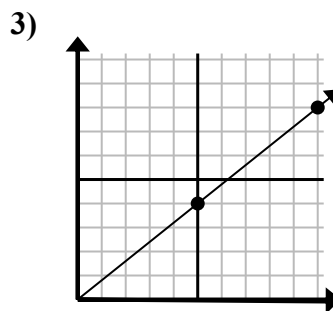
Определите, какой вариант представляет собой точку на линии, если она будет продолжаться.



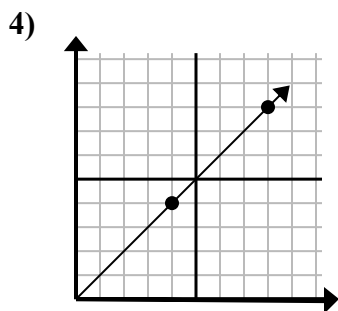
- A. (12 30)
B. (8 20)
C. (8 10)
D. (6 15)



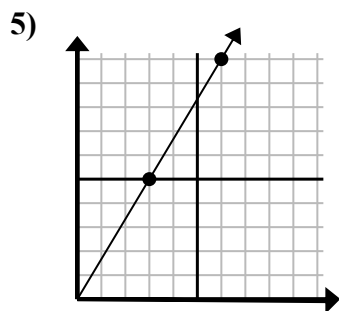
- A. (9 3)
B. (10 6)
C. (15 5)
D. (18 6)



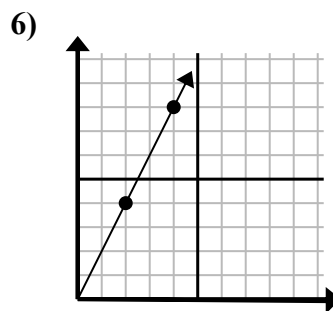
- A. (11 9)
B. (15 12)
C. (20 16)
D. (25 20)



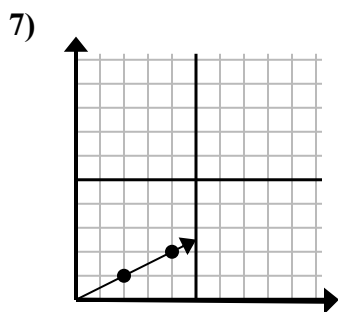
- A. (16 16)
B. (12 12)
C. (13 5)
D. (28 28)



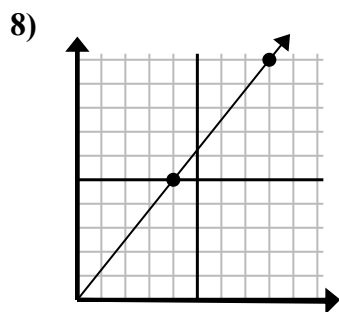
- A. (8 10)
B. (15 25)
C. (7 6)
D. (9 15)



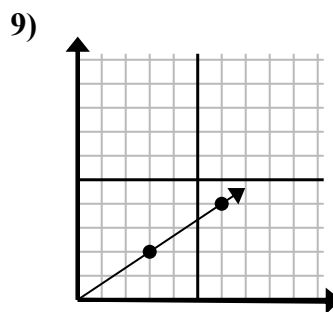
- A. (6 5)
B. (6 12)
C. (12 24)
D. (8 16)



- A. (9 2)
B. (6 3)
C. (14 7)
D. (7 4)



- A. (9 10)
B. (12 15)
C. (20 25)
D. (24 30)



- A. (18 12)
B. (8 7)
C. (11 5)
D. (9 6)

Ответы

1. D
2. A
3. B
4. B
5. D
6. B
7. B
8. B
9. D