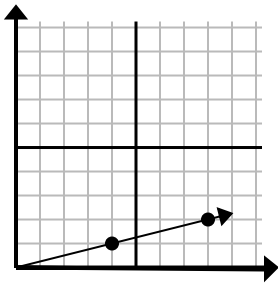




Определите, какой вариант представляет собой точку на линии, если она будет продолжаться.

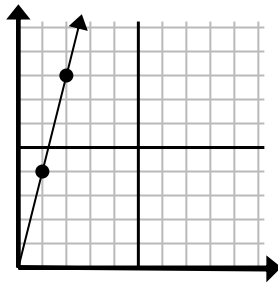
Ответы

1)



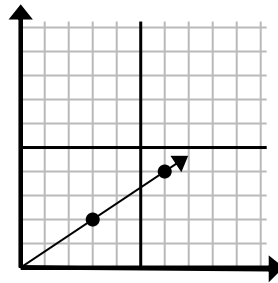
- A. (10 4)
 B. (13 5)
 C. (12 3)
 D. (9 3)

2)



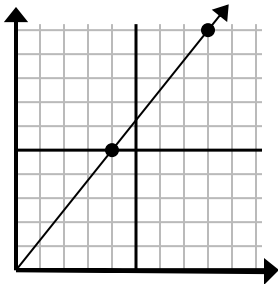
- A. (3 9)
 B. (7 8)
 C. (5 5)
 D. (3 12)

3)



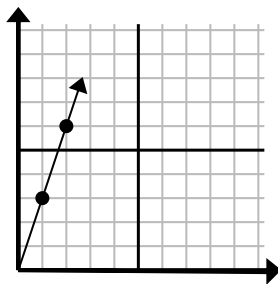
- A. (12 8)
 B. (9 6)
 C. (18 12)
 D. (11 3)

4)



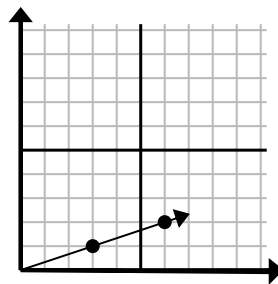
- A. (9 9)
 B. (12 15)
 C. (12 7)
 D. (28 35)

5)



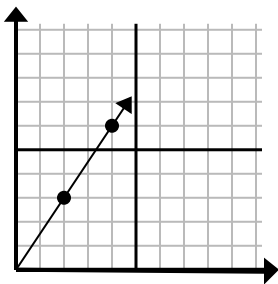
- A. (3 9)
 B. (4 12)
 C. (3 5)
 D. (7 4)

6)



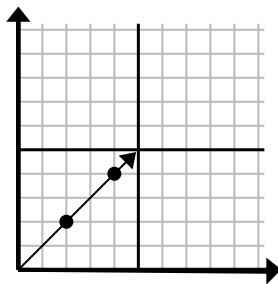
- A. (9 3)
 B. (11 4)
 C. (11 5)
 D. (15 5)

7)



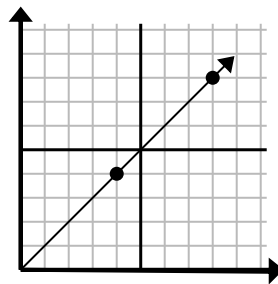
- A. (8 7)
 B. (6 4)
 C. (6 9)
 D. (12 18)

8)



- A. (6 6)
 B. (8 8)
 C. (10 10)
 D. (14 14)

9)

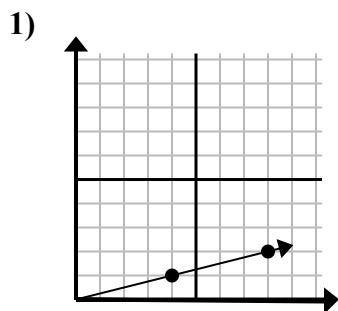


- A. (24 24)
 B. (12 12)
 C. (28 28)
 D. (20 20)

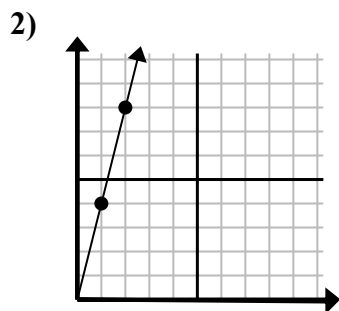
1. _____
 2. _____
 3. _____
 4. _____
 5. _____
 6. _____
 7. _____
 8. _____
 9. _____



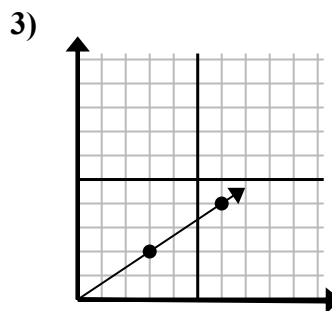
Определите, какой вариант представляет собой точку на линии, если она будет продолжаться.



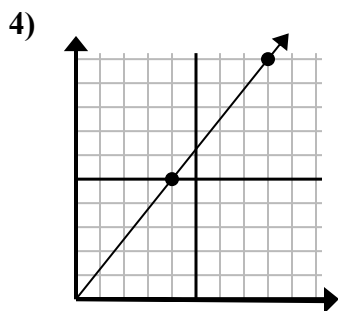
- A. (10 4)
B. (13 5)
C. (12 3)
D. (9 3)



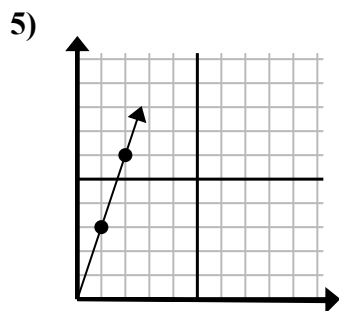
- A. (3 9)
B. (7 8)
C. (5 5)
D. (3 12)



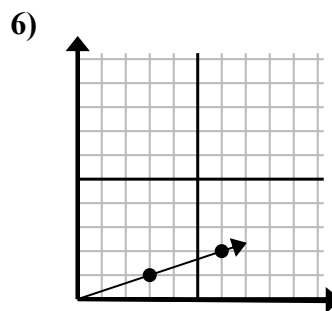
- A. (12 8)
B. (9 6)
C. (18 12)
D. (11 3)



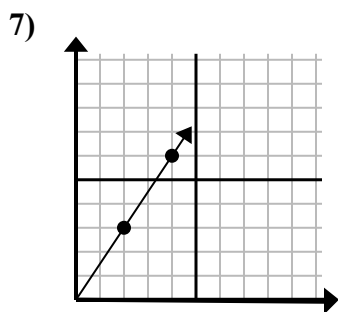
- A. (9 9)
B. (12 15)
C. (12 7)
D. (28 35)



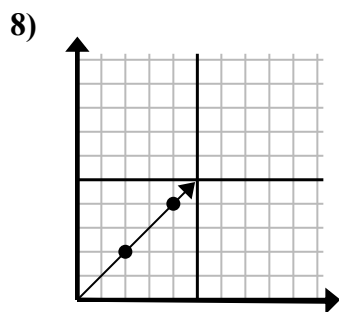
- A. (3 9)
B. (4 12)
C. (3 5)
D. (7 4)



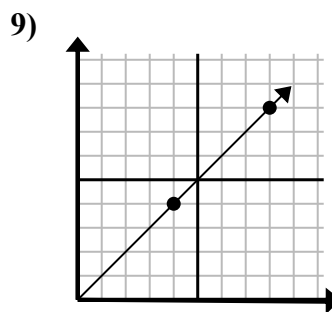
- A. (9 3)
B. (11 4)
C. (11 5)
D. (15 5)



- A. (8 7)
B. (6 4)
C. (6 9)
D. (12 18)



- A. (6 6)
B. (8 8)
C. (10 10)
D. (14 14)



- A. (24 24)
B. (12 12)
C. (28 28)
D. (20 20)

ОТВЕТЫ

1. C
2. D
3. B
4. B
5. A
6. A
7. C
8. A
9. B