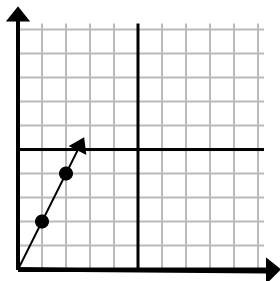




Определите, какой вариант представляет собой точку на линии, если она будет продолжаться.

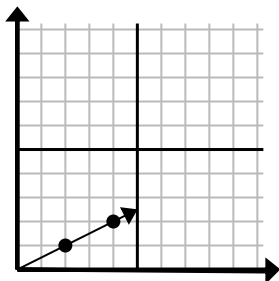
Ответы

1)



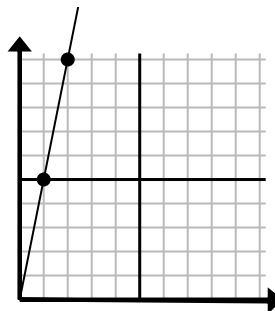
- A. (3 6)
B. (7 3)
C. (6 4)
D. (7 14)

2)



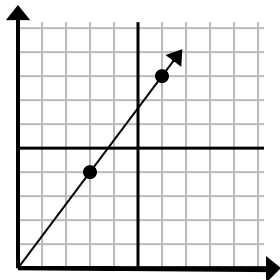
- A. (5 6)
B. (5 4)
C. (6 3)
D. (9 6)

3)



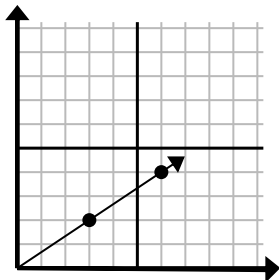
- A. (7 10)
B. (3 15)
C. (6 30)
D. (5 8)

4)



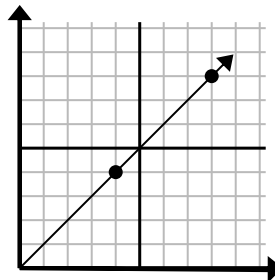
- A. (12 16)
B. (10 6)
C. (21 28)
D. (9 12)

5)



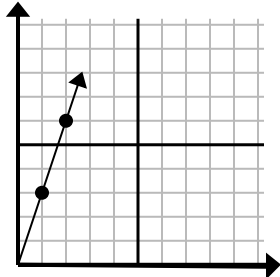
- A. (9 4)
B. (9 6)
C. (15 10)
D. (12 8)

6)



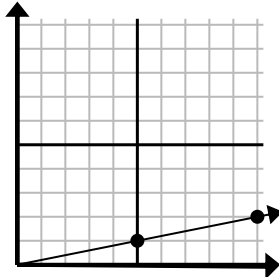
- A. (16 16)
B. (12 12)
C. (9 9)
D. (24 24)

7)



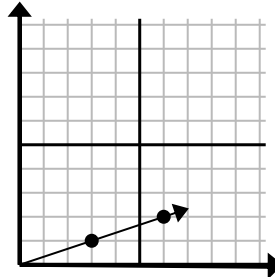
- A. (5 8)
B. (5 15)
C. (6 18)
D. (3 9)

8)



- A. (11 5)
B. (15 2)
C. (15 3)
D. (14 2)

9)



- A. (10 6)
B. (9 3)
C. (8 6)
D. (9 2)

1. _____

2. _____

3. _____

4. _____

5. _____

6. _____

7. _____

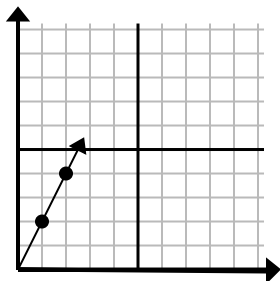
8. _____

9. _____



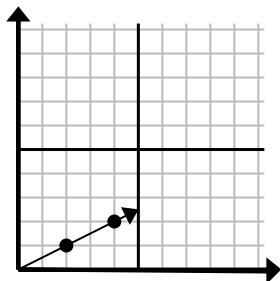
Определите, какой вариант представляет собой точку на линии, если она будет продолжаться.

1)



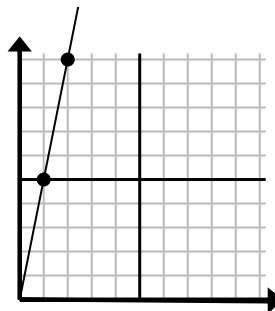
- A. (3 6)
B. (7 3)
C. (6 4)
D. (7 14)

2)



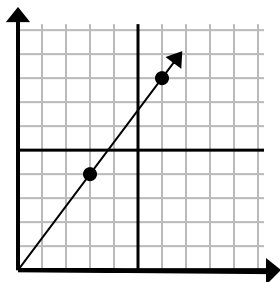
- A. (5 6)
B. (5 4)
C. (6 3)
D. (9 6)

3)



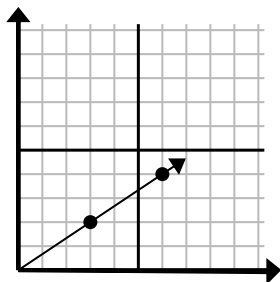
- A. (7 10)
B. (3 15)
C. (6 30)
D. (5 8)

4)



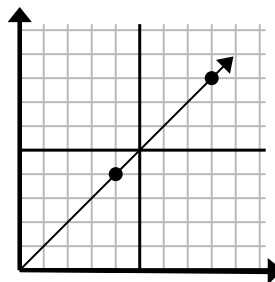
- A. (12 16)
B. (10 6)
C. (21 28)
D. (9 12)

5)



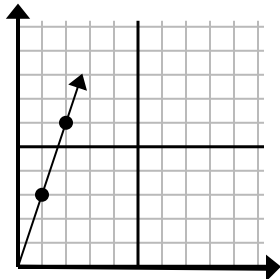
- A. (9 4)
B. (9 6)
C. (15 10)
D. (12 8)

6)



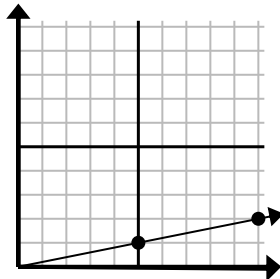
- A. (16 16)
B. (12 12)
C. (9 9)
D. (24 24)

7)



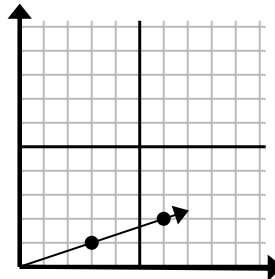
- A. (5 8)
B. (5 15)
C. (6 18)
D. (3 9)

8)



- A. (11 5)
B. (15 2)
C. (15 3)
D. (14 2)

9)



- A. (10 6)
B. (9 3)
C. (8 6)
D. (9 2)

ОТВЕТЫ

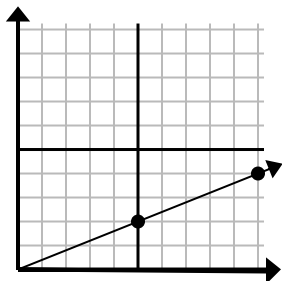
1. **A**
2. **C**
3. **B**
4. **D**
5. **B**
6. **B**
7. **D**
8. **C**
9. **B**



Определите, какой вариант представляет собой точку на линии, если она будет продолжаться.

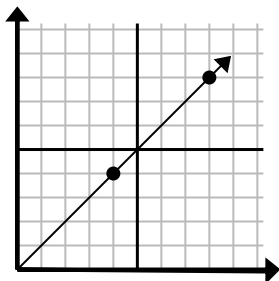
Ответы

1)



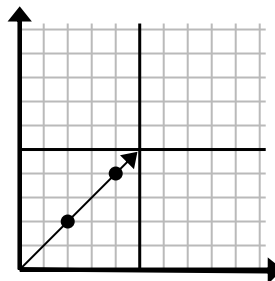
- A. (15 6)
 B. (25 10)
 C. (20 8)
 D. (30 12)

2)



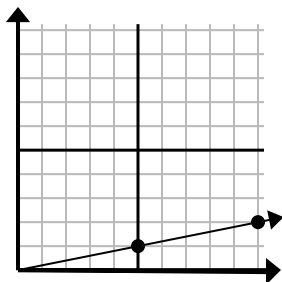
- A. (20 20)
 B. (11 6)
 C. (12 8)
 D. (12 12)

3)



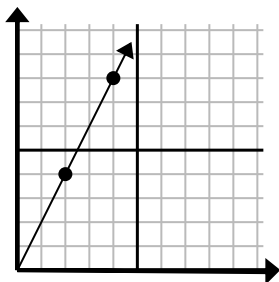
- A. (8 6)
 B. (10 10)
 C. (6 6)
 D. (14 14)

4)



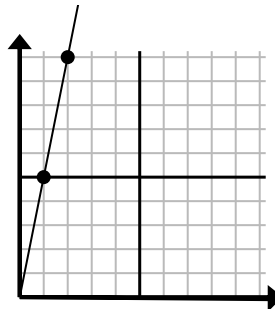
- A. (30 6)
 B. (14 5)
 C. (15 3)
 D. (14 3)

5)



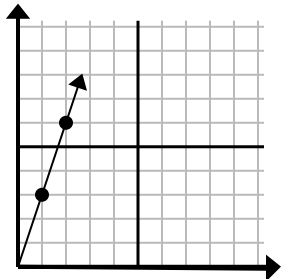
- A. (12 24)
 B. (6 12)
 C. (9 6)
 D. (7 7)

6)



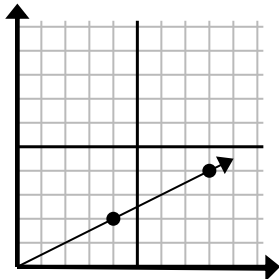
- A. (5 25)
 B. (6 7)
 C. (3 15)
 D. (4 8)

7)



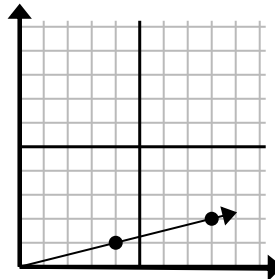
- A. (6 5)
 B. (6 18)
 C. (3 9)
 D. (7 21)

8)



- A. (20 10)
 B. (28 14)
 C. (13 7)
 D. (12 6)

9)



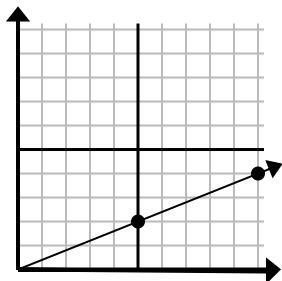
- A. (16 4)
 B. (24 6)
 C. (28 7)
 D. (12 3)

1. _____
 2. _____
 3. _____
 4. _____
 5. _____
 6. _____
 7. _____
 8. _____
 9. _____



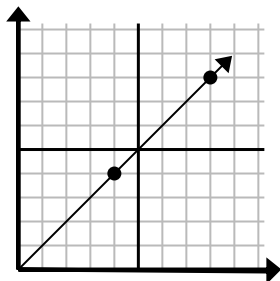
Определите, какой вариант представляет собой точку на линии, если она будет продолжаться.

1)



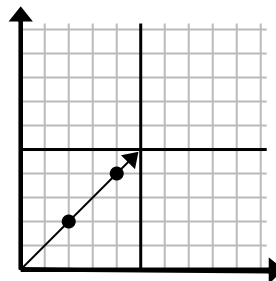
- A. (15 6)
 B. (25 10)
 C. (20 8)
 D. (30 12)

2)



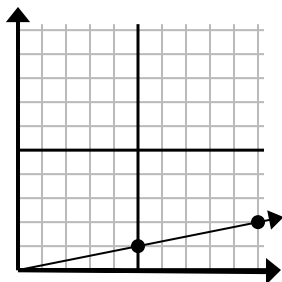
- A. (20 20)
 B. (11 6)
 C. (12 8)
 D. (12 12)

3)



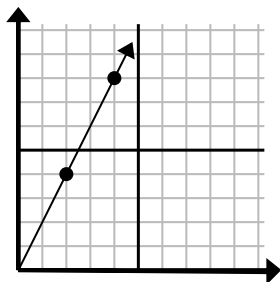
- A. (8 6)
 B. (10 10)
 C. (6 6)
 D. (14 14)

4)



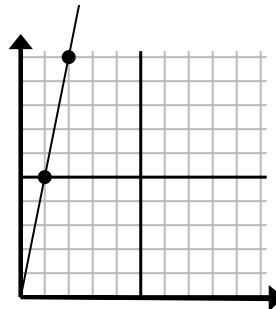
- A. (30 6)
 B. (14 5)
 C. (15 3)
 D. (14 3)

5)



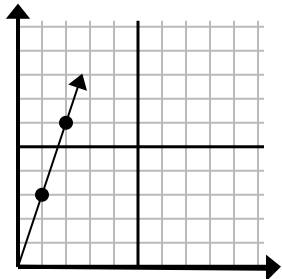
- A. (12 24)
 B. (6 12)
 C. (9 6)
 D. (7 7)

6)



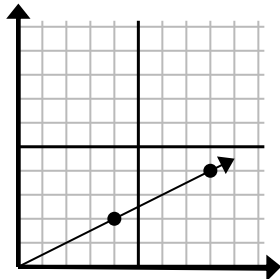
- A. (5 25)
 B. (6 7)
 C. (3 15)
 D. (4 8)

7)



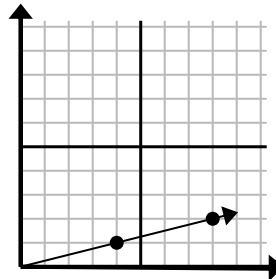
- A. (6 5)
 B. (6 18)
 C. (3 9)
 D. (7 21)

8)



- A. (20 10)
 B. (28 14)
 C. (13 7)
 D. (12 6)

9)



- A. (16 4)
 B. (24 6)
 C. (28 7)
 D. (12 3)

ОТВЕТЫ

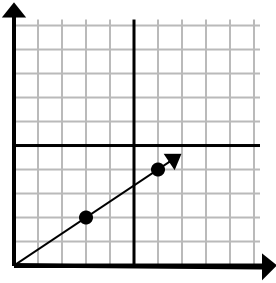
1. **A**
 2. **D**
 3. **C**
 4. **C**
 5. **B**
 6. **C**
 7. **C**
 8. **D**
 9. **D**



Определите, какой вариант представляет собой точку на линии, если она будет продолжаться.

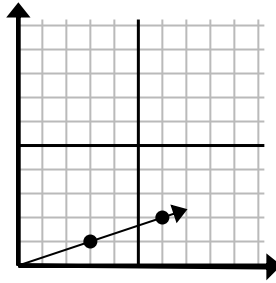
Ответы

1)



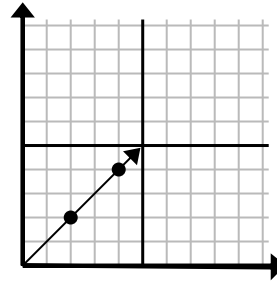
- A. (21 14)
 B. (12 8)
 C. (9 6)
 D. (15 10)

2)



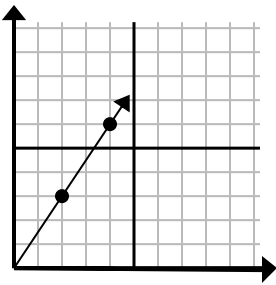
- A. (18 6)
 B. (12 4)
 C. (9 3)
 D. (10 3)

3)



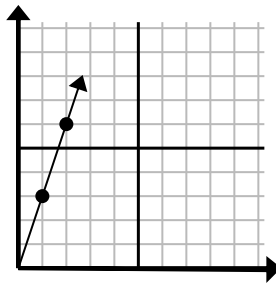
- A. (6 6)
 B. (12 12)
 C. (7 7)
 D. (8 4)

4)



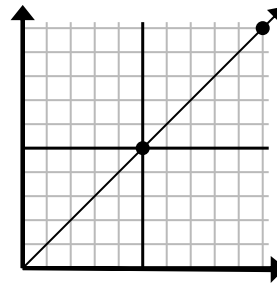
- A. (6 9)
 B. (14 21)
 C. (7 5)
 D. (8 7)

5)



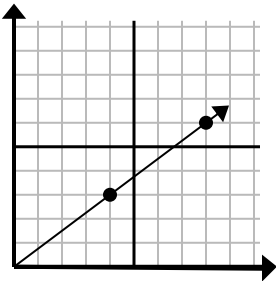
- A. (5 4)
 B. (4 8)
 C. (7 21)
 D. (3 9)

6)



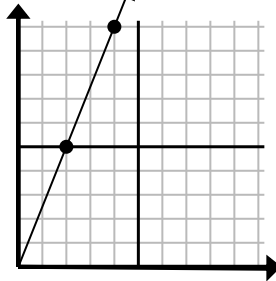
- A. (15 6)
 B. (30 30)
 C. (15 15)
 D. (35 35)

7)



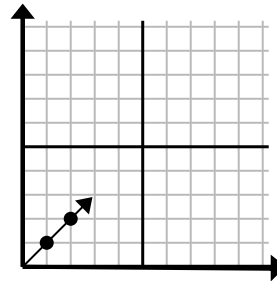
- A. (10 5)
 B. (10 6)
 C. (12 9)
 D. (28 21)

8)



- A. (12 30)
 B. (8 20)
 C. (6 15)
 D. (8 6)

9)



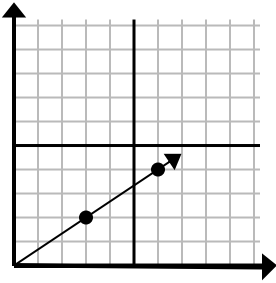
- A. (3 3)
 B. (3 2)
 C. (6 6)
 D. (6 3)

1. _____
 2. _____
 3. _____
 4. _____
 5. _____
 6. _____
 7. _____
 8. _____
 9. _____



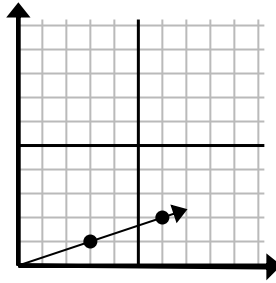
Определите, какой вариант представляет собой точку на линии, если она будет продолжаться.

1)



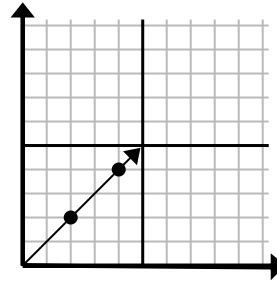
- A. (21 14)
 B. (12 8)
 C. (9 6)
 D. (15 10)

2)



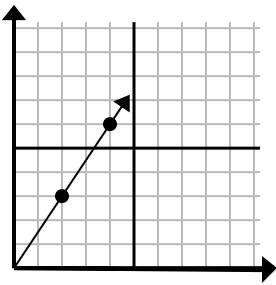
- A. (18 6)
 B. (12 4)
 C. (9 3)
 D. (10 3)

3)



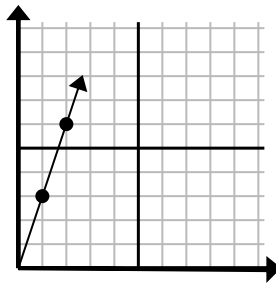
- A. (6 6)
 B. (12 12)
 C. (7 7)
 D. (8 4)

4)



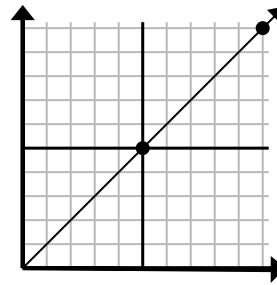
- A. (6 9)
 B. (14 21)
 C. (7 5)
 D. (8 7)

5)



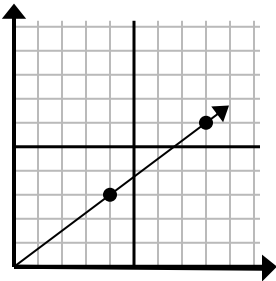
- A. (5 4)
 B. (4 8)
 C. (7 21)
 D. (3 9)

6)



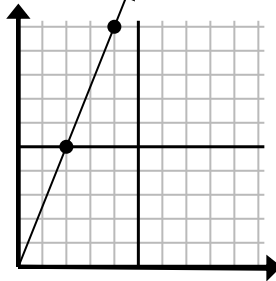
- A. (15 6)
 B. (30 30)
 C. (15 15)
 D. (35 35)

7)



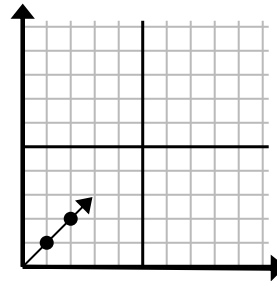
- A. (10 5)
 B. (10 6)
 C. (12 9)
 D. (28 21)

8)



- A. (12 30)
 B. (8 20)
 C. (6 15)
 D. (8 6)

9)



- A. (3 3)
 B. (3 2)
 C. (6 6)
 D. (6 3)

ОТВЕТЫ

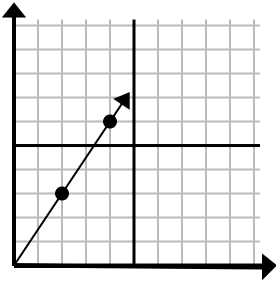
1. C
 2. C
 3. A
 4. A
 5. D
 6. C
 7. C
 8. C
 9. A



Определите, какой вариант представляет собой точку на линии, если она будет продолжаться.

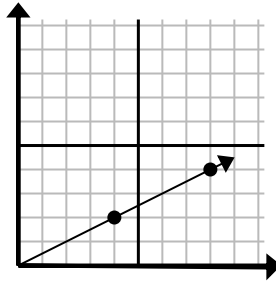
ОТВЕТЫ

1)



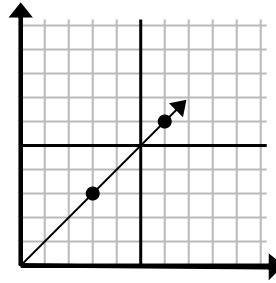
- A. (6 9)
B. (8 6)
C. (5 8)
D. (5 5)

2)



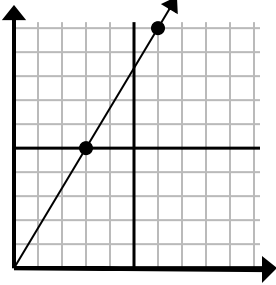
- A. (12 7)
B. (12 6)
C. (24 12)
D. (20 10)

3)



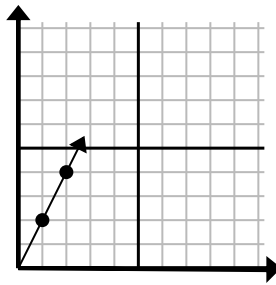
- A. (11 5)
B. (9 9)
C. (18 18)
D. (11 8)

4)



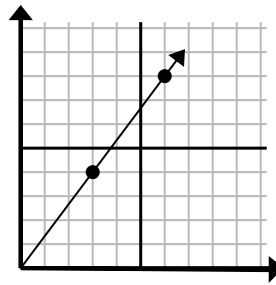
- A. (8 9)
B. (12 20)
C. (9 15)
D. (11 6)

5)



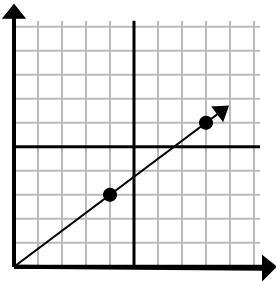
- A. (7 14)
B. (7 7)
C. (3 6)
D. (6 12)

6)



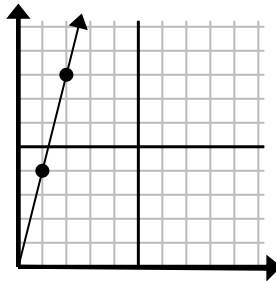
- A. (18 24)
B. (21 28)
C. (9 12)
D. (11 9)

7)



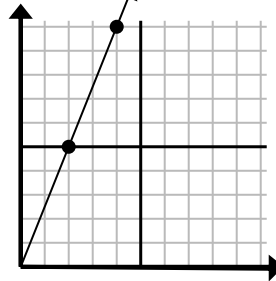
- A. (12 9)
B. (28 21)
C. (24 18)
D. (11 8)

8)



- A. (3 12)
B. (4 6)
C. (4 16)
D. (7 28)

9)



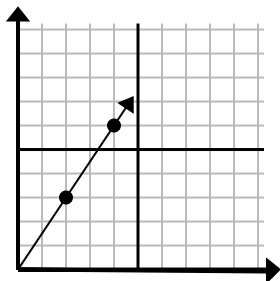
- A. (8 20)
B. (14 35)
C. (5 9)
D. (6 15)

1. _____
2. _____
3. _____
4. _____
5. _____
6. _____
7. _____
8. _____
9. _____



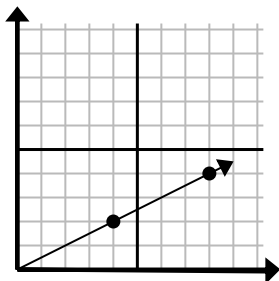
Определите, какой вариант представляет собой точку на линии, если она будет продолжаться.

1)



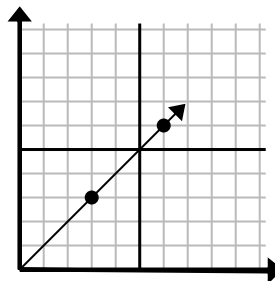
- A. (6 9)
B. (8 6)
C. (5 8)
D. (5 5)

2)



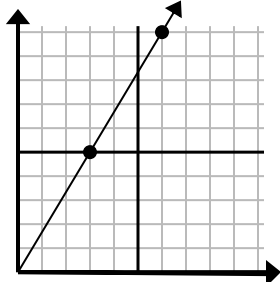
- A. (12 7)
B. (12 6)
C. (24 12)
D. (20 10)

3)



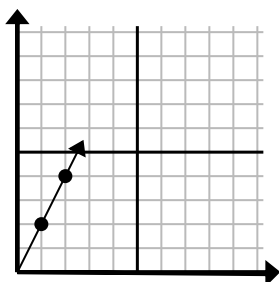
- A. (11 5)
B. (9 9)
C. (18 18)
D. (11 8)

4)



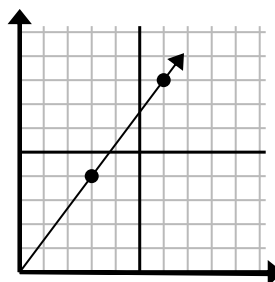
- A. (8 9)
B. (12 20)
C. (9 15)
D. (11 6)

5)



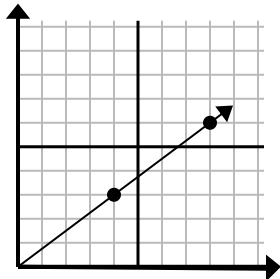
- A. (7 14)
B. (7 7)
C. (3 6)
D. (6 12)

6)



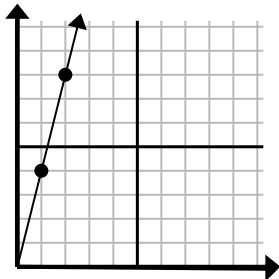
- A. (18 24)
B. (21 28)
C. (9 12)
D. (11 9)

7)



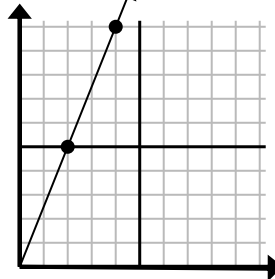
- A. (12 9)
B. (28 21)
C. (24 18)
D. (11 8)

8)



- A. (3 12)
B. (4 6)
C. (4 16)
D. (7 28)

9)



- A. (8 20)
B. (14 35)
C. (5 9)
D. (6 15)

ОТВЕТЫ

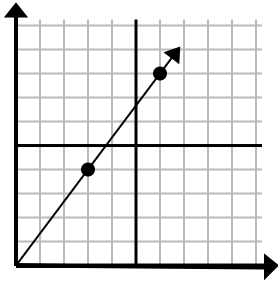
1. **A**
2. **B**
3. **B**
4. **C**
5. **C**
6. **C**
7. **A**
8. **A**
9. **D**



Определите, какой вариант представляет собой точку на линии, если она будет продолжаться.

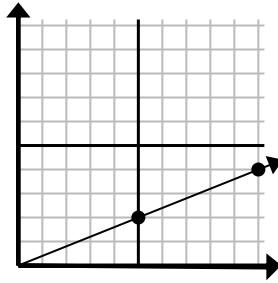
Ответы

1)



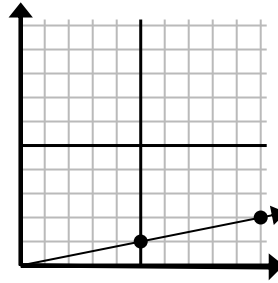
- A. (18 24)
 B. (15 20)
 C. (9 12)
 D. (9 5)

2)



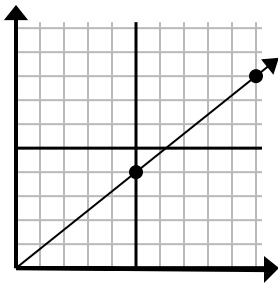
- A. (11 7)
 B. (25 10)
 C. (30 12)
 D. (15 6)

3)



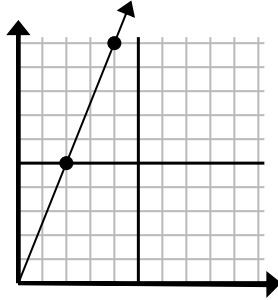
- A. (15 3)
 B. (20 4)
 C. (30 6)
 D. (12 6)

4)



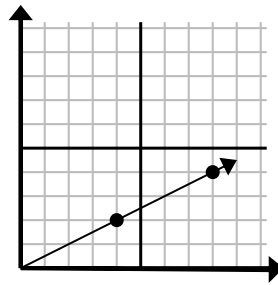
- A. (13 5)
 B. (15 12)
 C. (30 24)
 D. (11 6)

5)



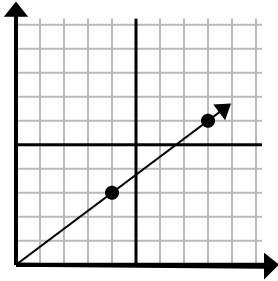
- A. (8 20)
 B. (7 6)
 C. (6 15)
 D. (10 25)

6)



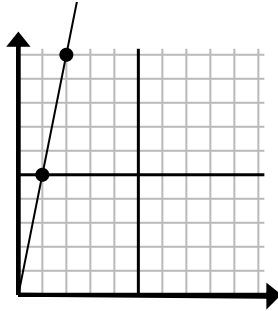
- A. (24 12)
 B. (28 14)
 C. (12 6)
 D. (10 4)

7)



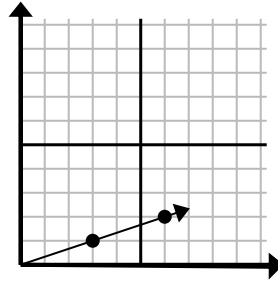
- A. (12 9)
 B. (24 18)
 C. (12 4)
 D. (16 12)

8)



- A. (6 8)
 B. (3 15)
 C. (7 7)
 D. (6 30)

9)

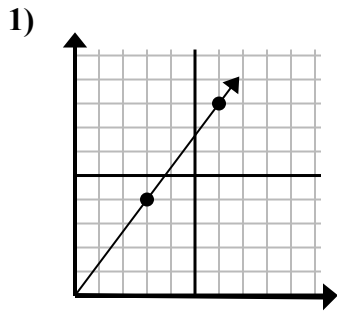


- A. (9 3)
 B. (8 6)
 C. (7 2)
 D. (18 6)

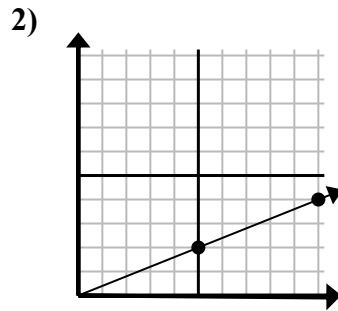
1. _____
 2. _____
 3. _____
 4. _____
 5. _____
 6. _____
 7. _____
 8. _____
 9. _____



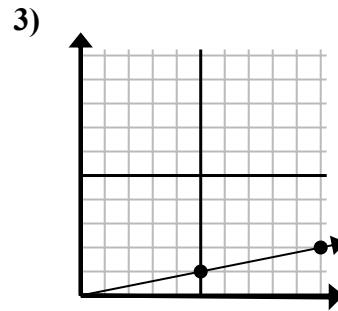
Определите, какой вариант представляет собой точку на линии, если она будет продолжаться.



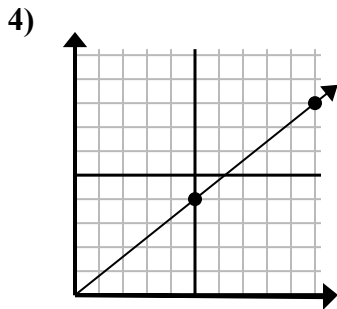
- A. (18 24)
B. (15 20)
C. (9 12)
D. (9 5)



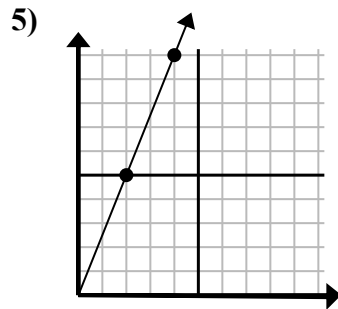
- A. (11 7)
B. (25 10)
C. (30 12)
D. (15 6)



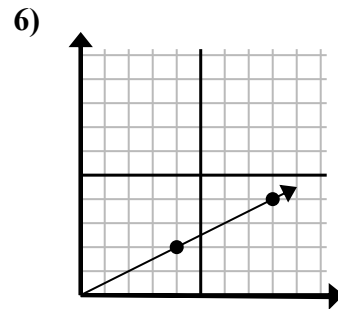
- A. (15 3)
B. (20 4)
C. (30 6)
D. (12 6)



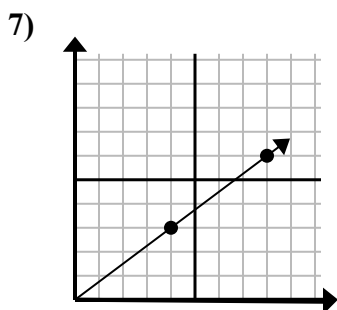
- A. (13 5)
B. (15 12)
C. (30 24)
D. (11 6)



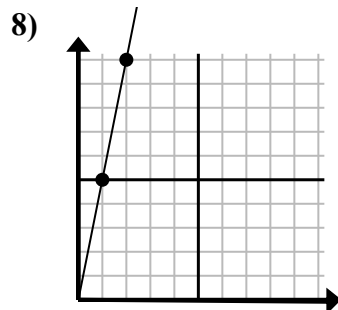
- A. (8 20)
B. (7 6)
C. (6 15)
D. (10 25)



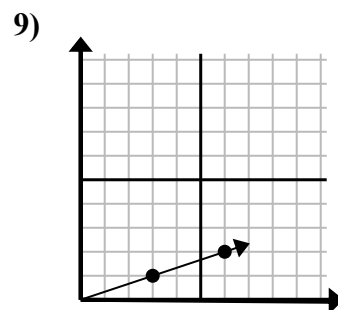
- A. (24 12)
B. (28 14)
C. (12 6)
D. (10 4)



- A. (12 9)
B. (24 18)
C. (12 4)
D. (16 12)



- A. (6 8)
B. (3 15)
C. (7 7)
D. (6 30)



- A. (9 3)
B. (8 6)
C. (7 2)
D. (18 6)

ОТВЕТЫ

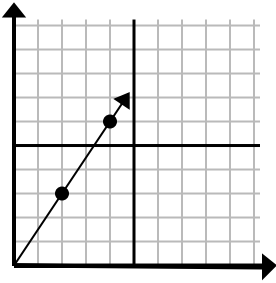
1. C
2. D
3. A
4. B
5. C
6. C
7. A
8. B
9. A



Определите, какой вариант представляет собой точку на линии, если она будет продолжаться.

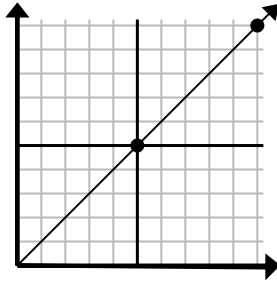
Ответы

1)



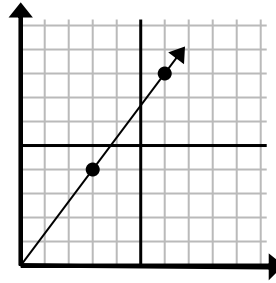
- A. (6 9)
 B. (5 4)
 C. (12 18)
 D. (14 21)

2)



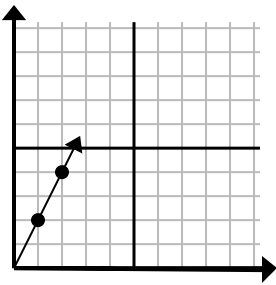
- A. (30 30)
 B. (15 15)
 C. (15 7)
 D. (20 20)

3)



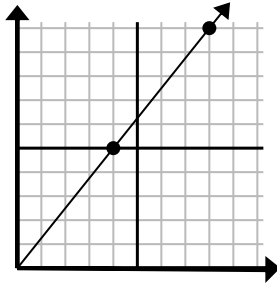
- A. (8 5)
 B. (12 16)
 C. (9 12)
 D. (11 6)

4)



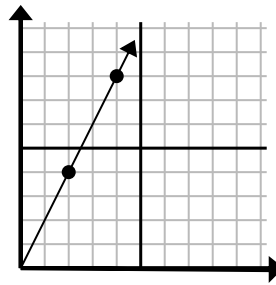
- A. (3 6)
 B. (4 8)
 C. (6 12)
 D. (7 14)

5)



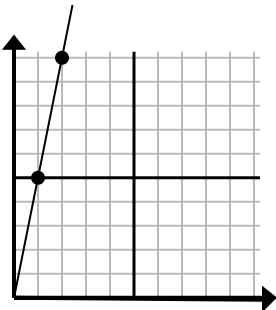
- A. (16 20)
 B. (13 10)
 C. (28 35)
 D. (12 15)

6)



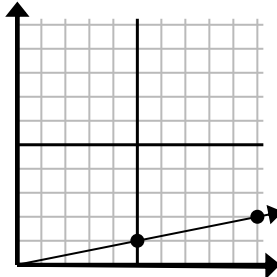
- A. (14 28)
 B. (7 8)
 C. (10 20)
 D. (6 12)

7)



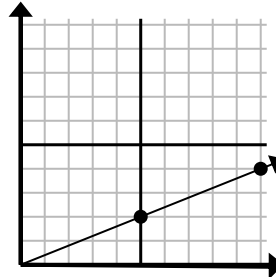
- A. (5 8)
 B. (7 35)
 C. (3 15)
 D. (6 30)

8)



- A. (25 5)
 B. (15 3)
 C. (35 7)
 D. (11 4)

9)



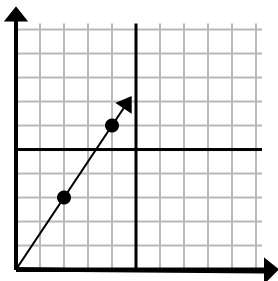
- A. (20 8)
 B. (14 6)
 C. (15 6)
 D. (25 10)

1. _____
 2. _____
 3. _____
 4. _____
 5. _____
 6. _____
 7. _____
 8. _____
 9. _____



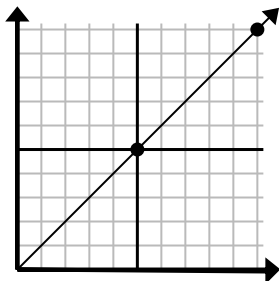
Определите, какой вариант представляет собой точку на линии, если она будет продолжаться.

1)



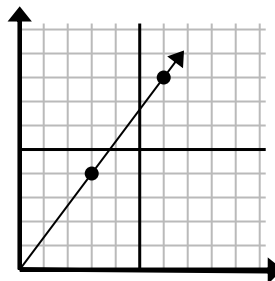
- A. (6 9)
 B. (5 4)
 C. (12 18)
 D. (14 21)

2)



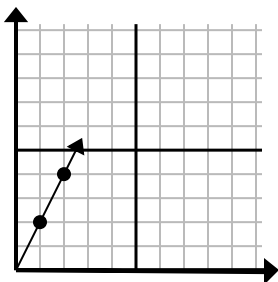
- A. (30 30)
 B. (15 15)
 C. (15 7)
 D. (20 20)

3)



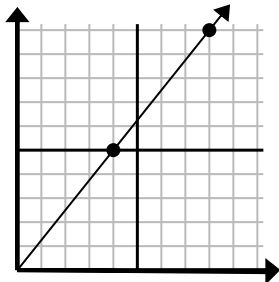
- A. (8 5)
 B. (12 16)
 C. (9 12)
 D. (11 6)

4)



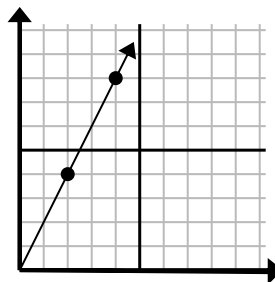
- A. (3 6)
 B. (4 8)
 C. (6 12)
 D. (7 14)

5)



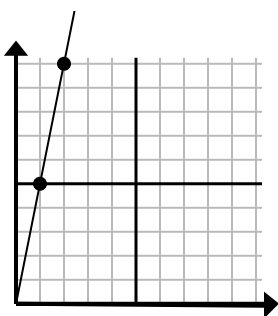
- A. (16 20)
 B. (13 10)
 C. (28 35)
 D. (12 15)

6)



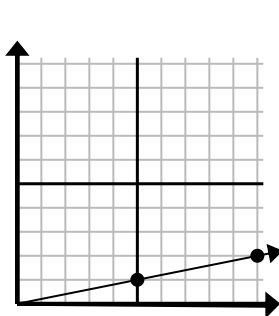
- A. (14 28)
 B. (7 8)
 C. (10 20)
 D. (6 12)

7)



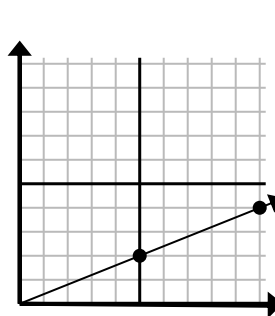
- A. (5 8)
 B. (7 35)
 C. (3 15)
 D. (6 30)

8)



- A. (25 5)
 B. (15 3)
 C. (35 7)
 D. (11 4)

9)



- A. (20 8)
 B. (14 6)
 C. (15 6)
 D. (25 10)

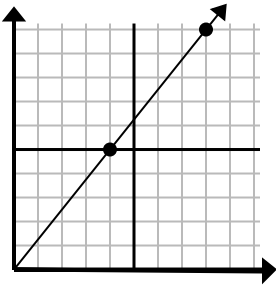
ОТВЕТЫ1. **A** 2. **B** 3. **C** 4. **A** 5. **D** 6. **D** 7. **C** 8. **B** 9. **C**



Определите, какой вариант представляет собой точку на линии, если она будет продолжаться.

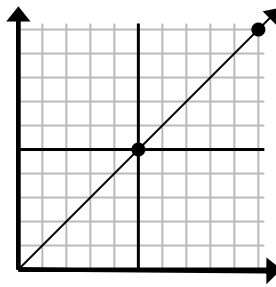
Ответы

1)



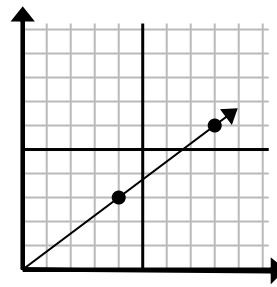
- A. (20 25)
 B. (12 15)
 C. (24 30)
 D. (11 10)

2)



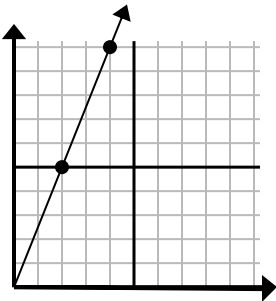
- A. (15 15)
 B. (12 10)
 C. (14 6)
 D. (25 25)

3)



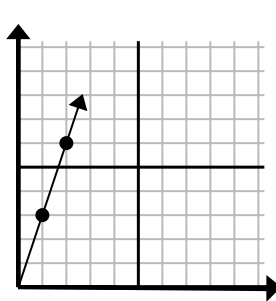
- A. (28 21)
 B. (12 9)
 C. (24 18)
 D. (16 12)

4)



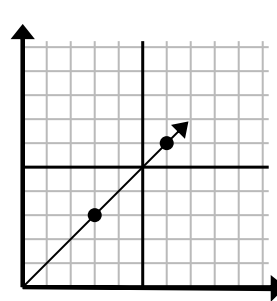
- A. (6 15)
 B. (5 9)
 C. (8 20)
 D. (12 30)

5)



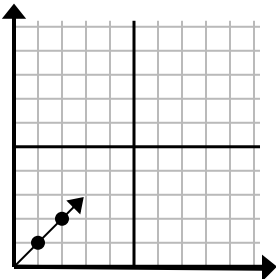
- A. (4 12)
 B. (3 9)
 C. (4 6)
 D. (7 6)

6)



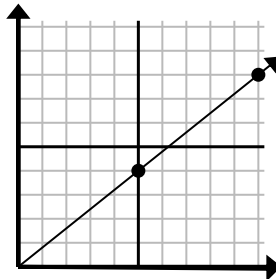
- A. (12 12)
 B. (9 9)
 C. (18 18)
 D. (9 5)

7)



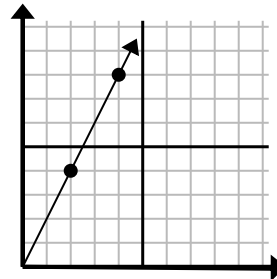
- A. (5 6)
 B. (3 3)
 C. (5 5)
 D. (7 3)

8)



- A. (15 12)
 B. (35 28)
 C. (14 8)
 D. (14 5)

9)

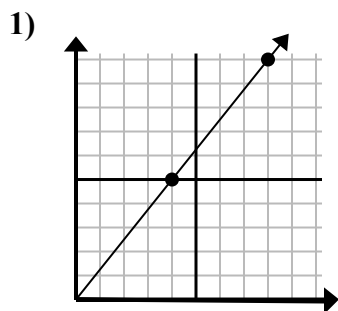


- A. (6 12)
 B. (7 9)
 C. (10 20)
 D. (8 16)

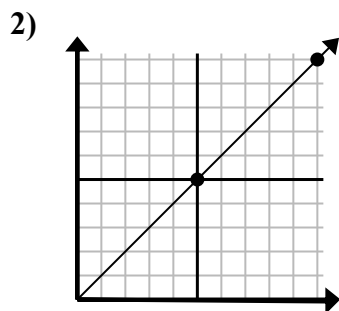
1. _____
 2. _____
 3. _____
 4. _____
 5. _____
 6. _____
 7. _____
 8. _____
 9. _____



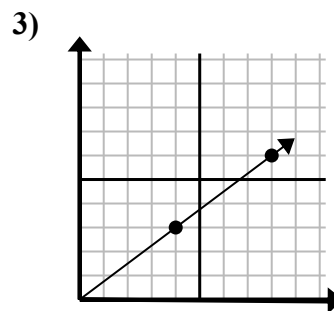
Определите, какой вариант представляет собой точку на линии, если она будет продолжаться.



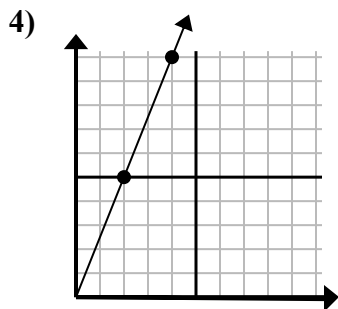
- A. (20 25)
B. (12 15)
C. (24 30)
D. (11 10)



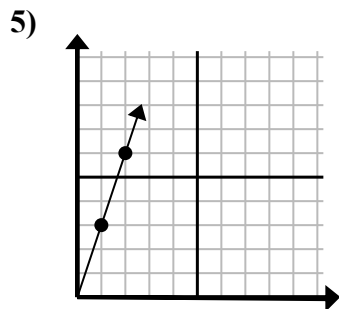
- A. (15 15)
B. (12 10)
C. (14 6)
D. (25 25)



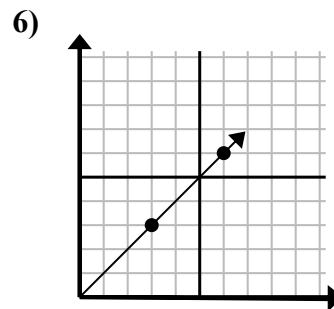
- A. (28 21)
B. (12 9)
C. (24 18)
D. (16 12)



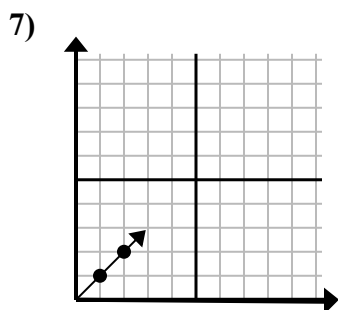
- A. (6 15)
B. (5 9)
C. (8 20)
D. (12 30)



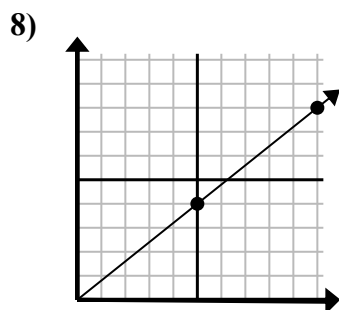
- A. (4 12)
B. (3 9)
C. (4 6)
D. (7 6)



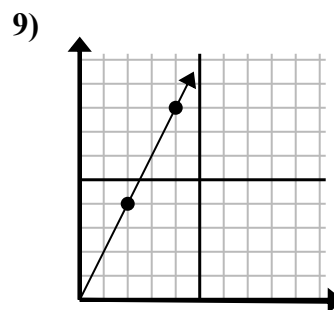
- A. (12 12)
B. (9 9)
C. (18 18)
D. (9 5)



- A. (5 6)
B. (3 3)
C. (5 5)
D. (7 3)



- A. (15 12)
B. (35 28)
C. (14 8)
D. (14 5)

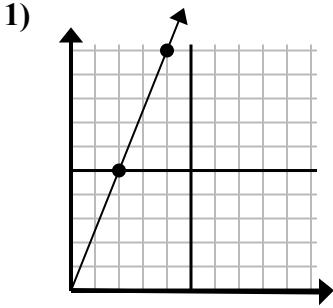


- A. (6 12)
B. (7 9)
C. (10 20)
D. (8 16)

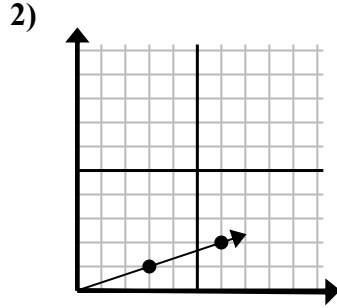
ОТВЕТЫ1. **B**2. **A**3. **B**4. **A**5. **B**6. **B**7. **B**8. **A**9. **A**



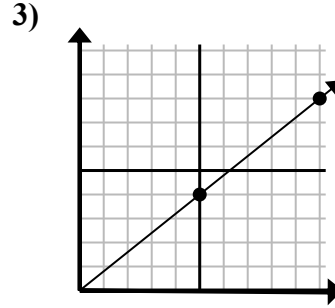
Определите, какой вариант представляет собой точку на линии, если она будет продолжаться.

Ответы

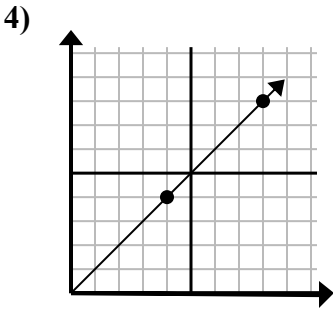
- A. (12 30)
B. (8 20)
C. (8 10)
D. (6 15)



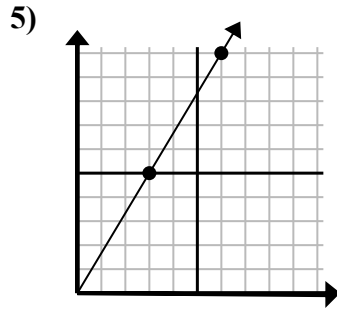
- A. (9 3)
B. (10 6)
C. (15 5)
D. (18 6)



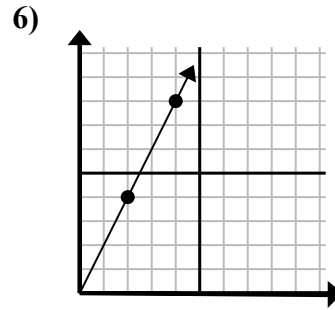
- A. (11 9)
B. (15 12)
C. (20 16)
D. (25 20)



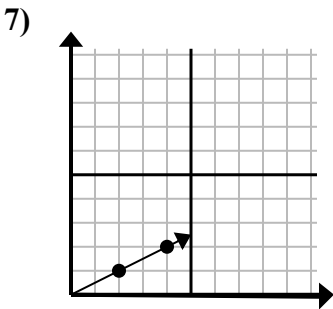
- A. (16 16)
B. (12 12)
C. (13 5)
D. (28 28)



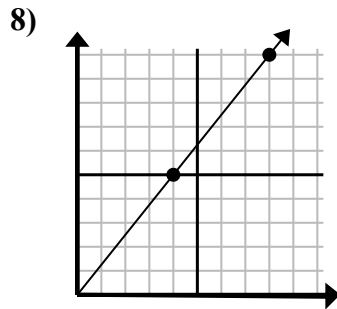
- A. (8 10)
B. (15 25)
C. (7 6)
D. (9 15)



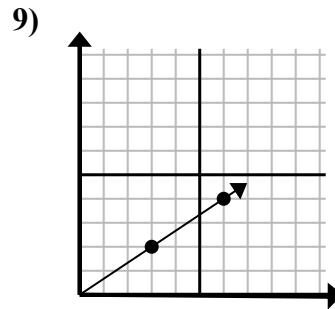
- A. (6 5)
B. (6 12)
C. (12 24)
D. (8 16)



- A. (9 2)
B. (6 3)
C. (14 7)
D. (7 4)



- A. (9 10)
B. (12 15)
C. (20 25)
D. (24 30)

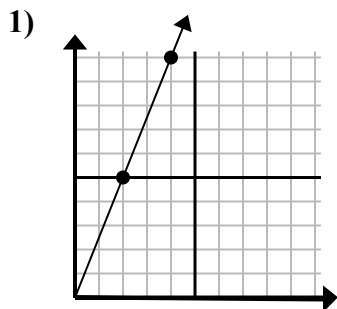


- A. (18 12)
B. (8 7)
C. (11 5)
D. (9 6)

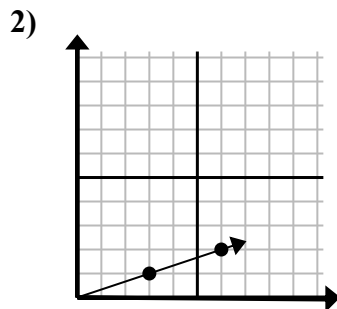
1. _____
2. _____
3. _____
4. _____
5. _____
6. _____
7. _____
8. _____
9. _____



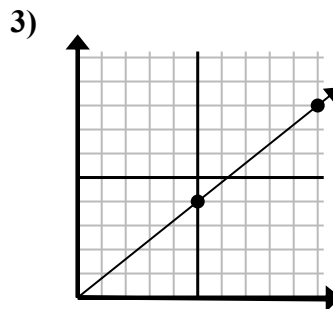
Определите, какой вариант представляет собой точку на линии, если она будет продолжаться.



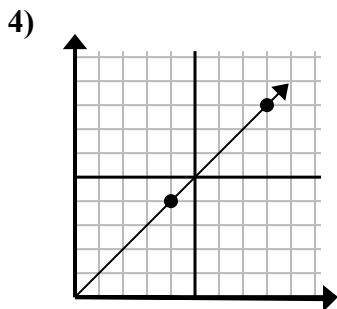
- A. (12 30)
B. (8 20)
C. (8 10)
D. (6 15)



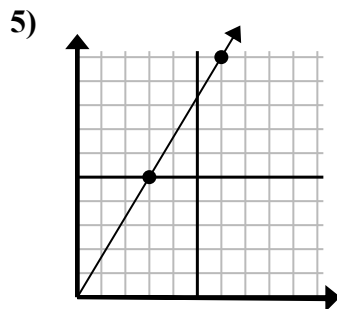
- A. (9 3)
B. (10 6)
C. (15 5)
D. (18 6)



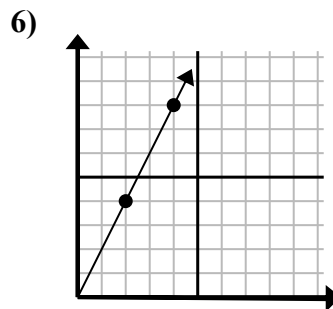
- A. (11 9)
B. (15 12)
C. (20 16)
D. (25 20)



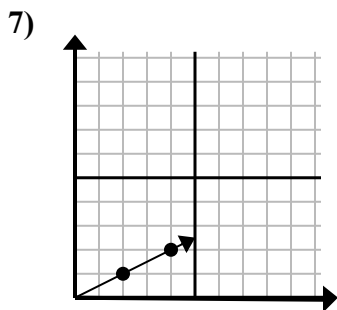
- A. (16 16)
B. (12 12)
C. (13 5)
D. (28 28)



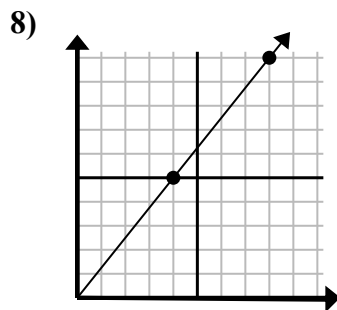
- A. (8 10)
B. (15 25)
C. (7 6)
D. (9 15)



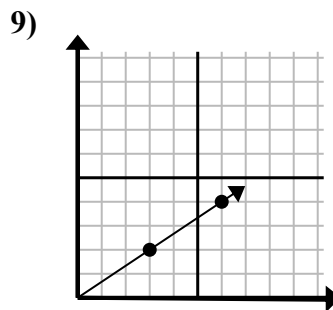
- A. (6 5)
B. (6 12)
C. (12 24)
D. (8 16)



- A. (9 2)
B. (6 3)
C. (14 7)
D. (7 4)



- A. (9 10)
B. (12 15)
C. (20 25)
D. (24 30)



- A. (18 12)
B. (8 7)
C. (11 5)
D. (9 6)

ОТВЕТЫ

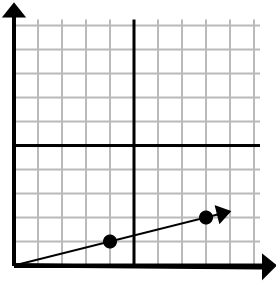
1. D
2. A
3. B
4. B
5. D
6. B
7. B
8. B
9. D



Определите, какой вариант представляет собой точку на линии, если она будет продолжаться.

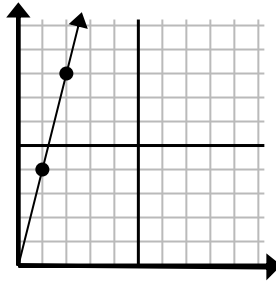
Ответы

1)



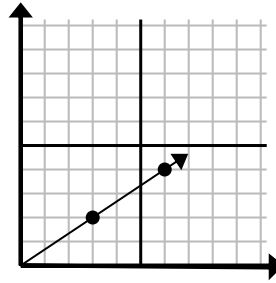
- A. (10 4)
- B. (13 5)
- C. (12 3)
- D. (9 3)

2)



- A. (3 9)
- B. (7 8)
- C. (5 5)
- D. (3 12)

3)



- A. (12 8)
- B. (9 6)
- C. (18 12)
- D. (11 3)

1. _____

2. _____

3. _____

4. _____

5. _____

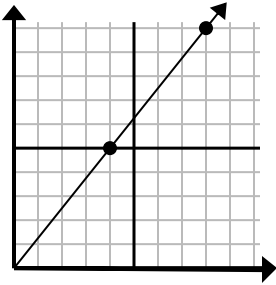
6. _____

7. _____

8. _____

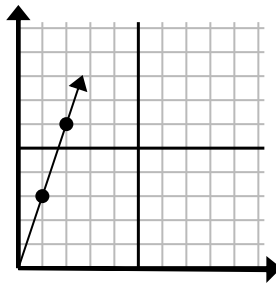
9. _____

4)



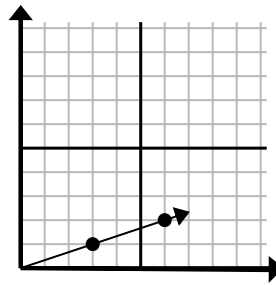
- A. (9 9)
- B. (12 15)
- C. (12 7)
- D. (28 35)

5)



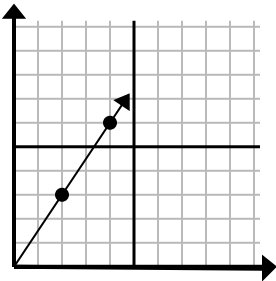
- A. (3 9)
- B. (4 12)
- C. (3 5)
- D. (7 4)

6)



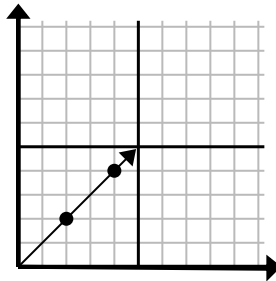
- A. (9 3)
- B. (11 4)
- C. (11 5)
- D. (15 5)

7)



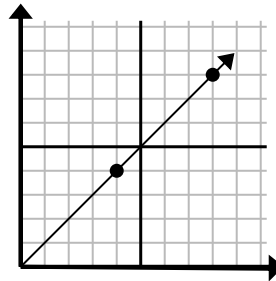
- A. (8 7)
- B. (6 4)
- C. (6 9)
- D. (12 18)

8)



- A. (6 6)
- B. (8 8)
- C. (10 10)
- D. (14 14)

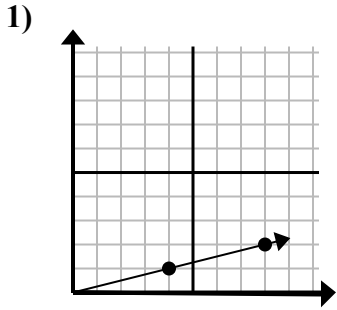
9)



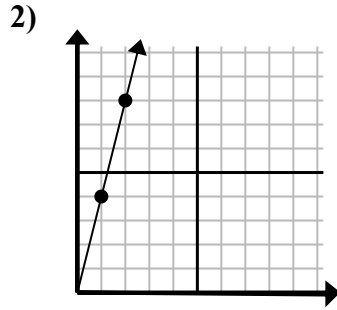
- A. (24 24)
- B. (12 12)
- C. (28 28)
- D. (20 20)



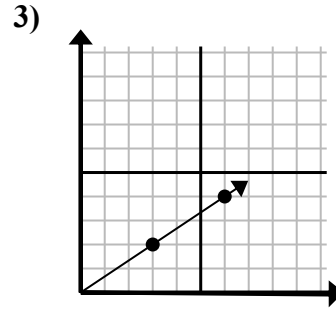
Определите, какой вариант представляет собой точку на линии, если она будет продолжаться.



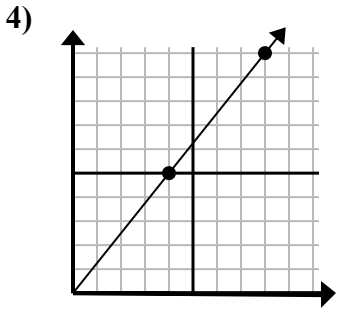
- A. (10 4)
- B. (13 5)
- C. (12 3)
- D. (9 3)



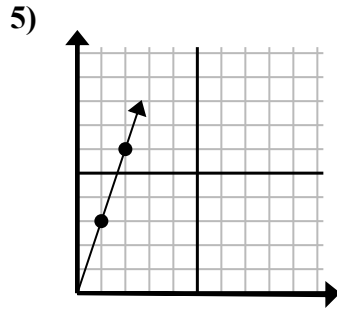
- A. (3 9)
- B. (7 8)
- C. (5 5)
- D. (3 12)



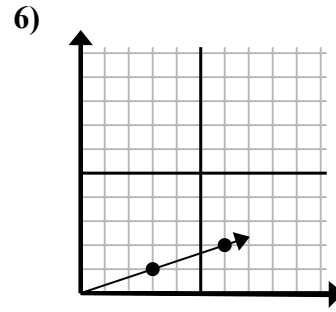
- A. (12 8)
- B. (9 6)
- C. (18 12)
- D. (11 3)



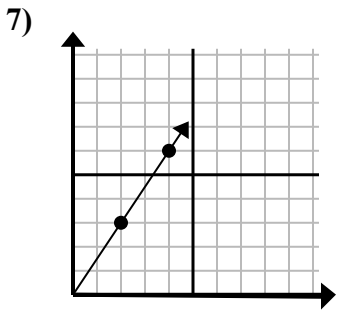
- A. (9 9)
- B. (12 15)
- C. (12 7)
- D. (28 35)



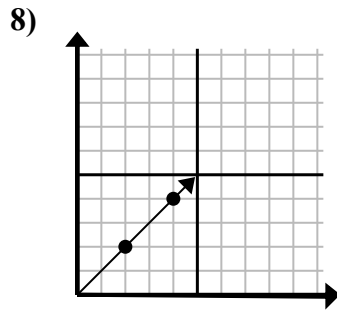
- A. (3 9)
- B. (4 12)
- C. (3 5)
- D. (7 4)



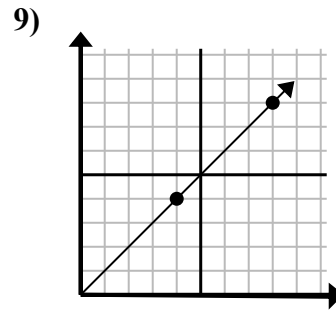
- A. (9 3)
- B. (11 4)
- C. (11 5)
- D. (15 5)



- A. (8 7)
- B. (6 4)
- C. (6 9)
- D. (12 18)



- A. (6 6)
- B. (8 8)
- C. (10 10)
- D. (14 14)



- A. (24 24)
- B. (12 12)
- C. (28 28)
- D. (20 20)

ОТВЕТЫ

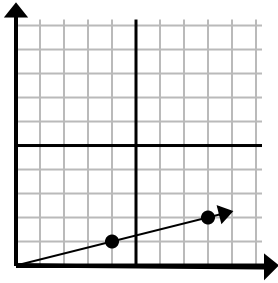
- 1. **C**
- 2. **D**
- 3. **B**
- 4. **B**
- 5. **A**
- 6. **A**
- 7. **C**
- 8. **A**
- 9. **B**



Определите, какой вариант представляет собой точку на линии, если она будет продолжаться.

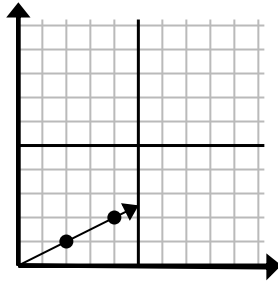
Ответы

1)



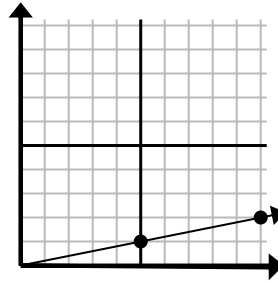
- A. (12 3)
B. (28 7)
C. (20 5)
D. (10 2)

2)



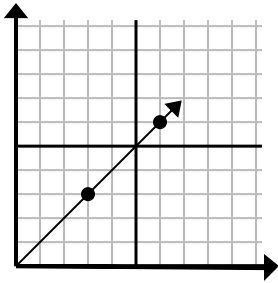
- A. (6 3)
B. (10 5)
C. (14 7)
D. (7 3)

3)



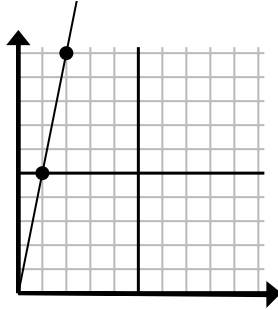
- A. (14 3)
B. (13 5)
C. (15 3)
D. (35 7)

4)



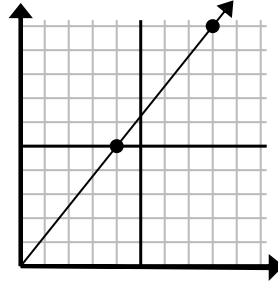
- A. (8 7)
B. (15 15)
C. (9 9)
D. (21 21)

5)



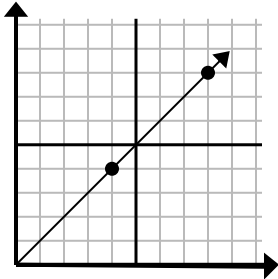
- A. (3 15)
B. (3 7)
C. (7 35)
D. (5 25)

6)



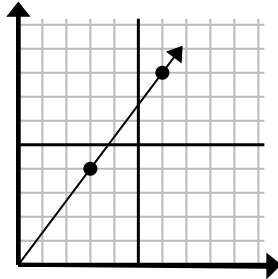
- A. (12 10)
B. (24 30)
C. (13 9)
D. (12 15)

7)



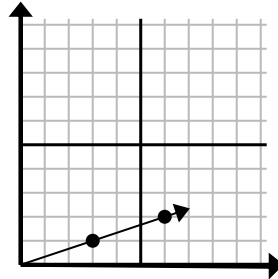
- A. (12 8)
B. (12 12)
C. (13 8)
D. (20 20)

8)



- A. (21 28)
B. (8 6)
C. (9 12)
D. (9 7)

9)



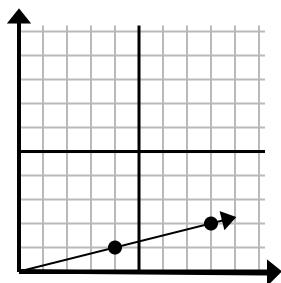
- A. (15 5)
B. (9 3)
C. (10 2)
D. (12 4)

1. _____
2. _____
3. _____
4. _____
5. _____
6. _____
7. _____
8. _____
9. _____



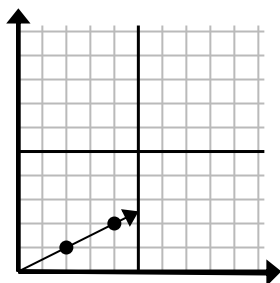
Определите, какой вариант представляет собой точку на линии, если она будет продолжаться.

1)



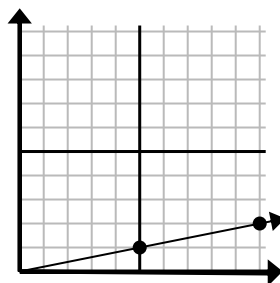
- A. (12 3)
B. (28 7)
C. (20 5)
D. (10 2)

2)



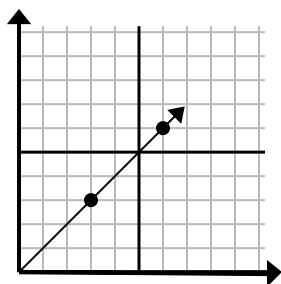
- A. (6 3)
B. (10 5)
C. (14 7)
D. (7 3)

3)



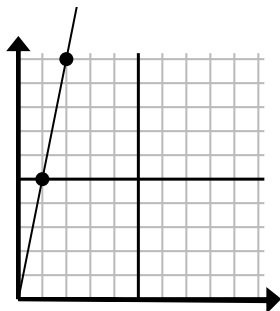
- A. (14 3)
B. (13 5)
C. (15 3)
D. (35 7)

4)



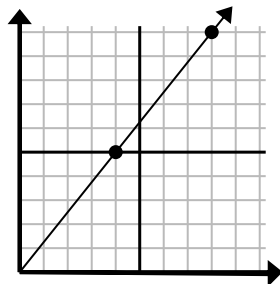
- A. (8 7)
B. (15 15)
C. (9 9)
D. (21 21)

5)



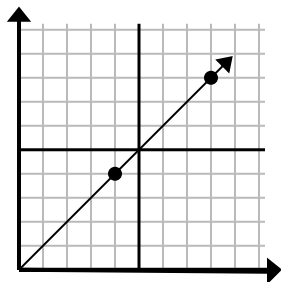
- A. (3 15)
B. (3 7)
C. (7 35)
D. (5 25)

6)



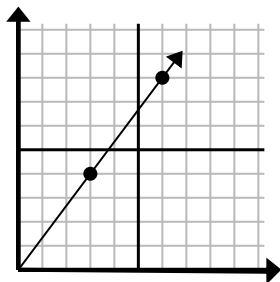
- A. (12 10)
B. (24 30)
C. (13 9)
D. (12 15)

7)



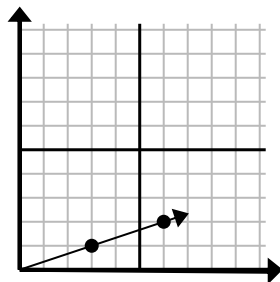
- A. (12 8)
B. (12 12)
C. (13 8)
D. (20 20)

8)



- A. (21 28)
B. (8 6)
C. (9 12)
D. (9 7)

9)



- A. (15 5)
B. (9 3)
C. (10 2)
D. (12 4)

ОТВЕТЫ1. **A** 2. **A** 3. **C** 4. **C** 5. **A** 6. **D** 7. **B** 8. **C** 9. **B**