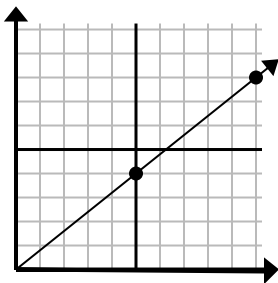




Определите, какой вариант представляет собой точку на линии, если она будет продолжаться.

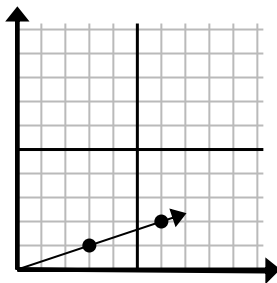
Ответы

1)



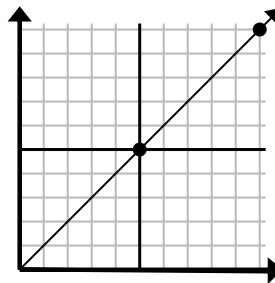
- A. (35 28)
 B. (12 9)
 C. (15 12)
 D. (12 5)

2)



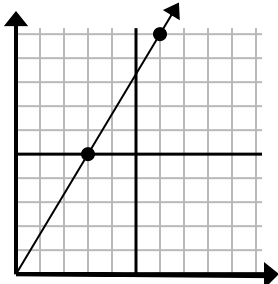
- A. (9 3)
 B. (11 6)
 C. (9 5)
 D. (18 6)

3)



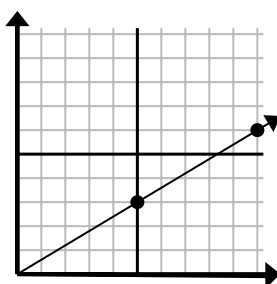
- A. (15 15)
 B. (11 10)
 C. (11 8)
 D. (11 9)

4)



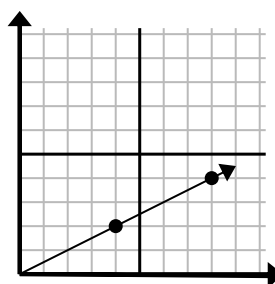
- A. (8 8)
 B. (21 35)
 C. (9 15)
 D. (15 25)

5)



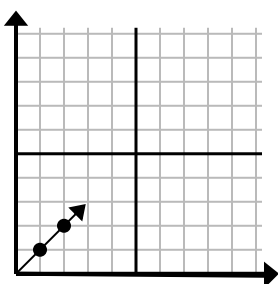
- A. (35 21)
 B. (14 6)
 C. (25 15)
 D. (15 9)

6)



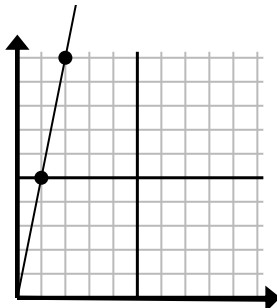
- A. (11 7)
 B. (13 7)
 C. (10 4)
 D. (12 6)

7)



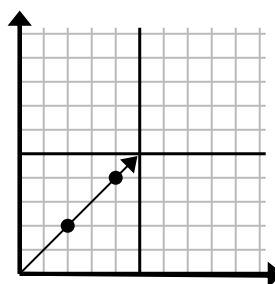
- A. (7 6)
 B. (7 5)
 C. (7 7)
 D. (3 3)

8)



- A. (6 30)
 B. (5 25)
 C. (3 15)
 D. (7 35)

9)



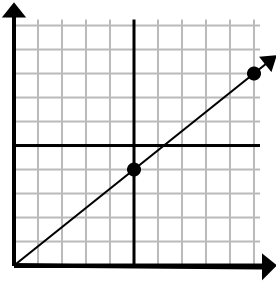
- A. (6 6)
 B. (10 10)
 C. (12 12)
 D. (7 6)

1. _____
 2. _____
 3. _____
 4. _____
 5. _____
 6. _____
 7. _____
 8. _____
 9. _____



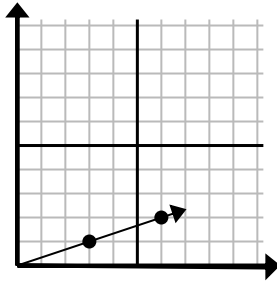
Определите, какой вариант представляет собой точку на линии, если она будет продолжаться.

1)



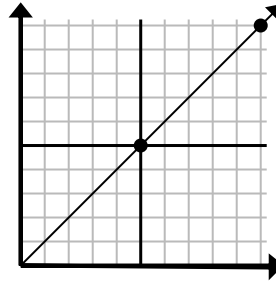
- A. (35 28)
 B. (12 9)
 C. (15 12)
 D. (12 5)

2)



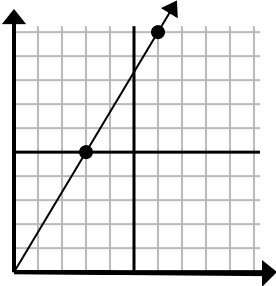
- A. (9 3)
 B. (11 6)
 C. (9 5)
 D. (18 6)

3)



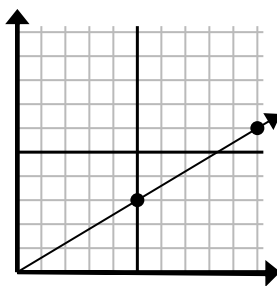
- A. (15 15)
 B. (11 10)
 C. (11 8)
 D. (11 9)

4)



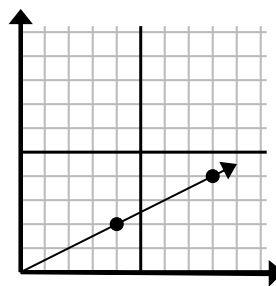
- A. (8 8)
 B. (21 35)
 C. (9 15)
 D. (15 25)

5)



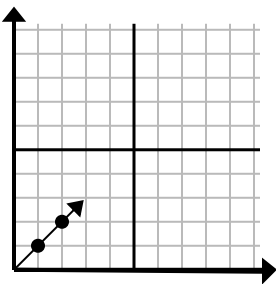
- A. (35 21)
 B. (14 6)
 C. (25 15)
 D. (15 9)

6)



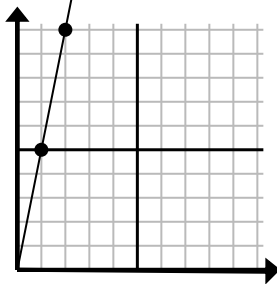
- A. (11 7)
 B. (13 7)
 C. (10 4)
 D. (12 6)

7)



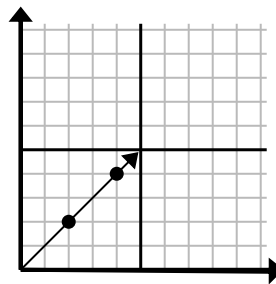
- A. (7 6)
 B. (7 5)
 C. (7 7)
 D. (3 3)

8)



- A. (6 30)
 B. (5 25)
 C. (3 15)
 D. (7 35)

9)



- A. (6 6)
 B. (10 10)
 C. (12 12)
 D. (7 6)

ОТВЕТЫ

1. C
 2. A
 3. A
 4. C
 5. D
 6. D
 7. D
 8. C
 9. A