



Нарисуйте круг в перечисленных координатах.

1) (0 6)



2) (3 2)



3) (7 8)



4) (5 8)



5) (5 6)



6) (5 9)



7) (4 3)



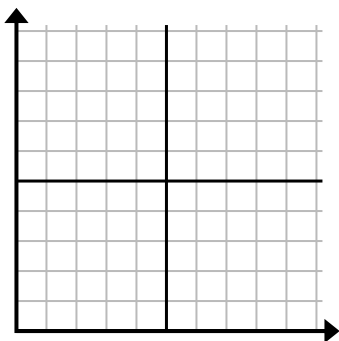
8) (6 8)



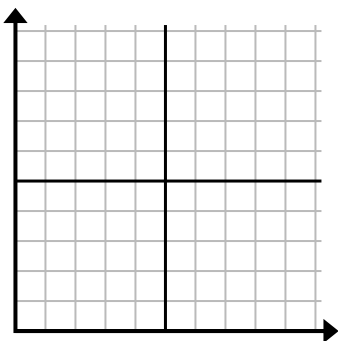
9) (4 7)



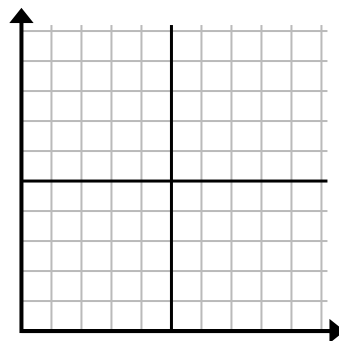
10) (1 0)



11) (9 7)



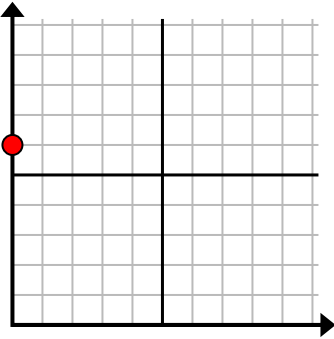
12) (6 10)



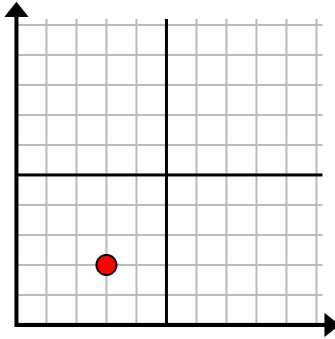


Нарисуйте круг в перечисленных координатах.

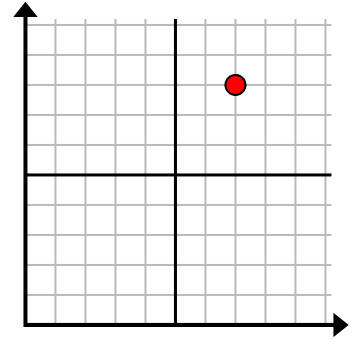
1) (0 6)



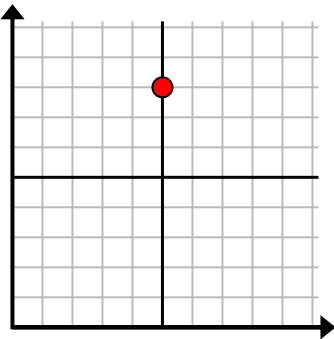
2) (3 2)



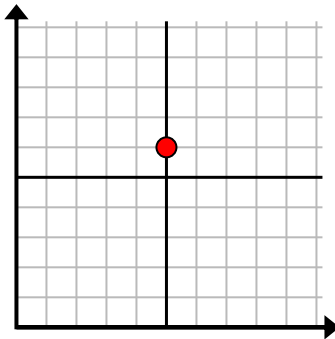
3) (7 8)



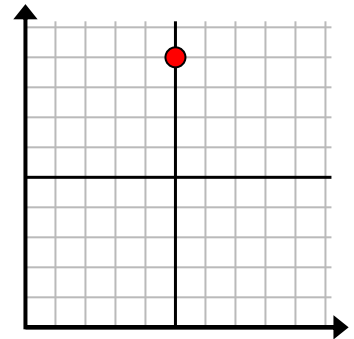
4) (5 8)



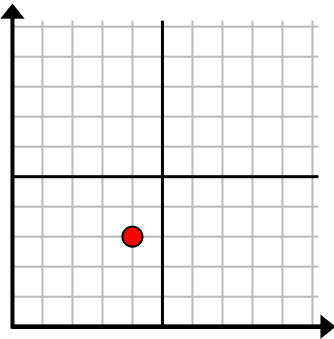
5) (5 6)



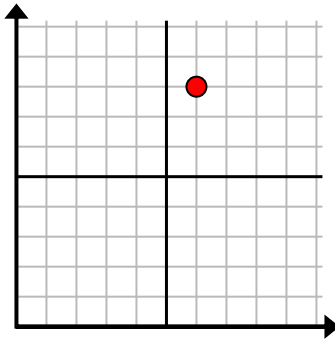
6) (5 9)



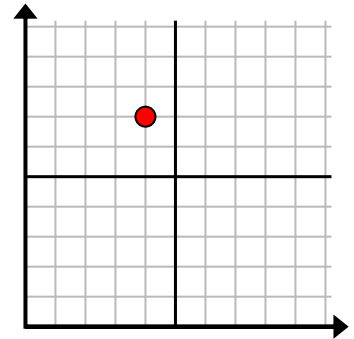
7) (4 3)



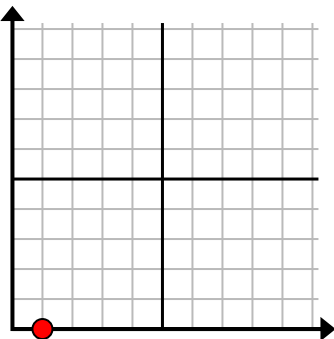
8) (6 8)



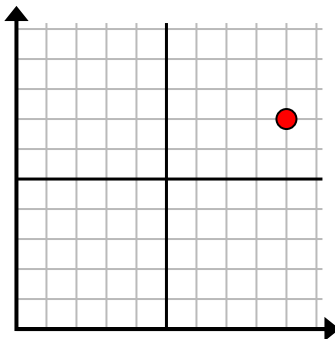
9) (4 7)



10) (1 0)



11) (9 7)



12) (6 10)

