
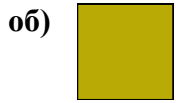




Сравните длину двух блоков.



**Ответы**

об. 0 1/2 1 - 2

1. \_\_\_\_\_

2. \_\_\_\_\_

3. \_\_\_\_\_

4. \_\_\_\_\_

5. \_\_\_\_\_

6. \_\_\_\_\_

7. \_\_\_\_\_


8. \_\_\_\_\_

9. \_\_\_\_\_



Сравните длину двух блоков.

об)



1)




2)



3)



4)



5)



6)



7)



8)



9)

**Ответы**об. 0 1/2 1 - 21. 5 12 - 132. 3 7 - 83. 1 1/2 3 - 44. 4 10 - 115. 5 1/2 13 - 146. 2 1/2 6 - 77. 4 1/2 11 - 128. 3 1/2 8 - 99. 1 2 - 3