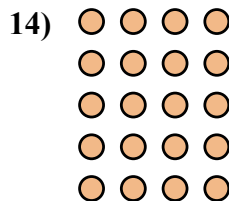
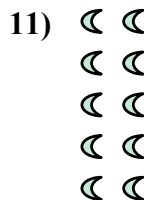


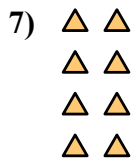
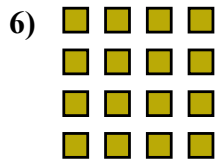
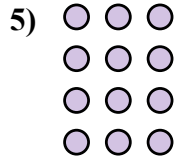

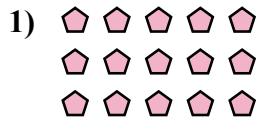




Запишите каждую совокупность в виде суммы и решите ее.



ОТВЕТЫ

об. 3+3=6

1. _____

2. _____

3. _____

4. _____

5. _____

6. _____

7. _____

8. _____

9. _____

10. _____

11. _____

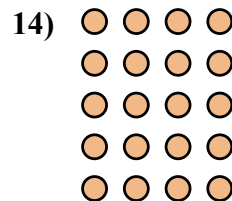
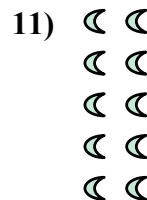



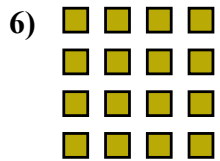
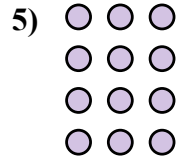


12. _____

13. _____

14. _____



Запишите каждую совокупность в виде суммы и решите ее.

ОТВЕТЫоб. 3+3=61. 5+5+5=152. 3+3+3=93. 5+5=104. 2+2+2=65. 3+3+3+3=126. 4+4+4+4=167. 2+2+2+2=88. 4+4+4=129. 5+5+5+5+5=2510. 5+5+5+5=2011. 2+2+2+2+2=1012. 4+4=813. 2+2=414. 4+4+4+4+4=20